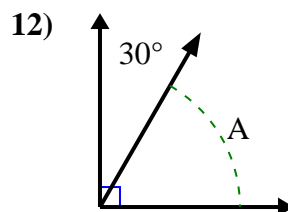
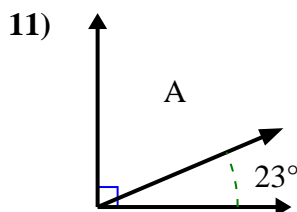
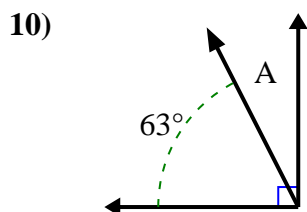
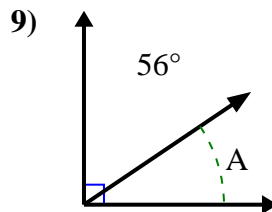
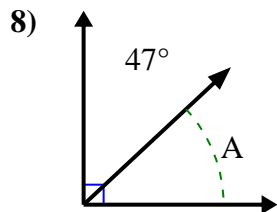
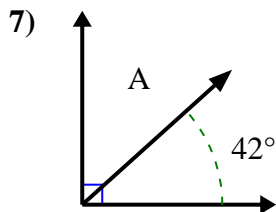
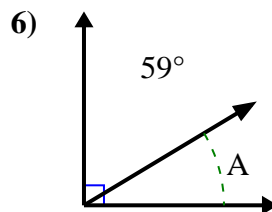
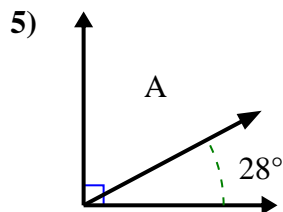
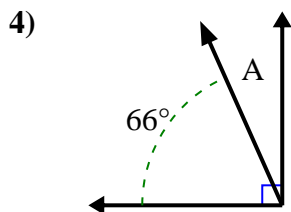
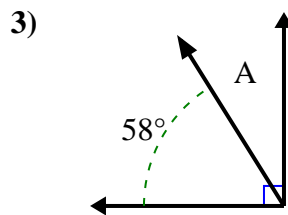
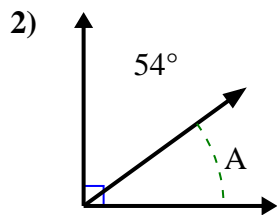
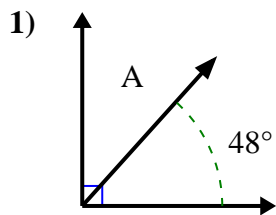




Find the value of 'A' in the set of complementary angles.

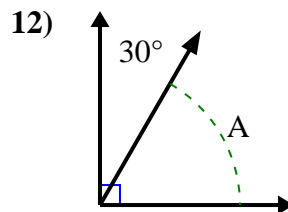
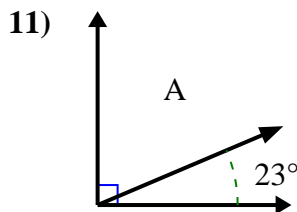
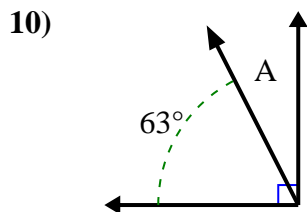
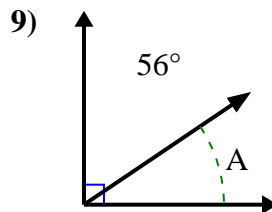
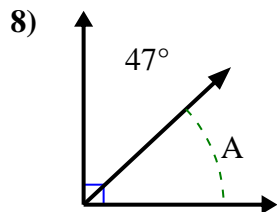
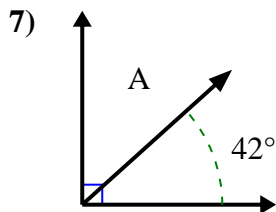
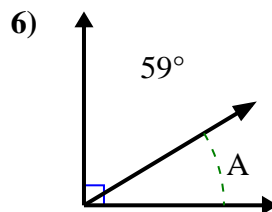
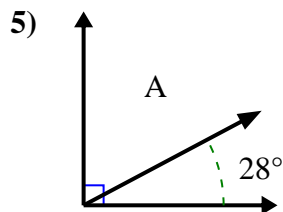
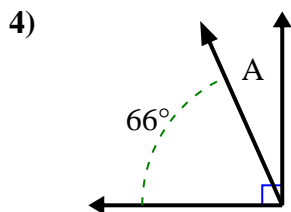
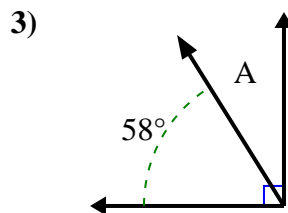
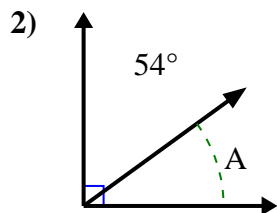
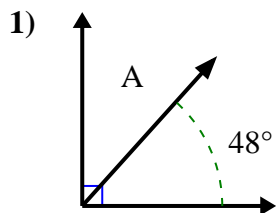


Answers

- 1. \_\_\_\_\_
- 2. \_\_\_\_\_
- 3. \_\_\_\_\_
- 4. \_\_\_\_\_
- 5. \_\_\_\_\_
- 6. \_\_\_\_\_
- 7. \_\_\_\_\_
- 8. \_\_\_\_\_
- 9. \_\_\_\_\_
- 10. \_\_\_\_\_
- 11. \_\_\_\_\_
- 12. \_\_\_\_\_



Find the value of 'A' in the set of complementary angles.



Answers

1. **42°**

2. **36°**

3. **32°**

4. **24°**

5. **62°**

6. **31°**

7. **48°**

8. **43°**

9. **34°**

10. **27°**

11. **67°**

12. **60°**