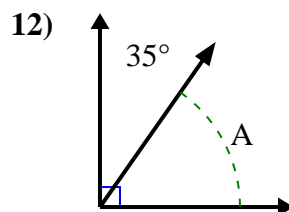
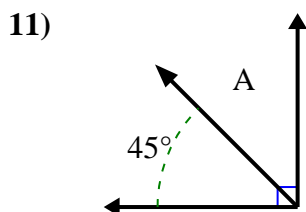
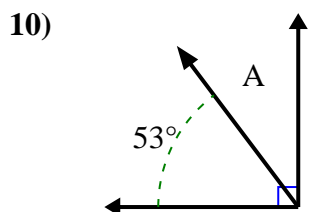
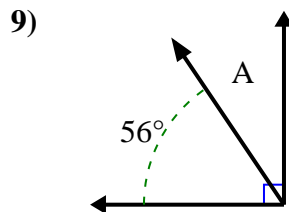
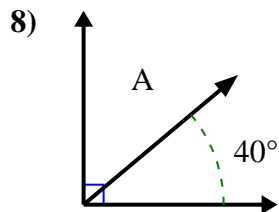
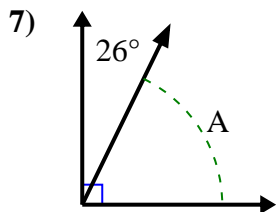
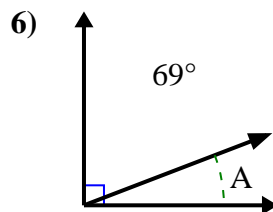
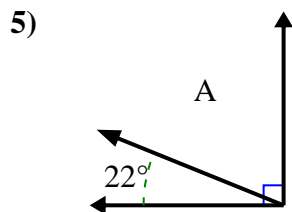
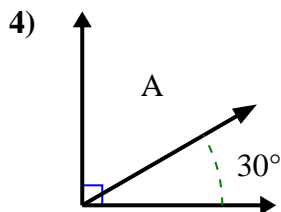
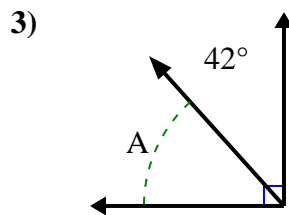
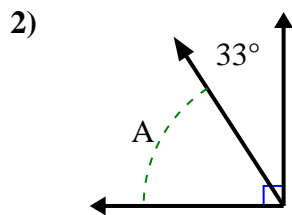
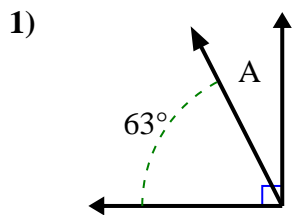




Find the value of 'A' in the set of complementary angles.

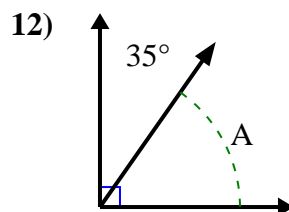
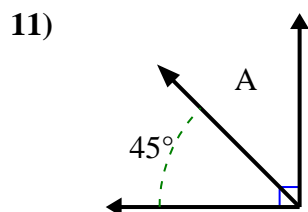
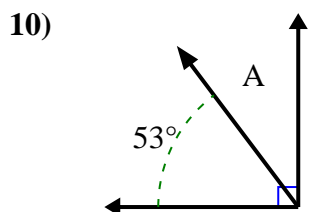
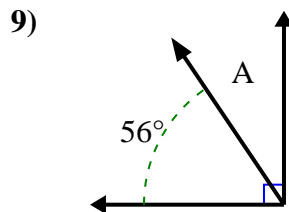
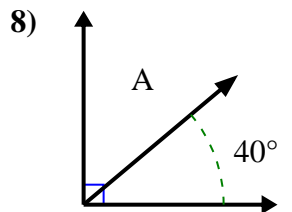
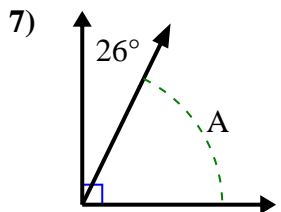
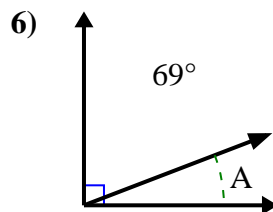
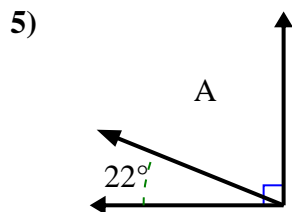
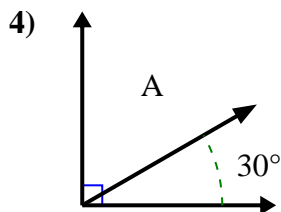
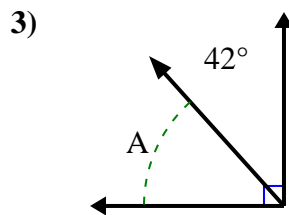
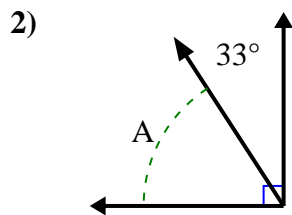
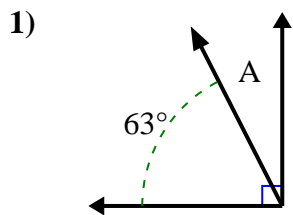
Answers



1. \_\_\_\_\_
2. \_\_\_\_\_
3. \_\_\_\_\_
4. \_\_\_\_\_
5. \_\_\_\_\_
6. \_\_\_\_\_
7. \_\_\_\_\_
8. \_\_\_\_\_
9. \_\_\_\_\_
10. \_\_\_\_\_
11. \_\_\_\_\_
12. \_\_\_\_\_



Find the value of 'A' in the set of complementary angles.



Answers

1. 27°

2. 57°

3. 48°

4. 60°

5. 68°

6. 21°

7. 64°

8. 50°

9. 34°

10. 37°

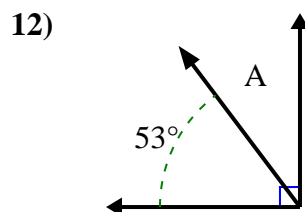
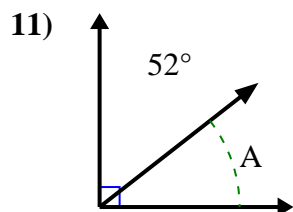
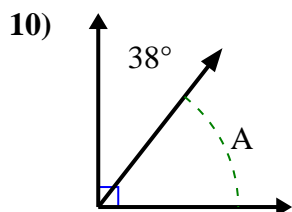
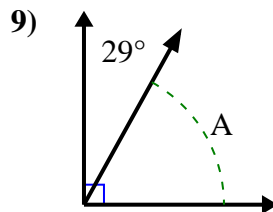
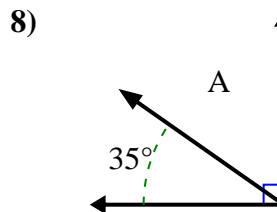
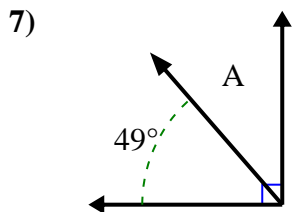
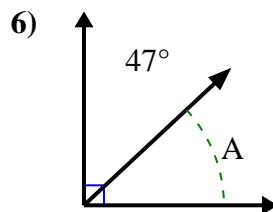
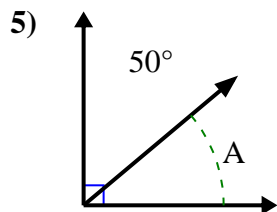
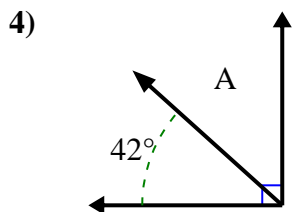
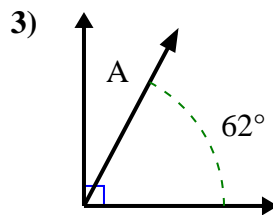
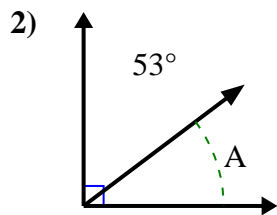
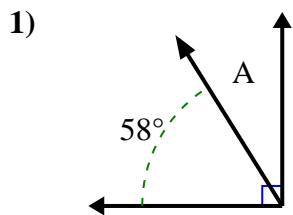
11. 45°

12. 55°



Find the value of 'A' in the set of complementary angles.

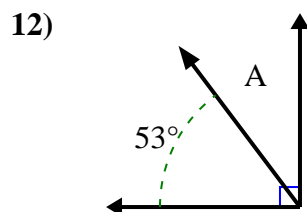
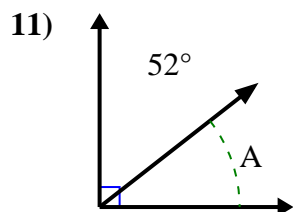
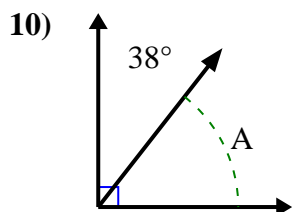
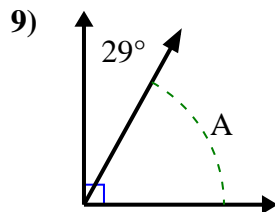
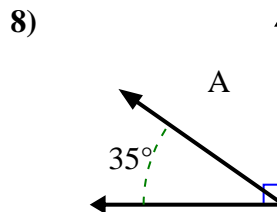
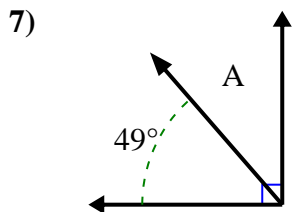
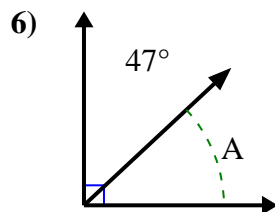
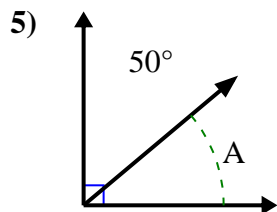
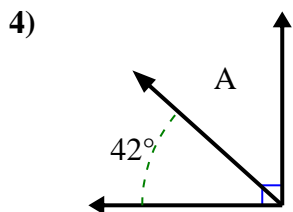
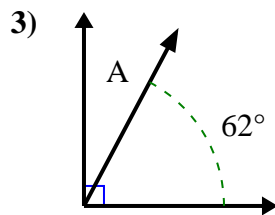
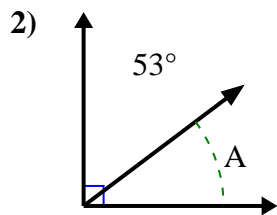
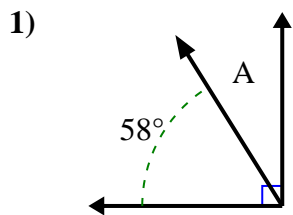
Answers



1. \_\_\_\_\_
2. \_\_\_\_\_
3. \_\_\_\_\_
4. \_\_\_\_\_
5. \_\_\_\_\_
6. \_\_\_\_\_
7. \_\_\_\_\_
8. \_\_\_\_\_
9. \_\_\_\_\_
10. \_\_\_\_\_
11. \_\_\_\_\_
12. \_\_\_\_\_



Find the value of 'A' in the set of complementary angles.



Answers

1. 32°

2. 37°

3. 28°

4. 48°

5. 40°

6. 43°

7. 41°

8. 55°

9. 61°

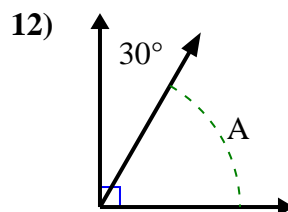
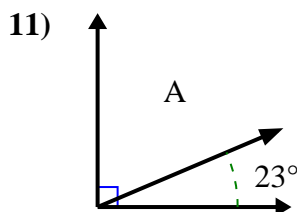
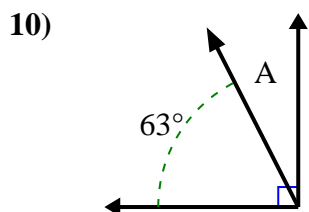
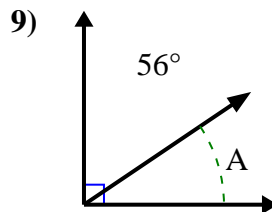
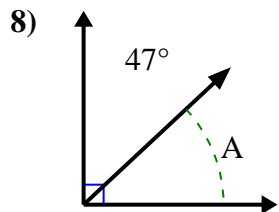
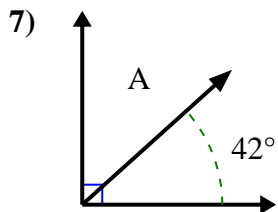
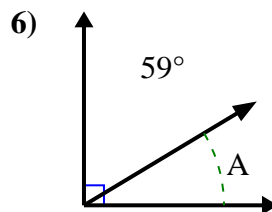
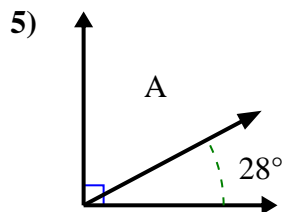
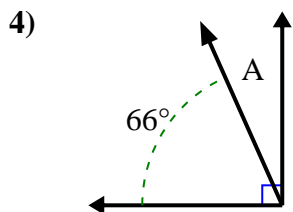
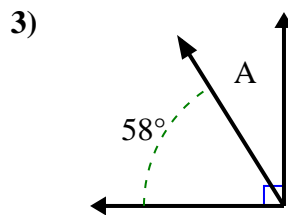
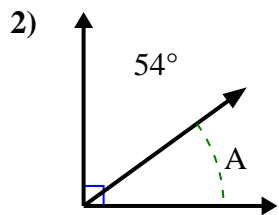
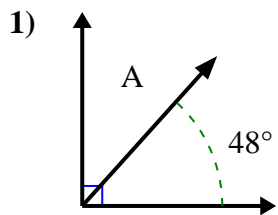
10. 52°

11. 38°

12. 37°



Find the value of 'A' in the set of complementary angles.

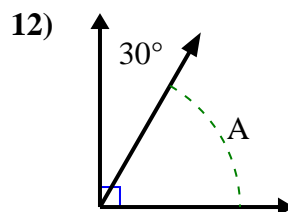
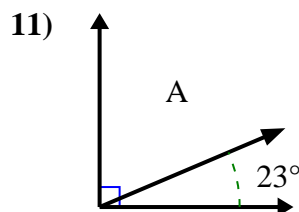
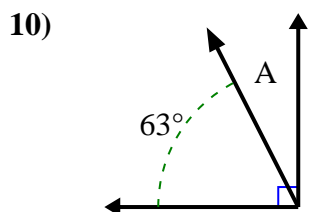
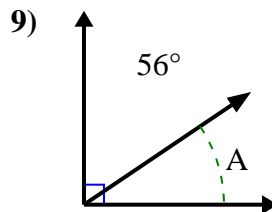
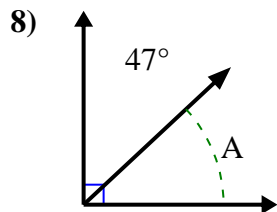
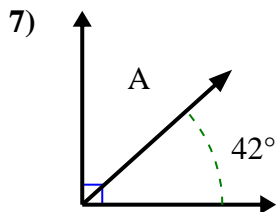
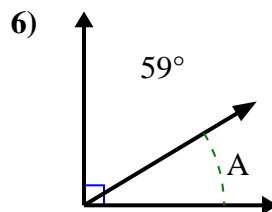
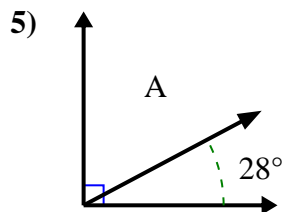
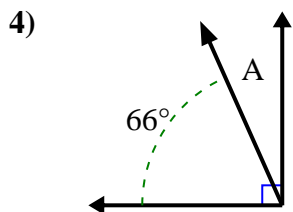
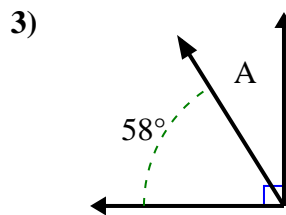
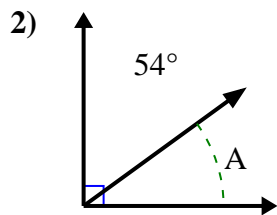
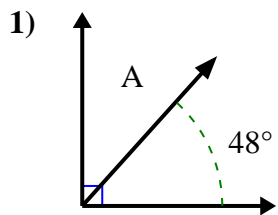


Answers

1. \_\_\_\_\_
2. \_\_\_\_\_
3. \_\_\_\_\_
4. \_\_\_\_\_
5. \_\_\_\_\_
6. \_\_\_\_\_
7. \_\_\_\_\_
8. \_\_\_\_\_
9. \_\_\_\_\_
10. \_\_\_\_\_
11. \_\_\_\_\_
12. \_\_\_\_\_



Find the value of 'A' in the set of complementary angles.



Answers

1. 42°

2. 36°

3. 32°

4. 24°

5. 62°

6. 31°

7. 48°

8. 43°

9. 34°

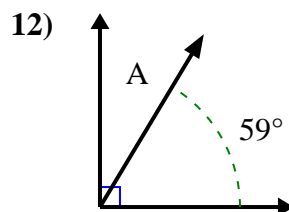
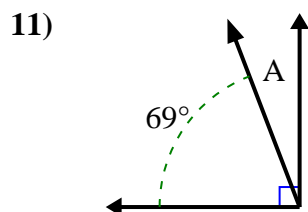
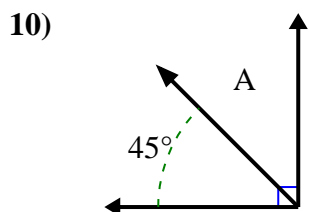
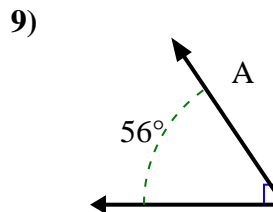
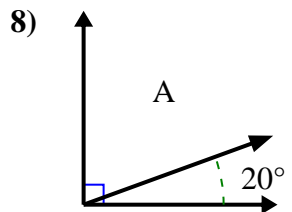
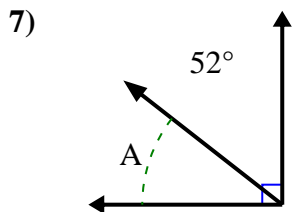
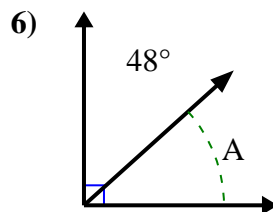
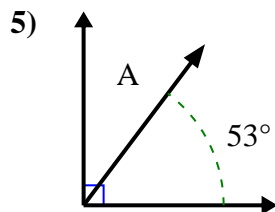
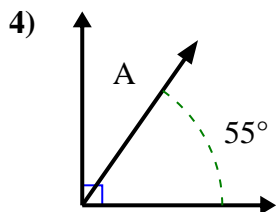
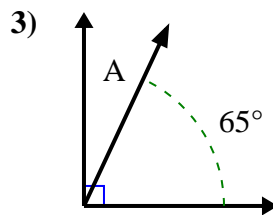
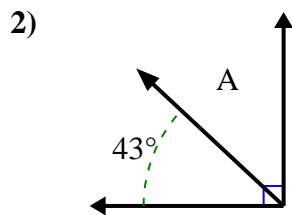
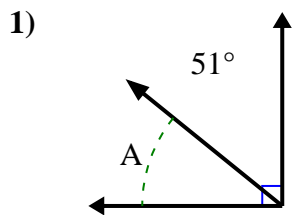
10. 27°

11. 67°

12. 60°



Find the value of 'A' in the set of complementary angles.

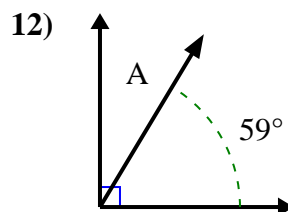
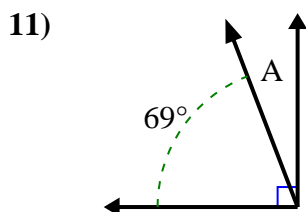
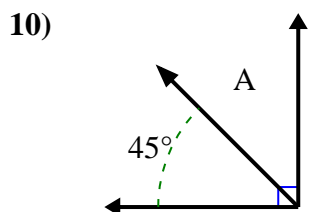
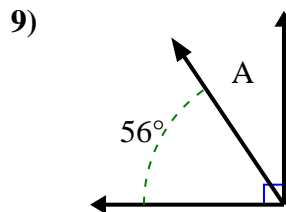
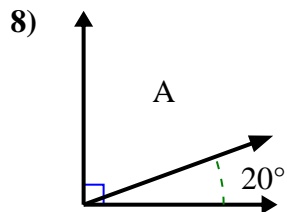
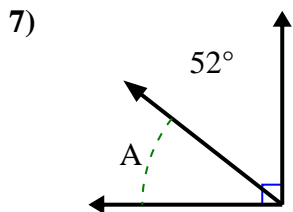
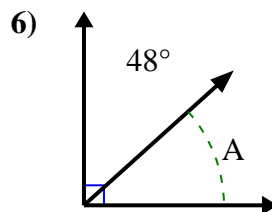
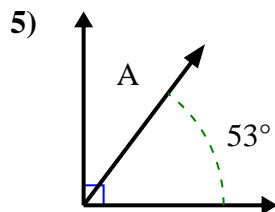
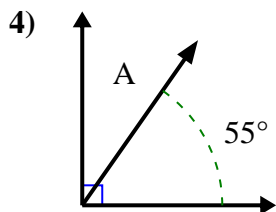
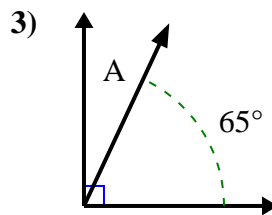
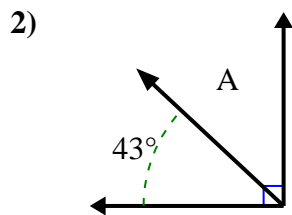
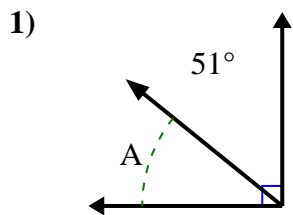


Answers

- 1. \_\_\_\_\_
- 2. \_\_\_\_\_
- 3. \_\_\_\_\_
- 4. \_\_\_\_\_
- 5. \_\_\_\_\_
- 6. \_\_\_\_\_
- 7. \_\_\_\_\_
- 8. \_\_\_\_\_
- 9. \_\_\_\_\_
- 10. \_\_\_\_\_
- 11. \_\_\_\_\_
- 12. \_\_\_\_\_



Find the value of 'A' in the set of complementary angles.



Answers

1. 39°

2. 47°

3. 25°

4. 35°

5. 37°

6. 42°

7. 38°

8. 70°

9. 34°

10. 45°

11. 21°

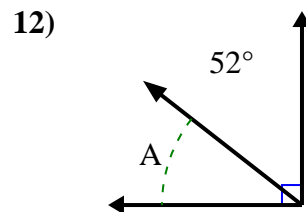
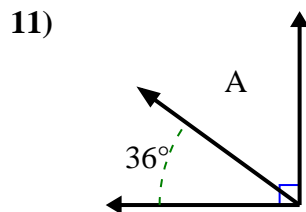
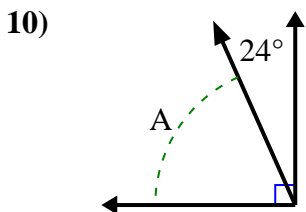
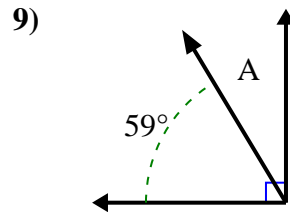
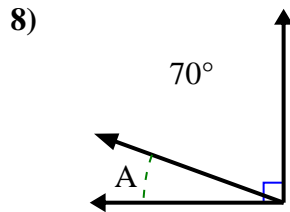
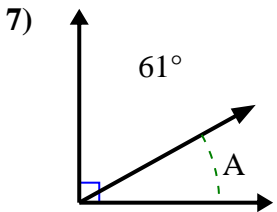
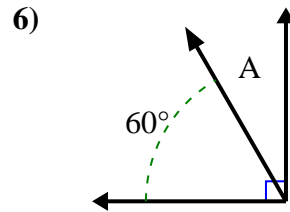
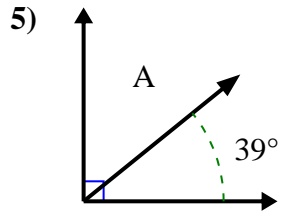
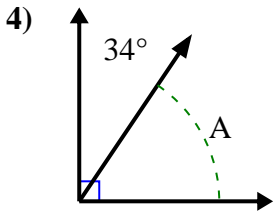
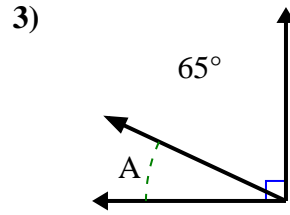
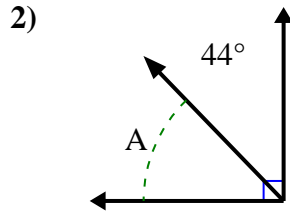
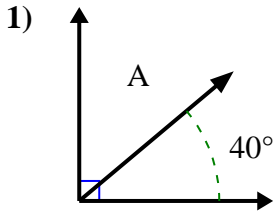
12. 31°





Find the value of 'A' in the set of complementary angles.

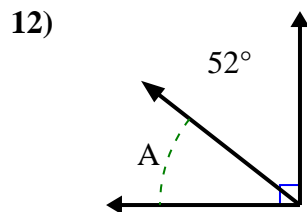
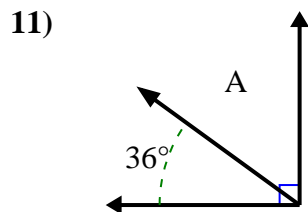
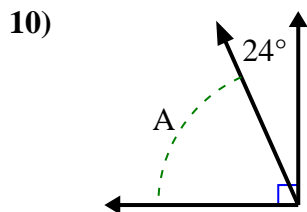
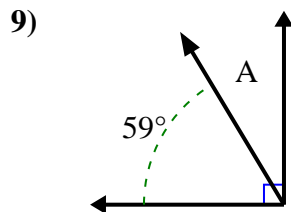
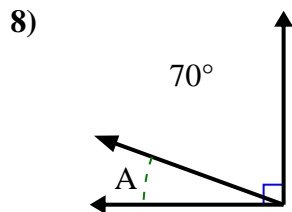
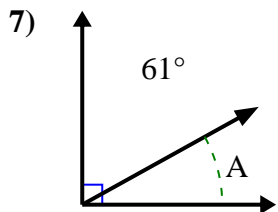
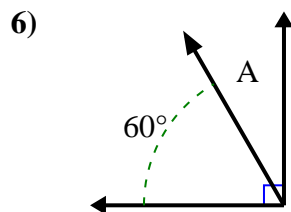
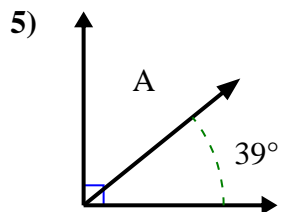
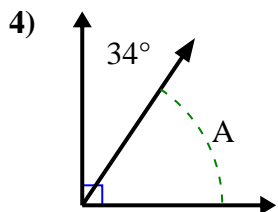
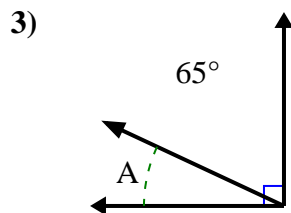
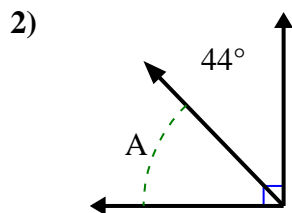
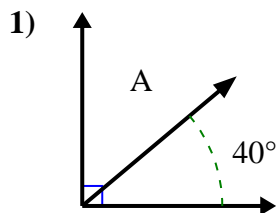
Answers



1. \_\_\_\_\_
2. \_\_\_\_\_
3. \_\_\_\_\_
4. \_\_\_\_\_
5. \_\_\_\_\_
6. \_\_\_\_\_
7. \_\_\_\_\_
8. \_\_\_\_\_
9. \_\_\_\_\_
10. \_\_\_\_\_
11. \_\_\_\_\_
12. \_\_\_\_\_



Find the value of 'A' in the set of complementary angles.



Answers

1. 50°

2. 46°

3. 25°

4. 56°

5. 51°

6. 30°

7. 29°

8. 20°

9. 31°

10. 66°

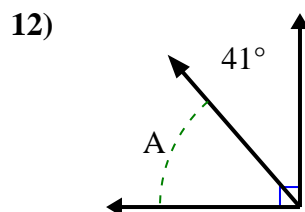
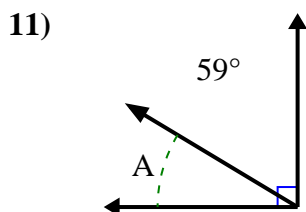
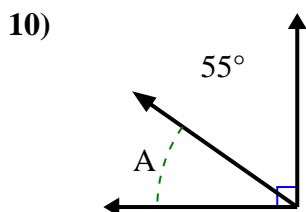
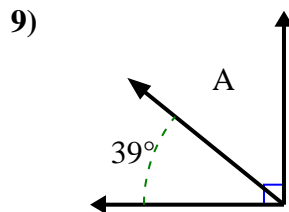
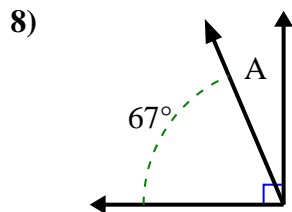
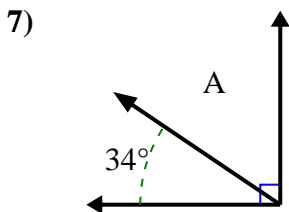
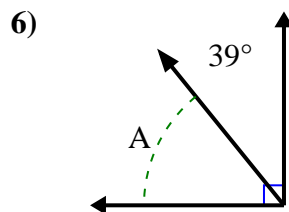
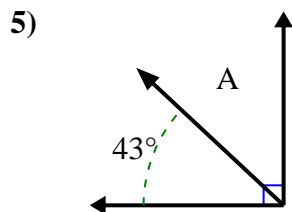
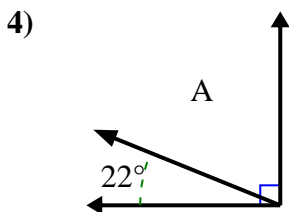
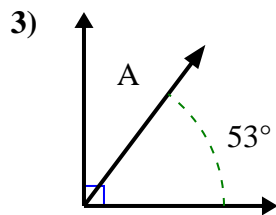
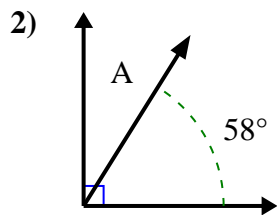
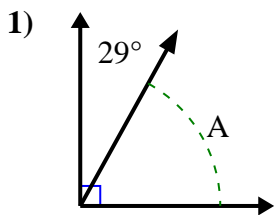
11. 54°

12. 38°



Find the value of 'A' in the set of complementary angles.

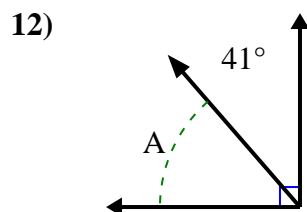
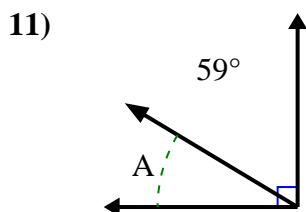
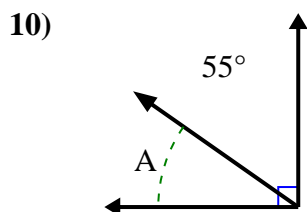
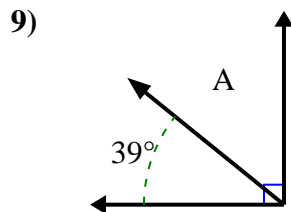
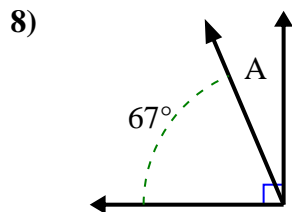
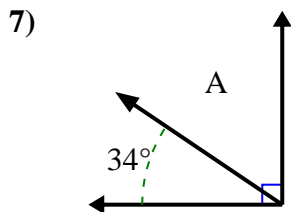
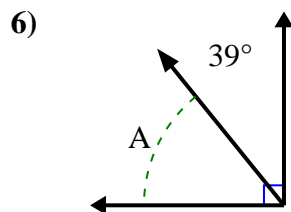
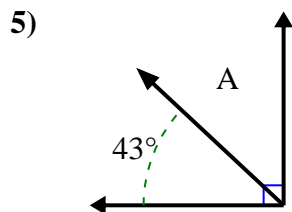
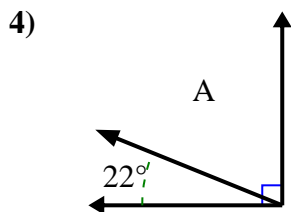
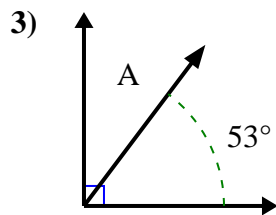
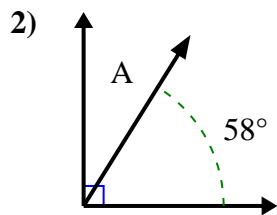
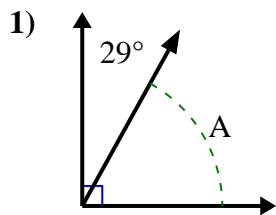
Answers



1. \_\_\_\_\_
2. \_\_\_\_\_
3. \_\_\_\_\_
4. \_\_\_\_\_
5. \_\_\_\_\_
6. \_\_\_\_\_
7. \_\_\_\_\_
8. \_\_\_\_\_
9. \_\_\_\_\_
10. \_\_\_\_\_
11. \_\_\_\_\_
12. \_\_\_\_\_



Find the value of 'A' in the set of complementary angles.



Answers

1. 61°

2. 32°

3. 37°

4. 68°

5. 47°

6. 51°

7. 56°

8. 23°

9. 51°

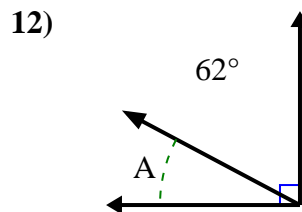
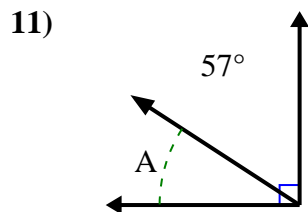
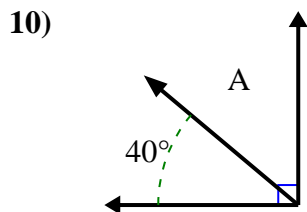
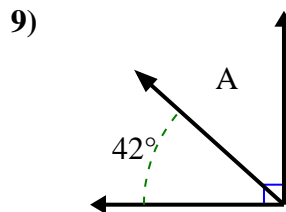
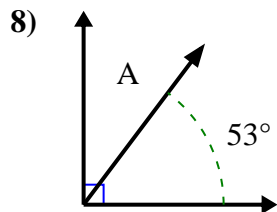
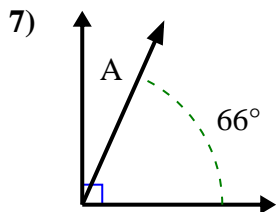
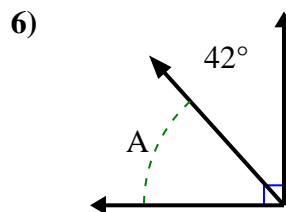
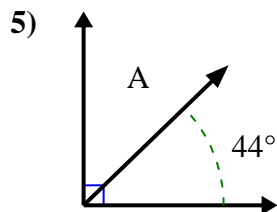
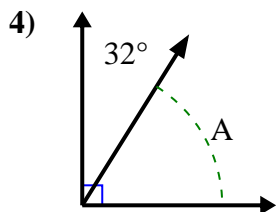
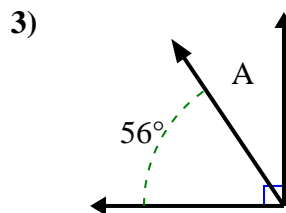
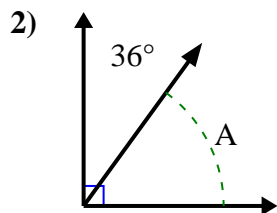
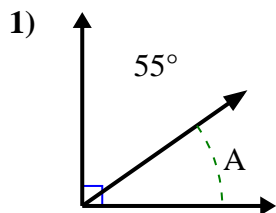
10. 35°

11. 31°

12. 49°



Find the value of 'A' in the set of complementary angles.

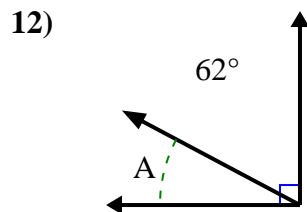
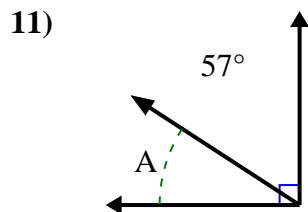
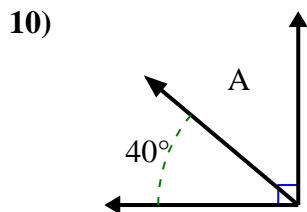
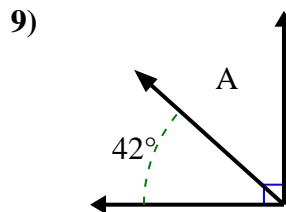
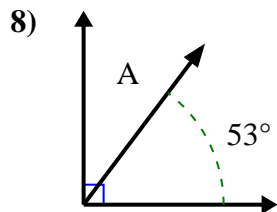
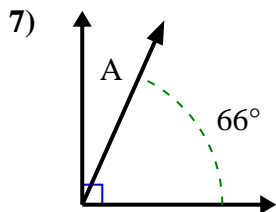
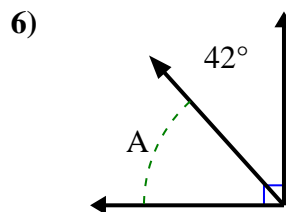
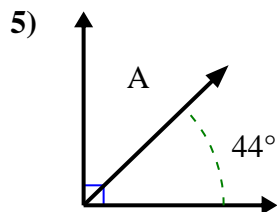
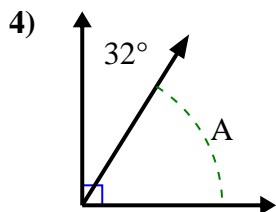
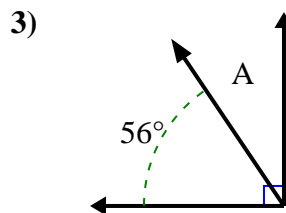
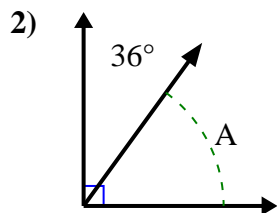
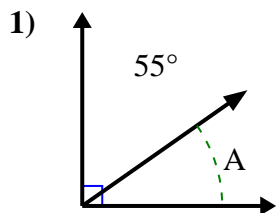


Answers

1. \_\_\_\_\_
2. \_\_\_\_\_
3. \_\_\_\_\_
4. \_\_\_\_\_
5. \_\_\_\_\_
6. \_\_\_\_\_
7. \_\_\_\_\_
8. \_\_\_\_\_
9. \_\_\_\_\_
10. \_\_\_\_\_
11. \_\_\_\_\_
12. \_\_\_\_\_



Find the value of 'A' in the set of complementary angles.



Answers

1. 35°

2. 54°

3. 34°

4. 58°

5. 46°

6. 48°

7. 24°

8. 37°

9. 48°

10. 50°

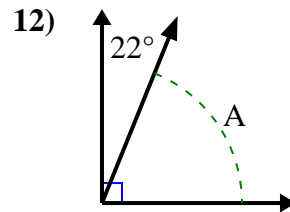
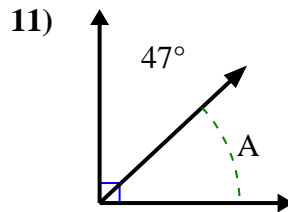
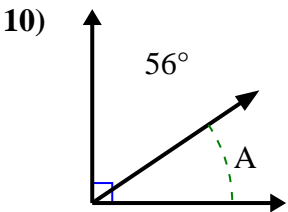
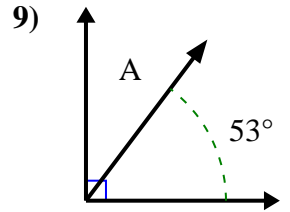
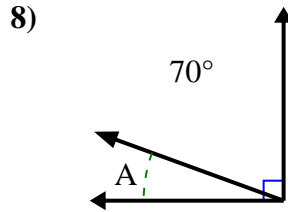
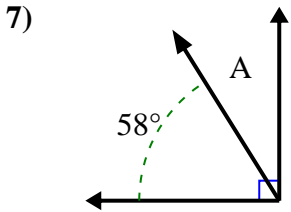
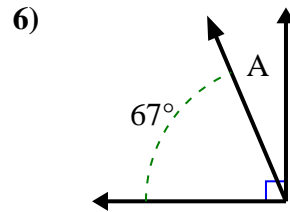
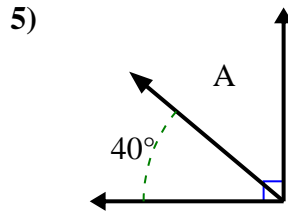
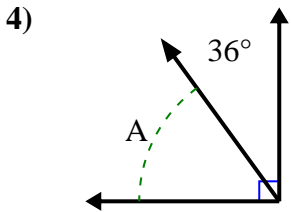
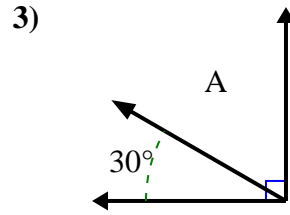
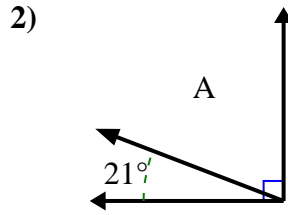
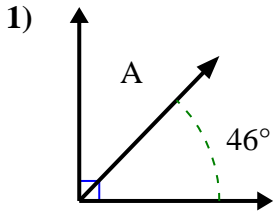
11. 33°

12. 28°



Find the value of 'A' in the set of complementary angles.

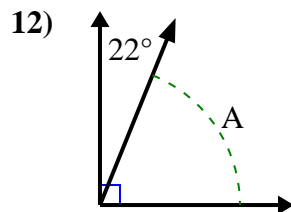
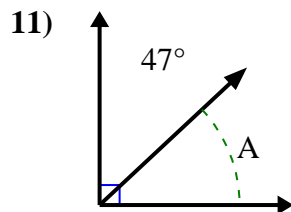
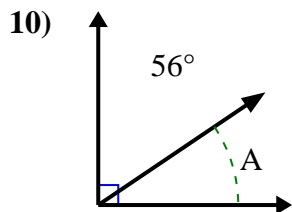
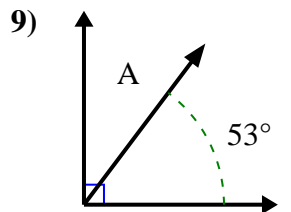
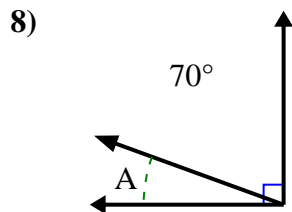
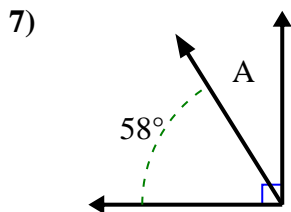
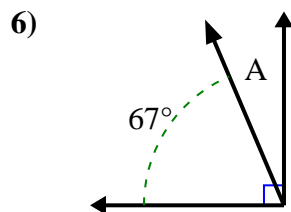
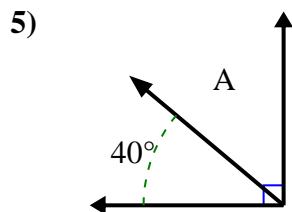
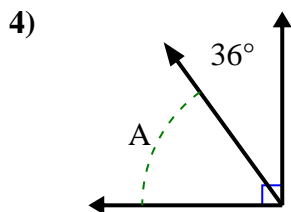
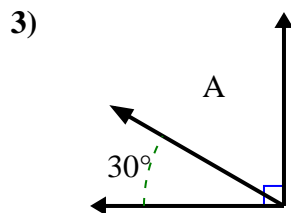
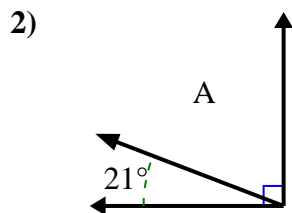
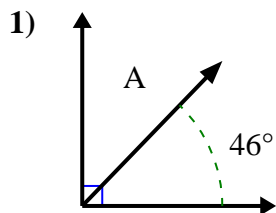
Answers



1. \_\_\_\_\_
2. \_\_\_\_\_
3. \_\_\_\_\_
4. \_\_\_\_\_
5. \_\_\_\_\_
6. \_\_\_\_\_
7. \_\_\_\_\_
8. \_\_\_\_\_
9. \_\_\_\_\_
10. \_\_\_\_\_
11. \_\_\_\_\_
12. \_\_\_\_\_



Find the value of 'A' in the set of complementary angles.



Answers

1. 44°

2. 69°

3. 60°

4. 54°

5. 50°

6. 23°

7. 32°

8. 20°

9. 37°

10. 34°

11. 43°

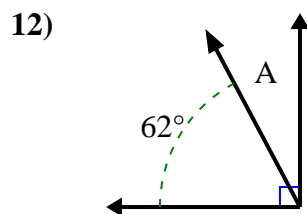
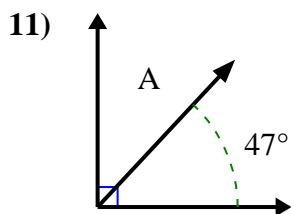
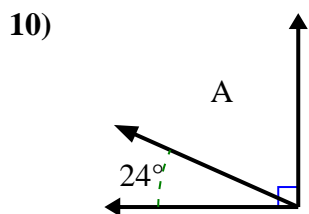
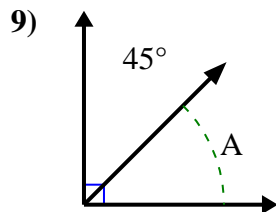
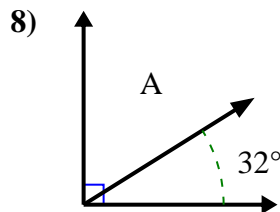
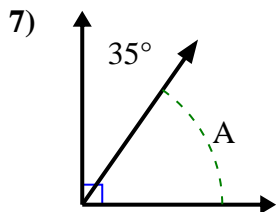
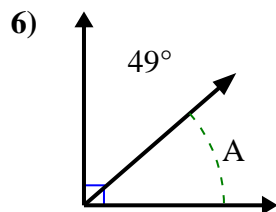
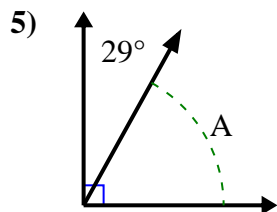
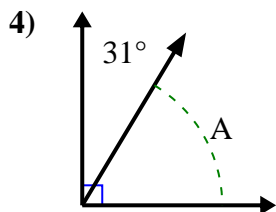
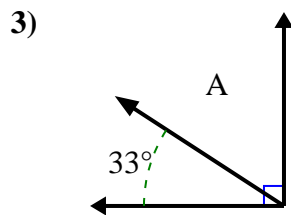
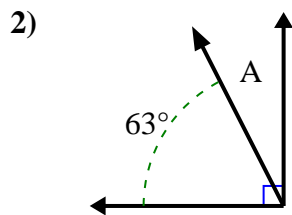
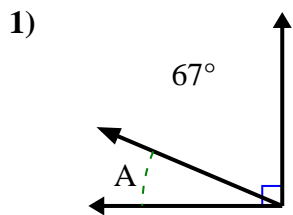
12. 68°





Find the value of 'A' in the set of complementary angles.

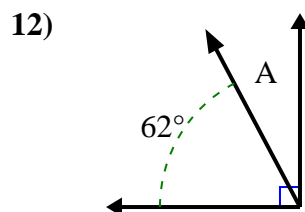
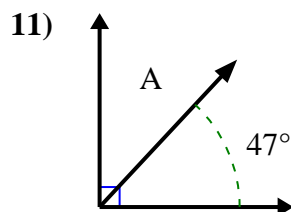
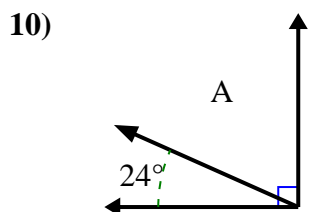
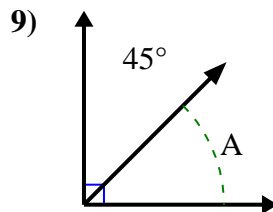
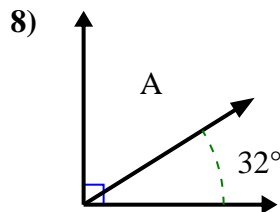
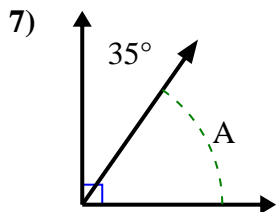
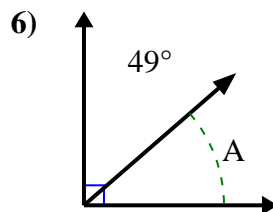
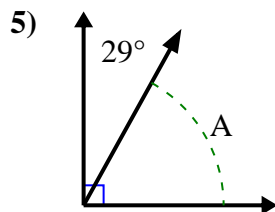
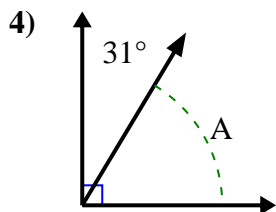
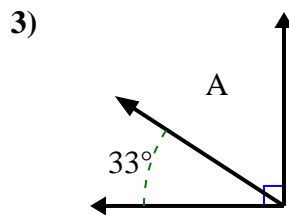
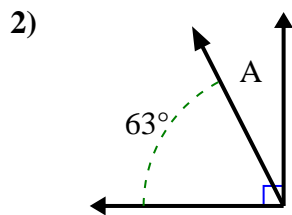
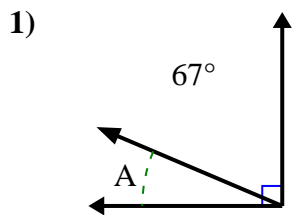
Answers



1. \_\_\_\_\_
2. \_\_\_\_\_
3. \_\_\_\_\_
4. \_\_\_\_\_
5. \_\_\_\_\_
6. \_\_\_\_\_
7. \_\_\_\_\_
8. \_\_\_\_\_
9. \_\_\_\_\_
10. \_\_\_\_\_
11. \_\_\_\_\_
12. \_\_\_\_\_



Find the value of 'A' in the set of complementary angles.



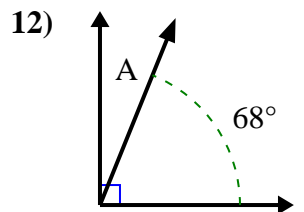
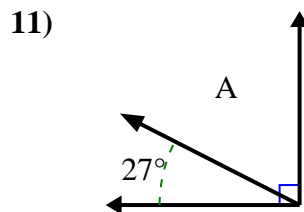
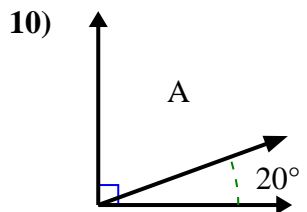
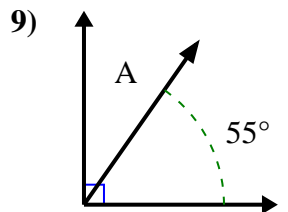
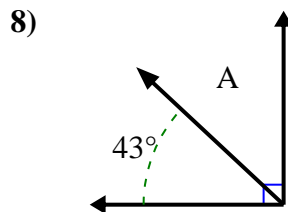
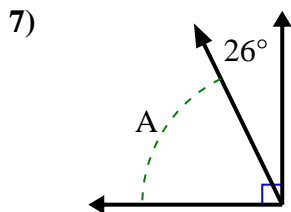
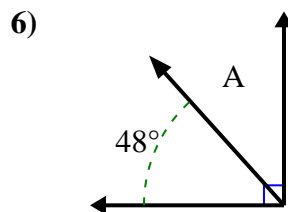
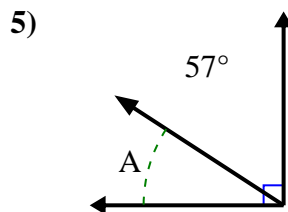
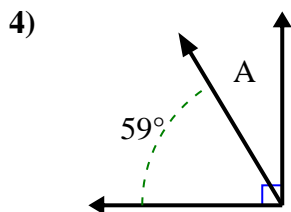
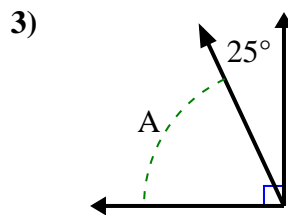
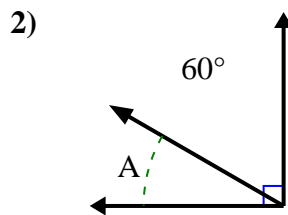
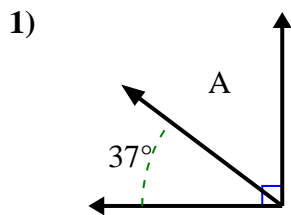
Answers

1. 23°
2. 27°
3. 57°
4. 59°
5. 61°
6. 41°
7. 55°
8. 58°
9. 45°
10. 66°
11. 43°
12. 28°



Find the value of 'A' in the set of complementary angles.

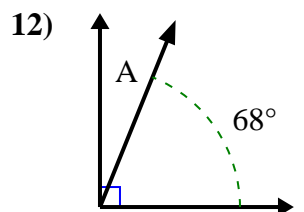
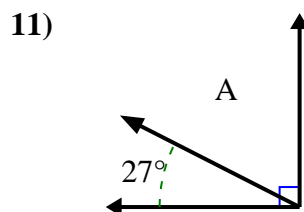
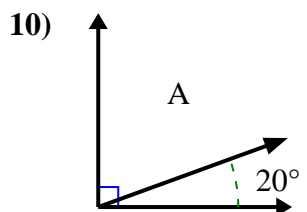
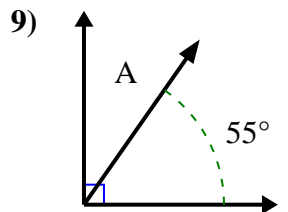
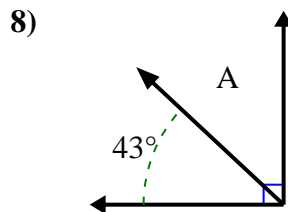
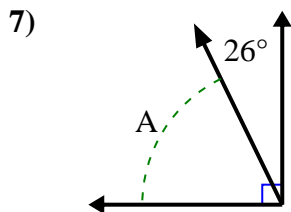
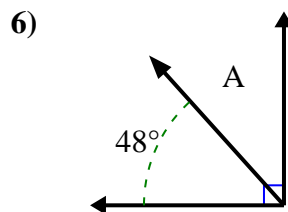
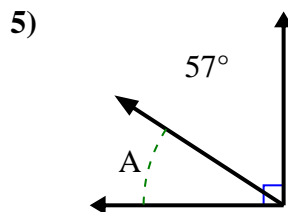
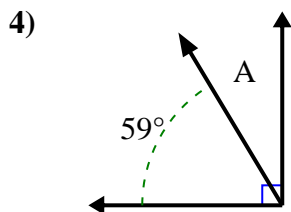
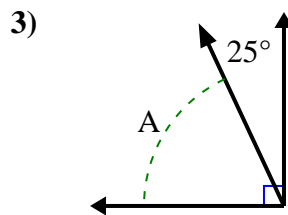
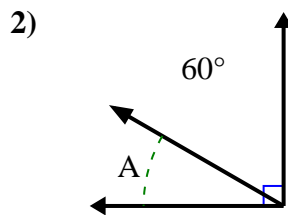
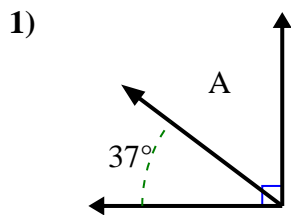
Answers



1. \_\_\_\_\_
2. \_\_\_\_\_
3. \_\_\_\_\_
4. \_\_\_\_\_
5. \_\_\_\_\_
6. \_\_\_\_\_
7. \_\_\_\_\_
8. \_\_\_\_\_
9. \_\_\_\_\_
10. \_\_\_\_\_
11. \_\_\_\_\_
12. \_\_\_\_\_



Find the value of 'A' in the set of complementary angles.



Answers

1. 53°

2. 30°

3. 65°

4. 31°

5. 33°

6. 42°

7. 64°

8. 47°

9. 35°

10. 70°

11. 63°

12. 22°