



Determine which letter best represents the weight.

Ounce (oz)

An ounce is about the weight of a slice of bread.



Pound (lb)

A pound is about the weight of a can of vegetables.



Remember:

There are 16 ounces in 1 pound.

Answers

- 1. _____
- 2. _____
- 3. _____
- 4. _____
- 5. _____
- 6. _____
- 7. _____
- 8. _____
- 9. _____

1)



Monitor

- A. 1000 pounds
- B. 20 ounces
- C. 0.2 ounces
- D. 20 pounds

2)



Candle

- A. 16 ounces
- B. 0.2 ounces
- C. 20 pounds
- D. 1 pound

3)



Bicycle

- A. 0.53 ounces
- B. 4 ounces
- C. 30 pounds
- D. 220 pounds

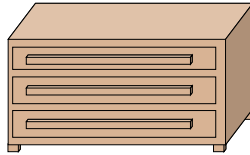
4)



Strawberry

- A. 0.5 pounds
- B. 1 pound
- C. 0.5 ounces
- D. 11 ounces

5)



Dresser

- A. 10 ounces
- B. 150 pounds
- C. 30 pounds
- D. 3000 ounces

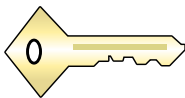
6)



Wrist Watch

- A. 2 pounds
- B. 3 ounces
- C. 12 pounds
- D. 16 ounces

7)



Key

- A. 4 ounces
- B. 16 ounces
- C. 2 pounds
- D. 220 pounds

8)



Tennis Ball

- A. 2 pounds
- B. 0.01 ounces
- C. 30 pounds
- D. 2 ounces

9)



Popcorn

- A. 10 ounces
- B. 2 pounds
- C. 0.3 pounds
- D. 0.04 ounces




Determine which letter best represents the weight.

Ounce (oz)

Pound (lb)

An ounce is about the weight of a slice of bread.

A pound is about the weight of a can of vegetables.



Remember:

There are 16 ounces in 1 pound.

Answers

1)



Monitor

- A. 1000 pounds
- B. 20 ounces
- C. 0.2 ounces
- D. 20 pounds

2)



Candle

- A. 16 ounces
- B. 0.2 ounces
- C. 20 pounds
- D. 1 pound

3)



Bicycle

- A. 0.53 ounces
- B. 4 ounces
- C. 30 pounds
- D. 220 pounds

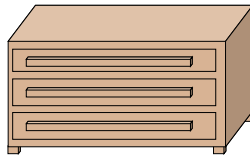
4)



Strawberry

- A. 0.5 pounds
- B. 1 pound
- C. 0.5 ounces
- D. 11 ounces

5)



Dresser

- A. 10 ounces
- B. 150 pounds
- C. 30 pounds
- D. 3000 ounces

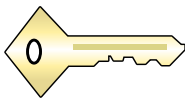
6)



Wrist Watch

- A. 2 pounds
- B. 3 ounces
- C. 12 pounds
- D. 16 ounces

7)



Key

- A. 4 ounces
- B. 16 ounces
- C. 2 pounds
- D. 220 pounds

8)



Tennis Ball

- A. 2 pounds
- B. 0.01 ounces
- C. 30 pounds
- D. 2 ounces

9)



Popcorn

- A. 10 ounces
- B. 2 pounds
- C. 0.3 pounds
- D. 0.04 ounces

- 1. **D**
- 2. **B**
- 3. **C**
- 4. **C**
- 5. **B**
- 6. **B**
- 7. **A**
- 8. **D**
- 9. **D**