



Determine which letter best represents the weight.

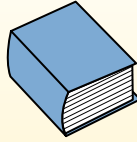
**Gram (g)**

A gram is about the weight of a paperclip.



**Kilogram (kg)**

A kilogram is about the weight of a thick book.




**Remember:**

Kilo means 1,000. So a kilogram is 1,000 grams.  
1 Kilogram is also about the same weight as 2 pounds.

**Answers**

1. \_\_\_\_\_
2. \_\_\_\_\_
3. \_\_\_\_\_
4. \_\_\_\_\_
5. \_\_\_\_\_
6. \_\_\_\_\_
7. \_\_\_\_\_
8. \_\_\_\_\_
9. \_\_\_\_\_

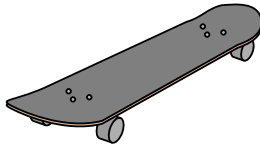
1)



Notebook Paper

- A. 1 kilogram
- B. 3 grams
- C. 500 grams
- D. 85 grams

2)



Skateboard

- A. 20 grams
- B. 15 kilograms
- C. 2 kilograms
- D. 200 grams


3)



Broom

- A. 500 grams
- B. 10 kilograms
- C. 10 grams
- D. 200 kilograms


4)



Pear

- A. 2 kilograms
- B. 170 kilograms
- C. 170 grams
- D. 2 grams

5)



Lawn Mower

- A. 500 grams
- B. 100 kilograms
- C. 200 grams
- D. 22 kilograms

6)



File Cabinet

- A. 55 kilograms
- B. 1 gram
- C. 300 grams
- D. 1 kilogram

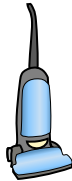
7)



Wrist Watch

- A. 1 gram
- B. 90 grams
- C. 1 kilogram
- D. 500 kilograms


8)



Vacuum

- A. 20 kilograms
- B. 90 grams
- C. 500 kilograms
- D. 50 grams

9)



Apple

- A. 5 grams
- B. 200 kilograms
- C. 200 grams
- D. 5 kilograms



Determine which letter best represents the weight.

**Gram (g)**

A gram is about the weight of a paperclip.



**Kilogram (kg)**

A kilogram is about the weight of a thick book.




**Remember:**

Kilo means 1,000. So a kilogram is 1,000 grams.

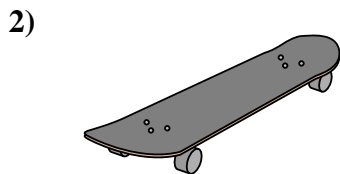
1 Kilogram is also about the same weight as 2 pounds.

**Answers**



Notebook Paper

- A. 1 kilogram
- B. 3 grams
- C. 500 grams
- D. 85 grams




Skateboard

- A. 20 grams
- B. 15 kilograms
- C. 2 kilograms
- D. 200 grams



Broom

- A. 500 grams
- B. 10 kilograms
- C. 10 grams
- D. 200 kilograms



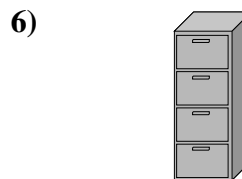
Pear

- A. 2 kilograms
- B. 170 kilograms
- C. 170 grams
- D. 2 grams




Lawn Mower

- A. 500 grams
- B. 100 kilograms
- C. 200 grams
- D. 22 kilograms



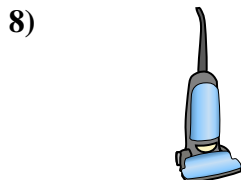
File Cabinet

- A. 55 kilograms
- B. 1 gram
- C. 300 grams
- D. 1 kilogram




Wrist Watch

- A. 1 gram
- B. 90 grams
- C. 1 kilogram
- D. 500 kilograms



Vacuum

- A. 20 kilograms
- B. 90 grams
- C. 500 kilograms
- D. 50 grams



Apple

- A. 5 grams
- B. 200 kilograms
- C. 200 grams
- D. 5 kilograms

- 1.   **B**
- 2.   **C**
- 3.   **A**
- 4.   **C**
- 5.   **D**
- 6.   **A**
- 7.   **B**
- 8.   **A**
- 9.   **C**