



Determine which letter best represents the weight.


**Gram (g)**

A gram is about the weight of a paperclip.



**Kilogram (kg)**

A kilogram is about the weight of a thick book.



**Remember:**

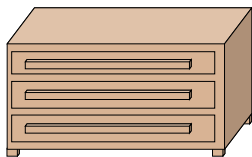
Kilo means 1,000. So a kilogram is 1,000 grams.

1 Kilogram is also about the same weight as 2 pounds.

**Answers**

1. \_\_\_\_\_
2. \_\_\_\_\_
3. \_\_\_\_\_
4. \_\_\_\_\_
5. \_\_\_\_\_
6. \_\_\_\_\_
7. \_\_\_\_\_
8. \_\_\_\_\_
9. \_\_\_\_\_

1)



Dresser

- A. 500 kilograms
- B. 70 kilograms
- C. 20 grams
- D. 350 grams

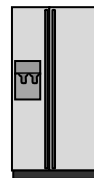
2)



Stove

- A. 70 kilograms
- B. 15 grams
- C. 70 grams
- D. 15 kilograms


3)



Refrigerator

- A. 10 kilograms
- B. 40 grams
- C. 90 kilograms
- D. 200 grams

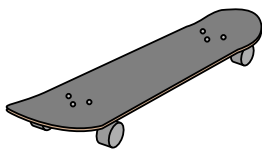
4)



Pear

- A. 170 kilograms
- B. 2 kilograms
- C. 170 grams
- D. 2 grams

5)



Skateboard

- A. 20 grams
- B. 200 grams
- C. 2 kilograms
- D. 15 kilograms

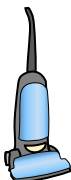
6)



Monitor

- A. 8 kilograms
- B. 500 grams
- C. 500 kilograms
- D. 8 grams


7)



Vacuum

- A. 20 kilograms
- B. 90 grams
- C. 500 kilograms
- D. 50 grams

8)



Recliner

- A. 90 grams
- B. 150 grams
- C. 1 kilogram
- D. 35 kilograms

9)



Wrist Watch

- A. 500 kilograms
- B. 1 kilogram
- C. 1 gram
- D. 90 grams



Determine which letter best represents the weight.

**Gram (g)**

A gram is about the weight of a paperclip.



**Kilogram (kg)**

A kilogram is about the weight of a thick book.

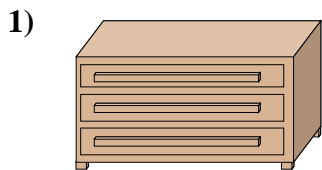


**Remember:**

Kilo means 1,000. So a kilogram is 1,000 grams.

1 Kilogram is also about the same weight as 2 pounds.

**Answers**



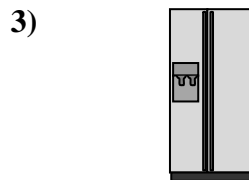
Dresser

- A. 500 kilograms
- B. 70 kilograms
- C. 20 grams
- D. 350 grams




Stove

- A. 70 kilograms
- B. 15 grams
- C. 70 grams
- D. 15 kilograms



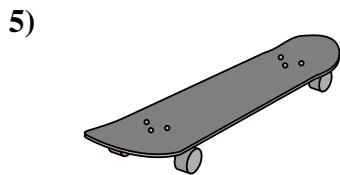
Refrigerator

- A. 10 kilograms
- B. 40 grams
- C. 90 kilograms
- D. 200 grams



Pear

- A. 170 kilograms
- B. 2 kilograms
- C. 170 grams
- D. 2 grams



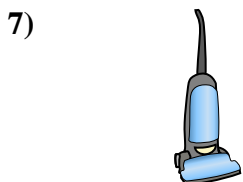
Skateboard

- A. 20 grams
- B. 200 grams
- C. 2 kilograms
- D. 15 kilograms




Monitor

- A. 8 kilograms
- B. 500 grams
- C. 500 kilograms
- D. 8 grams



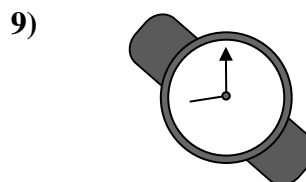
Vacuum

- A. 20 kilograms
- B. 90 grams
- C. 500 kilograms
- D. 50 grams



Recliner

- A. 90 grams
- B. 150 grams
- C. 1 kilogram
- D. 35 kilograms



Wrist Watch

- A. 500 kilograms
- B. 1 kilogram
- C. 1 gram
- D. 90 grams

- 1.   **B**
- 2.   **A**
- 3.   **C**
- 4.   **C**
- 5.   **C**
- 6.   **A**
- 7.   **A**
- 8.   **D**
- 9.   **D**