



Determine which letter best represents the weight.

Gram (g)

A gram is about the weight of a paperclip.



Kilogram (kg)

A kilogram is about the weight of a thick book.



Remember:

Kilo means 1,000. So a kilogram is 1,000 grams.
1 Kilogram is also about the same weight as 2 pounds.

Answers

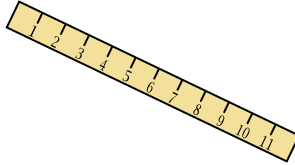
1)



Tennis Ball

- A. 1 gram
- B. 15 kilograms
- C. 1 kilogram
- D. 50 grams

2)



Ruler

- A. 999 grams
- B. 30 kilograms
- C. 20 grams
- D. 1 gram

3)



Candle

- A. 4 grams
- B. 10 kilograms
- C. 500 grams
- D. 2 kilograms

4)



Weight Set

- A. 200 grams
- B. 1 kilogram
- C. 100 kilograms
- D. 100 grams

5)



Popcorn

- A. 1 kilogram
- B. 100 grams
- C. 100 kilograms
- D. 1 gram

6)



Stove

- A. 15 kilograms
- B. 15 grams
- C. 70 grams
- D. 70 kilograms

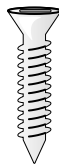
7)



Nail

- A. 3 grams
- B. 500 grams
- C. 3 kilograms
- D. 2 kilograms

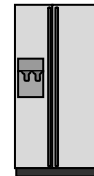
8)



Screw

- A. 1 gram
- B. 500 kilograms
- C. 500 grams
- D. 1 kilogram

9)



Refrigerator

- A. 40 grams
- B. 200 grams
- C. 10 kilograms
- D. 90 kilograms

- 1. _____
- 2. _____
- 3. _____
- 4. _____
- 5. _____
- 6. _____
- 7. _____
- 8. _____
- 9. _____



Determine which letter best represents the weight.

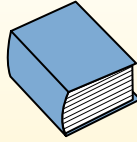
Gram (g)

A gram is about the weight of a paperclip.



Kilogram (kg)

A kilogram is about the weight of a thick book.



Remember:

Kilo means 1,000. So a kilogram is 1,000 grams.
1 Kilogram is also about the same weight as 2 pounds.

Answers

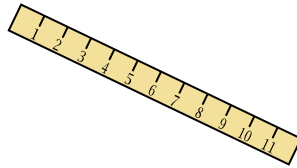
1)



Tennis Ball

- A. 1 gram
- B. 15 kilograms
- C. 1 kilogram
- D. 50 grams

2)



Ruler

- A. 999 grams
- B. 30 kilograms
- C. 20 grams
- D. 1 gram

3)



Candle

- A. 4 grams
- B. 10 kilograms
- C. 500 grams
- D. 2 kilograms


4)



Weight Set

- A. 200 grams
- B. 1 kilogram
- C. 100 kilograms
- D. 100 grams

5)



Popcorn

- A. 1 kilogram
- B. 100 grams
- C. 100 kilograms
- D. 1 gram

6)



Stove

- A. 15 kilograms
- B. 15 grams
- C. 70 grams
- D. 70 kilograms


7)



Nail

- A. 3 grams
- B. 500 grams
- C. 3 kilograms
- D. 2 kilograms

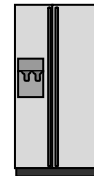
8)



Screw

- A. 1 gram
- B. 500 kilograms
- C. 500 grams
- D. 1 kilogram

9)



Refrigerator

- A. 40 grams
- B. 200 grams
- C. 10 kilograms
- D. 90 kilograms

- 1. **D**
- 2. **C**
- 3. **A**
- 4. **C**
- 5. **D**
- 6. **D**
- 7. **A**
- 8. **A**
- 9. **D**