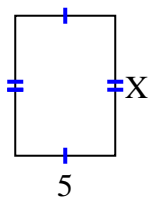


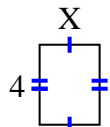


Find the value of X for each figure. Each figure is in centimeters (cm). Not to scale.

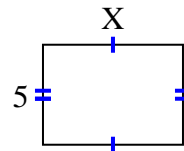
1) area = 35 cm^2



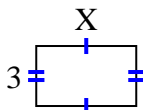
2) area = 12 cm^2



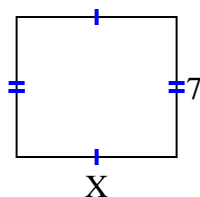
3) area = 35 cm^2



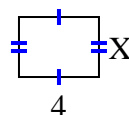
4) area = 15 cm^2



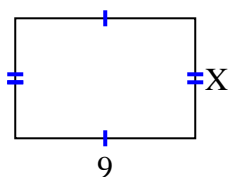
5) area = 56 cm^2



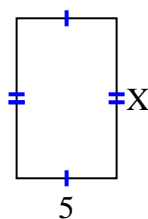
6) area = 12 cm^2



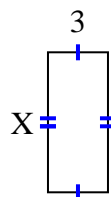
7) area = 54 cm^2



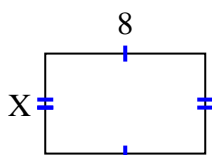
8) area = 40 cm^2



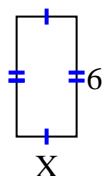
9) area = 21 cm^2



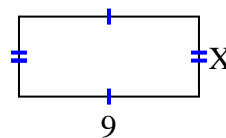
10) area = 40 cm^2



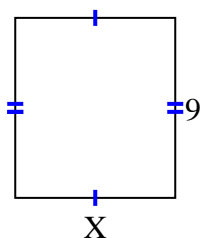
11) area = 18 cm^2



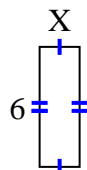
12) area = 36 cm^2



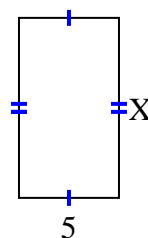
13) area = 72 cm^2



14) area = 12 cm^2



15) area = 45 cm^2



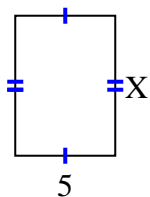
Answers

1. _____
2. _____
3. _____
4. _____
5. _____
6. _____
7. _____
8. _____
9. _____
10. _____
11. _____
12. _____
13. _____
14. _____
15. _____

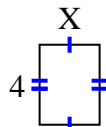


Find the value of X for each figure. Each figure is in centimeters (cm). Not to scale.

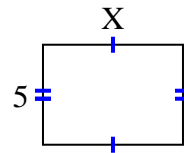
1) area = 35 cm^2



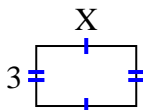
2) area = 12 cm^2



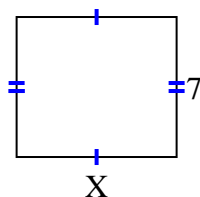
3) area = 35 cm^2



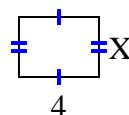
4) area = 15 cm^2



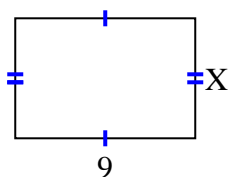
5) area = 56 cm^2



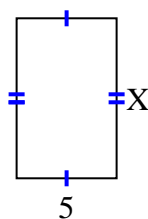
6) area = 12 cm^2



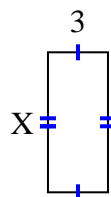
7) area = 54 cm^2



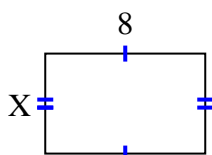
8) area = 40 cm^2



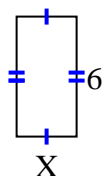
9) area = 21 cm^2



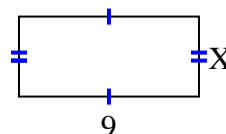
10) area = 40 cm^2



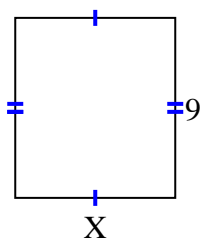
11) area = 18 cm^2



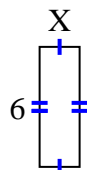
12) area = 36 cm^2



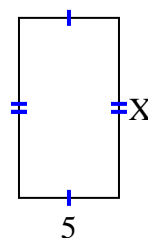
13) area = 72 cm^2



14) area = 12 cm^2



15) area = 45 cm^2



Answers

1. 7

2. 3

3. 7

4. 5

5. 8

6. 3

7. 6

8. 8

9. 7

10. 5

11. 3

12. 4

13. 8

14. 2

15. 9