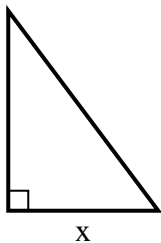


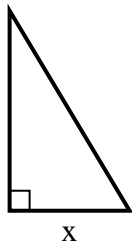


Find the value of X.

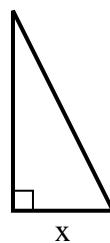
1) area = $24 u^2$



2) area = $7.5 u^2$



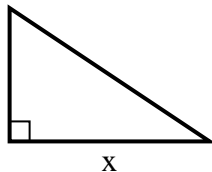
3) area = $9 u^2$



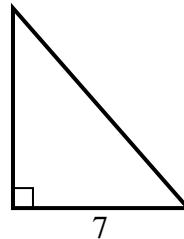
4) area = $5 u^2$



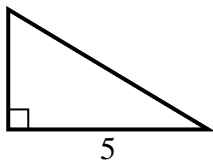
5) area = $27 u^2$



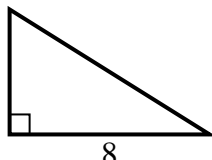
6) area = $28 u^2$



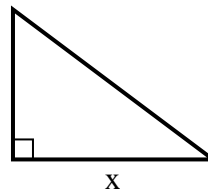
7) area = $7.5 u^2$



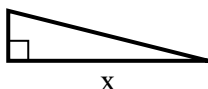
8) area = $20 u^2$



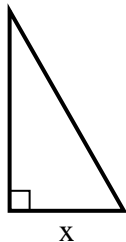
9) area = $6 u^2$



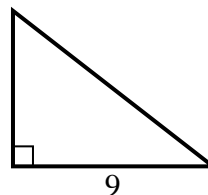
10) area = $8 u^2$



11) area = $14 u^2$



12) area = $31.5 u^2$



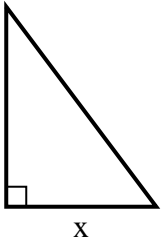
Answers

1. _____
2. _____
3. _____
4. _____
5. _____
6. _____
7. _____
8. _____
9. _____
10. _____
11. _____
12. _____

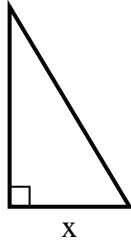


Find the value of X.

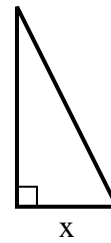
1) area = $24 u^2$



2) area = $7.5 u^2$



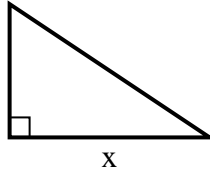
3) area = $9 u^2$



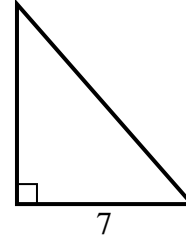
4) area = $5 u^2$



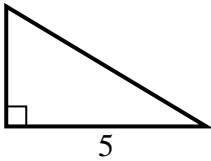
5) area = $27 u^2$



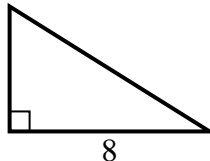
6) area = $28 u^2$



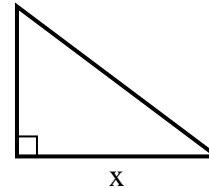
7) area = $7.5 u^2$



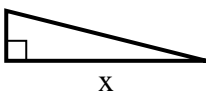
8) area = $20 u^2$



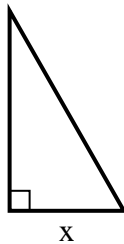
9) area = $6 u^2$



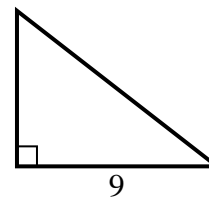
10) area = $8 u^2$



11) area = $14 u^2$



12) area = $31.5 u^2$



Answers

1. 6

2. 3

3. 3

4. 5

5. 9

6. 8

7. 3

8. 5

9. 4

10. 8

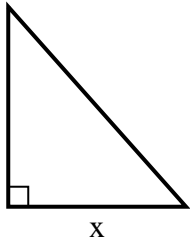
11. 4

12. 7

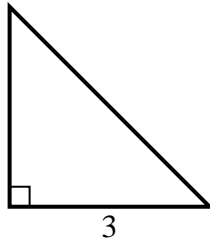


Find the value of X.

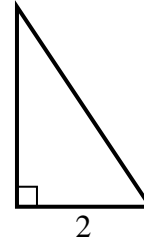
1) area = $36 u^2$



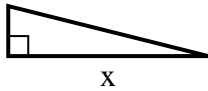
2) area = $4.5 u^2$



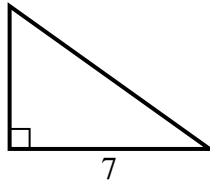
3) area = $3 u^2$



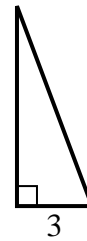
4) area = $8 u^2$



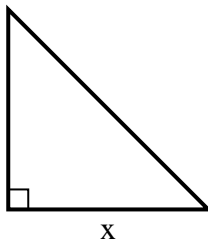
5) area = $17.5 u^2$



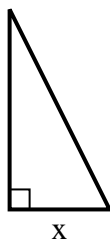
6) area = $12 u^2$



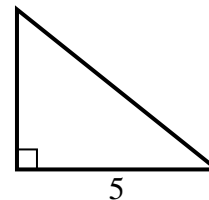
7) area = $32 u^2$



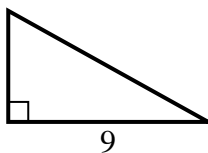
8) area = $4 u^2$



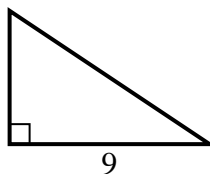
9) area = $10 u^2$



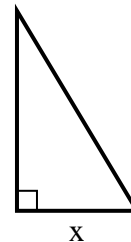
10) area = $22.5 u^2$



11) area = $27 u^2$



12) area = $7.5 u^2$



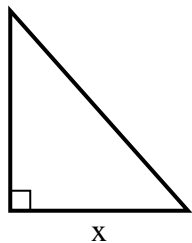
Answers

1. _____
2. _____
3. _____
4. _____
5. _____
6. _____
7. _____
8. _____
9. _____
10. _____
11. _____
12. _____

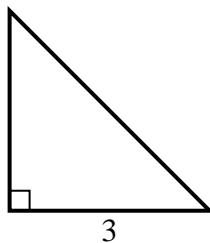


Find the value of X.

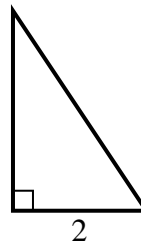
1) area = $36 u^2$



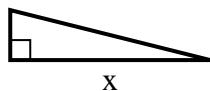
2) area = $4.5 u^2$



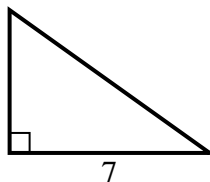
3) area = $3 u^2$



4) area = $8 u^2$



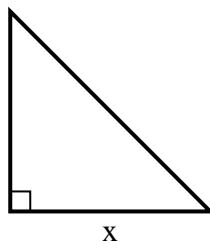
5) area = $17.5 u^2$



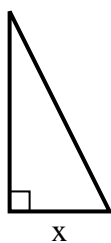
6) area = $12 u^2$



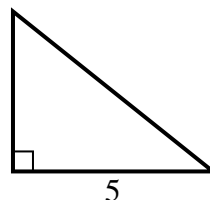
7) area = $32 u^2$



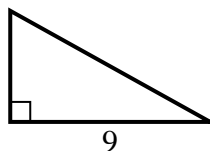
8) area = $4 u^2$



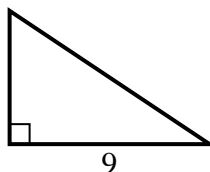
9) area = $10 u^2$



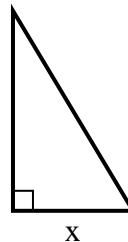
10) area = $22.5 u^2$



11) area = $27 u^2$



12) area = $7.5 u^2$



Answers

1. 8

2. 3

3. 3

4. 8

5. 5

6. 8

7. 8

8. 2

9. 4

10. 5

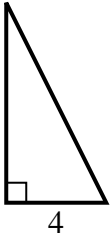
11. 6

12. 3

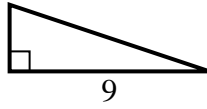


Find the value of X.

1) area = $16 u^2$



2) area = $13.5 u^2$



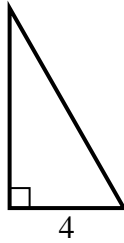
3) area = $6 u^2$



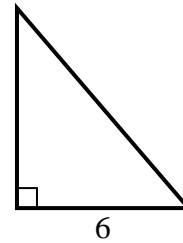
4) area = $8 u^2$



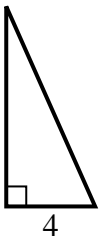
5) area = $14 u^2$



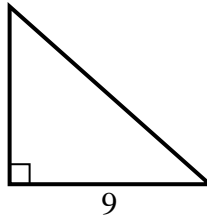
6) area = $21 u^2$



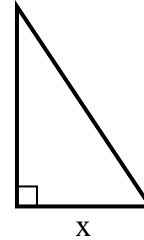
7) area = $18 u^2$



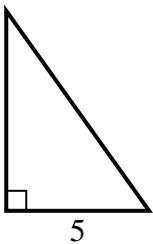
8) area = $36 u^2$



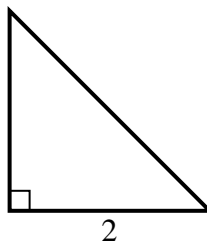
9) area = $27 u^2$



10) area = $17.5 u^2$



11) area = $2 u^2$



12) area = $13.5 u^2$



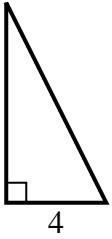
Answers

1. _____
2. _____
3. _____
4. _____
5. _____
6. _____
7. _____
8. _____
9. _____
10. _____
11. _____
12. _____

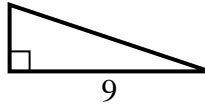


Find the value of X.

1) area = $16 u^2$



2) area = $13.5 u^2$



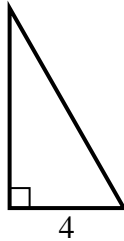
3) area = $6 u^2$



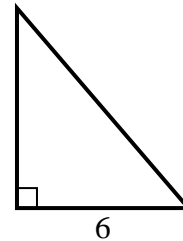
4) area = $8 u^2$



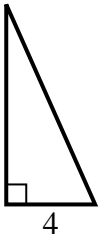
5) area = $14 u^2$



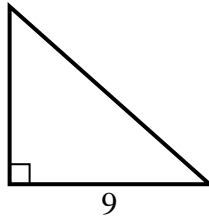
6) area = $21 u^2$



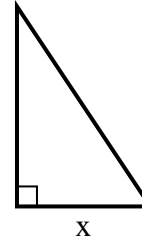
7) area = $18 u^2$



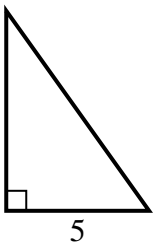
8) area = $36 u^2$



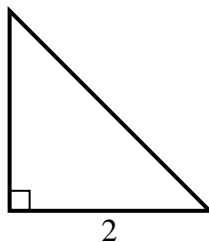
9) area = $27 u^2$



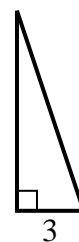
10) area = $17.5 u^2$



11) area = $2 u^2$



12) area = $13.5 u^2$



Answers

1. 8

2. 3

3. 2

4. 2

5. 7

6. 7

7. 9

8. 8

9. 6

10. 7

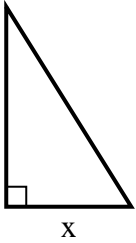
11. 2

12. 9

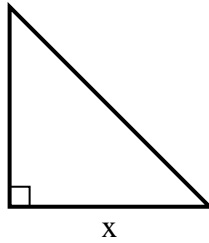


Find the value of X.

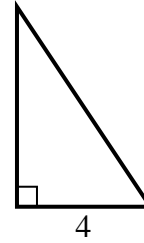
1) area = $20 u^2$



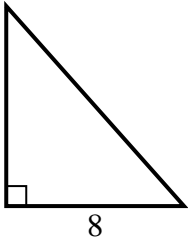
2) area = $32 u^2$



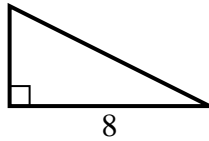
3) area = $12 u^2$



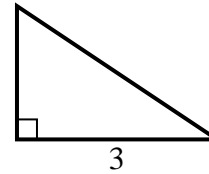
4) area = $36 u^2$



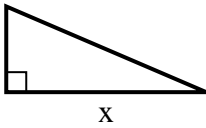
5) area = $16 u^2$



6) area = $3 u^2$



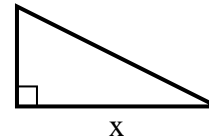
7) area = $10.5 u^2$



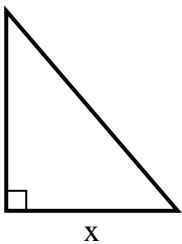
8) area = $18 u^2$



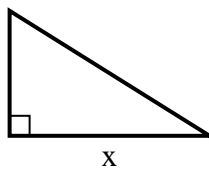
9) area = $4 u^2$



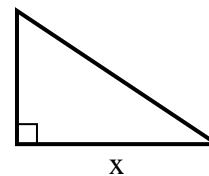
10) area = $21 u^2$



11) area = $20 u^2$



12) area = $12 u^2$



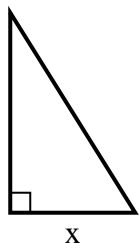
Answers

1. _____
2. _____
3. _____
4. _____
5. _____
6. _____
7. _____
8. _____
9. _____
10. _____
11. _____
12. _____

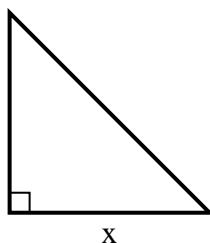


Find the value of X.

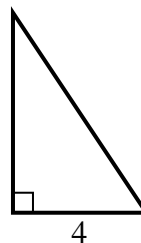
1) area = $20 u^2$



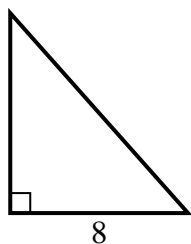
2) area = $32 u^2$



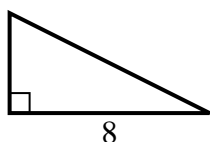
3) area = $12 u^2$



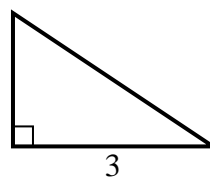
4) area = $36 u^2$



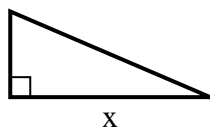
5) area = $16 u^2$



6) area = $3 u^2$



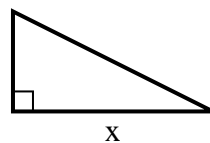
7) area = $10.5 u^2$



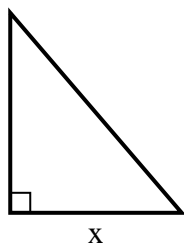
8) area = $18 u^2$



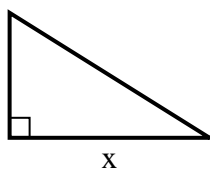
9) area = $4 u^2$



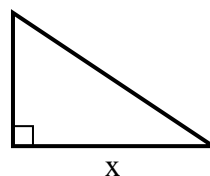
10) area = $21 u^2$



11) area = $20 u^2$



12) area = $12 u^2$



Answers

1. 5

2. 8

3. 6

4. 9

5. 4

6. 2

7. 7

8. 9

9. 4

10. 6

11. 8

12. 6

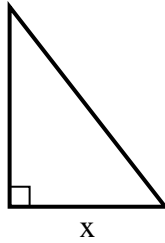


Find the value of X.

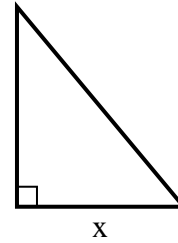
1) area = $9 u^2$



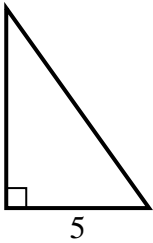
2) area = $31.5 u^2$



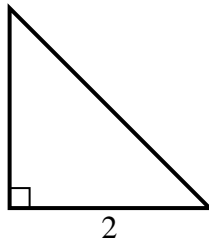
3) area = $15 u^2$



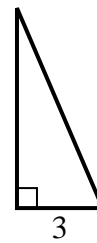
4) area = $17.5 u^2$



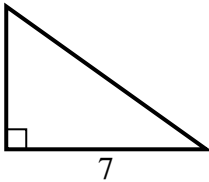
5) area = $2 u^2$



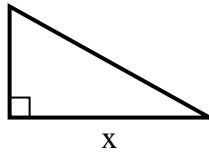
6) area = $10.5 u^2$



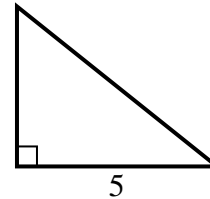
7) area = $17.5 u^2$



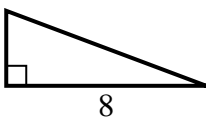
8) area = $22.5 u^2$



9) area = $10 u^2$



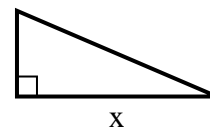
10) area = $12 u^2$



11) area = $7 u^2$



12) area = $10.5 u^2$



Answers

1. _____
2. _____
3. _____
4. _____
5. _____
6. _____
7. _____
8. _____
9. _____
10. _____
11. _____
12. _____

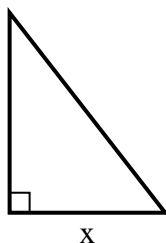


Find the value of X.

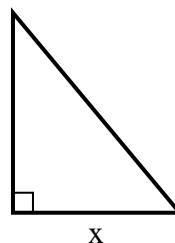
1) area = $9 u^2$



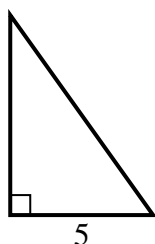
2) area = $31.5 u^2$



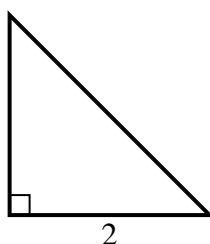
3) area = $15 u^2$



4) area = $17.5 u^2$



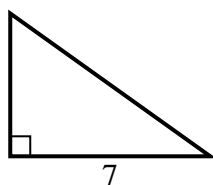
5) area = $2 u^2$



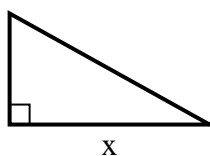
6) area = $10.5 u^2$



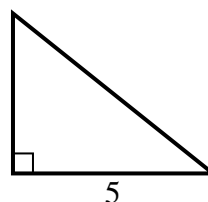
7) area = $17.5 u^2$



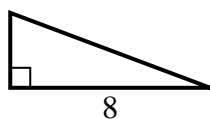
8) area = $22.5 u^2$



9) area = $10 u^2$



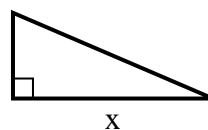
10) area = $12 u^2$



11) area = $7 u^2$



12) area = $10.5 u^2$



Answers

1. 9

2. 7

3. 5

4. 7

5. 2

6. 7

7. 5

8. 9

9. 4

10. 3

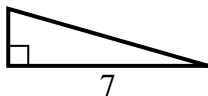
11. 2

12. 7

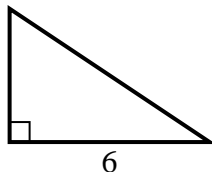


Find the value of X.

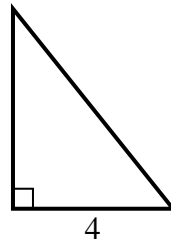
1) area = $7 u^2$



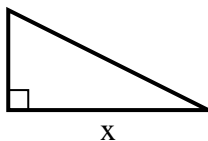
2) area = $12 u^2$



3) area = $10 u^2$



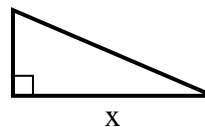
4) area = $16 u^2$



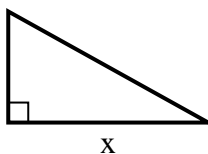
5) area = $18 u^2$



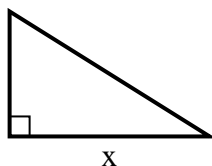
6) area = $10.5 u^2$



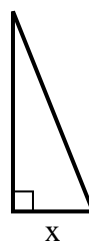
7) area = $22.5 u^2$



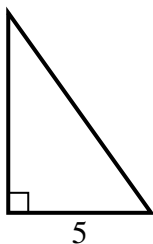
8) area = $20 u^2$



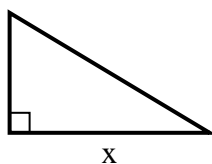
9) area = $5 u^2$



10) area = $17.5 u^2$



11) area = $7.5 u^2$



12) area = $12 u^2$



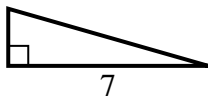
Answers

1. _____
2. _____
3. _____
4. _____
5. _____
6. _____
7. _____
8. _____
9. _____
10. _____
11. _____
12. _____

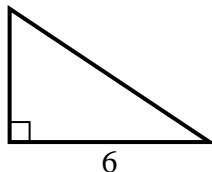


Find the value of X.

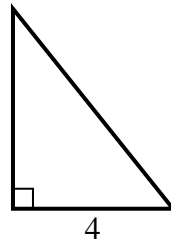
1) area = $7 u^2$



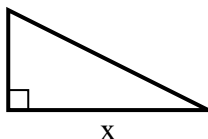
2) area = $12 u^2$



3) area = $10 u^2$



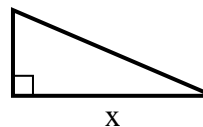
4) area = $16 u^2$



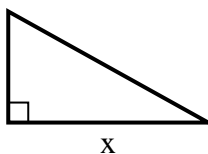
5) area = $18 u^2$



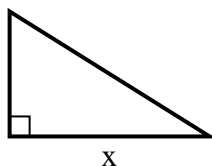
6) area = $10.5 u^2$



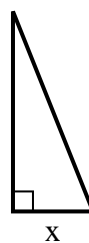
7) area = $22.5 u^2$



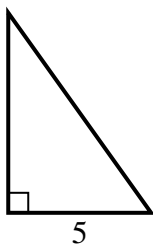
8) area = $20 u^2$



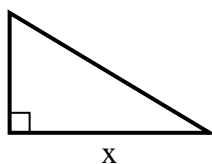
9) area = $5 u^2$



10) area = $17.5 u^2$



11) area = $7.5 u^2$



12) area = $12 u^2$



Answers

1. 2

2. 4

3. 5

4. 8

5. 4

6. 7

7. 9

8. 8

9. 2

10. 7

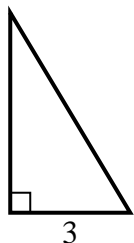
11. 5

12. 3

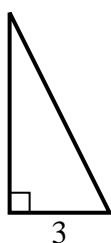


Find the value of X.

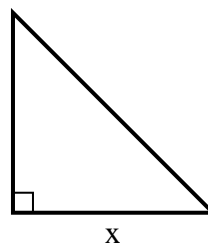
1) area = $7.5 u^2$



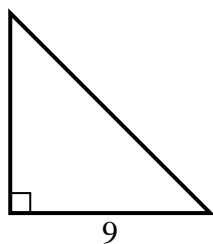
2) area = $9 u^2$



3) area = $32 u^2$



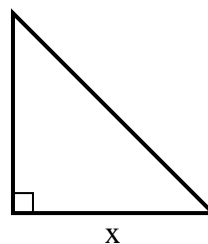
4) area = $40.5 u^2$



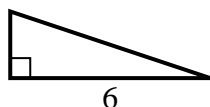
5) area = $9 u^2$



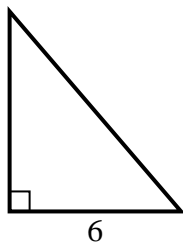
6) area = $24.5 u^2$



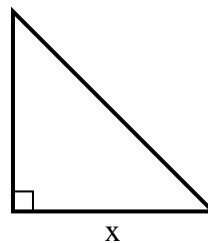
7) area = $6 u^2$



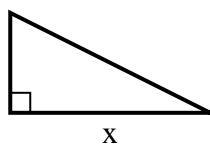
8) area = $21 u^2$



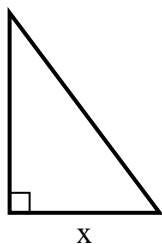
9) area = $18 u^2$



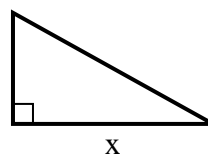
10) area = $16 u^2$



11) area = $6 u^2$



12) area = $22.5 u^2$



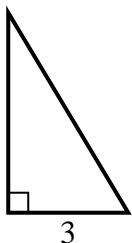
Answers

1. _____
2. _____
3. _____
4. _____
5. _____
6. _____
7. _____
8. _____
9. _____
10. _____
11. _____
12. _____

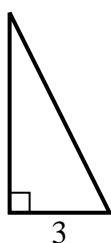


Find the value of X.

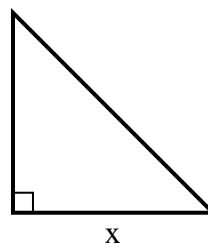
1) area = $7.5 u^2$



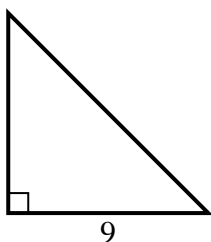
2) area = $9 u^2$



3) area = $32 u^2$



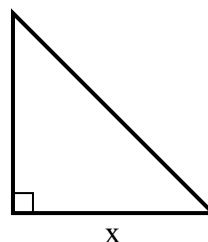
4) area = $40.5 u^2$



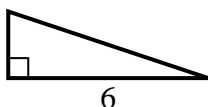
5) area = $9 u^2$



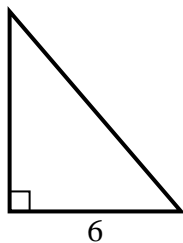
6) area = $24.5 u^2$



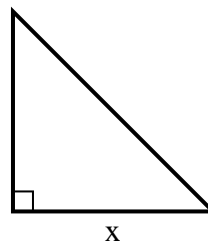
7) area = $6 u^2$



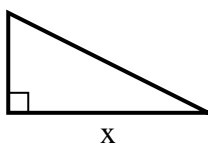
8) area = $21 u^2$



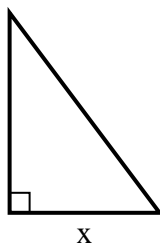
9) area = $18 u^2$



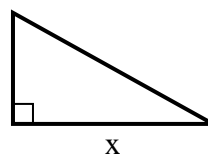
10) area = $16 u^2$



11) area = $6 u^2$



12) area = $22.5 u^2$



Answers

1. 5

2. 6

3. 8

4. 9

5. 9

6. 7

7. 2

8. 7

9. 6

10. 8

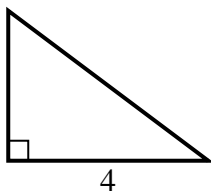
11. 3

12. 9

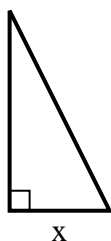


Find the value of X.

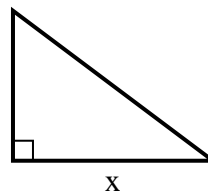
1) area = $6 u^2$



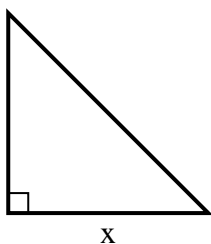
2) area = $4 u^2$



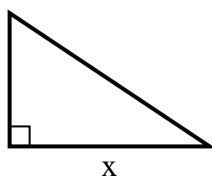
3) area = $24 u^2$



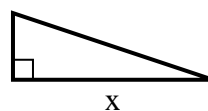
4) area = $8 u^2$



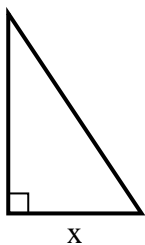
5) area = $12 u^2$



6) area = $6 u^2$



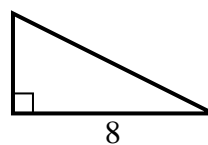
7) area = $12 u^2$



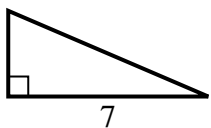
8) area = $13.5 u^2$



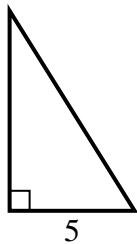
9) area = $16 u^2$



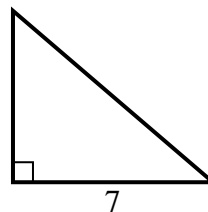
10) area = $10.5 u^2$



11) area = $20 u^2$



12) area = $21 u^2$



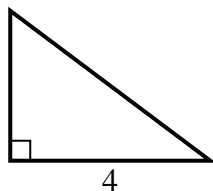
Answers

1. _____
2. _____
3. _____
4. _____
5. _____
6. _____
7. _____
8. _____
9. _____
10. _____
11. _____
12. _____

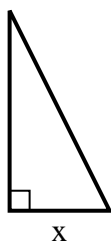


Find the value of X.

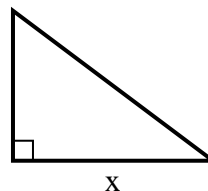
1) area = $6 u^2$



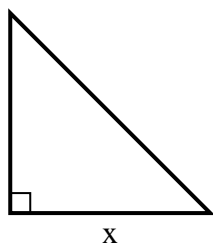
2) area = $4 u^2$



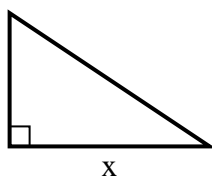
3) area = $24 u^2$



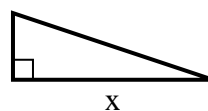
4) area = $8 u^2$



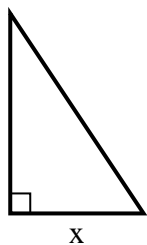
5) area = $12 u^2$



6) area = $6 u^2$



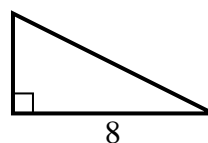
7) area = $12 u^2$



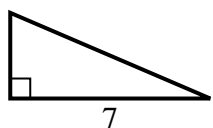
8) area = $13.5 u^2$



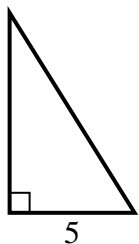
9) area = $16 u^2$



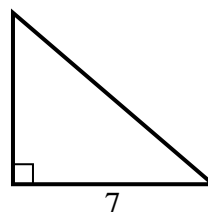
10) area = $10.5 u^2$



11) area = $20 u^2$



12) area = $21 u^2$



Answers

1. 3

2. 2

3. 8

4. 4

5. 6

6. 6

7. 4

8. 3

9. 4

10. 3

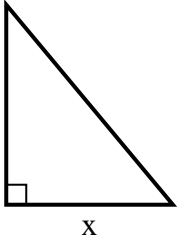
11. 8

12. 6

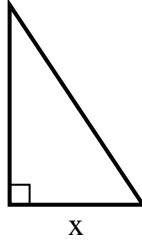


Find the value of X.

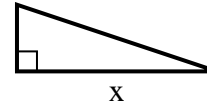
1) area = $15 u^2$



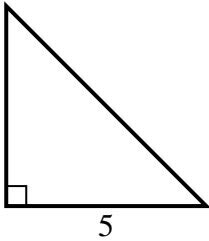
2) area = $3 u^2$



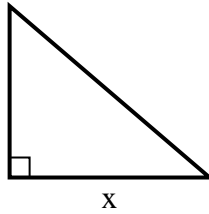
3) area = $6 u^2$



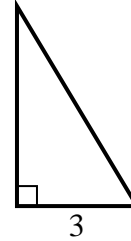
4) area = $12.5 u^2$



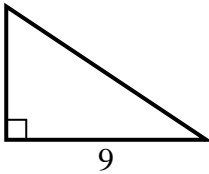
5) area = $21 u^2$



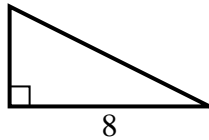
6) area = $7.5 u^2$



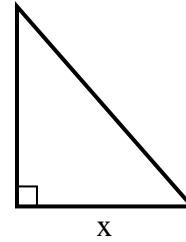
7) area = $27 u^2$



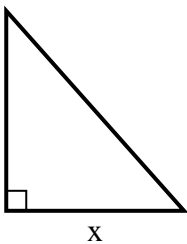
8) area = $16 u^2$



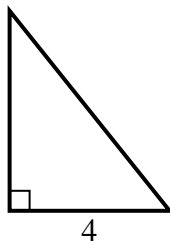
9) area = $28 u^2$



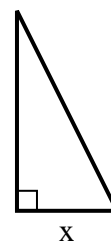
10) area = $36 u^2$



11) area = $10 u^2$



12) area = $4 u^2$



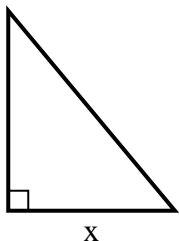
Answers

1. _____
2. _____
3. _____
4. _____
5. _____
6. _____
7. _____
8. _____
9. _____
10. _____
11. _____
12. _____

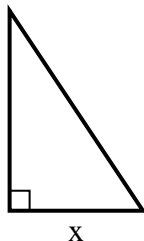


Find the value of X.

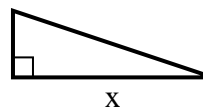
1) area = $15 u^2$



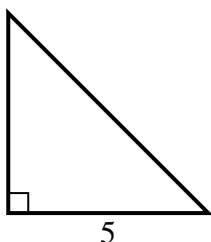
2) area = $3 u^2$



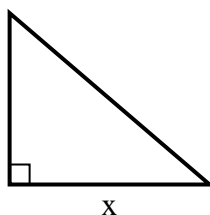
3) area = $6 u^2$



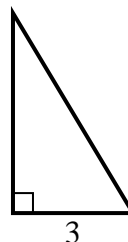
4) area = $12.5 u^2$



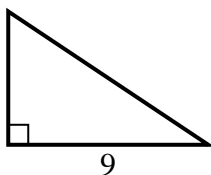
5) area = $21 u^2$



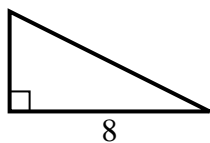
6) area = $7.5 u^2$



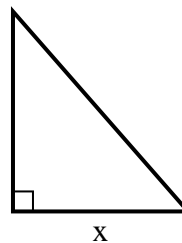
7) area = $27 u^2$



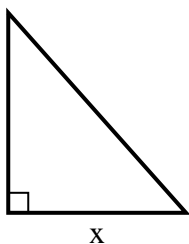
8) area = $16 u^2$



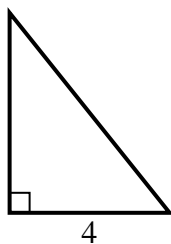
9) area = $28 u^2$



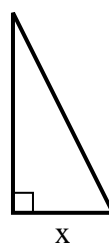
10) area = $36 u^2$



11) area = $10 u^2$



12) area = $4 u^2$



Answers

1. 5

2. 2

3. 6

4. 5

5. 7

6. 5

7. 6

8. 4

9. 7

10. 8

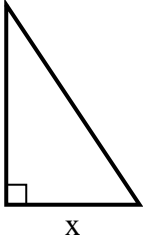
11. 5

12. 2

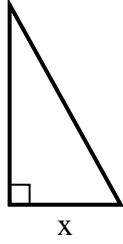


Find the value of X.

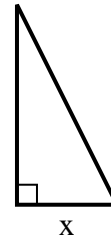
1) area = $27 u^2$



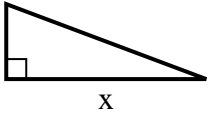
2) area = $22.5 u^2$



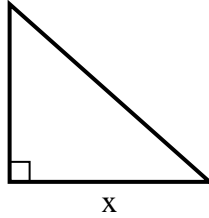
3) area = $9 u^2$



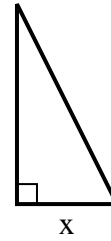
4) area = $12 u^2$



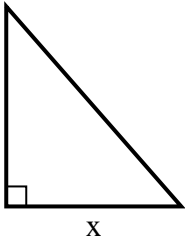
5) area = $36 u^2$



6) area = $4 u^2$



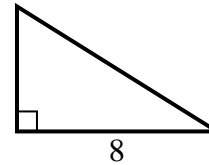
7) area = $28 u^2$



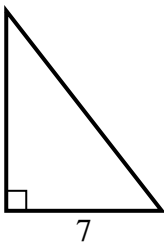
8) area = $6 u^2$



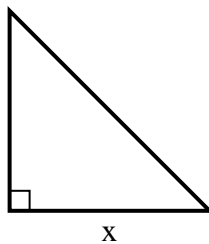
9) area = $20 u^2$



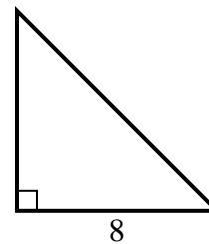
10) area = $31.5 u^2$



11) area = $2 u^2$



12) area = $32 u^2$



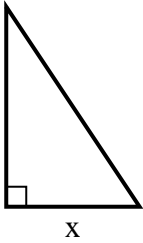
Answers

1. _____
2. _____
3. _____
4. _____
5. _____
6. _____
7. _____
8. _____
9. _____
10. _____
11. _____
12. _____

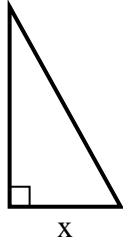


Find the value of X.

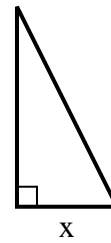
1) area = $27 u^2$



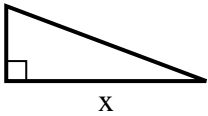
2) area = $22.5 u^2$



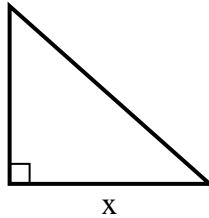
3) area = $9 u^2$



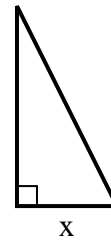
4) area = $12 u^2$



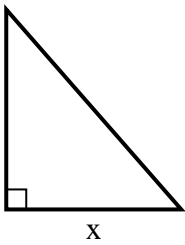
5) area = $36 u^2$



6) area = $4 u^2$



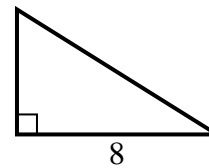
7) area = $28 u^2$



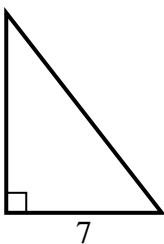
8) area = $6 u^2$



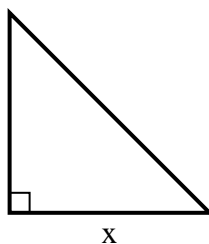
9) area = $20 u^2$



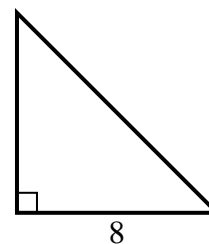
10) area = $31.5 u^2$



11) area = $2 u^2$



12) area = $32 u^2$



Answers

1. 6

2. 5

3. 3

4. 8

5. 9

6. 2

7. 7

8. 2

9. 5

10. 9

11. 2

12. 8