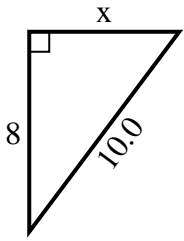


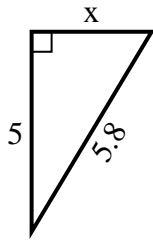


Find the value of X.

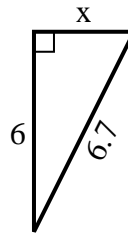
1) perimeter = 24 u



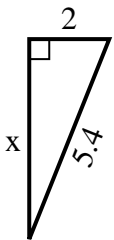
2) perimeter = 13.8 u



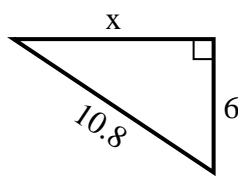
3) perimeter = 15.7 u



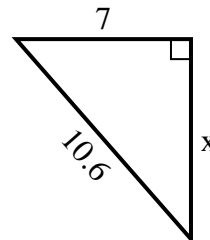
4) perimeter = 12.4 u



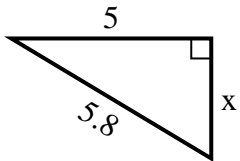
5) perimeter = 25.8 u



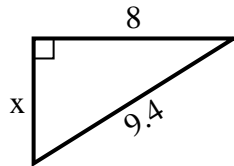
6) perimeter = 25.6 u



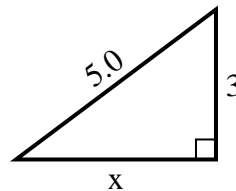
7) perimeter = 13.8 u



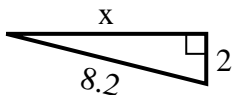
8) perimeter = 22.4 u



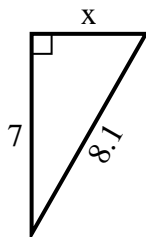
9) perimeter = 12 u



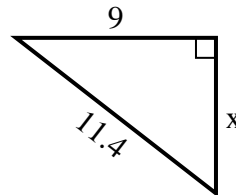
10) perimeter = 18.2 u



11) perimeter = 19.1 u



12) perimeter = 27.4 u



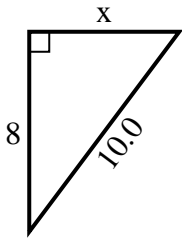
Answers

1. _____
2. _____
3. _____
4. _____
5. _____
6. _____
7. _____
8. _____
9. _____
10. _____
11. _____
12. _____

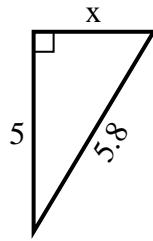


Find the value of X.

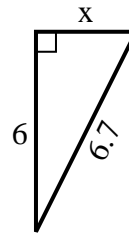
1) perimeter = 24 u



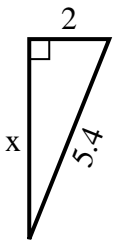
2) perimeter = 13.8 u



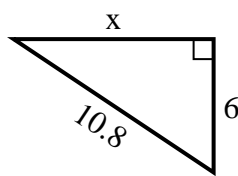
3) perimeter = 15.7 u



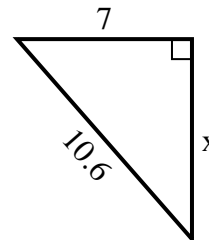
4) perimeter = 12.4 u



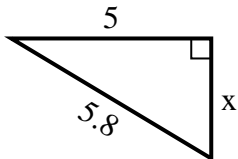
5) perimeter = 25.8 u



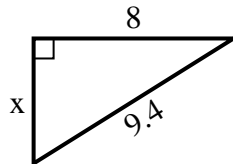
6) perimeter = 25.6 u



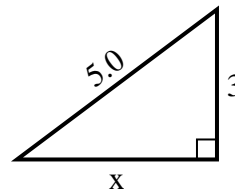
7) perimeter = 13.8 u



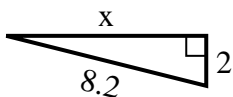
8) perimeter = 22.4 u



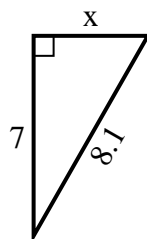
9) perimeter = 12 u



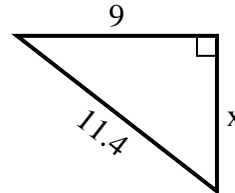
10) perimeter = 18.2 u



11) perimeter = 19.1 u



12) perimeter = 27.4 u



Answers

1. 6

2. 3

3. 3

4. 5

5. 9

6. 8

7. 3

8. 5

9. 4

10. 8

11. 4

12. 7