



Determine which pictograph best represents the information in the chart.

Answers

1)

Year	Snow Days
1991	2
1992	6
1993	3
1994	10
1995	5

2)

Year	Snow Days
1991	7
1992	8
1993	10
1994	4
1995	5

3)

Year	Snow Days
1991	2
1992	7
1993	6
1994	10
1995	4

4)

Year	Snow Days
1991	7
1992	10
1993	3
1994	2
1995	8

5)






Year	Snow Days
1991	6
1992	9
1993	1
1994	8
1995	4


6)

Year	Snow Days
1991	9
1992	10
1993	1
1994	2
1995	6






1. _____
2. _____
3. _____
4. _____
5. _____
6. _____


A.

Year	Snow Days
1991	
1992	
1993	
1994	
1995	






Each  = 1 day of snow


B.

Year	Snow Days
1991	
1992	
1993	
1994	
1995	






Each  = 1 day of snow


C.

Year	Snow Days
1991	
1992	
1993	
1994	
1995	






Each  = 1 day of snow


D.

Year	Snow Days
1991	
1992	
1993	
1994	
1995	






Each  = 1 day of snow


E.

Year	Snow Days
1991	
1992	
1993	
1994	
1995	

Each  = 1 day of snow

F.

Year	Snow Days
1991	
1992	
1993	
1994	
1995	

Each  = 1 day of snow



Determine which pictograph best represents the information in the chart.

1)

Year	Snow Days
1991	2
1992	6
1993	3
1994	10
1995	5

2)

Year	Snow Days
1991	7
1992	8
1993	10
1994	4
1995	5

3)

Year	Snow Days
1991	2
1992	7
1993	6
1994	10
1995	4

4)

Year	Snow Days
1991	7
1992	10
1993	3
1994	2
1995	8

5)

Year	Snow Days
1991	6
1992	9
1993	1
1994	8
1995	4

6)

Year	Snow Days
1991	9
1992	10
1993	1
1994	2
1995	6

Answers

1. **C**
2. **E**
3. **F**
4. **A**
5. **D**
6. **B**

A.

Year	Snow Days
1991	
1992	
1993	
1994	
1995	

Each = 1 day of snow

B.

Year	Snow Days
1991	
1992	
1993	
1994	
1995	

Each = 1 day of snow

C.

Year	Snow Days
1991	
1992	
1993	
1994	
1995	

Each = 1 day of snow

D.

Year	Snow Days
1991	
1992	
1993	
1994	
1995	

Each = 1 day of snow

E.

Year	Snow Days
1991	
1992	
1993	
1994	
1995	

Each = 1 day of snow

F.

Year	Snow Days
1991	
1992	
1993	
1994	
1995	

Each = 1 day of snow