



Determine which pictograph best represents the information in the chart.

**Answers**

1)

| Year | Snow Days |
|------|-----------|
| 1991 | 24        |
| 1992 | 30        |
| 1993 | 12        |
| 1994 | 9         |
| 1995 | 3         |

2)

| Year | Snow Days |
|------|-----------|
| 1991 | 15        |
| 1992 | 6         |
| 1993 | 21        |
| 1994 | 18        |
| 1995 | 24        |

3)

| Year | Snow Days |
|------|-----------|
| 1991 | 30        |
| 1992 | 18        |
| 1993 | 27        |
| 1994 | 12        |
| 1995 | 3         |

4)

| Year | Snow Days |
|------|-----------|
| 1991 | 30        |
| 1992 | 15        |
| 1993 | 12        |
| 1994 | 24        |
| 1995 | 21        |

5)

| Year | Snow Days |
|------|-----------|
| 1991 | 30        |
| 1992 | 6         |
| 1993 | 3         |
| 1994 | 27        |
| 1995 | 24        |

6)

| Year | Snow Days |
|------|-----------|
| 1991 | 21        |
| 1992 | 6         |
| 1993 | 30        |
| 1994 | 27        |
| 1995 | 15        |

1. \_\_\_\_\_

2. \_\_\_\_\_






3. \_\_\_\_\_


4. \_\_\_\_\_

5. \_\_\_\_\_






6. \_\_\_\_\_


A.

| Year | Snow Days   |
|------|---|
| 1991 |    |
| 1992 |    |
| 1993 |   |
| 1994 |  |
| 1995 |  |






Each  = 3 day of snow


B.

| Year | Snow Days  |
|------|--|
| 1991 |    |
| 1992 |    |
| 1993 |   |
| 1994 |  |
| 1995 |  |






Each  = 3 day of snow


C.

| Year | Snow Days   |
|------|---|
| 1991 |  |
| 1992 |  |
| 1993 |  |
| 1994 |  |
| 1995 |  |






Each  = 3 day of snow


D.

| Year | Snow Days  |
|------|--|
| 1991 |  |
| 1992 |  |
| 1993 |  |
| 1994 |  |
| 1995 |  |






Each  = 3 day of snow


E.

| Year | Snow Days   |
|------|---|
| 1991 |  |
| 1992 |  |
| 1993 |  |
| 1994 |  |
| 1995 |  |

Each  = 3 day of snow

F.

| Year | Snow Days  |
|------|--|
| 1991 |  |
| 1992 |  |
| 1993 |  |
| 1994 |  |
| 1995 |  |

Each  = 3 day of snow



Determine which pictograph best represents the information in the chart.

**Answers**

1)

| Year | Snow Days |
|------|-----------|
| 1991 | 24        |
| 1992 | 30        |
| 1993 | 12        |
| 1994 | 9         |
| 1995 | 3         |

2)

| Year | Snow Days |
|------|-----------|
| 1991 | 15        |
| 1992 | 6         |
| 1993 | 21        |
| 1994 | 18        |
| 1995 | 24        |

3)

| Year | Snow Days |
|------|-----------|
| 1991 | 30        |
| 1992 | 18        |
| 1993 | 27        |
| 1994 | 12        |
| 1995 | 3         |

4)

| Year | Snow Days |
|------|-----------|
| 1991 | 30        |
| 1992 | 15        |
| 1993 | 12        |
| 1994 | 24        |
| 1995 | 21        |

5)






| Year | Snow Days |
|------|-----------|
| 1991 | 30        |
| 1992 | 6         |
| 1993 | 3         |
| 1994 | 27        |
| 1995 | 24        |


6)

| Year | Snow Days |
|------|-----------|
| 1991 | 21        |
| 1992 | 6         |
| 1993 | 30        |
| 1994 | 27        |
| 1995 | 15        |






1. **A**2. **D**3. **C**4. **B**5. **E**6. **F**


A.

| Year | Snow Days   |
|------|---|
| 1991 |    |
| 1992 |    |
| 1993 |   |
| 1994 |  |
| 1995 |  |






Each  = 3 day of snow


B.

| Year | Snow Days  |
|------|--|
| 1991 |    |
| 1992 |    |
| 1993 |   |
| 1994 |  |
| 1995 |  |






Each  = 3 day of snow


C.

| Year | Snow Days   |
|------|---|
| 1991 |  |
| 1992 |  |
| 1993 |  |
| 1994 |  |
| 1995 |  |






Each  = 3 day of snow


D.

| Year | Snow Days  |
|------|--|
| 1991 |  |
| 1992 |  |
| 1993 |  |
| 1994 |  |
| 1995 |  |






Each  = 3 day of snow


E.

| Year | Snow Days   |
|------|---|
| 1991 |  |
| 1992 |  |
| 1993 |  |
| 1994 |  |
| 1995 |  |

Each  = 3 day of snow

F.

| Year | Snow Days  |
|------|--|
| 1991 |  |
| 1992 |  |
| 1993 |  |
| 1994 |  |
| 1995 |  |

Each  = 3 day of snow