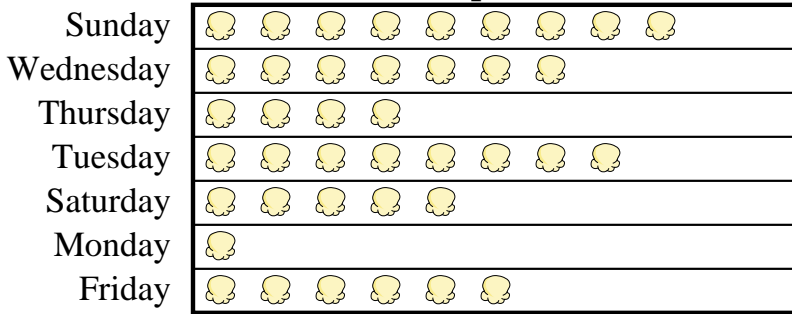




Answers

A movie theater was tracking the number of small popcorns they sold each day. They organized the information in the pictograph below.

**Small Popcorns Sold**




= 8 Bags Sold

- How many bags did they sell on Thursday?
- Which day did they sell the most popcorn?
- Which day did they sell exactly 64 bags?
- Which day did they sell the least amount of popcorn?
- Which day did they sell more popcorn, Sunday or Wednesday?

- \_\_\_\_\_
- \_\_\_\_\_
- \_\_\_\_\_
- \_\_\_\_\_
- \_\_\_\_\_
- \_\_\_\_\_
- \_\_\_\_\_
- \_\_\_\_\_
- \_\_\_\_\_
- \_\_\_\_\_

Several students were helping to decorate the school halls by drawing pictures to hang up. The pictograph below shows the number of pictures each student drew.

**Pictures Drawn**



= 9 pictures drawn

- Who drew exactly 63 pictures?
- Did Dave or Maria draw more pictures?
- How many pictures did Vanessa draw?
- Who drew the fewest pictures?
- Who drew the most pictures?



A movie theater was tracking the number of small popcorns they sold each day. They organized the information in the pictograph below.

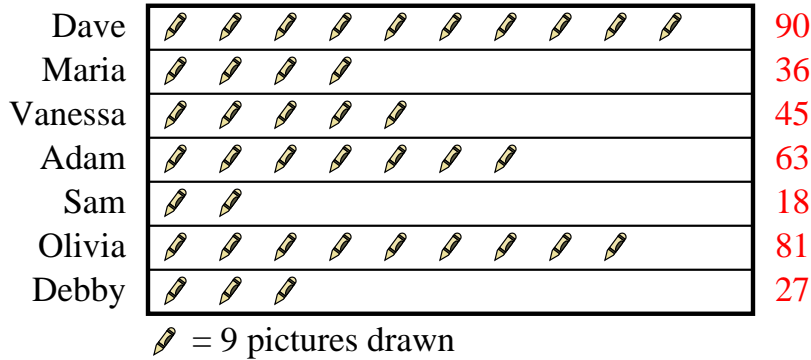
**Small Popcorns Sold**



- How many bags did they sell on Thursday?
- Which day did they sell the most popcorn?
- Which day did they sell exactly 64 bags?
- Which day did they sell the least amount of popcorn?
- Which day did they sell more popcorn, Sunday or Wednesday?

Several students were helping to decorate the school halls by drawing pictures to hang up. The pictograph below shows the number of pictures each student drew.

**Pictures Drawn**



- Who drew exactly 63 pictures?
- Did Dave or Maria draw more pictures?
- How many pictures did Vanessa draw?
- Who drew the fewest pictures?
- Who drew the most pictures?

Answers

- 32
- Sunday
- Tuesday
- Monday
- Sunday
- Adam
- Dave
- 45
- Sam
- Dave