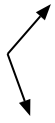




Determine if the angle shown is 'less', 'more' or 'equal' to 90°.

Answers

Ex)



1)



2)



Ex. more

1. _____

2. _____

3)



4)



5)



3. _____

4. _____

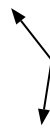
6)



7)



8)

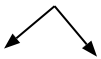


5. _____

6. _____

7. _____

9)



10)



11)



8. _____

9. _____

10. _____

12)



13)



14)



11. _____

12. _____

13. _____

15)



16)



17)



14. _____

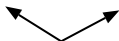
15. _____

16. _____

18)



19)



20)



17. _____

18. _____

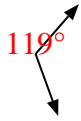
19. _____

20. _____



Determine if the angle shown is 'less', 'more' or 'equal' to 90°.

Ex)



1)



2)



Answers

Ex. more

1. less

2. equal

3. equal

4. less

5. equal

6. less

7. more

8. more

9. equal

10. less

11. equal

12. equal

13. less

14. less

15. less

16. equal

17. less

18. more

19. more

20. more

3)



4)



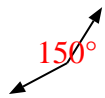
5)



6)



7)



8)



9)



10)



11)



12)



13)



14)



15)



16)



17)



18)



19)



20)

