

**Solve each problem.****Answers**

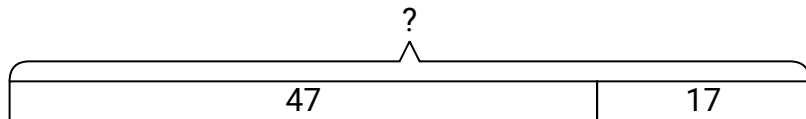
- 1) A grocery store had 47 bottles of regular soda and 17 bottles of diet soda. How many bottles did they have total?
- 2) At the zoo Amy took 14 pictures. If her sister took another 23 pictures, how many did they take total?
- 3) Jerry had 22 books. During the book fair he bought 16 more. How many books did Jerry have total?
- 4) A baker already had 18 cakes but made 19 extra. How many cakes did the baker have total?
- 5) A clown gave away 19 balloons to girls and 19 balloons to boys. How many balloons did he give away total?
- 6) For Halloween Billy got 48 ounces of candy and Maria got 19 ounces of candy. What is the combined weight they received?
- 7) At the fair Haley started with 41 tickets and then bought 43 more. How many tickets did Haley have total?

1. _____
2. _____
3. _____
4. _____
5. _____
6. _____
7. _____

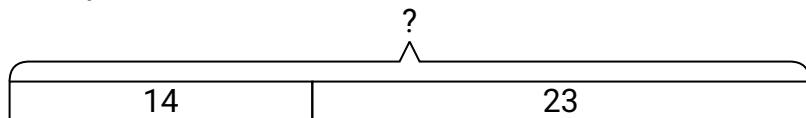


Solve each problem.

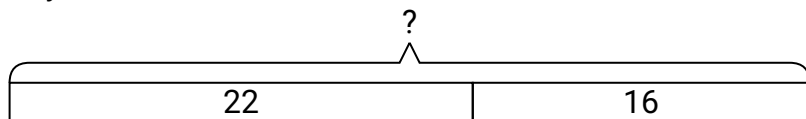
- 1) A grocery store had 47 bottles of regular soda and 17 bottles of diet soda. How many bottles did they have total?



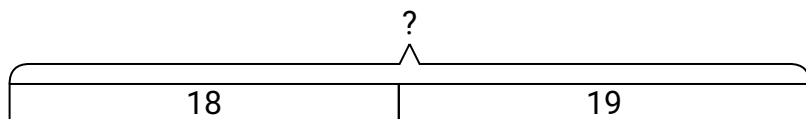
- 2) At the zoo Amy took 14 pictures. If her sister took another 23 pictures, how many did they take total?



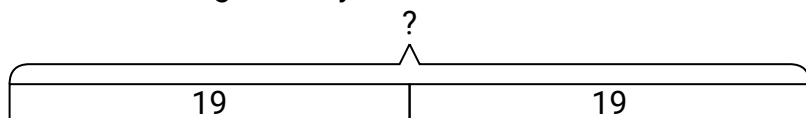
- 3) Jerry had 22 books. During the book fair he bought 16 more. How many books did Jerry have total?



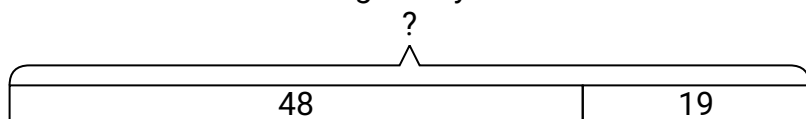
- 4) A baker already had 18 cakes but made 19 extra. How many cakes did the baker have total?



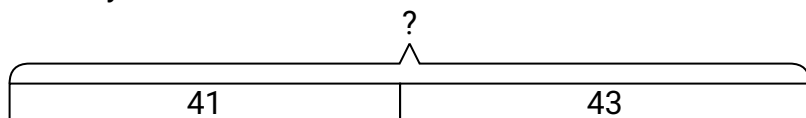
- 5) A clown gave away 19 balloons to girls and 19 balloons to boys. How many balloons did he give away total?



- 6) For Halloween Billy got 48 ounces of candy and Maria got 19 ounces of candy. What is the combined weight they received?



- 7) At the fair Haley started with 41 tickets and then bought 43 more. How many tickets did Haley have total?

**Answers**

1. **64**
2. **37**
3. **38**
4. **37**
5. **38**
6. **67**
7. **84**