



Solve each problem.

Answers

1) Kristine had \$41 and Tiffany had \$28. If they combined their money, how much would they have?

1. _____

2) For Halloween Edward got 42 ounces of candy and Rachel got 39 ounces of candy. What is the combined weight they received?

2. _____

3) Oliver had \$50. Later he sold some of his old toys and got another \$37. How much money does he have total?

3. _____

4) A grocery store had 19 bottles of regular soda and 25 bottles of diet soda. How many bottles did they have total?

4. _____

5) Amy had 27 DS games and her friend had 16 games. How many do they have total?

5. _____

6) A farmer planted 35 seeds on Wednesday and another 10 seeds on Thursday. How many seeds did he plant total?

6. _____

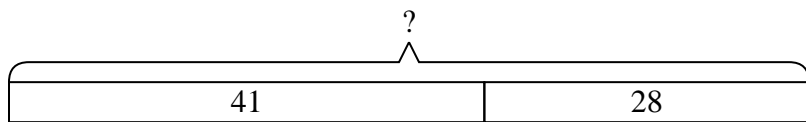
7) While playing a game George had 38 points. If he scored another 47 points, how many points would he have total?

7. _____

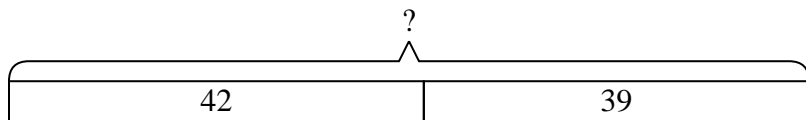


Solve each problem.

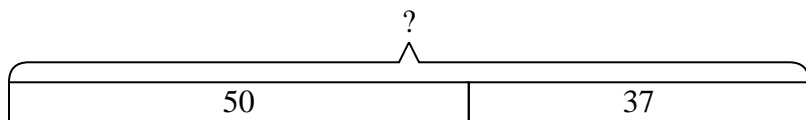
- 1) Kristine had \$41 and Tiffany had \$28. If they combined their money, how much would they have?



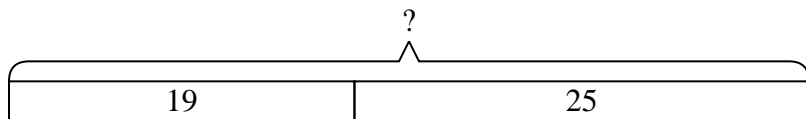
- 2) For Halloween Edward got 42 ounces of candy and Rachel got 39 ounces of candy. What is the combined weight they received?



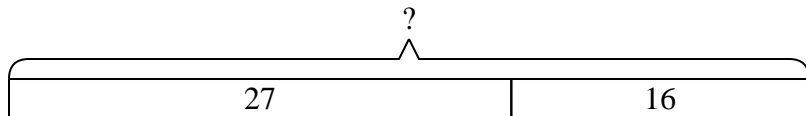
- 3) Oliver had \$50. Later he sold some of his old toys and got another \$37. How much money does he have total?



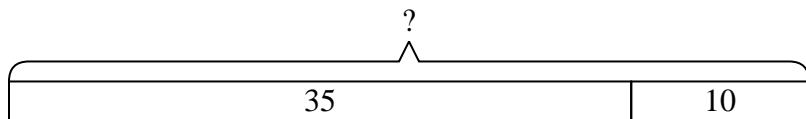
- 4) A grocery store had 19 bottles of regular soda and 25 bottles of diet soda. How many bottles did they have total?



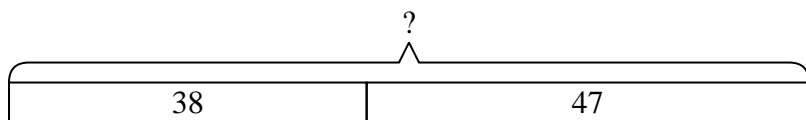
- 5) Amy had 27 DS games and her friend had 16 games. How many do they have total?



- 6) A farmer planted 35 seeds on Wednesday and another 10 seeds on Thursday. How many seeds did he plant total?



- 7) While playing a game George had 38 points. If he scored another 47 points, how many points would he have total?



Answers

1. 69

2. 81

3. 87

4. 44

5. 43

6. 45

7. 85