

**Solve each problem.****Answers**

- 1) An industrial machine can make thirty-seven crayons a day. If each box of crayons has five crayons in it, how many full boxes does the machine make a day?
- 2) A vase can hold three flowers. If a florist had twenty flowers she wanted to put equally into vases, how many flowers would be in the last vase that isn't full?
- 3) Billy had forty-seven baseball cards he's putting into a binder with three on each page. How many cards will he have on the page that isn't full?
- 4) Edward bought forty-three pieces of candy to give to two of his friends. If he wants to give each friend the same amount, how many pieces would he have left over?
- 5) Each house a carpenter builds needs five sinks. If he bought thirty-six sinks, how many houses would that cover?
- 6) It takes three apples to make an apple pie. If a chef bought twenty-eight apples, the last pie would need how many more apples?

1. _____

2. _____

3. _____

4. _____

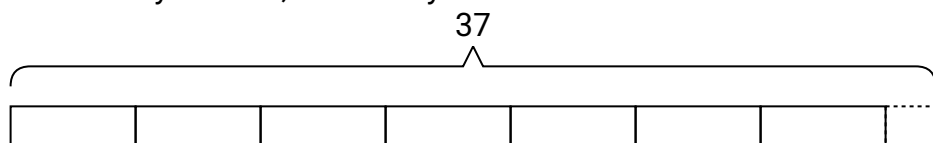
5. _____

6. _____

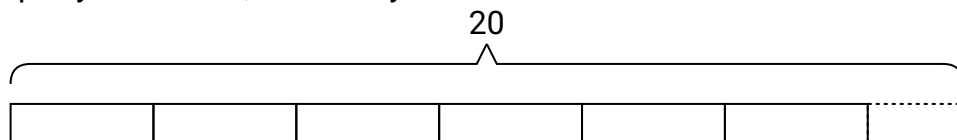


Solve each problem.

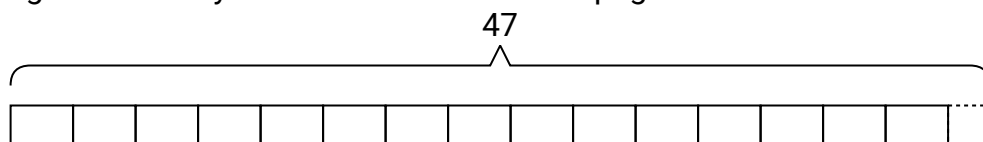
- 1) An industrial machine can make thirty-seven crayons a day. If each box of crayons has five crayons in it, how many full boxes does the machine make a day?



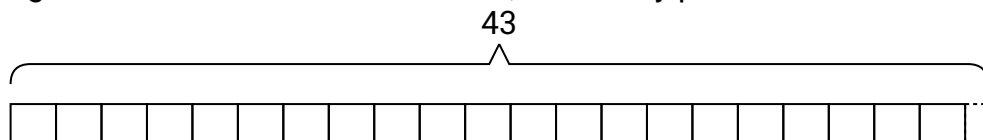
- 2) A vase can hold three flowers. If a florist had twenty flowers she wanted to put equally into vases, how many flowers would be in the last vase that isn't full?



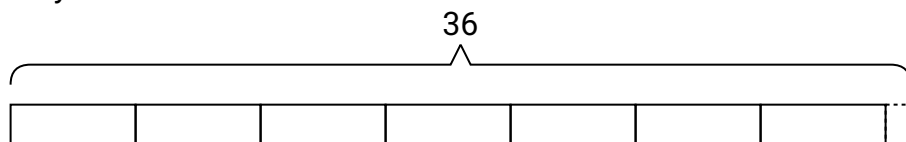
- 3) Billy had forty-seven baseball cards he's putting into a binder with three on each page. How many cards will he have on the page that isn't full?



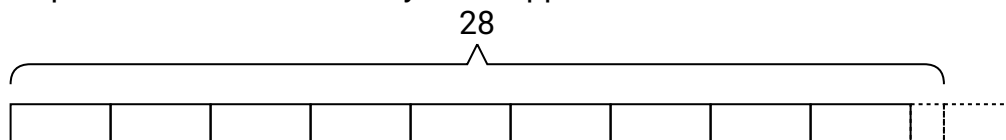
- 4) Edward bought forty-three pieces of candy to give to two of his friends. If he wants to give each friend the same amount, how many pieces would he have left over?



- 5) Each house a carpenter builds needs five sinks. If he bought thirty-six sinks, how many houses would that cover?



- 6) It takes three apples to make an apple pie. If a chef bought twenty-eight apples, the last pie would need how many more apples?

**Answers**

1. 7
2. 2
3. 2
4. 1
5. 7
6. 2