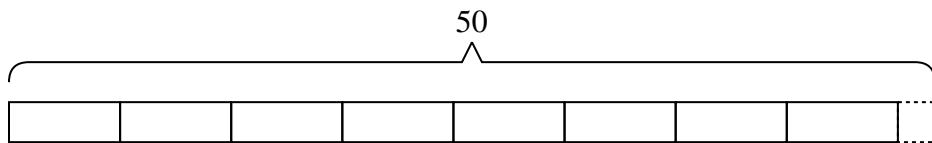




Solve each problem.

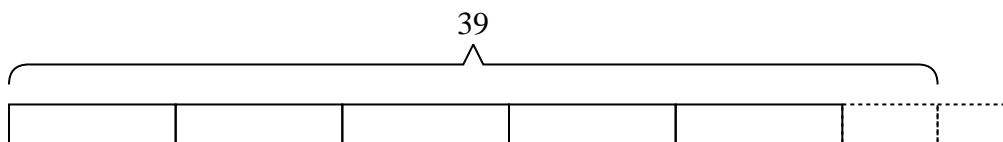
Answers

- 1) A vat of orange juice was {fifty} pints. If you wanted to pour the vat into {six} glasses with the same amount in each glass, how many pints would be in each glass?



1. _____

- 2) A movie store had {thirty-nine} movies they were putting on {seven} shelves. If the owner wanted to make sure each shelf had the same number of movies how many more movies would he need?



2. _____

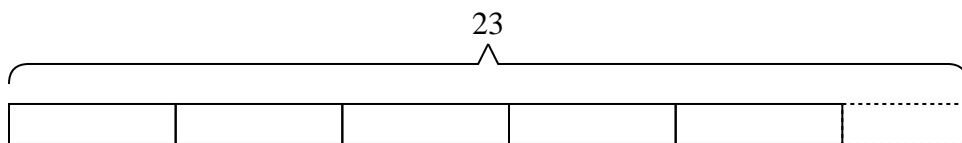
3. _____

4. _____

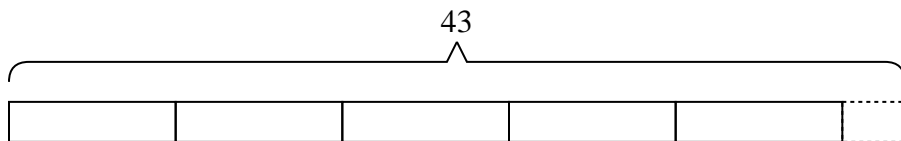
5. _____

6. _____

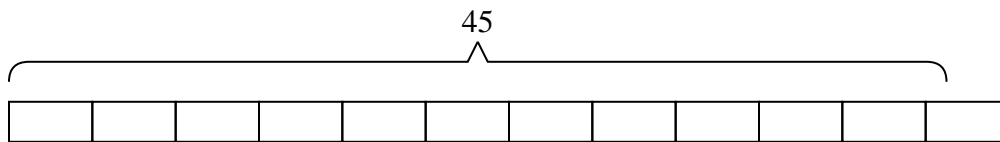
- 3) A box of computer paper has {twenty-three} sheets left in it. If each printer in a computer lab needed {four} sheets how many printers would the box fill up?



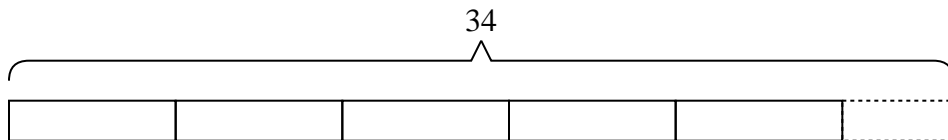
- 4) The roller coaster at the state fair costs {eight} tickets per ride. If you had {forty-three} tickets, how many tickets would you have left if you rode it as many times as you could?



- 5) Edward has to sell {forty-five} chocolate bars to win a trip. If each box contains {four} chocolate bars, how many boxes will he need to sell to win the trip?



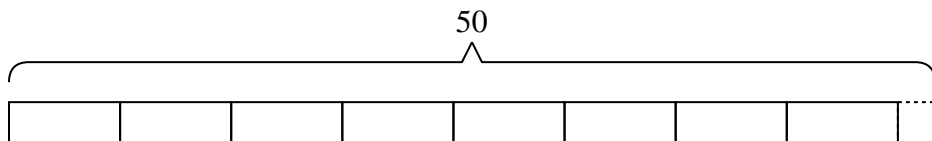
- 6) Nancy had {thirty-four} photos to put into a photo album. If each page holds {six} photos, how many full pages will she have?



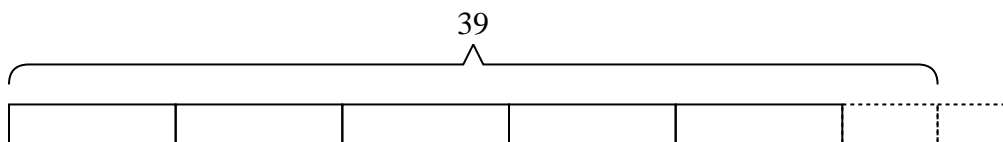


Solve each problem.

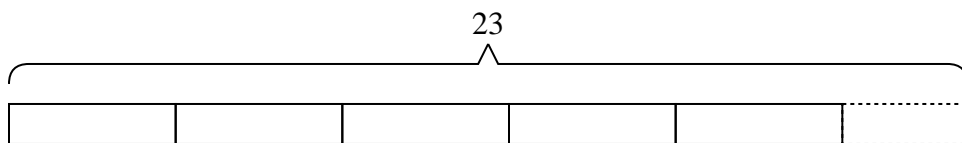
- 1) A vat of orange juice was {fifty} pints. If you wanted to pour the vat into {six} glasses with the same amount in each glass, how many pints would be in each glass?



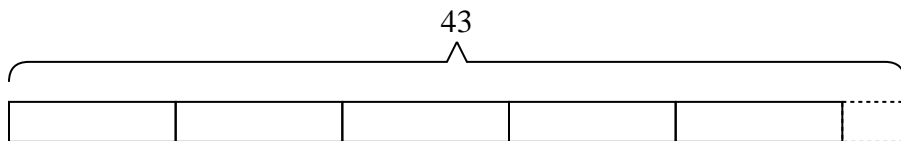
- 2) A movie store had {thirty-nine} movies they were putting on {seven} shelves. If the owner wanted to make sure each shelf had the same number of movies how many more movies would he need?



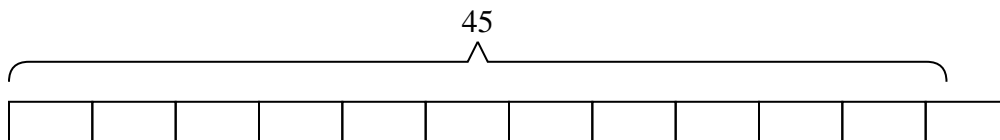
- 3) A box of computer paper has {twenty-three} sheets left in it. If each printer in a computer lab needed {four} sheets how many printers would the box fill up?



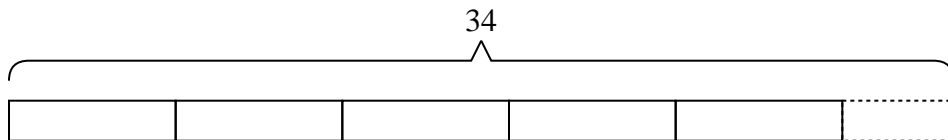
- 4) The roller coaster at the state fair costs {eight} tickets per ride. If you had {forty-three} tickets, how many tickets would you have left if you rode it as many times as you could?



- 5) Edward has to sell {forty-five} chocolate bars to win a trip. If each box contains {four} chocolate bars, how many boxes will he need to sell to win the trip?



- 6) Nancy had {thirty-four} photos to put into a photo album. If each page holds {six} photos, how many full pages will she have?



Answers

1. 8

2. 3

3. 5

4. 3

5. 12

6. 5