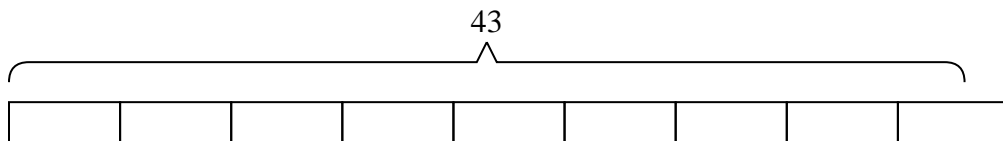




Solve each problem.

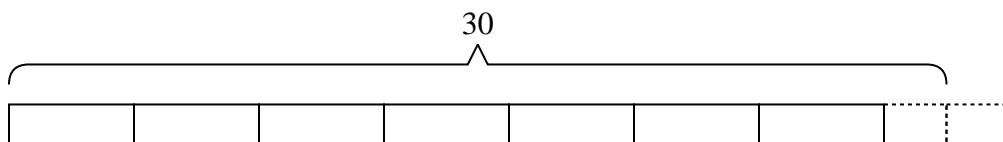
Answers

- 1) A flash drive could hold {five} gigs of data. If you needed to store {forty-three} gigs, how many flash drive would you need?



1. _____

- 2) Rachel had {thirty} pennies. She wanted to place the pennies into {four} stacks, with the same amount in each stack. How many more pennies would she need so all the stacks would be equal?



2. _____

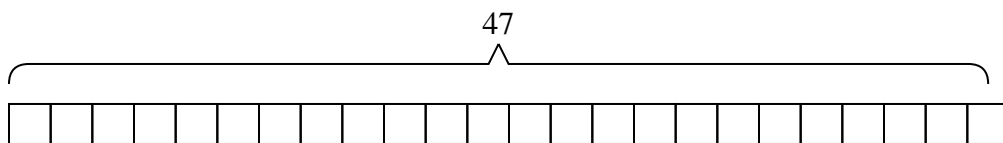
3. _____

4. _____

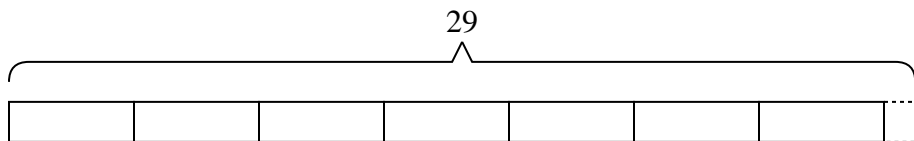
5. _____

6. _____

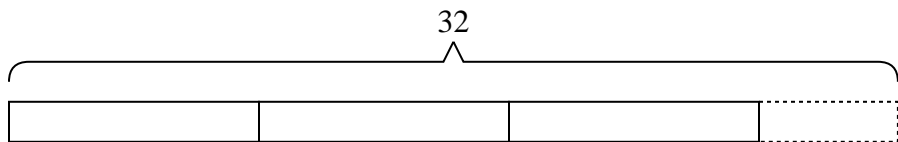
- 3) A truck can hold {two} boxes. If you needed to move {forty-seven} boxes across town, how many trips would you need to make?



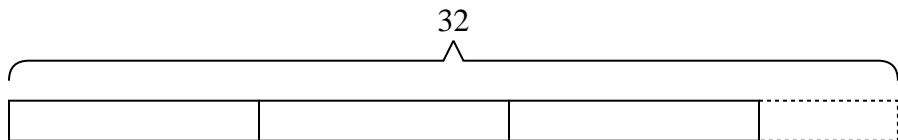
- 4) The roller coaster at the state fair costs {four} tickets per ride. If you had {twenty-nine} tickets, how many tickets would you have left if you rode it as many times as you could?



- 5) An industrial machine can make {thirty-two} crayons a day. If each box of crayons has {nine} crayons in it, how many full boxes does the machine make a day?



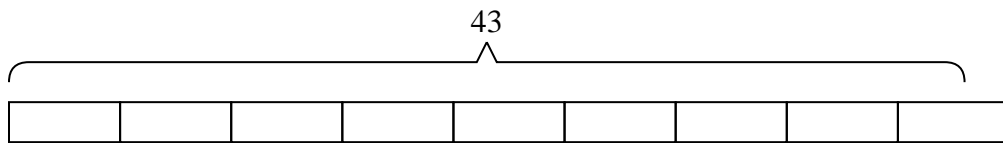
- 6) A baker had {nine} boxes for donuts. He ended up making {thirty-two} donuts and splitting them evenly between the boxes. How many extra donuts did he end up with?



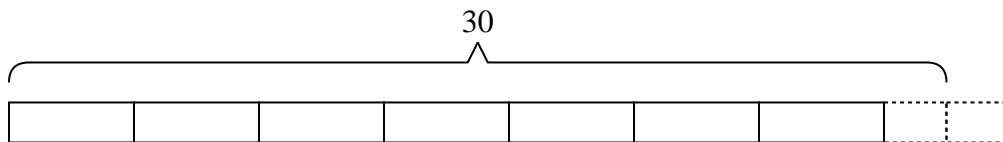


Solve each problem.

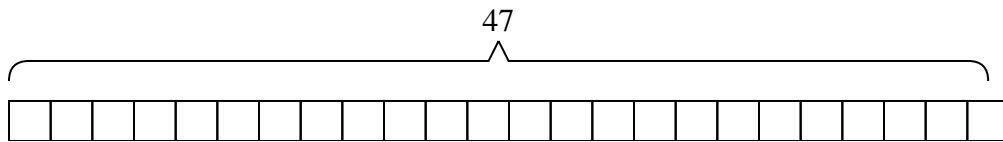
- 1) A flash drive could hold {five} gigs of data. If you needed to store {forty-three} gigs, how many flash drive would you need?



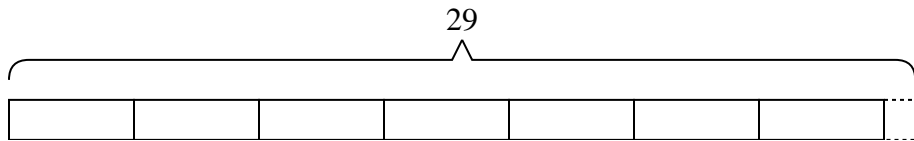
- 2) Rachel had {thirty} pennies. She wanted to place the pennies into {four} stacks, with the same amount in each stack. How many more pennies would she need so all the stacks would be equal?



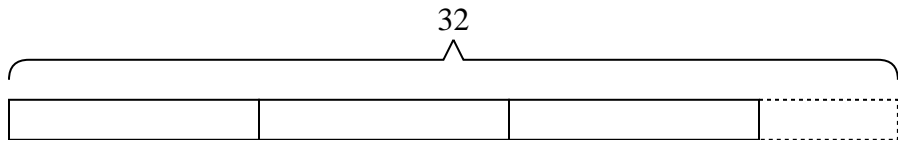
- 3) A truck can hold {two} boxes. If you needed to move {forty-seven} boxes across town, how many trips would you need to make?



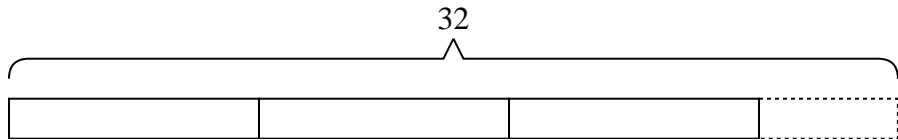
- 4) The roller coaster at the state fair costs {four} tickets per ride. If you had {twenty-nine} tickets, how many tickets would you have left if you rode it as many times as you could?



- 5) An industrial machine can make {thirty-two} crayons a day. If each box of crayons has {nine} crayons in it, how many full boxes does the machine make a day?



- 6) A baker had {nine} boxes for donuts. He ended up making {thirty-two} donuts and splitting them evenly between the boxes. How many extra donuts did he end up with?



Answers

1. 9

2. 2

3. 24

4. 1

5. 3

6. 5