

**Solve each problem using a tape diagram.****Answers**

Ex) Faye was looking at her Nintendo collection. She had 464 wiiU games. She had $\frac{5}{8}$ as many DS games and $\frac{1}{5}$ as many 3ds games as DS games. How many 3ds games does she have?

Ex. 58

1. _____

2. _____

3. _____

4. _____

1) Two years ago the fair had $\frac{1}{3}$ as many people as 1 year ago. 1 year ago the fair had $\frac{3}{6}$ as many people as this year. This year the fair had 216 people. How many people did the fair have 2 years ago?

2) A chef was ordering vegetables for his restaurant. He order \$640 worth of potatoes. He also spent $\frac{4}{8}$ as much on tomatoes. Finally he spent $\frac{3}{4}$ as much on green beans as he did on tomatoes. How much did he spend on green beans?

3) Vanessa was trying to determine the weight of a small rock. She determined the small rock was $\frac{4}{5}$ as heavy as a medium rock. The medium rock was $\frac{5}{7}$ as heavy as a large rock. The large rock weighed 511 grams. How heavy was the small rock?

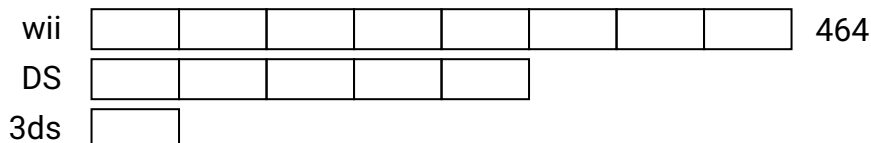
4) On Super Bowl Sunday a store sold 324 sodas. They sold $\frac{4}{9}$ as many bags of chips. They also sold $\frac{3}{4}$ as many jars of dip as bags of chips. How many jars of dip did they sell?




Solve each problem using a tape diagram.

Answers

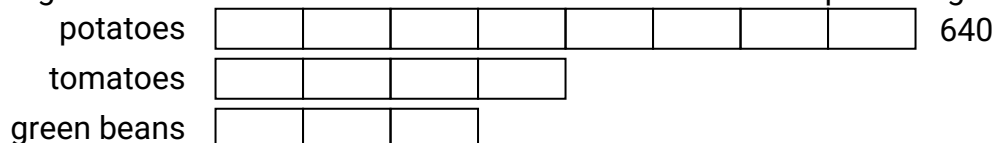
- Ex) Faye was looking at her Nintendo collection. She had 464 wiiU games. She had $\frac{5}{8}$ as many DS games and $\frac{1}{5}$ as many 3ds games as DS games. How many 3ds games does she have?

Ex. 581. 362. 2403. 2924. 108

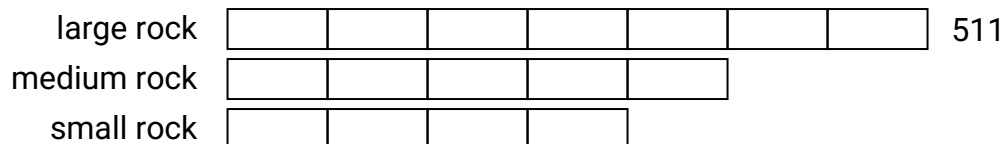
- 1) Two years ago the fair had $\frac{1}{3}$ as many people as 1 year ago. 1 year ago the fair had $\frac{3}{6}$ as many people as this year. This year the fair had 216 people. How many people did the fair have 2 years ago?



- 2) A chef was ordering vegetables for his restaurant. He order \$640 worth of potatoes. He also spent $\frac{4}{8}$ as much on tomatoes. Finally he spent $\frac{3}{4}$ as much on green beans as he did on tomatoes. How much did he spend on green beans?



- 3) Vanessa was trying to determine the weight of a small rock. She determined the small rock was $\frac{4}{5}$ as heavy as a medium rock. The medium rock was $\frac{5}{7}$ as heavy as a large rock. The large rock weighed 511 grams. How heavy was the small rock?



- 4) On Super Bowl Sunday a store sold 324 sodas. They sold $\frac{4}{9}$ as many bags of chips. They also sold $\frac{3}{4}$ as many jars of dip as bags of chips. How many jars of dip did they sell?

