



Solve each problem using a tape diagram.

Answers

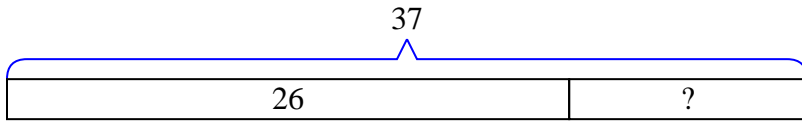
- 1) Tom owned 37 video games for his Playstation and Xbox. 26 of the games were for Xbox. How many games does Tom have for playstation?
- 2) Janet had 58 pieces of candy. 11 pieces are chocolate and the rest are sugary. How many pieces of candy does Janet have that are sugary?
- 3) A store had 51 sodas on Monday. If they sold 41 of them on Tuesday, how many would they have left on Wednesday?
- 4) Frank and Isabel have 44 books. Isabel has 26. How many books does Frank have?
- 5) Emily had 76 pieces of paper in her folder. She used 29 pieces. How many pieces does she have now?
- 6) A museum had 38 paintings. If they got rid of 27 of them, how many pictures would they have left?
- 7) Amy's hair was 49 centimeters long. If she cut off 11 centimeters, how long is her hair now?

1. _____
2. _____
3. _____
4. _____
5. _____
6. _____
7. _____

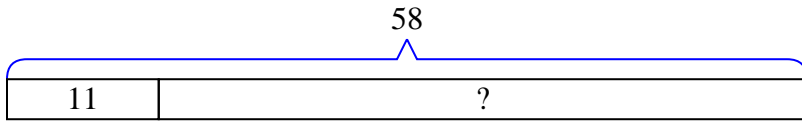


Solve each problem using a tape diagram.

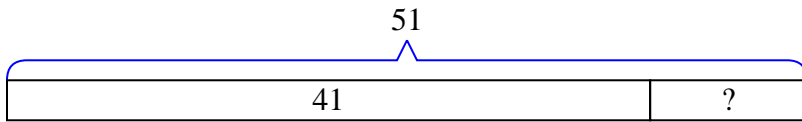
- 1) Tom owned 37 video games for his Playstation and Xbox. 26 of the games were for Xbox. How many games does Tom have for playstation?



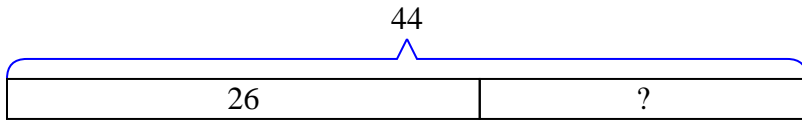
- 2) Janet had 58 pieces of candy. 11 pieces are chocolate and the rest are sugary. How many pieces of candy does Janet have that are sugary?



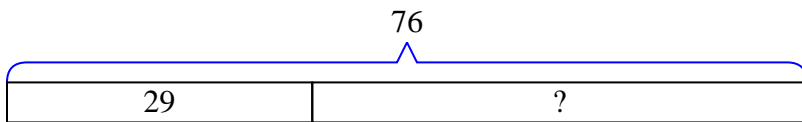
- 3) A store had 51 sodas on Monday. If they sold 41 of them on Tuesday, how many would they have left on Wednesday?



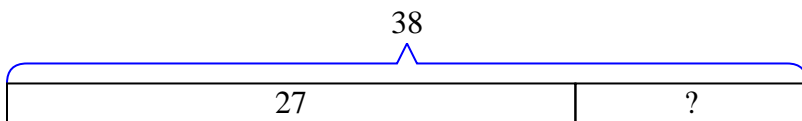
- 4) Frank and Isabel have 44 books. Isabel has 26. How many books does Frank have?



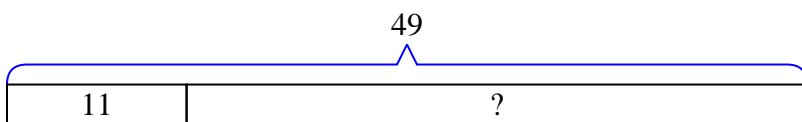
- 5) Emily had 76 pieces of paper in her folder. She used 29 pieces. How many pieces does she have now?



- 6) A museum had 38 paintings. If they got rid of 27 of them, how many pictures would they have left?



- 7) Amy's hair was 49 centimeters long. If she cut off 11 centimeters, how long is her hair now?

Answers

1. 11
2. 47
3. 10
4. 18
5. 47
6. 11
7. 38