



Solve each problem using a tape diagram.

Answers

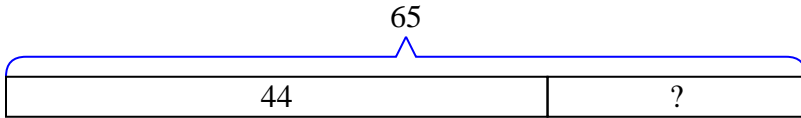
- 1) Janet had 65 pencils. If she used 44 of them, how many would she have left?
- 2) Rachel listened to 81 songs on her mp3 player. 42 of them were pop and the rest were classical. How many classical songs did she listen to?
- 3) There were 87 people on the train. At the first stop 50 people got off. How many people are left on the train?
- 4) Vanessa had 44 3DS games. If she gave 19 to her friend, how many would she have left?
- 5) Amy had 43 photos on her computer. She deleted 27. How many photos does she have left?
- 6) A waiter has 45 customers. If 35 left, how many customers would the waiter still have?
- 7) George had 85 cherries. He ate 38 of them. How many cherries does George have left?

1. _____
2. _____
3. _____
4. _____
5. _____
6. _____
7. _____

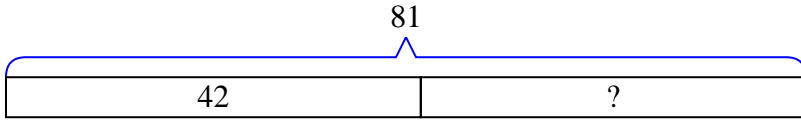


Solve each problem using a tape diagram.

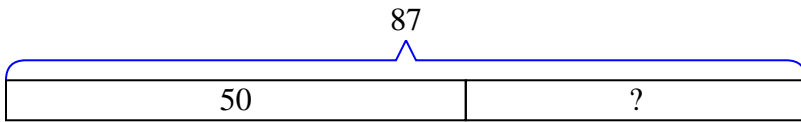
- 1) Janet had 65 pencils. If she used 44 of them, how many would she have left?



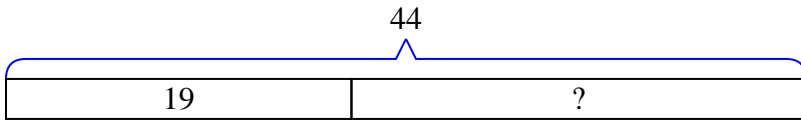
- 2) Rachel listened to 81 songs on her mp3 player. 42 of them were pop and the rest were classical. How many classical songs did she listen to?



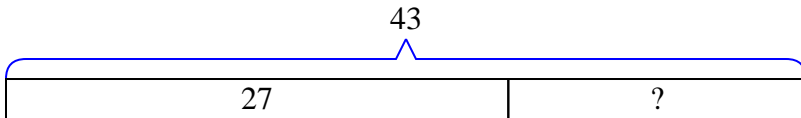
- 3) There were 87 people on the train. At the first stop 50 people got off. How many people are left on the train?



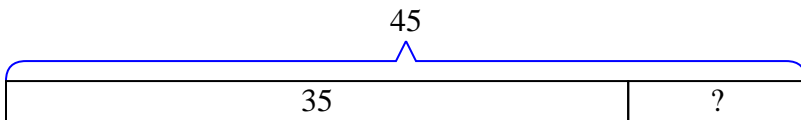
- 4) Vanessa had 44 3DS games. If she gave 19 to her friend, how many would she have left?



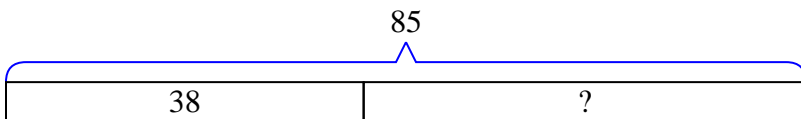
- 5) Amy had 43 photos on her computer. She deleted 27. How many photos does she have left?



- 6) A waiter has 45 customers. If 35 left, how many customers would the waiter still have?



- 7) George had 85 cherries. He ate 38 of them. How many cherries does George have left?



Answers

1. 21
 2. 39
 3. 37
 4. 25
 5. 16
 6. 10
 7. 47