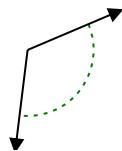




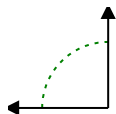
Determine if the angle shown is acute, obtuse, right or straight.

Answers

Ex)



1)



2)

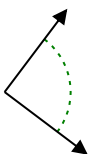


Ex. **obtuse**

1. _____

2. _____

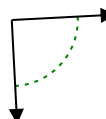
3)



4)



5)



3. _____

4. _____

6)



7)



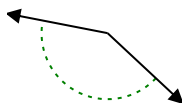
8)



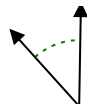
5. _____

6. _____

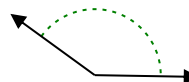
9)



10)



11)



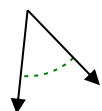
7. _____

8. _____

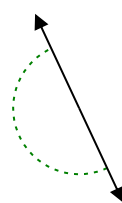
9. _____

10. _____

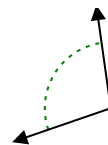
12)



13)



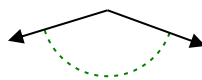
14)



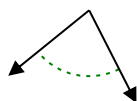
11. _____

12. _____

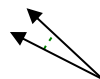
15)



16)



17)



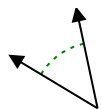
13. _____

14. _____

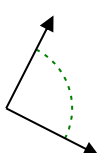
15. _____

16. _____

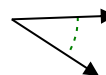
18)



19)



20)



17. _____

18. _____

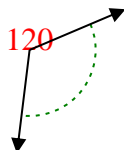
19. _____

20. _____

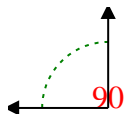


Determine if the angle shown is acute, obtuse, right or straight.

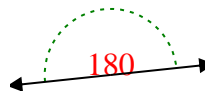
Ex)



1)



2)



Ex.

obtuse

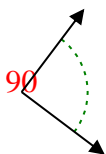
1.

right

2.

straight

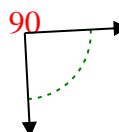
3)



4)



5)



3.

right

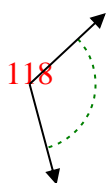
4.

acute

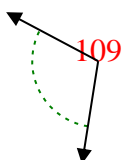
5.

right

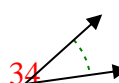
6)



7)



8)



6.

obtuse

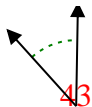
7.

obtuse

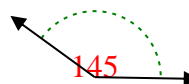
9)



10)



11)



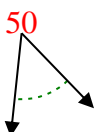
9.

obtuse

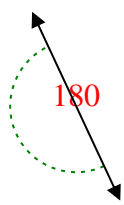
10.

acute

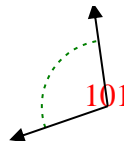
12)



13)



14)



11.

obtuse

12.

acute

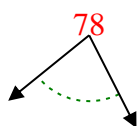
13.

straight

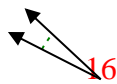
15)



16)



17)



14.

obtuse

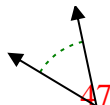
15.

obtuse

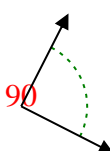
16.

acute

18)



19)



20)



17.

acute

18.

acute

19.

right

20.

acute