

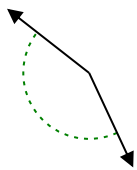


Determine if the angle shown is acute, obtuse, right or straight.

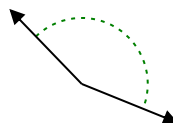
Ex)



1)



2)

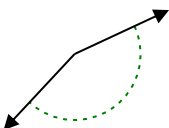


Answers

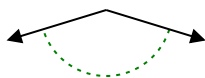
Ex. **straight**

- 1. _____
- 2. _____
- 3. _____
- 4. _____
- 5. _____
- 6. _____
- 7. _____
- 8. _____
- 9. _____
- 10. _____
- 11. _____
- 12. _____
- 13. _____
- 14. _____
- 15. _____
- 16. _____
- 17. _____
- 18. _____
- 19. _____
- 20. _____

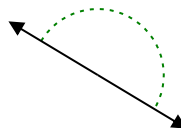
3)



4)



5)



6)



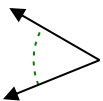
7)



8)



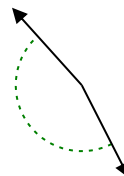
9)



10)



11)



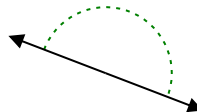
12)



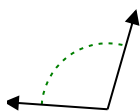
13)



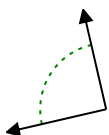
14)



15)



16)



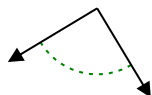
17)



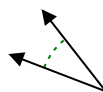
18)



19)



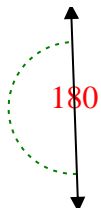
20)



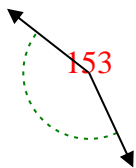


Determine if the angle shown is acute, obtuse, right or straight.

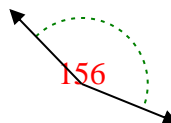
Ex)



1)



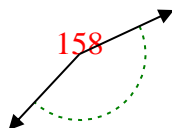
2)



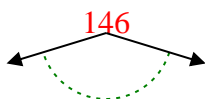
Answers

Ex. **straight**

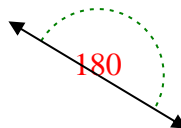
3)



4)



5)



1. **obtuse**

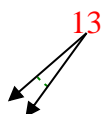
2. **obtuse**

3. **obtuse**

4. **obtuse**

5. **straight**

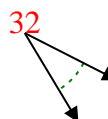
6)



7)



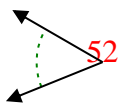
8)



6. **acute**

7. **acute**

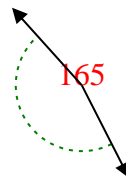
9)



10)



11)



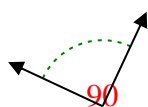
8. **acute**

9. **acute**

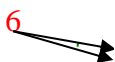
10. **acute**

11. **obtuse**

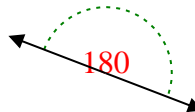
12)



13)



14)

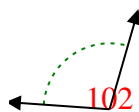


12. **right**

13. **acute**

14. **straight**

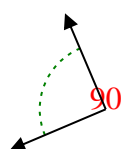
15)



16)



17)



15. **obtuse**

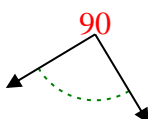
16. **right**

17. **right**

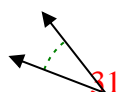
18)



19)



20)



18. **obtuse**

19. **right**

20. **acute**