



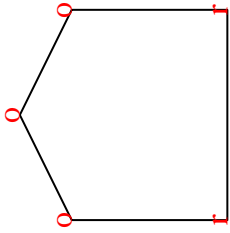




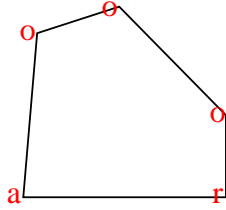


Count the number of Acute, Obtuse and Right angles inside each shape.

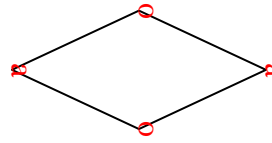
Ex)



1)



2)



Answers

Ex. 0 3 2

1. 1 3 1

2. 2 2 0

3. 2 2 0

4. 1 1 2

5. 0 6 0

6. 0 0 4

7. 0 8 0

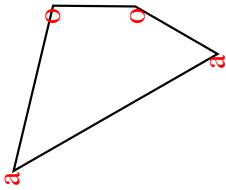
8. 0 2 3

9. 2 2 0

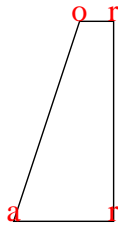
10. 1 2 1

11. 0 6 0

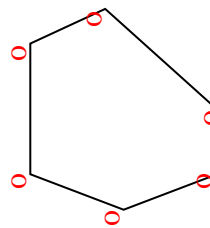
3)



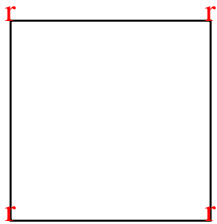
4)



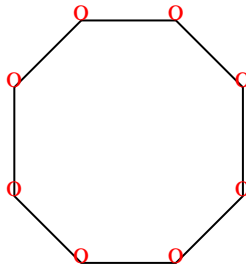
5)



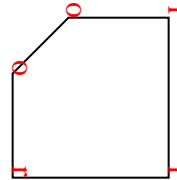
6)



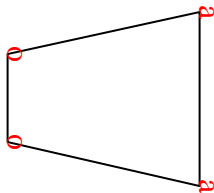
7)



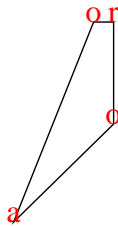
8)



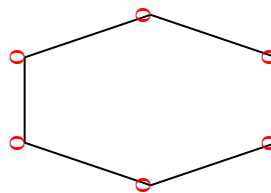
9)



10)



11)






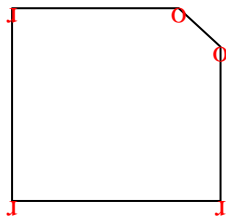


Count the number of Acute, Obtuse and Right angles inside each shape.

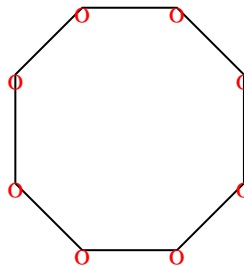
Ex)



1)



2)



Answers

Ex. 0 0 4

1. 0 2 3

2. 0 8 0

3. 2 2 0

4. 1 3 1

5. 0 4 2

6. 3 0 0

7. 2 0 1

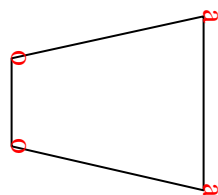
8. 1 4 0

9. 0 7 0

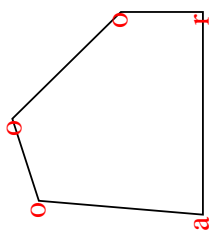
10. 1 2 1

11. 2 2 0

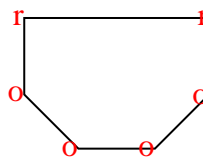
3)



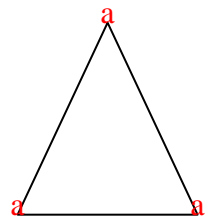
4)



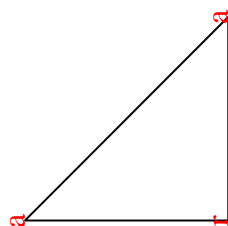
5)



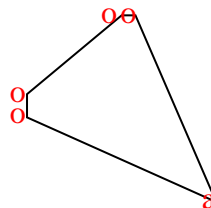
6)



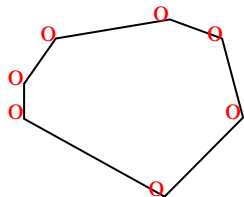
7)



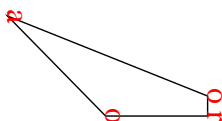
8)



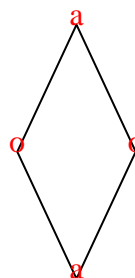
9)



10)



11)











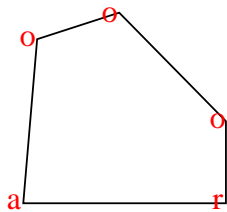




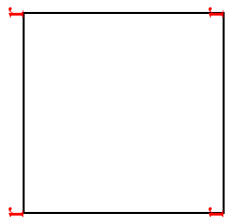


Count the number of Acute, Obtuse and Right angles inside each shape.

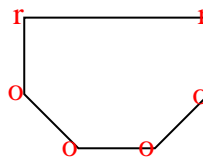
Ex)



1)



2)



Answers

Ex. 1 3 1

1. 0 0 4

2. 0 4 2

3. 0 2 3

4. 2 2 0

5. 3 0 0

6. 2 2 0

7. 0 0 4

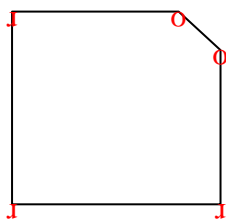
8. 0 7 0

9. 0 6 0

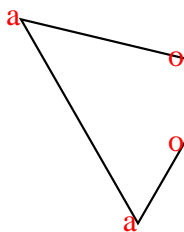
10. 0 8 0

11. 2 0 1

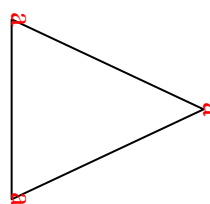
3)



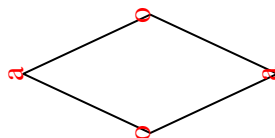
4)




5)



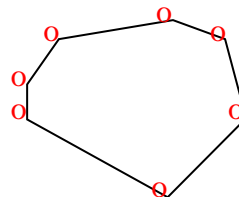
6)



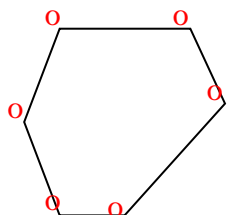
7)



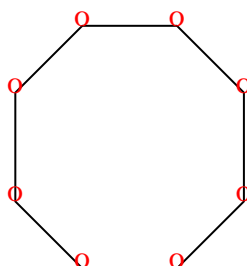
8)



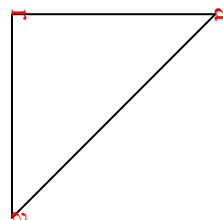
9)



10)



11)





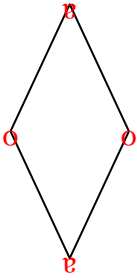




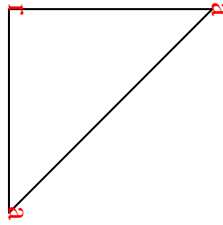


Count the number of Acute, Obtuse and Right angles inside each shape.


Ex)



1)



2)



Ex. 2 2 0

1. 2 0 1

2. 0 0 4

3. 3 0 0

4. 0 0 4

5. 1 4 0

6. 0 7 0

7. 0 2 3

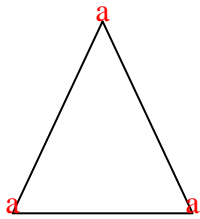
8. 0 4 2

9. 0 8 0

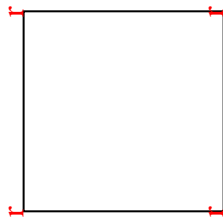
10. 0 2 3

11. 0 6 0

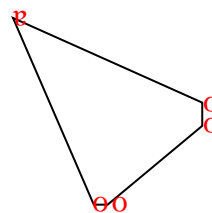
3)



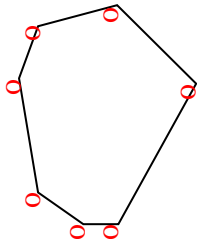
4)



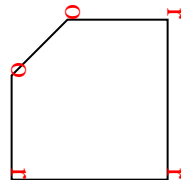
5)



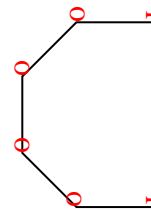
6)



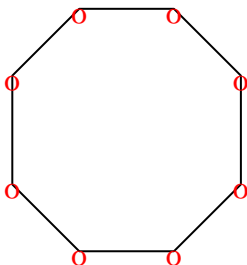
7)



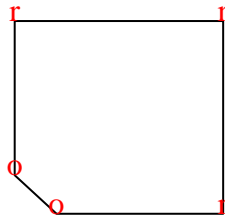
8)



9)



10)



11)

