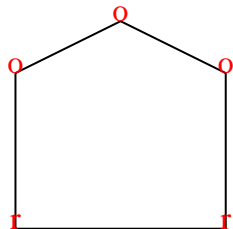




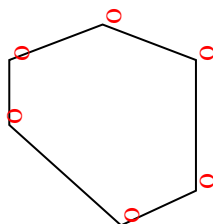


Count the number of Acute, Obtuse and Right angles inside each shape.

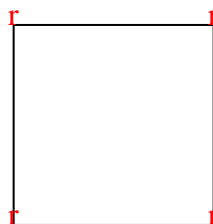
Ex)



1)



2)



Answers

Ex. 0 3 2

1. 0 6 0

2. 0 0 4

3. 2 2 0

4. 1 1 2

5. 2 2 0

6. 3 0 0

7. 1 4 0

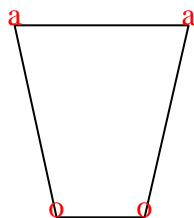
8. 0 0 4

9. 2 2 0

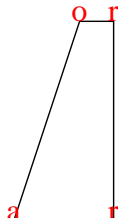
10. 1 2 1

11. 2 0 1

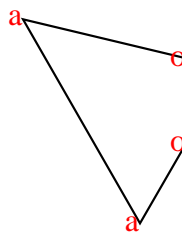
3)



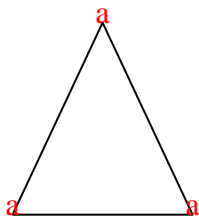
4)



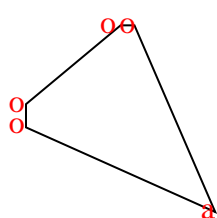
5)




6)



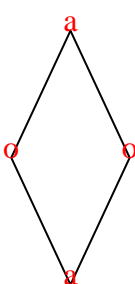
7)



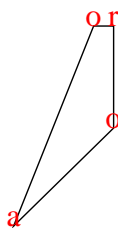
8)



9)



10)



11)

