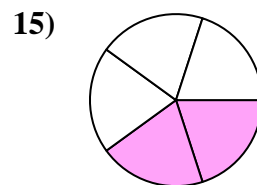
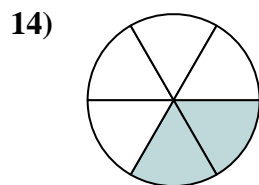
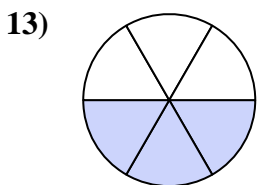
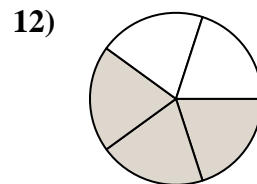
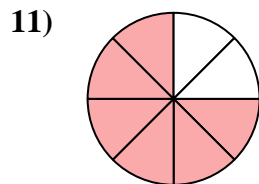
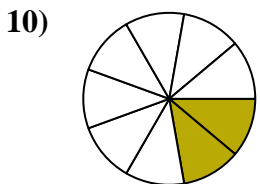
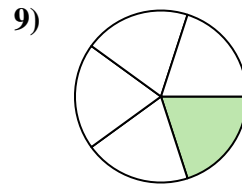
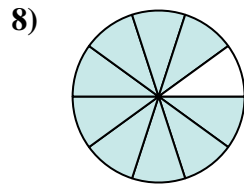
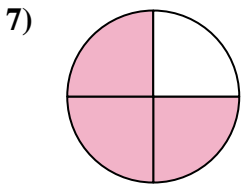
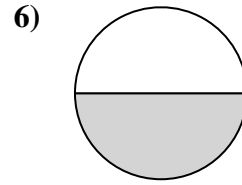
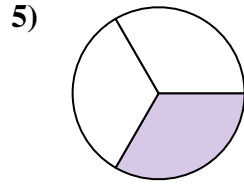
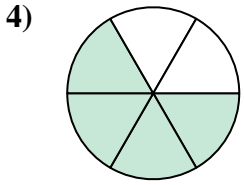
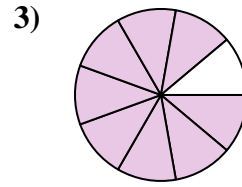
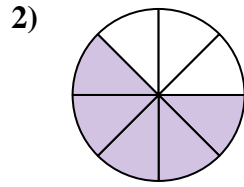
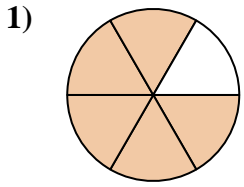




Find the angle (in degrees) of the shaded portion of the circle.

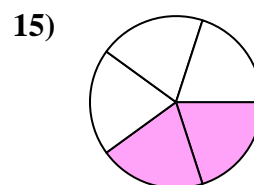
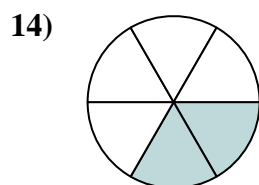
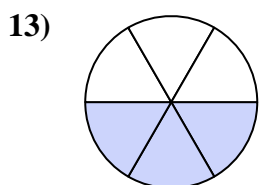
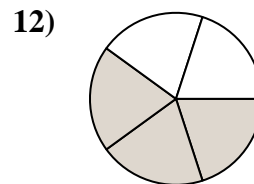
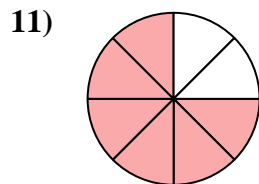
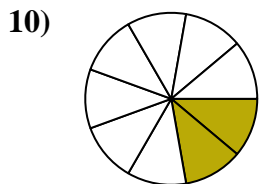
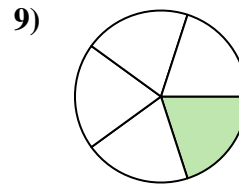
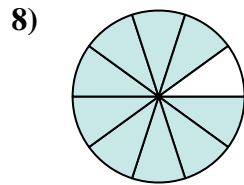
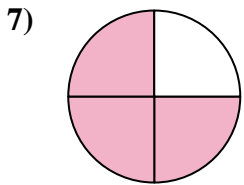
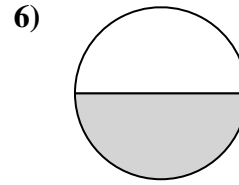
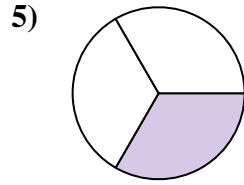
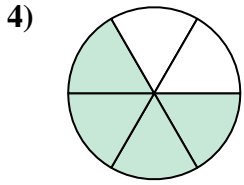
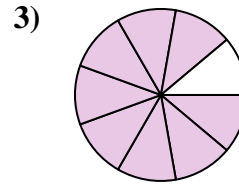
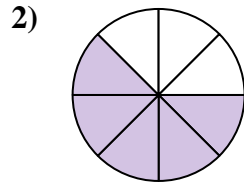
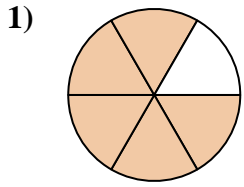
Answers



1. \_\_\_\_\_
2. \_\_\_\_\_
3. \_\_\_\_\_
4. \_\_\_\_\_
5. \_\_\_\_\_
6. \_\_\_\_\_
7. \_\_\_\_\_
8. \_\_\_\_\_
9. \_\_\_\_\_
10. \_\_\_\_\_
11. \_\_\_\_\_
12. \_\_\_\_\_
13. \_\_\_\_\_
14. \_\_\_\_\_
15. \_\_\_\_\_



Find the angle (in degrees) of the shaded portion of the circle.



Answers

1. 300

2. 225

3. 320

4. 240

5. 120

6. 180

7. 270

8. 324

9. 72

10. 80

11. 270

12. 216

13. 180

14. 120

15. 144



Find the angle (in degrees) of the shaded portion of the circle.

Answers

270

180

216

72

320

80

240

225

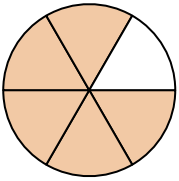
300

120

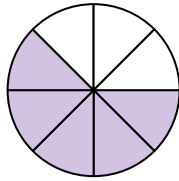
270

324

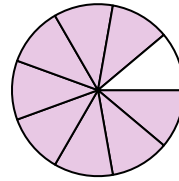
1)



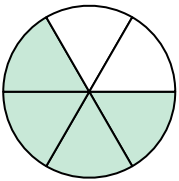
2)



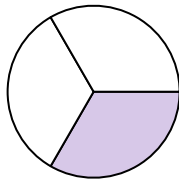
3)



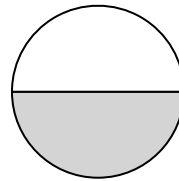
4)



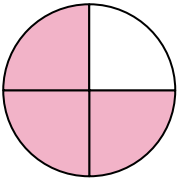
5)



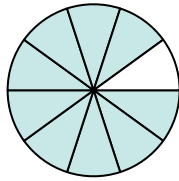
6)



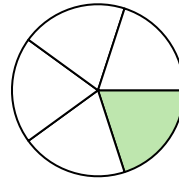
7)



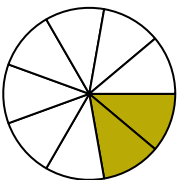
8)



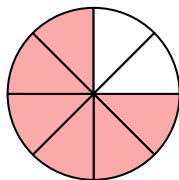
9)



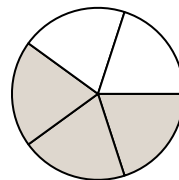
10)



11)



12)



1. \_\_\_\_\_

2. \_\_\_\_\_

3. \_\_\_\_\_

4. \_\_\_\_\_

5. \_\_\_\_\_

6. \_\_\_\_\_

7. \_\_\_\_\_

8. \_\_\_\_\_

9. \_\_\_\_\_

10. \_\_\_\_\_

11. \_\_\_\_\_

12. \_\_\_\_\_