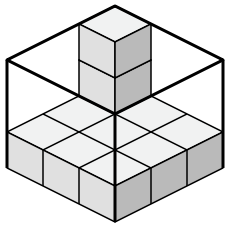


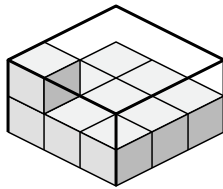


Create an expression to determine the volume of each box.

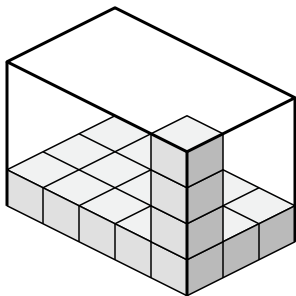
1)



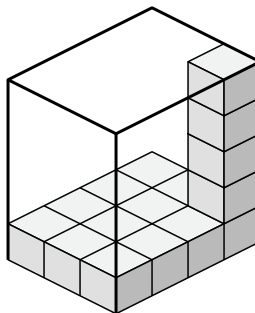
2)



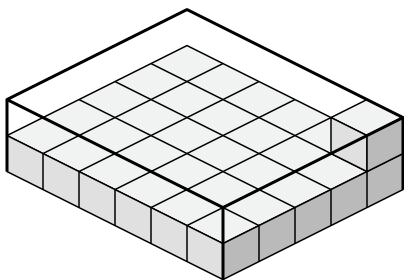
3)



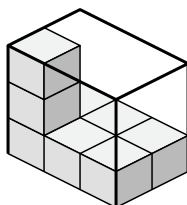
4)



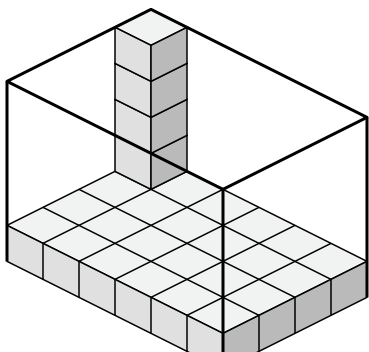
5)



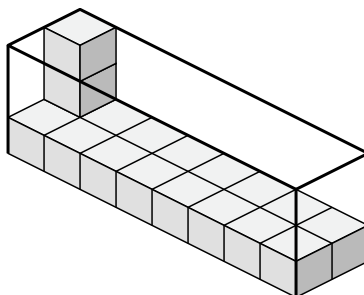
6)



7)



8)



Answers

1. _____

2. _____

3. _____

4. _____

5. _____

6. _____

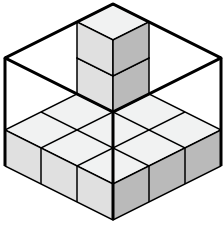
7. _____

8. _____

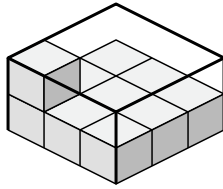


Create an expression to determine the volume of each box.

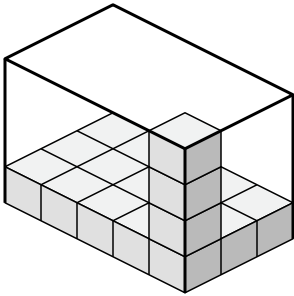
1)



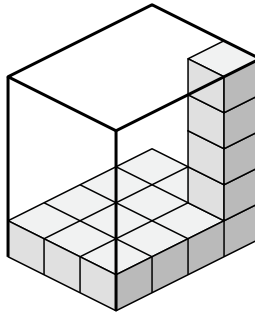
2)



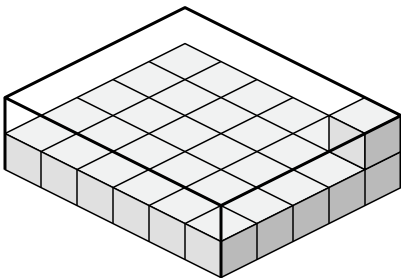
3)



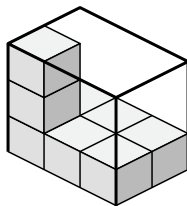
4)



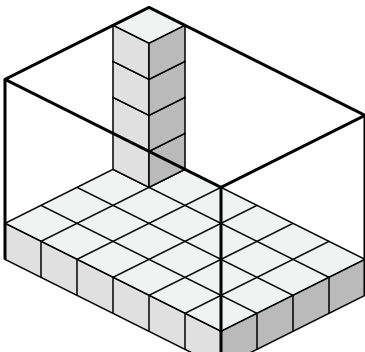
5)



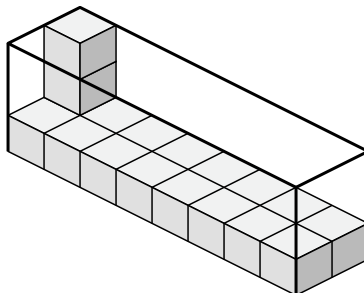
6)



7)



8)



Answers

1. $3 \times 3 \times 3$

2. $3 \times 3 \times 2$

3. $5 \times 3 \times 4$

4. $3 \times 4 \times 5$

5. $6 \times 5 \times 2$

6. $3 \times 2 \times 3$

7. $6 \times 4 \times 5$

8. $8 \times 2 \times 3$