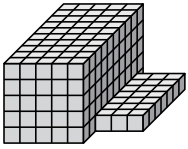




Find the total volume of each figure. Measurement is in cm (not to scale).

Answers

1)



1. _____

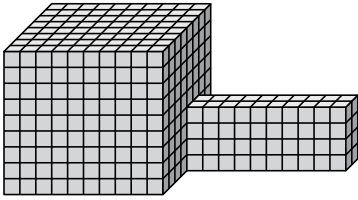
2. _____

3. _____

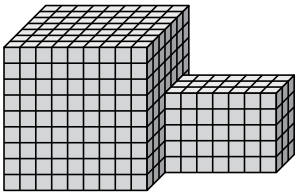
4. _____

5. _____

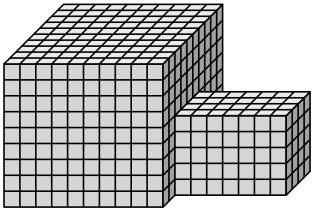
2)



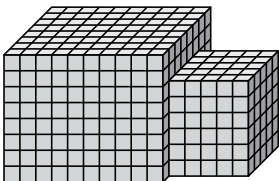
3)



4)



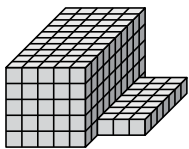
5)





Find the total volume of each figure. Measurement is in cm (not to scale).

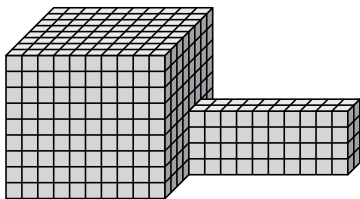
1)



$$5 \times 10 \times 5 = 250$$

$$3 \times 7 \times 1 = 21$$

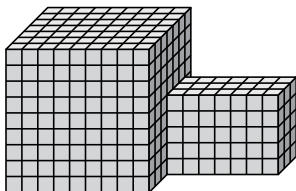
2)



$$10 \times 8 \times 9 = 720$$

$$10 \times 2 \times 4 = 80$$

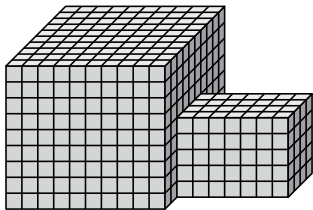
3)



$$9 \times 7 \times 9 = 567$$

$$7 \times 3 \times 5 = 105$$

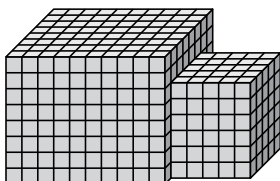
4)



$$10 \times 10 \times 9 = 900$$

$$7 \times 4 \times 5 = 140$$

5)



$$10 \times 8 \times 8 = 640$$

$$5 \times 5 \times 6 = 150$$

Answers

1. 271 cm³

2. 800 cm³

3. 672 cm³

4. 1040 cm³

5. 790 cm³