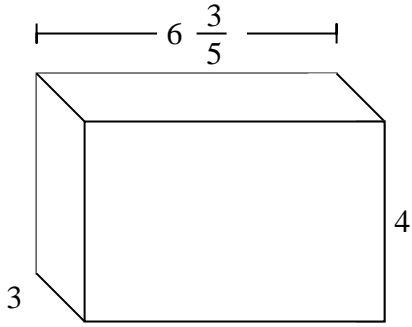


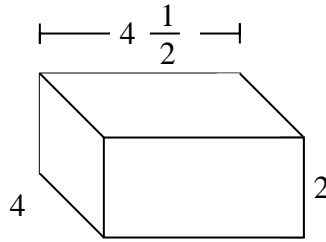


Fill each rectangular prism with cubes to determine the volume. Each prism's unit is measured in cm (not to scale).

Ex)



1)



Ex.

 $79\frac{1}{5}$ cm

1. _____

2. _____

3. _____

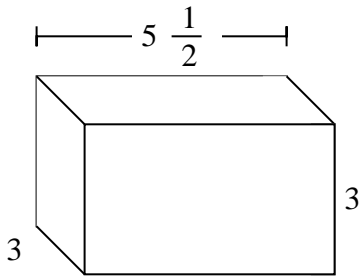
4. _____

5. _____

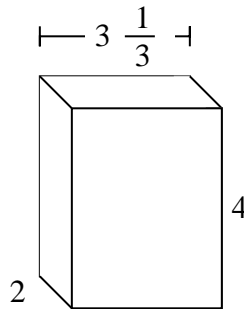
6. _____

7. _____

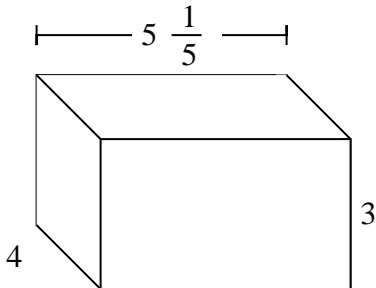
2)



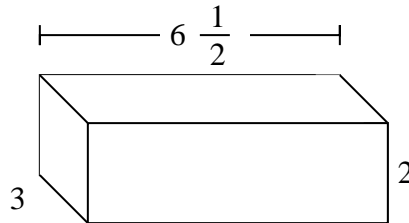
3)



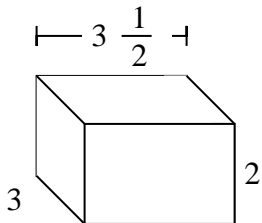
4)



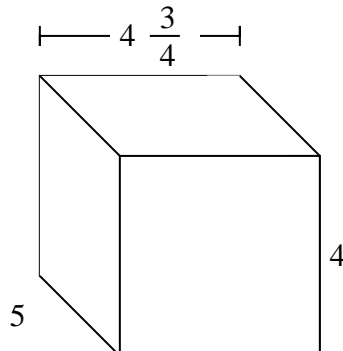
5)



6)



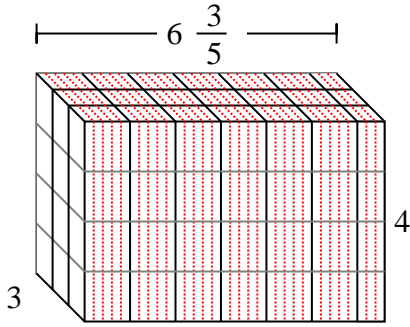
7)



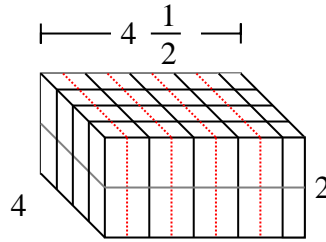


Fill each rectangular prism with cubes to determine the volume. Each prism's unit is measured in cm (not to scale).

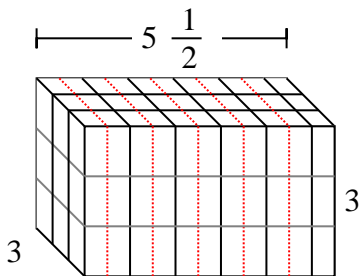
Ex)



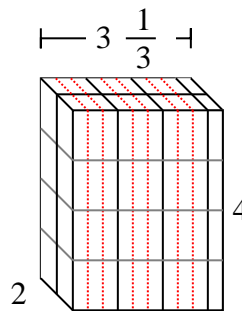
1)

AnswersEx. $79 \frac{1}{5} \text{ cm}$ 1. 36 cm 2. $49 \frac{1}{2} \text{ cm}$ 3. $26 \frac{2}{3} \text{ cm}$ 4. $62 \frac{2}{5} \text{ cm}$ 5. 39 cm 6. 21 cm 7. 95 cm

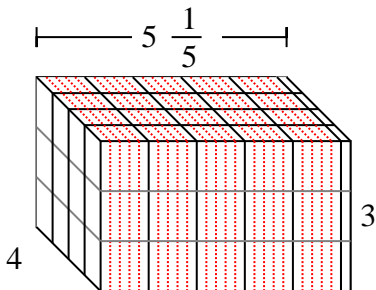
2)



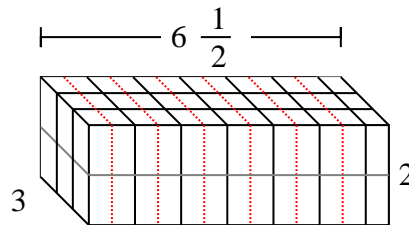
3)



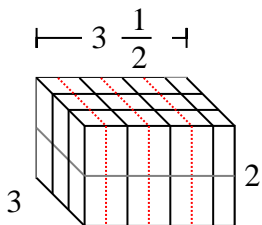
4)



5)



6)



7)

