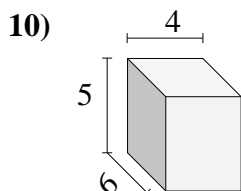
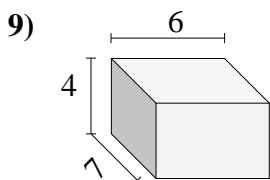
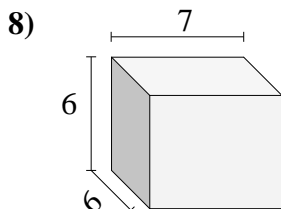
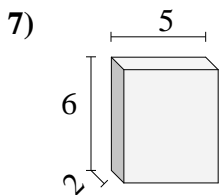
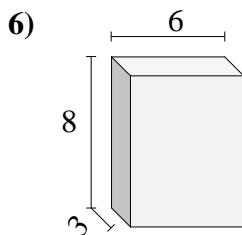
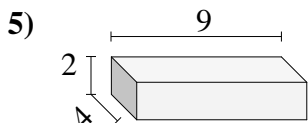
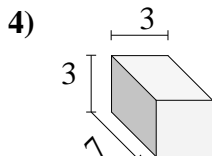
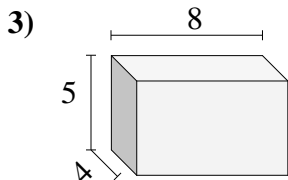
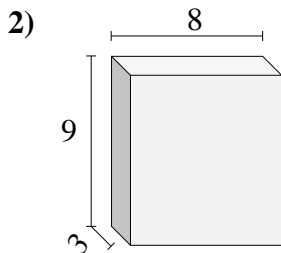
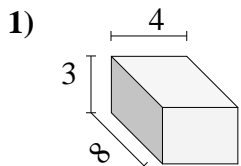




Find the volume of each of the rectangular prisms. Measured in cm (not to scale).

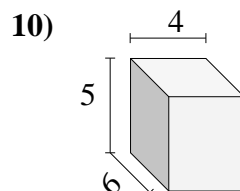
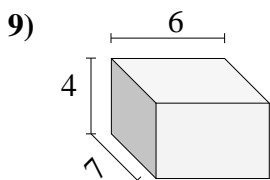
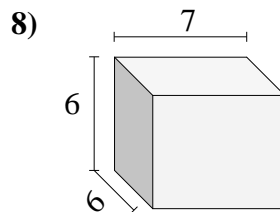
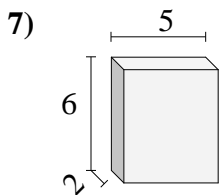
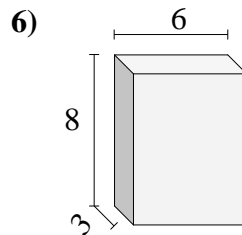
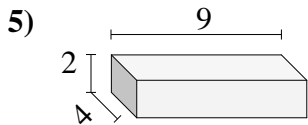
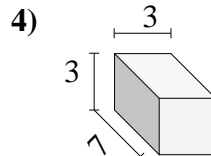
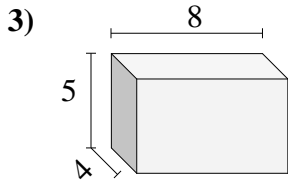
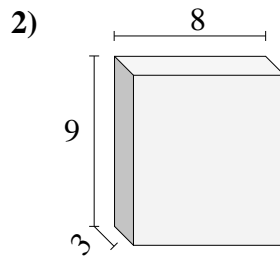
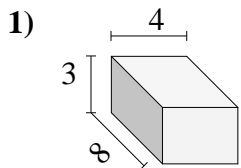


Answers

- 1. _____
- 2. _____
- 3. _____
- 4. _____
- 5. _____
- 6. _____
- 7. _____
- 8. _____
- 9. _____
- 10. _____



Find the volume of each of the rectangular prisms. Measured in cm (not to scale).

Answers1. 962. 2163. 1604. 635. 726. 1447. 608. 2529. 16810. 120