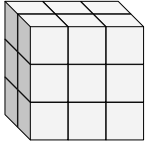


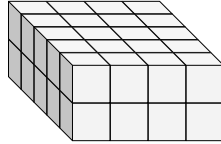


Find the length, width and height of the rectangular prism. Then find the volume.

Ex)



1)



Answers

Ex. 2 3 3 18

1. _____

2. _____

3. _____

4. _____

5. _____

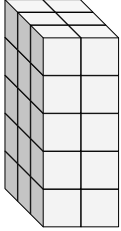
6. _____

7. _____

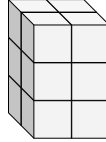
8. _____

9. _____

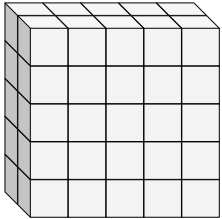
2)



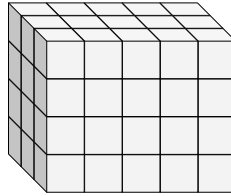
3)



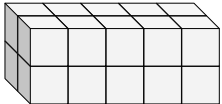
4)



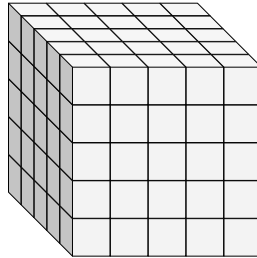
5)



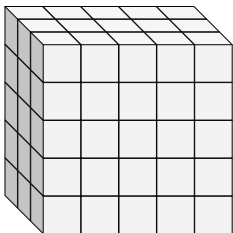
6)



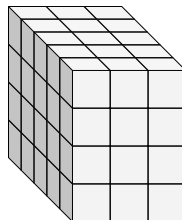
7)



8)

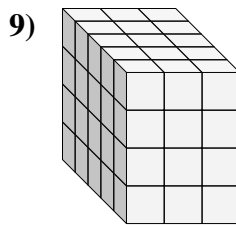
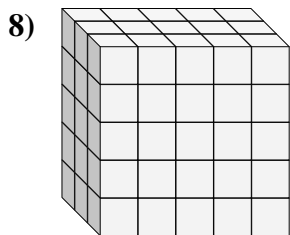
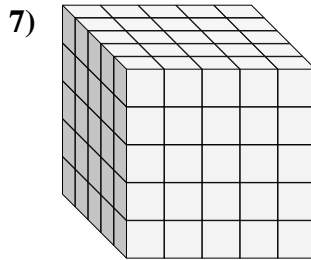
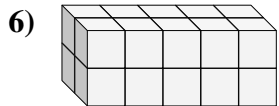
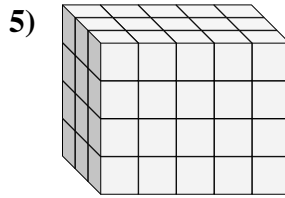
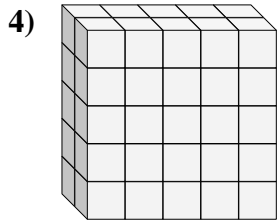
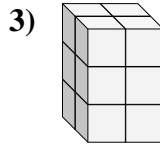
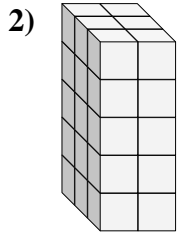
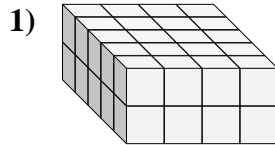
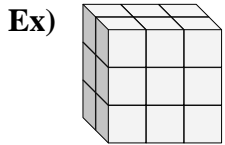


9)





Find the length, width and height of the rectangular prism. Then find the volume.



Answers

Ex. 2 3 3 18

1. 5 4 2 40

2. 3 2 5 30

3. 2 2 3 12

4. 2 5 5 50

5. 3 5 4 60

6. 2 5 2 20

7. 5 5 5 125

8. 3 5 5 75

9. 5 3 4 60