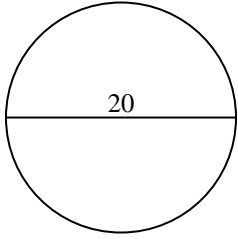


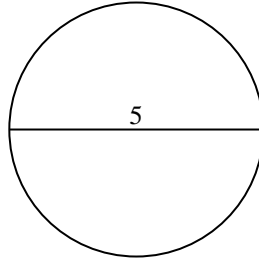


Find the area and circumference of the circle. Circles are not to scale. Round to the nearest 10th.

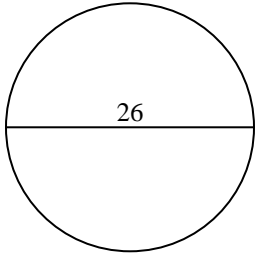
1)



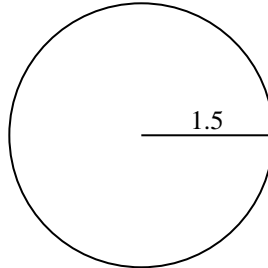
2)



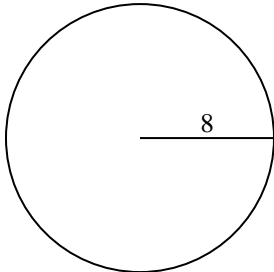
3)



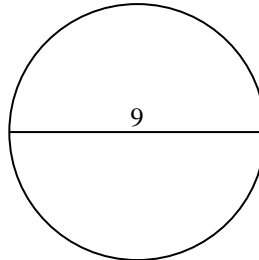
4)



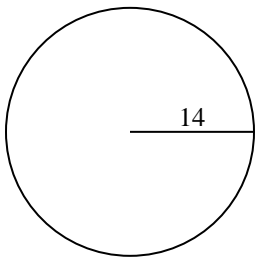
5)



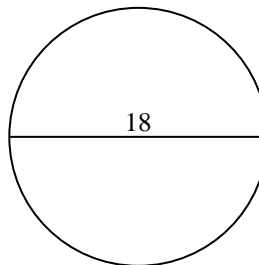
6)



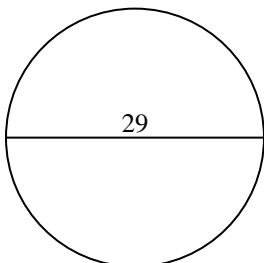
7)



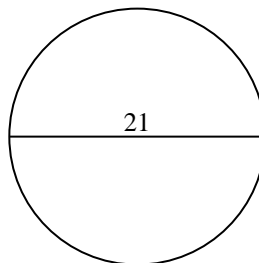
8)



9)



10)



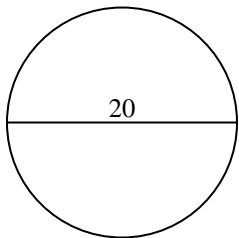
Answers

1. _____
2. _____
3. _____
4. _____
5. _____
6. _____
7. _____
8. _____
9. _____
10. _____

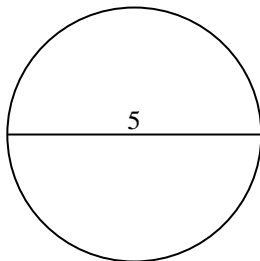


Find the area and circumference of the circle. Circles are not to scale. Round to the nearest 10th.

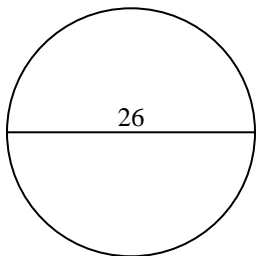
1)



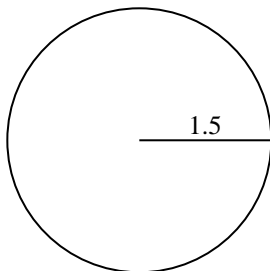
2)



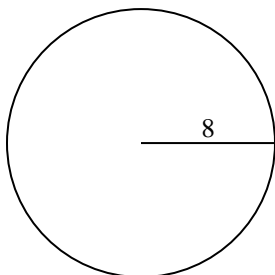
3)



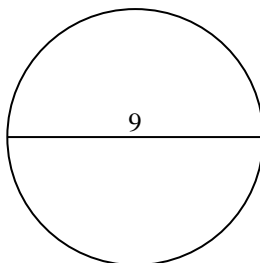
4)



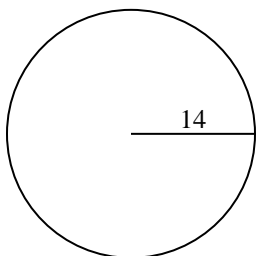
5)



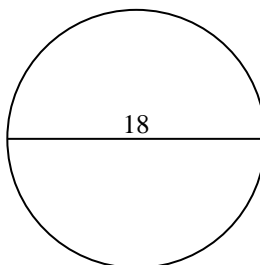
6)



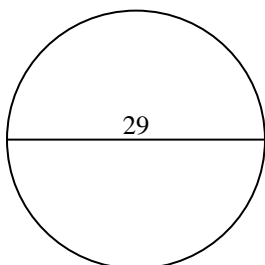
7)



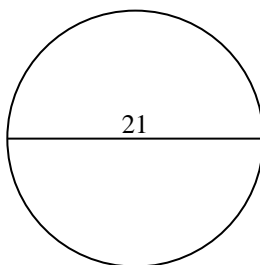
8)



9)



10)

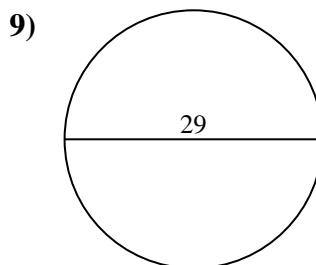
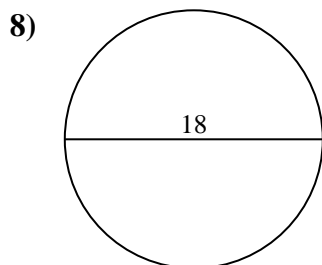
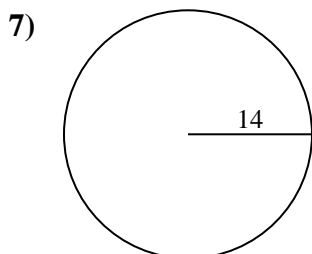
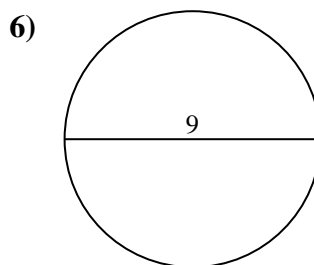
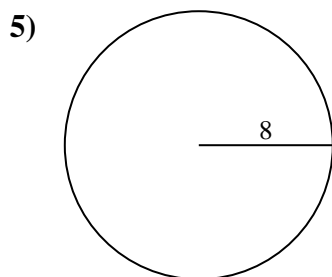
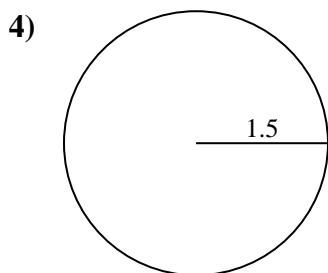
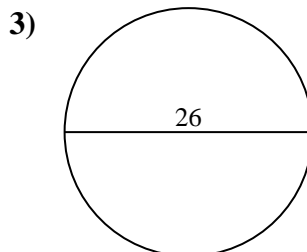
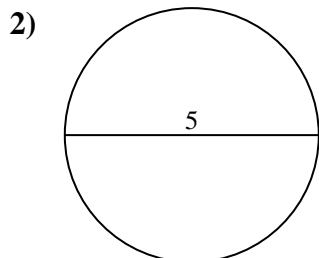
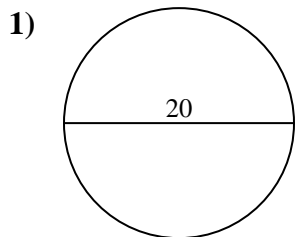
Answers

1.	<u>314.2</u>	<u>62.8</u>
2.	<u>19.6</u>	<u>15.7</u>
3.	<u>530.9</u>	<u>81.7</u>
4.	<u>7.1</u>	<u>9.4</u>
5.	<u>201.1</u>	<u>50.3</u>
6.	<u>63.6</u>	<u>28.3</u>
7.	<u>615.8</u>	<u>88</u>
8.	<u>254.5</u>	<u>56.5</u>
9.	<u>660.5</u>	<u>91.1</u>
10.	<u>346.4</u>	<u>66</u>



Find the area and circumference of the circle. Circles are not to scale. Round to the nearest 10th.

88	254.5	314.2	63.6	28.3
9.4	530.9	660.5	201.1	50.3
19.6	81.7	15.7	615.8	62.8
7.1	56.5	91.1		



Answers

1. _____
2. _____
3. _____
4. _____
5. _____
6. _____
7. _____
8. _____
9. _____