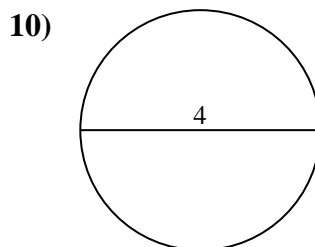
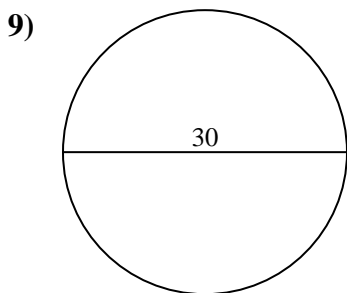
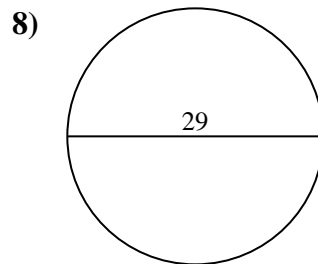
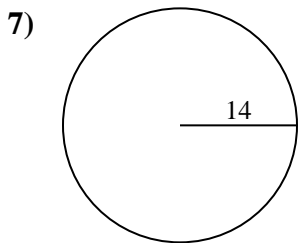
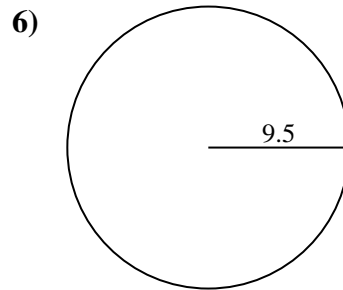
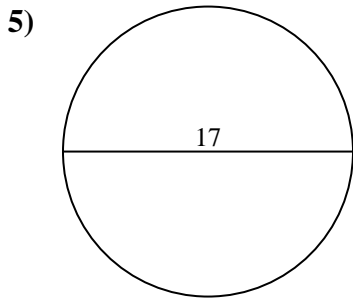
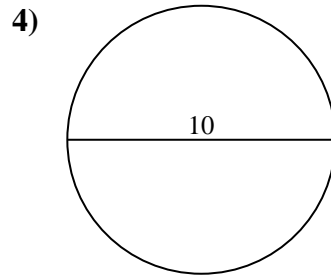
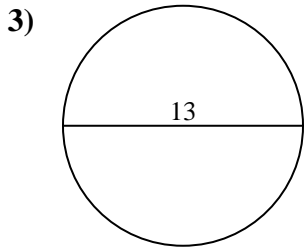
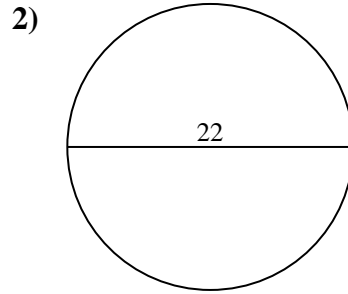
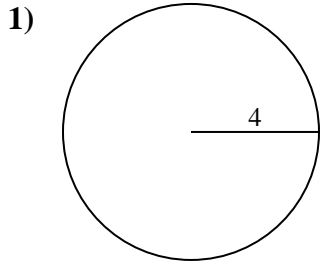




Find the area of the circle. Round to the nearest 10th.

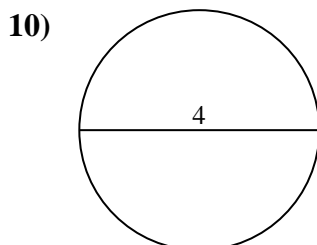
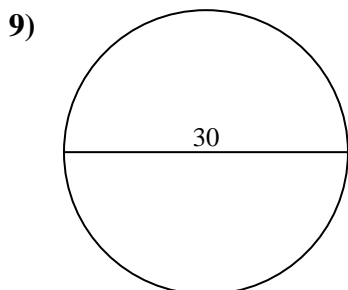
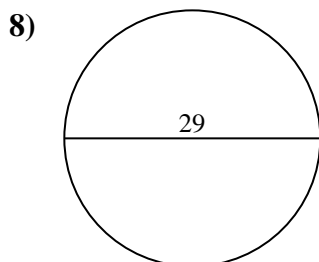
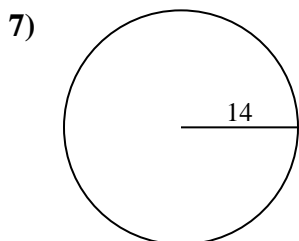
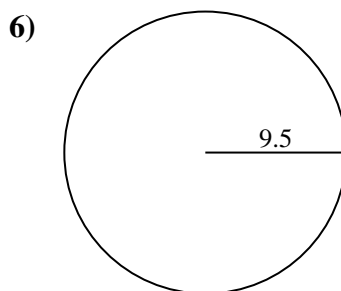
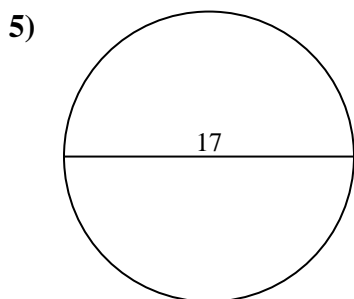
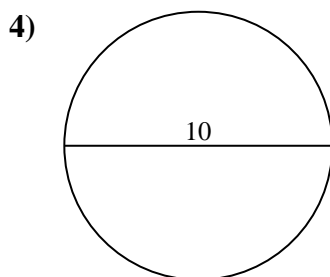
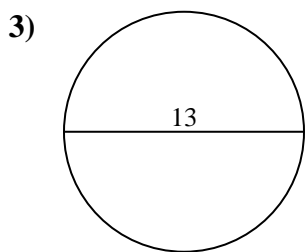
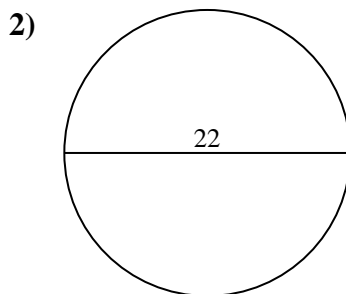
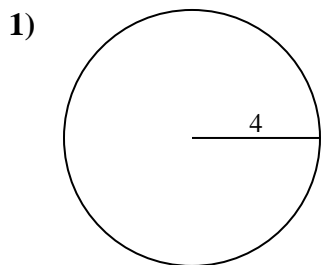
Answers



- 1. _____
- 2. _____
- 3. _____
- 4. _____
- 5. _____
- 6. _____
- 7. _____
- 8. _____
- 9. _____
- 10. _____



Find the area of the circle. Round to the nearest 10th.



Answers

- 1. 50.3
- 2. 380.1
- 3. 132.7
- 4. 78.5
- 5. 227
- 6. 283.5
- 7. 615.8
- 8. 660.5
- 9. 706.9
- 10. 12.6



Find the area of the circle. Round to the nearest 10th.

78.5	227	660.5	615.8	380.1
283.5	132.7	50.3	706.9	

Answers

- 1. _____
- 2. _____
- 3. _____
- 4. _____
- 5. _____
- 6. _____
- 7. _____
- 8. _____
- 9. _____

