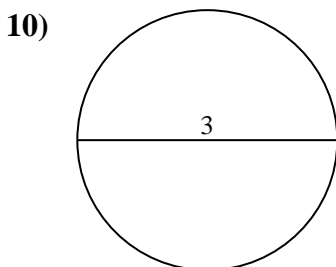
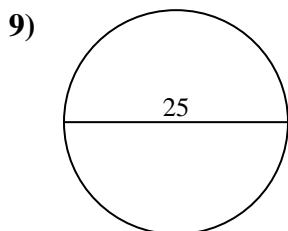
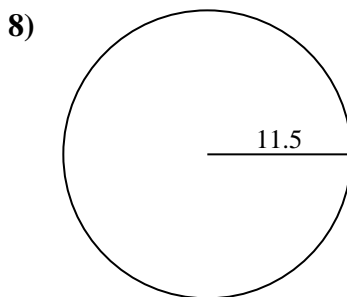
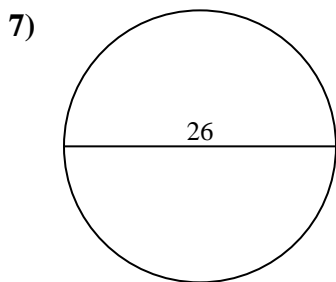
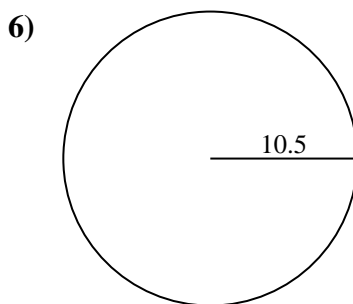
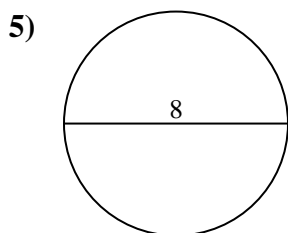
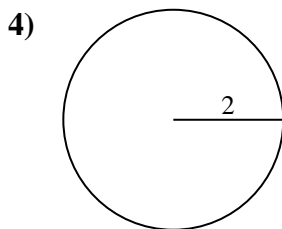
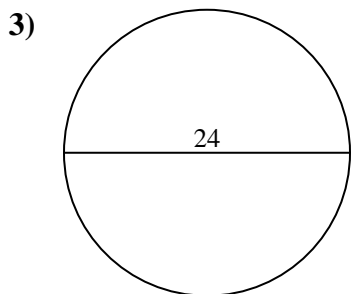
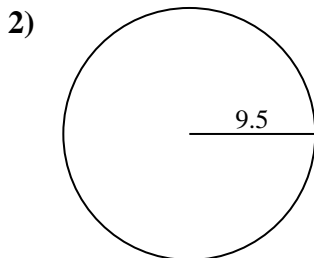
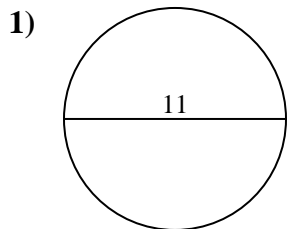




Find the area of the circle. Round to the nearest 10th.

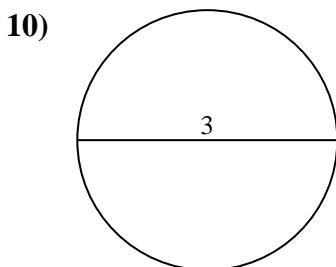
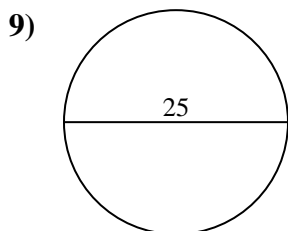
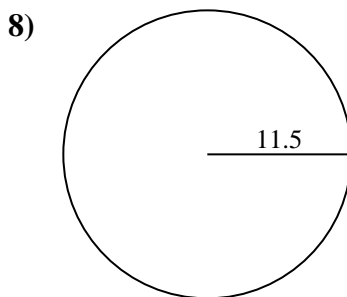
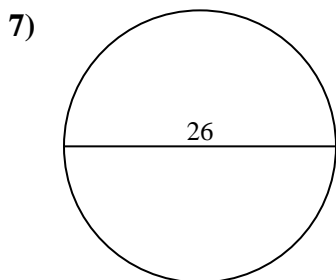
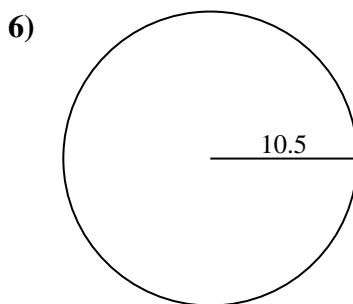
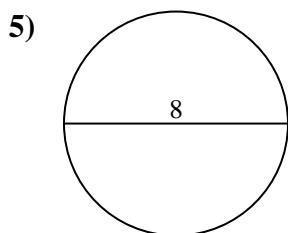
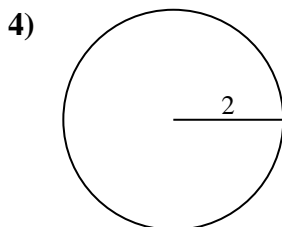
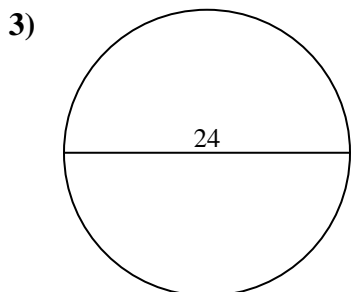
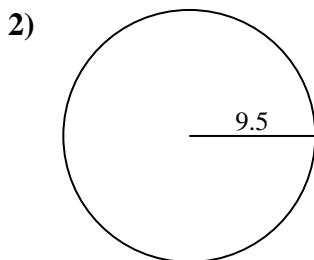
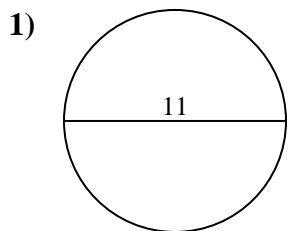
Answers



- 1. _____
- 2. _____
- 3. _____
- 4. _____
- 5. _____
- 6. _____
- 7. _____
- 8. _____
- 9. _____
- 10. _____



Find the area of the circle. Round to the nearest 10th.



Answers

- 1. 95
- 2. 283.5
- 3. 452.4
- 4. 12.6
- 5. 50.3
- 6. 346.4
- 7. 530.9
- 8. 415.5
- 9. 490.9
- 10. 7.1



Find the area of the circle. Round to the nearest 10th.

530.9	452.4	346.4	490.9	415.5
12.6	50.3	283.5	95	

Answers

1. _____
2. _____
3. _____
4. _____
5. _____
6. _____
7. _____
8. _____
9. _____

