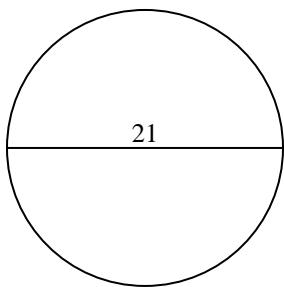


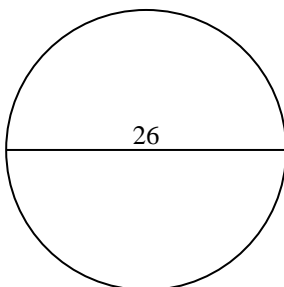


Find the circumference (in cm) of the circle. Circles are not to scale.

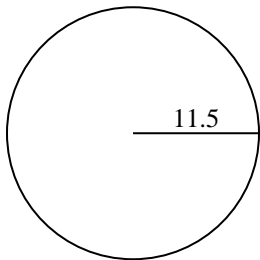
1)



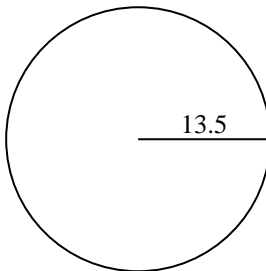
2)



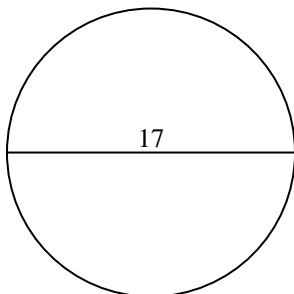
3)



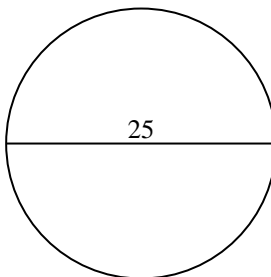
4)



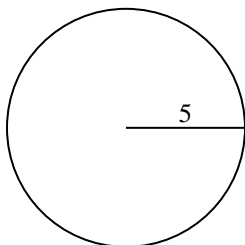
5)



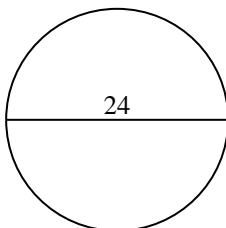
6)



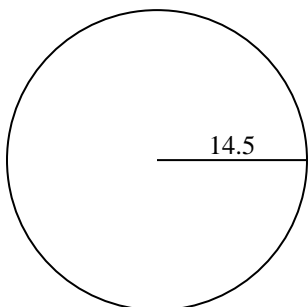
7)



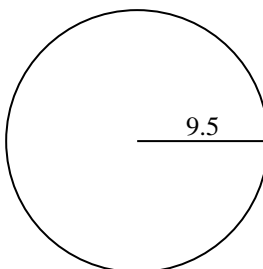
8)



9)



10)



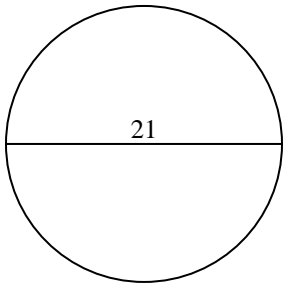
Answers

- 1. _____
- 2. _____
- 3. _____
- 4. _____
- 5. _____
- 6. _____
- 7. _____
- 8. _____
- 9. _____
- 10. _____

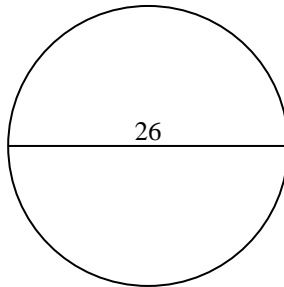


Find the circumference (in cm) of the circle. Circles are not to scale.

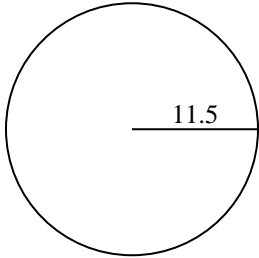
1)



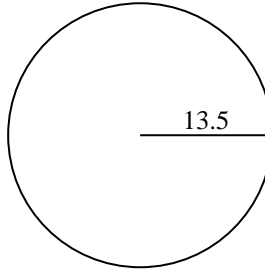
2)



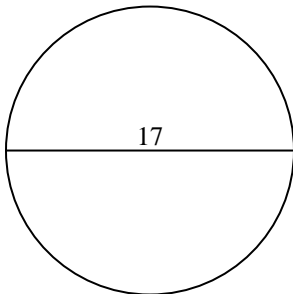
3)



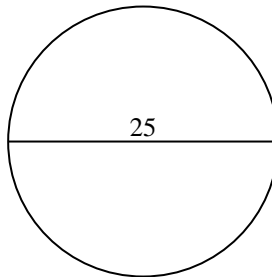
4)



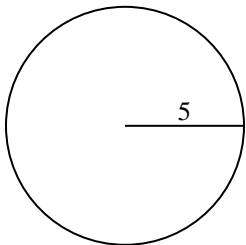
5)



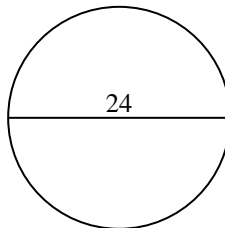
6)



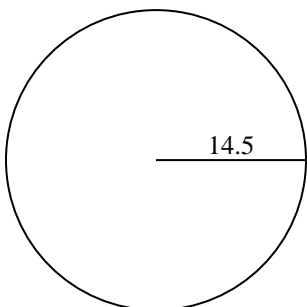
7)



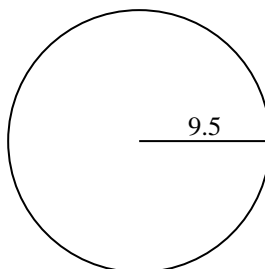
8)



9)



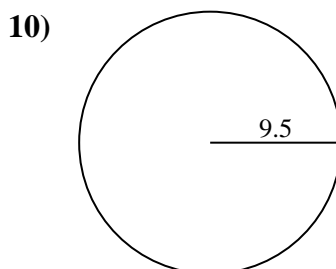
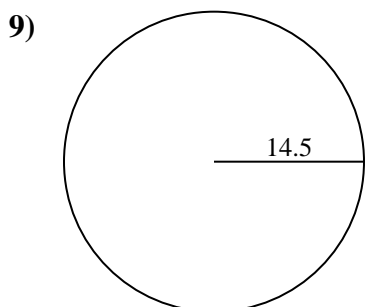
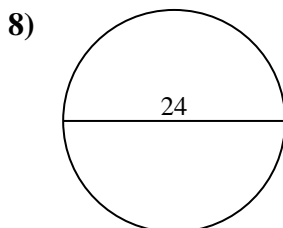
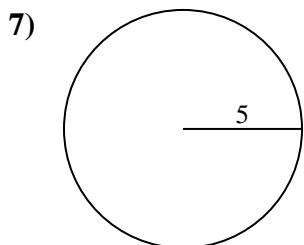
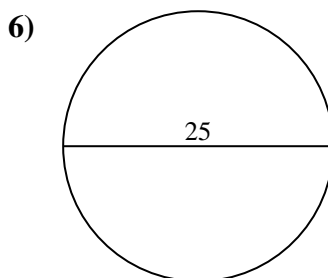
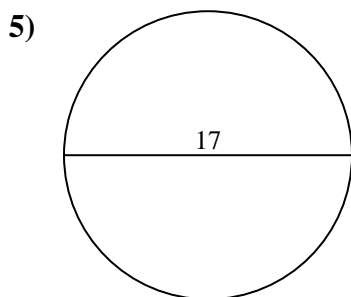
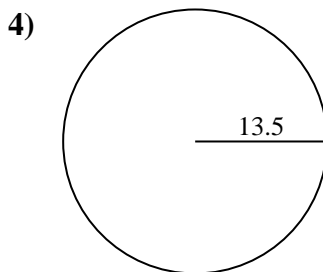
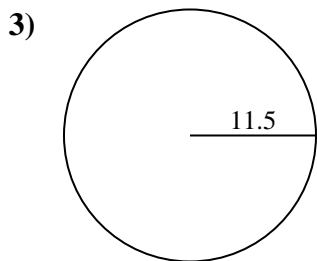
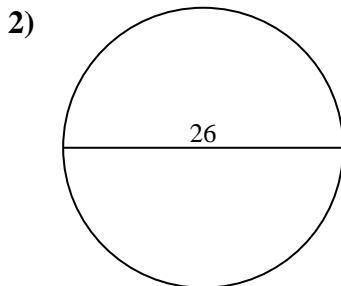
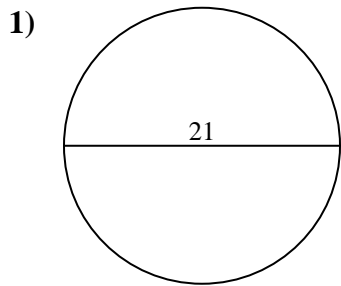
10)

**Answers**1. **65.97 cm**2. **81.68 cm**3. **72.26 cm**4. **84.82 cm**5. **53.41 cm**6. **78.54 cm**7. **31.42 cm**8. **75.4 cm**9. **91.11 cm**10. **59.69 cm**



Find the circumference (in cm) of the circle. Circles are not to scale.

84.82 cm	78.54 cm	53.41 cm	65.97 cm	91.11 cm
72.26 cm	31.42 cm	75.4 cm	59.69 cm	81.68 cm



Answers

1. _____
2. _____
3. _____
4. _____
5. _____
6. _____
7. _____
8. _____
9. _____
10. _____