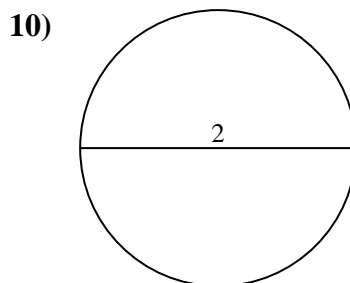
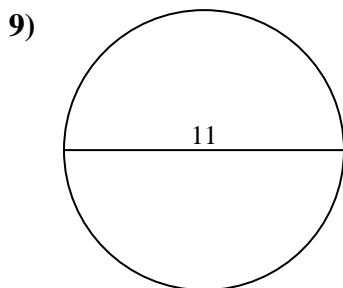
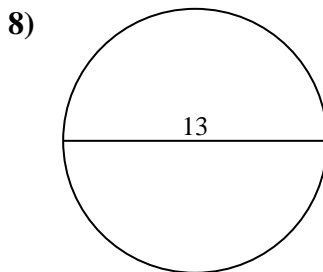
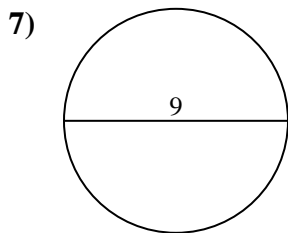
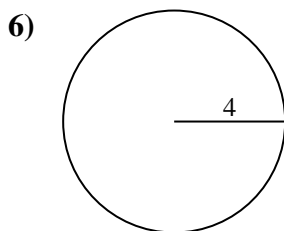
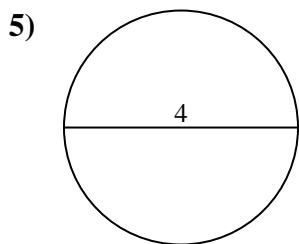
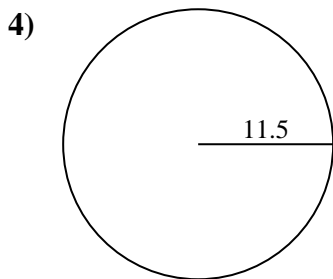
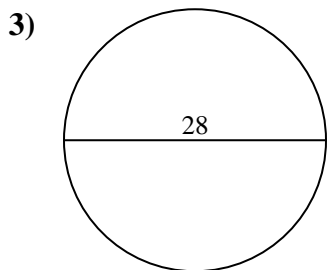
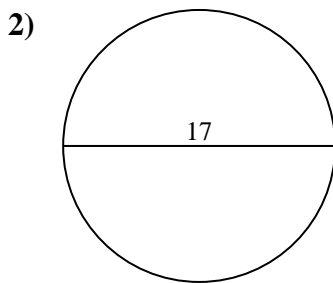
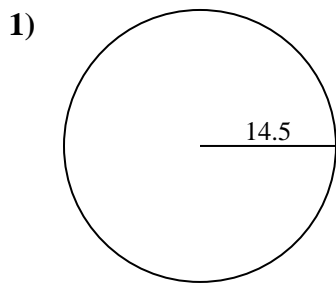




Find the circumference (in cm) of the circle. Circles are not to scale.



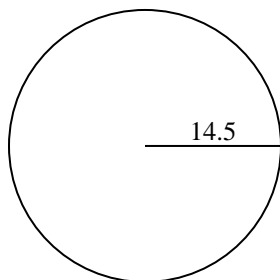
Answers

- 1. \_\_\_\_\_
- 2. \_\_\_\_\_
- 3. \_\_\_\_\_
- 4. \_\_\_\_\_
- 5. \_\_\_\_\_
- 6. \_\_\_\_\_
- 7. \_\_\_\_\_
- 8. \_\_\_\_\_
- 9. \_\_\_\_\_
- 10. \_\_\_\_\_

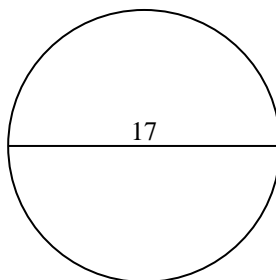


Find the circumference (in cm) of the circle. Circles are not to scale.

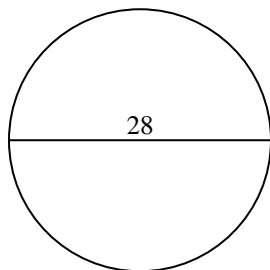
1)



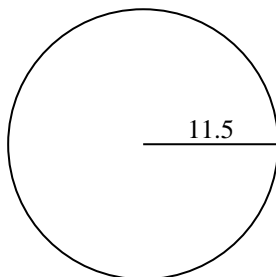
2)



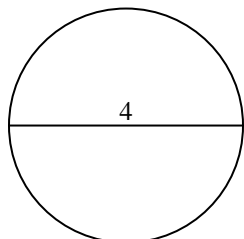
3)



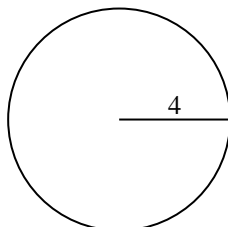
4)



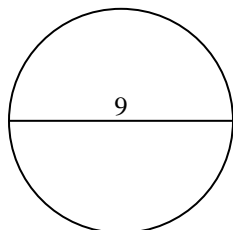
5)



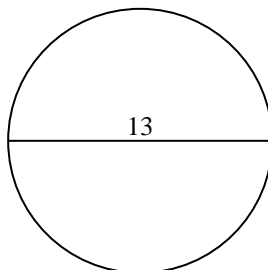
6)



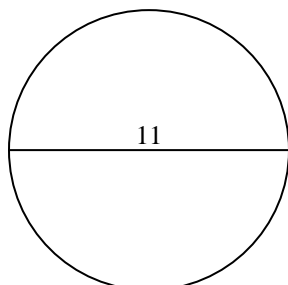
7)



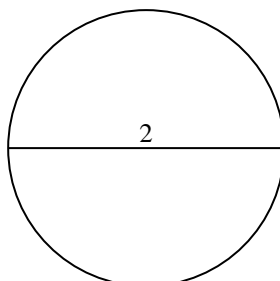
8)



9)



10)

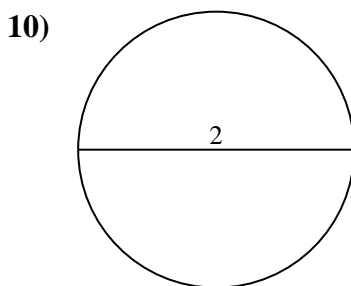
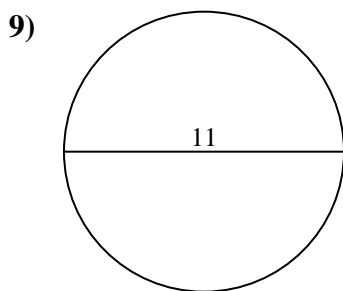
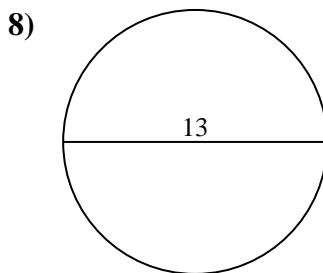
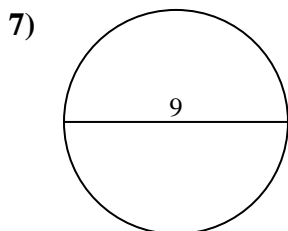
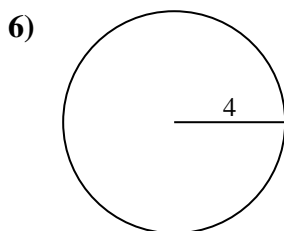
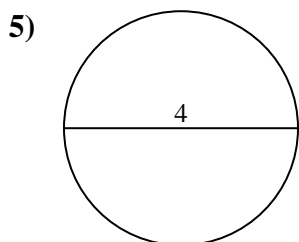
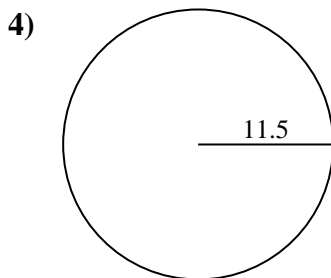
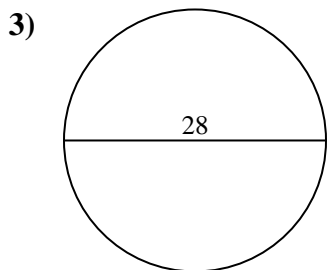
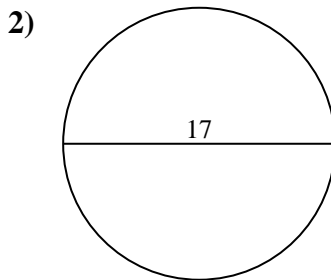
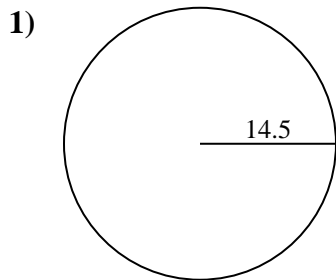
**Answers**

1. 91.11 cm
2. 53.41 cm
3. 87.96 cm
4. 72.26 cm
5. 12.57 cm
6. 25.13 cm
7. 28.27 cm
8. 40.84 cm
9. 34.56 cm
10. 6.28 cm



Find the circumference (in cm) of the circle. Circles are not to scale.

- |          |          |          |          |          |
|----------|----------|----------|----------|----------|
| 34.56 cm | 40.84 cm | 6.28 cm  | 28.27 cm | 91.11 cm |
| 87.96 cm | 72.26 cm | 12.57 cm | 25.13 cm | 53.41 cm |



**Answers**

- \_\_\_\_\_
- \_\_\_\_\_
- \_\_\_\_\_
- \_\_\_\_\_
- \_\_\_\_\_
- \_\_\_\_\_
- \_\_\_\_\_
- \_\_\_\_\_
- \_\_\_\_\_
- \_\_\_\_\_