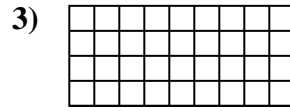
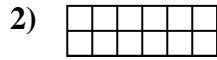
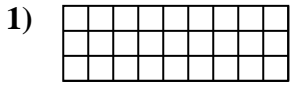




Determine the area. Each **SVGREPLACE** = 1 square unit (u^2).


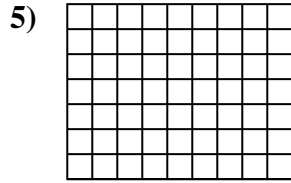
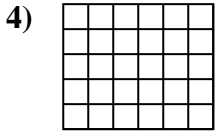
Answers



1. _____

2. _____

3. _____

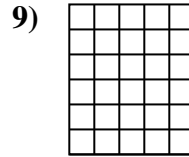

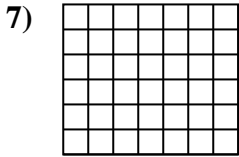


4. _____

5. _____

6. _____

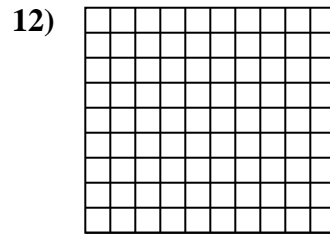
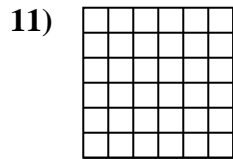
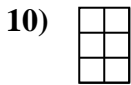
7. _____



8. _____

9. _____

10. _____



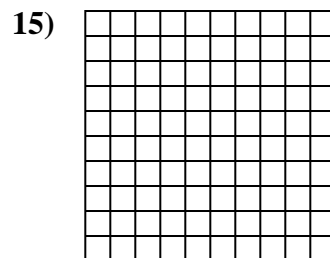
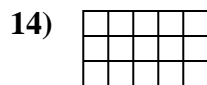
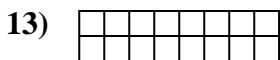
11. _____

12. _____

13. _____

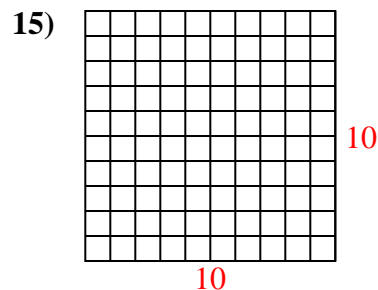
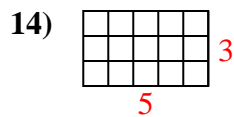
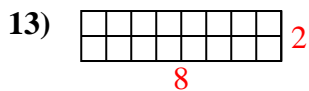
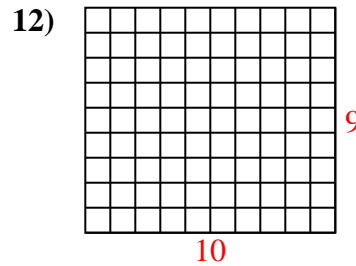
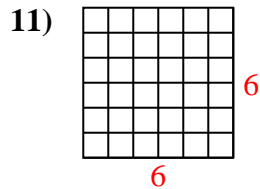
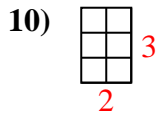
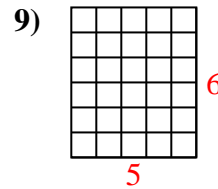
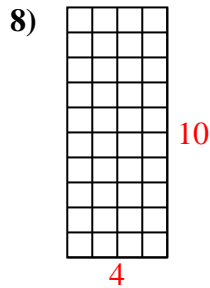
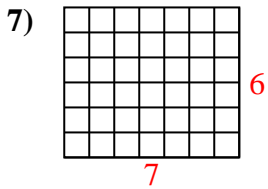
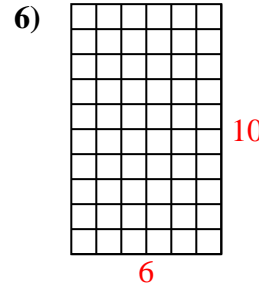
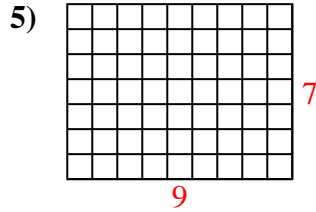
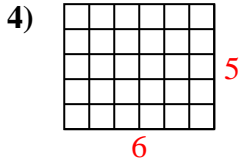
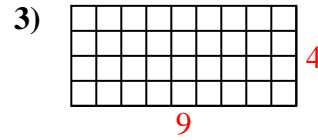
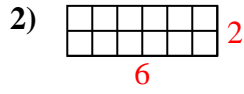
14. _____

15. _____





Determine the area. Each **SVGREPLACE** = 1 square unit (u^2).



Answers

1. 27 u^2

2. 12 u^2

3. 36 u^2

4. 30 u^2

5. 63 u^2

6. 60 u^2

7. 42 u^2

8. 40 u^2

9. 30 u^2

10. 6 u^2

11. 36 u^2

12. 90 u^2

13. 16 u^2

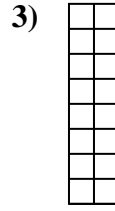
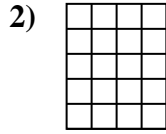
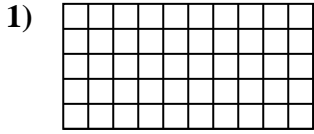
14. 15 u^2

15. 100 u^2



Determine the area. Each **SVGREPLACE** = 1 square unit (u^2).

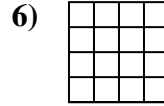

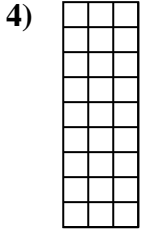
Answers



1. _____

2. _____

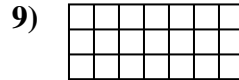
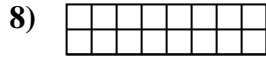
3. _____



4. _____

5. _____

6. _____



7. _____

8. _____

9. _____

10. _____

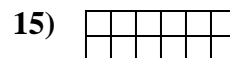
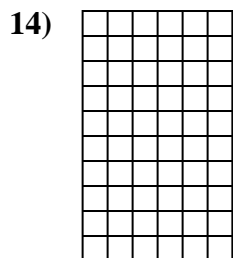
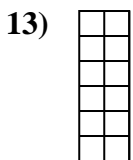
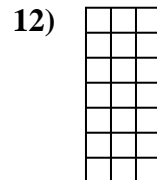
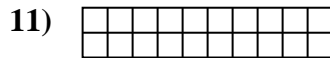
11. _____

12. _____

13. _____

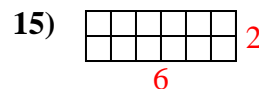
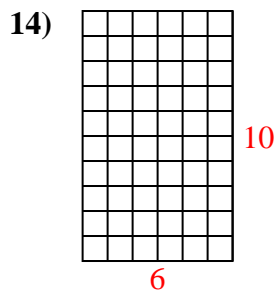
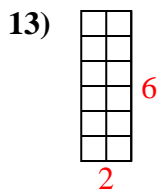
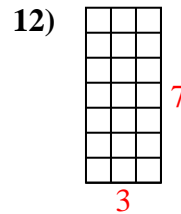
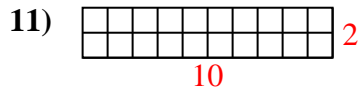
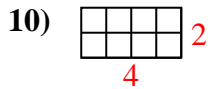
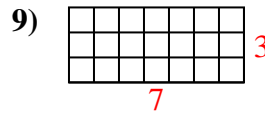
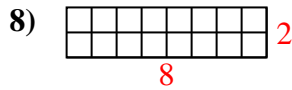
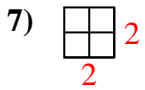
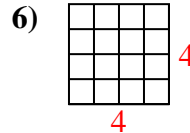
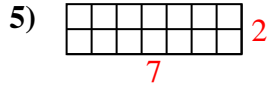
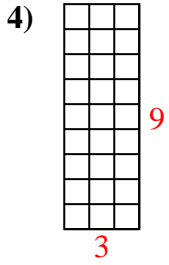
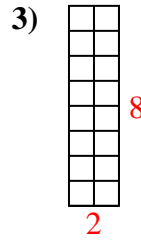
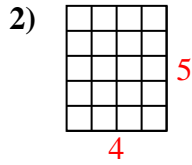
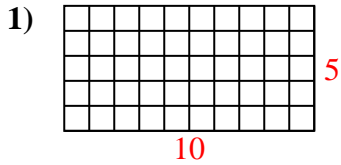
14. _____

15. _____





Determine the area. Each **SVGREPLACE** = 1 square unit (u^2).



Answers

1. 50 u^2

2. 20 u^2

3. 16 u^2

4. 27 u^2

5. 14 u^2

6. 16 u^2

7. 4 u^2

8. 16 u^2

9. 21 u^2

10. 8 u^2

11. 20 u^2

12. 21 u^2

13. 12 u^2

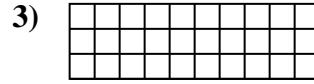
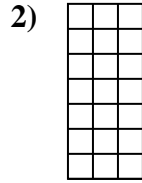

14. 60 u^2

15. 12 u^2



Determine the area. Each **SVGREPLACE** = 1 square unit (u^2).


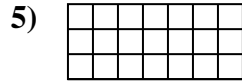
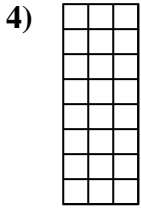
Answers



1. _____

2. _____



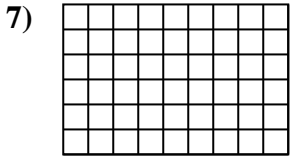
3. _____



4. _____

5. _____

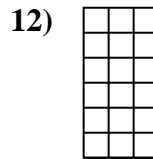
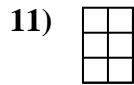
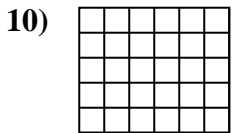
6. _____



7. _____

8. _____

9. _____



10. _____

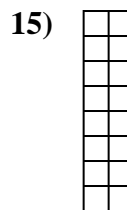

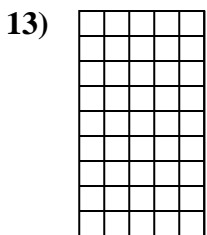
11. _____

12. _____

13. _____

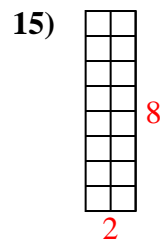
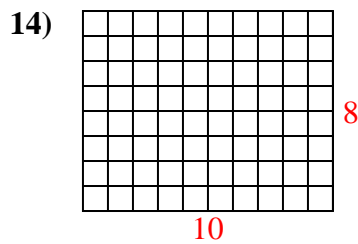
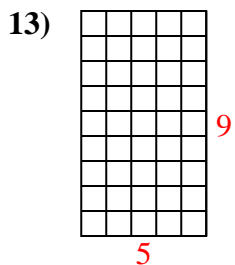
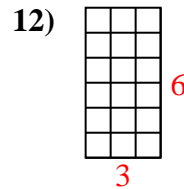
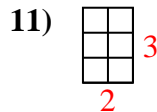
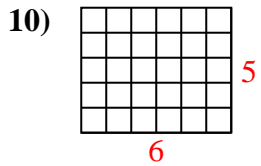
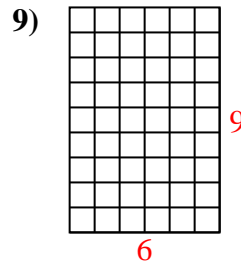
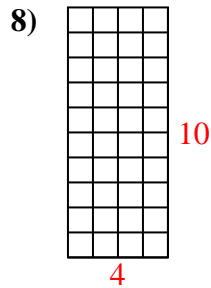
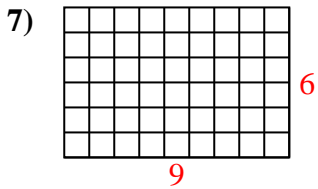
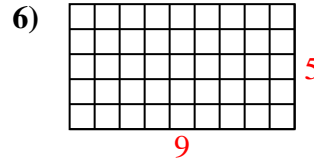
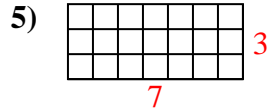
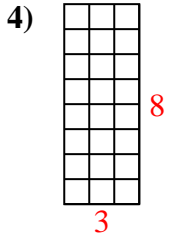
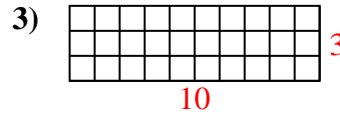
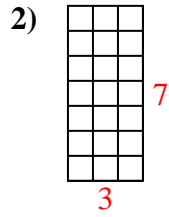
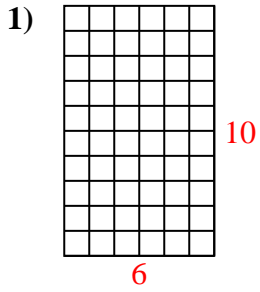
14. _____

15. _____





Determine the area. Each **SVGREPLACE** = 1 square unit (u^2).



Answers

1. 60 u^2

2. 21 u^2

3. 30 u^2

4. 24 u^2

5. 21 u^2

6. 45 u^2

7. 54 u^2

8. 40 u^2

9. 54 u^2

10. 30 u^2

11. 6 u^2

12. 18 u^2

13. 45 u^2

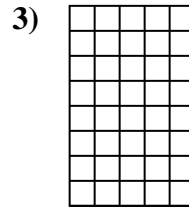
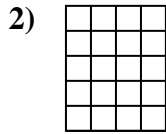
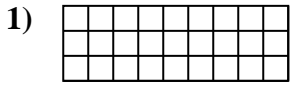
14. 80 u^2

15. 16 u^2



Determine the area. Each **SVGREPLACE** = 1 square unit (u^2).


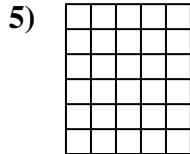
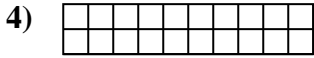
Answers



1. _____

2. _____

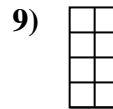
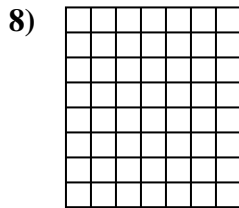
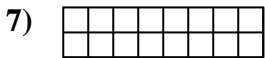
3. _____



4. _____

5. _____

6. _____



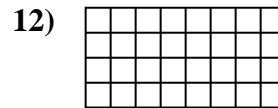
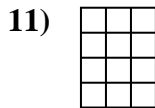
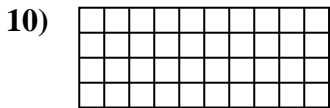
7. _____

8. _____

9. _____

10. _____

11. _____

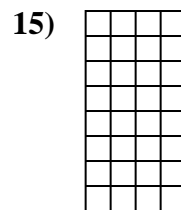
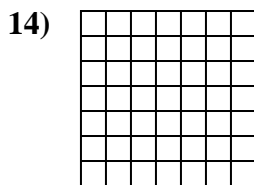



12. _____

13. _____

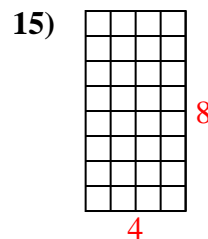
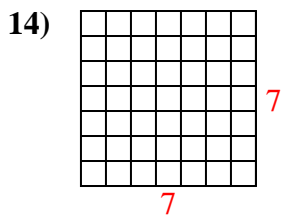
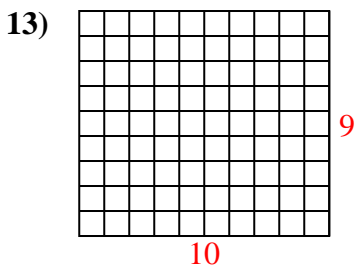
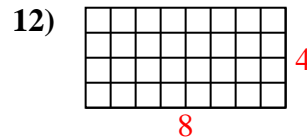
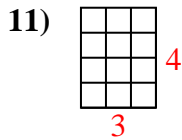
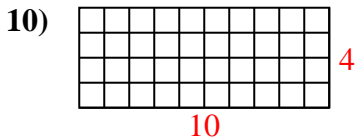
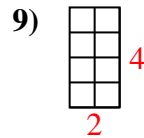
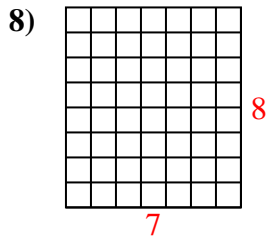
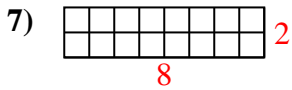
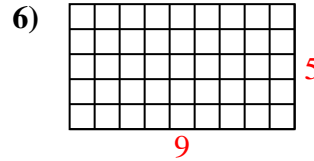
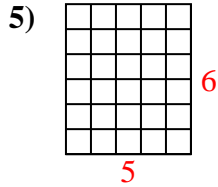
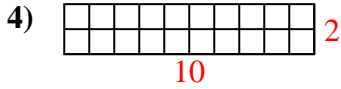
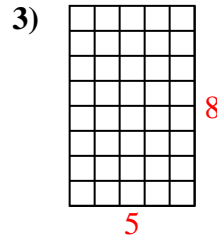
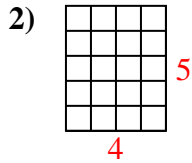
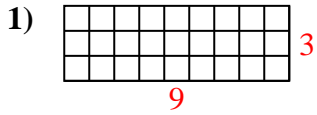
14. _____

15. _____





Determine the area. Each **SVGREPLACE** = 1 square unit (u^2).



Answers

1. 27 u^2

2. 20 u^2

3. 40 u^2

4. 20 u^2

5. 30 u^2

6. 45 u^2

7. 16 u^2

8. 56 u^2

9. 8 u^2

10. 40 u^2

11. 12 u^2

12. 32 u^2

13. 90 u^2

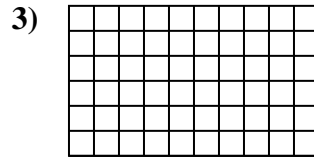
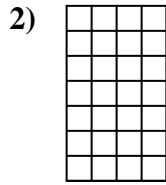
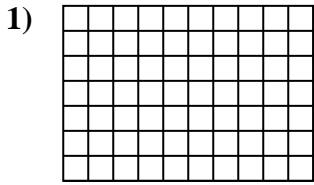
14. 49 u^2

15. 32 u^2



Determine the area. Each **SVGREPLACE** = 1 square unit (u^2).

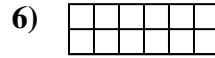
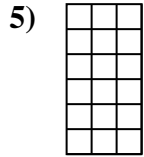
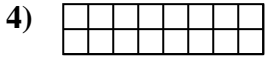
Answers



1. _____

2. _____

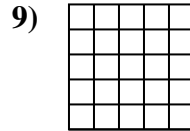
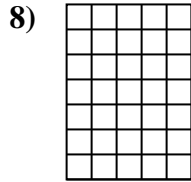
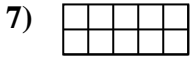
3. _____



4. _____

5. _____

6. _____


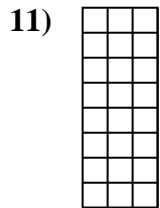
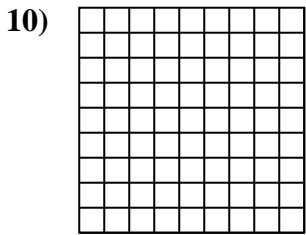


7. _____

8. _____

9. _____

10. _____



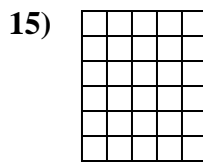
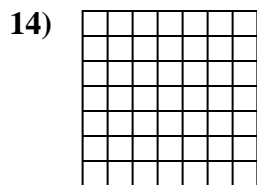
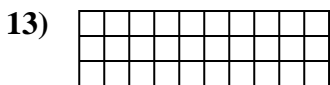
11. _____

12. _____

13. _____

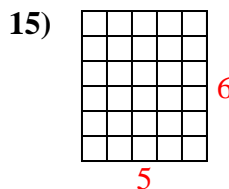
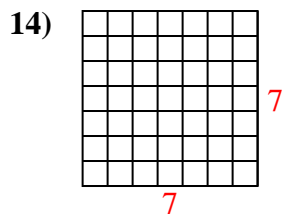
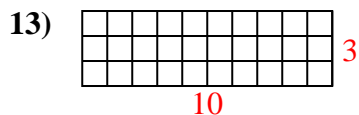
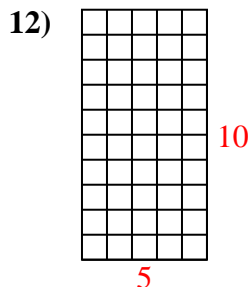
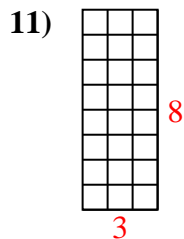
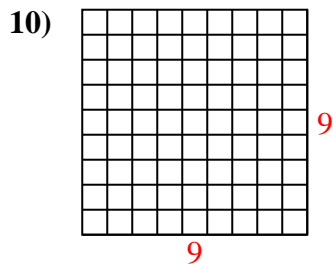
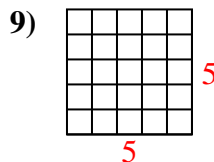
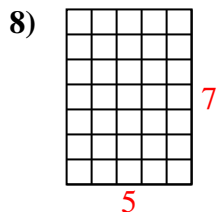
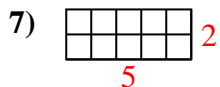
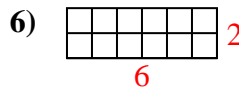
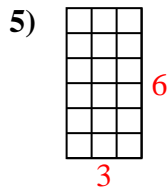
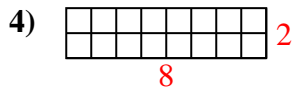
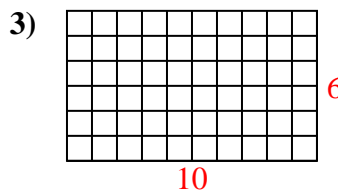
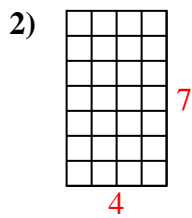
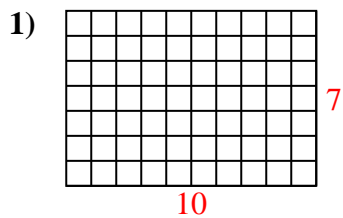
14. _____

15. _____





Determine the area. Each **SVGREPLACE** = 1 square unit (u^2).



Answers

1. 70 u^2

2. 28 u^2

3. 60 u^2

4. 16 u^2

5. 18 u^2

6. 12 u^2

7. 10 u^2

8. 35 u^2

9. 25 u^2

10. 81 u^2

11. 24 u^2

12. 50 u^2

13. 30 u^2

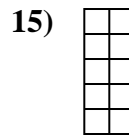
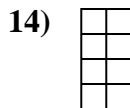
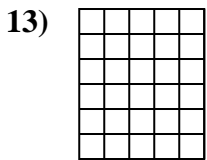
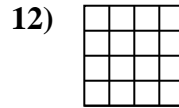
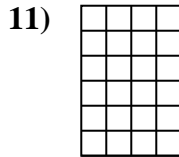
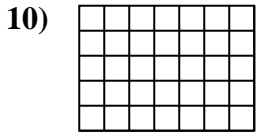
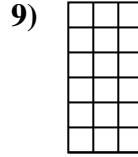

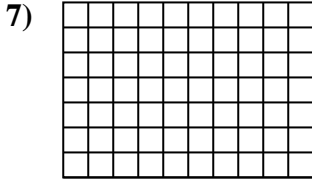
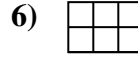
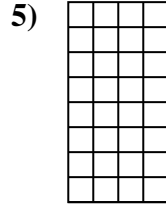
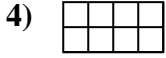
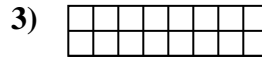

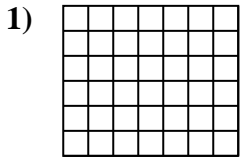
14. 49 u^2

15. 30 u^2



Determine the area. Each **SVGREPLACE** = 1 square unit (u^2).

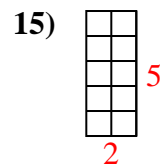
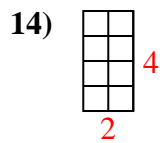
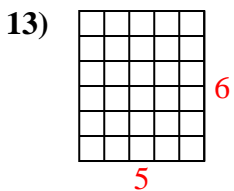
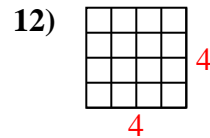
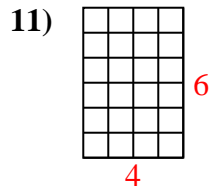
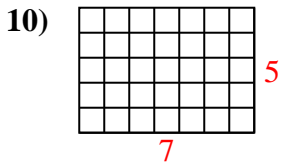
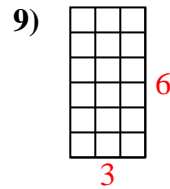
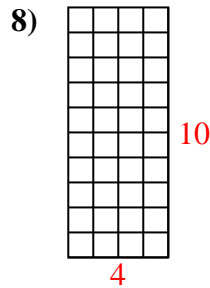
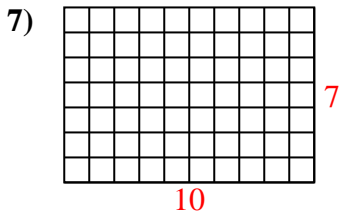
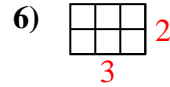
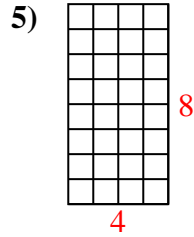
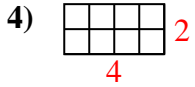
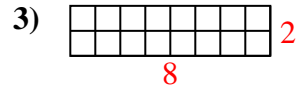
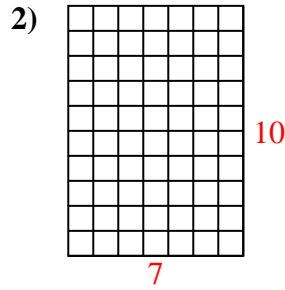
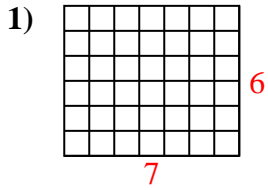
Answers



1. _____
2. _____
3. _____
4. _____
5. _____
6. _____
7. _____
8. _____
9. _____
10. _____
11. _____
12. _____
13. _____
14. _____
15. _____



Determine the area. Each **SVGREPLACE** = 1 square unit (u^2).



Answers

1. 42 u^2

2. 70 u^2

3. 16 u^2

4. 8 u^2

5. 32 u^2

6. 6 u^2

7. 70 u^2

8. 40 u^2

9. 18 u^2

10. 35 u^2

11. 24 u^2

12. 16 u^2

13. 30 u^2


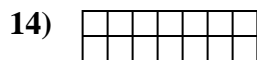
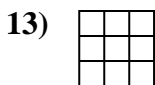
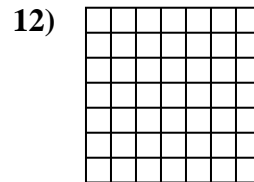
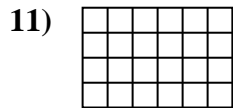
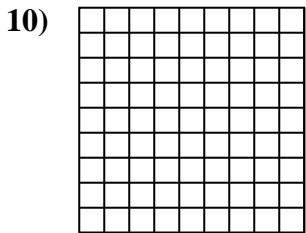

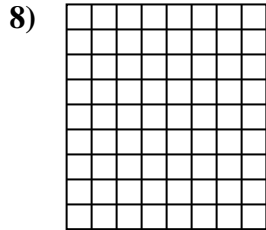
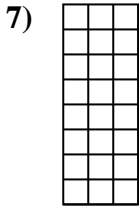
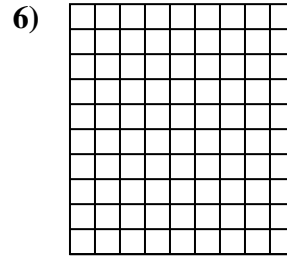
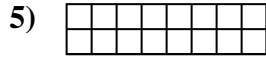
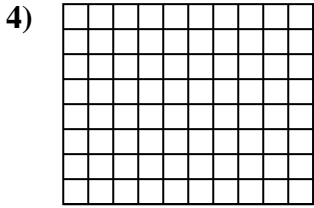
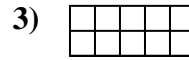
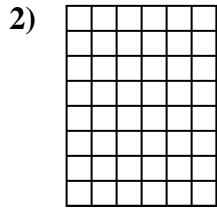
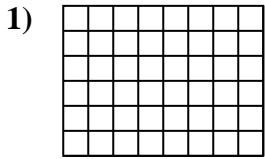
14. 8 u^2

15. 10 u^2



Determine the area. Each **SVGREPLACE** = 1 square unit (u^2).

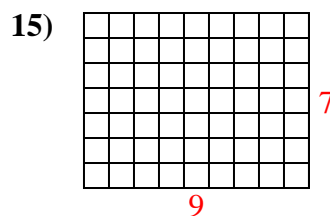
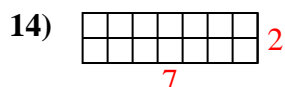
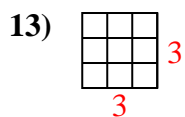
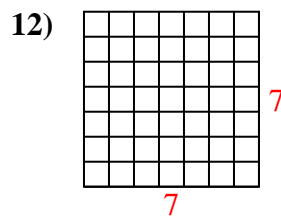
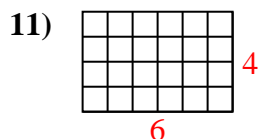
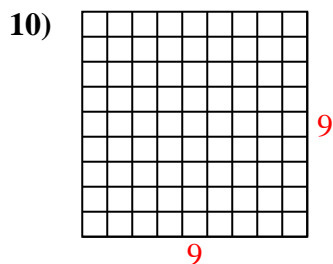
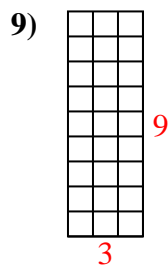
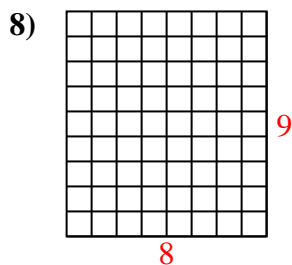
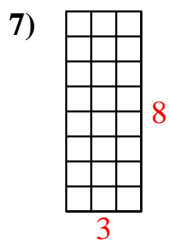
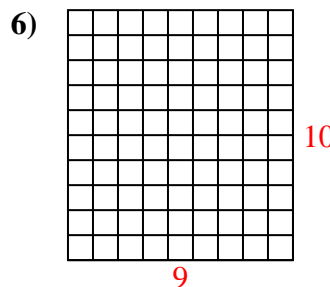
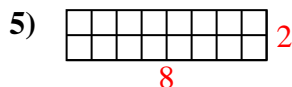
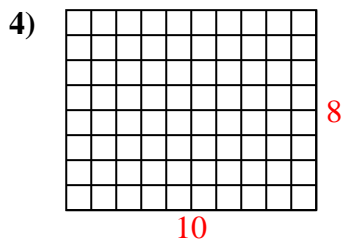
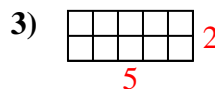
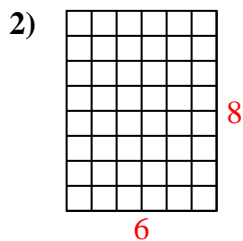
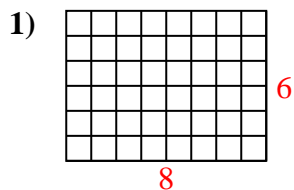
Answers



- 1. _____
- 2. _____
- 3. _____
- 4. _____
- 5. _____
- 6. _____
- 7. _____
- 8. _____
- 9. _____
- 10. _____
- 11. _____
- 12. _____
- 13. _____
- 14. _____
- 15. _____



Determine the area. Each **SVGREPLACE** = 1 square unit (u^2).



Answers

1. 48 u^2

2. 48 u^2

3. 10 u^2

4. 80 u^2

5. 16 u^2

6. 90 u^2

7. 24 u^2

8. 72 u^2

9. 27 u^2

10. 81 u^2

11. 24 u^2

12. 49 u^2

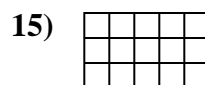
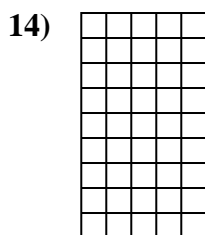
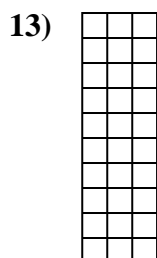
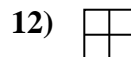
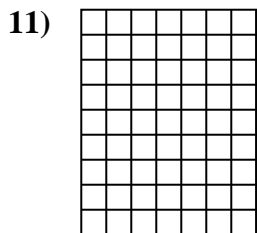
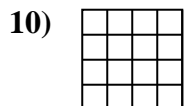
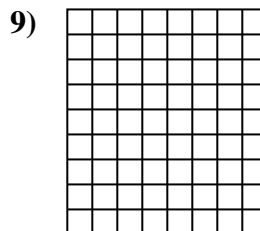
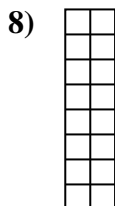
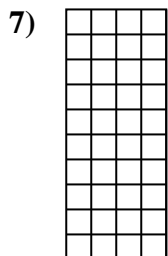

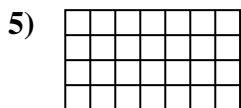
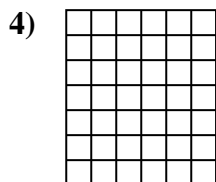
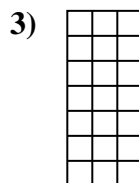
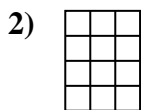
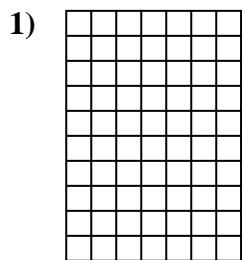
13. 9 u^2

14. 14 u^2

15. 63 u^2



Determine the area. Each **SVGREPLACE** = 1 square unit (u^2).



Answers

1. _____

2. _____

3. _____

4. _____

5. _____

6. _____

7. _____

8. _____

9. _____

10. _____

11. _____

12. _____

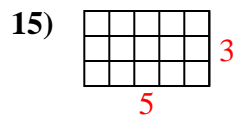
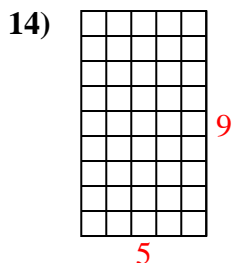
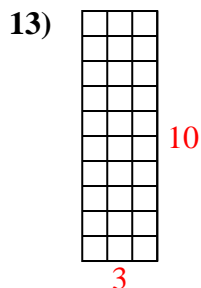
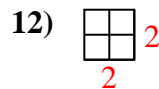
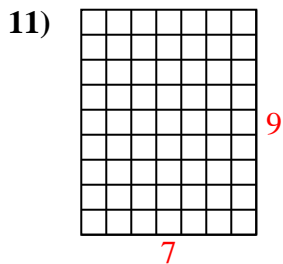
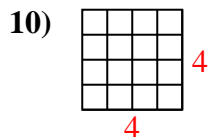
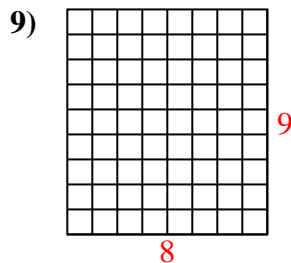
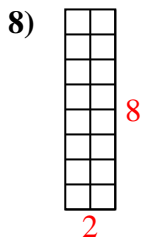
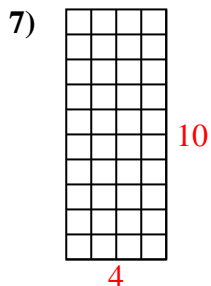
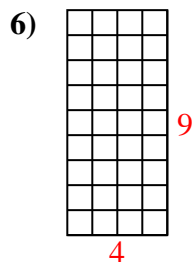
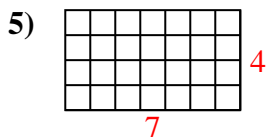
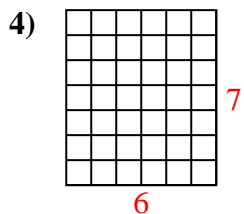
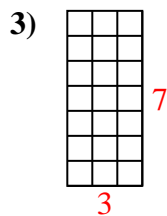
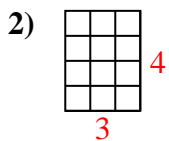
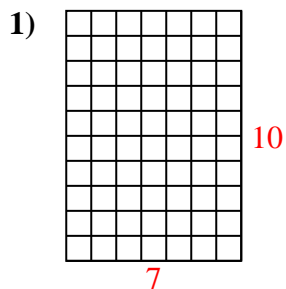
13. _____

14. _____

15. _____



Determine the area. Each **SVGREPLACE** = 1 square unit (u^2).



Answers

1. 70 u^2

2. 12 u^2

3. 21 u^2

4. 42 u^2

5. 28 u^2

6. 36 u^2

7. 40 u^2

8. 16 u^2

9. 72 u^2

10. 16 u^2

11. 63 u^2

12. 4 u^2

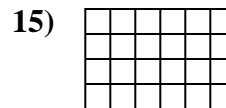
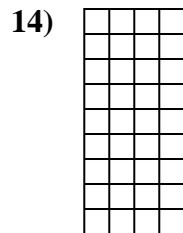
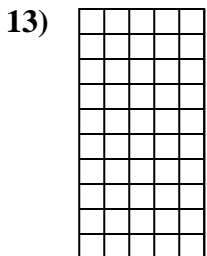
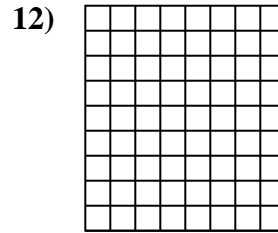
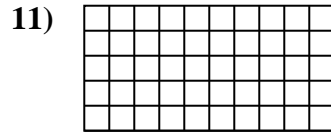
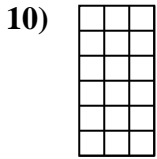
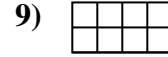

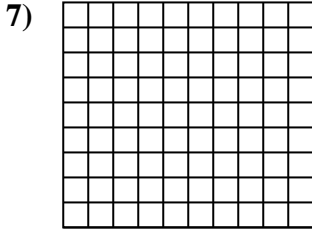
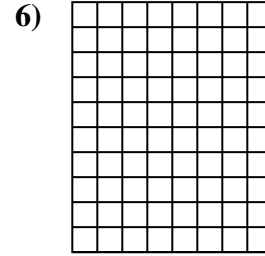
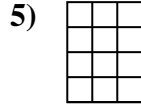
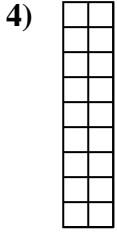
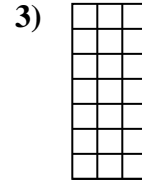
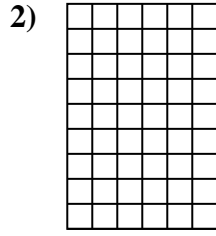
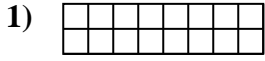
13. 30 u^2

14. 45 u^2

15. 15 u^2



Determine the area. Each **SVGREPLACE** = 1 square unit (u^2).



Answers

1. _____

2. _____

3. _____

4. _____

5. _____

6. _____

7. _____

8. _____

9. _____

10. _____

11. _____

12. _____

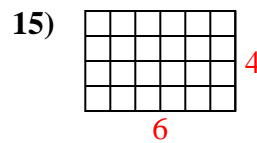
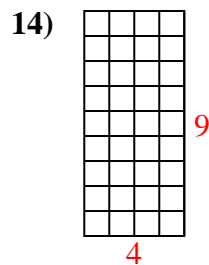
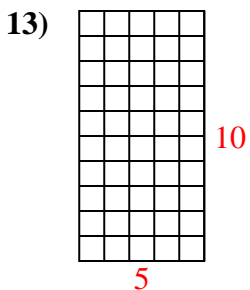
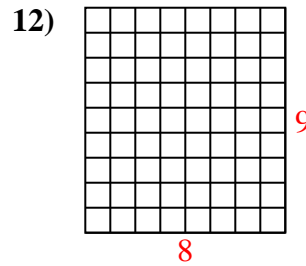
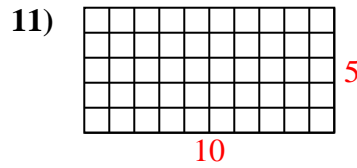
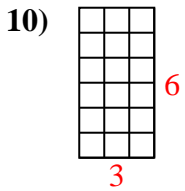
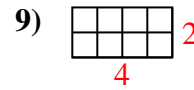
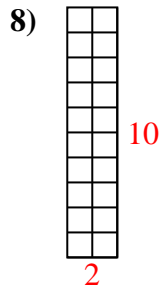
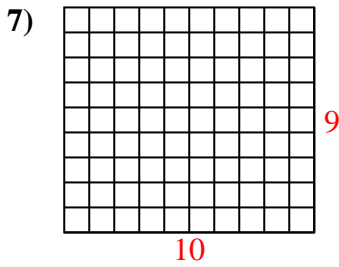
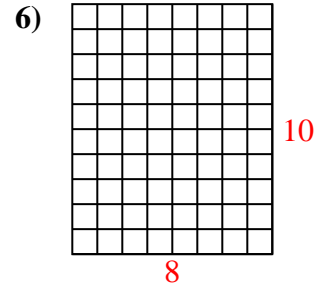
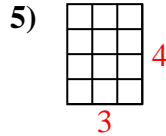
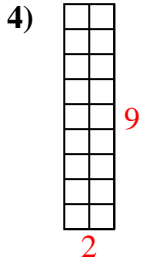
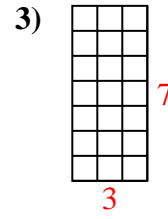
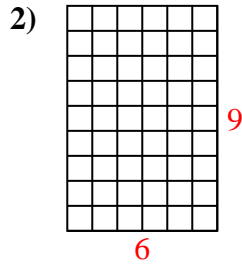
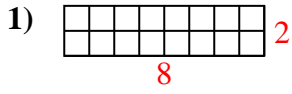
13. _____

14. _____

15. _____



Determine the area. Each **SVGREPLACE** = 1 square unit (u^2).



Answers

1. 16 u^2

2. 54 u^2

3. 21 u^2

4. 18 u^2

5. 12 u^2

6. 80 u^2

7. 90 u^2

8. 20 u^2

9. 8 u^2

10. 18 u^2

11. 50 u^2

12. 72 u^2

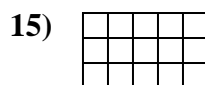
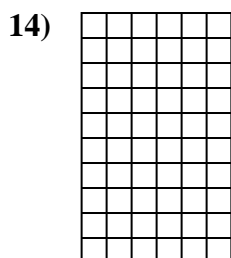
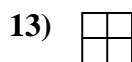
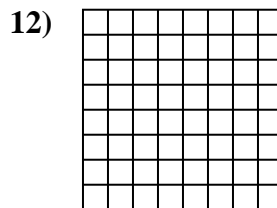
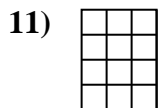
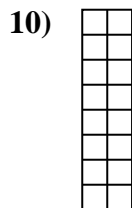

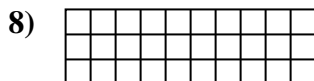
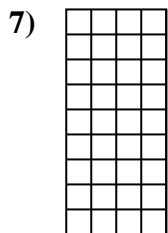
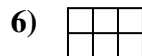
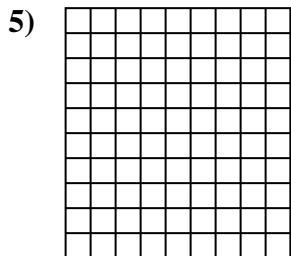
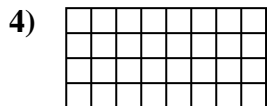
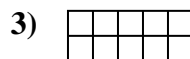
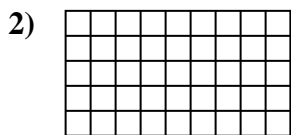

13. 50 u^2

14. 36 u^2

15. 24 u^2



Determine the area. Each **SVGREPLACE** = 1 square unit (u^2).



Answers

1. _____

2. _____

3. _____

4. _____

5. _____

6. _____

7. _____

8. _____

9. _____

10. _____

11. _____

12. _____

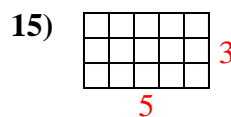
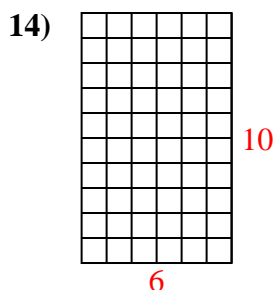
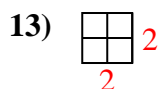
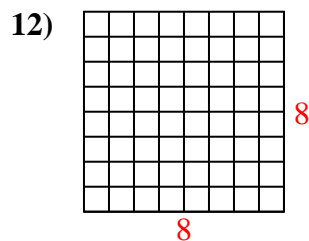
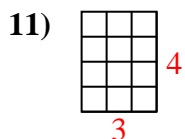
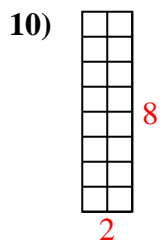
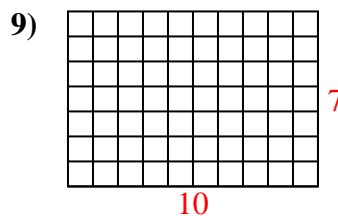
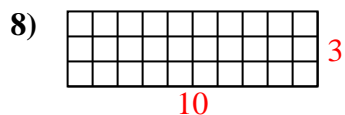
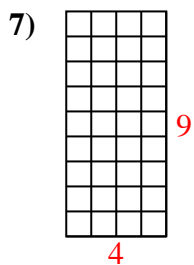
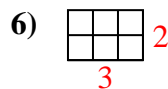
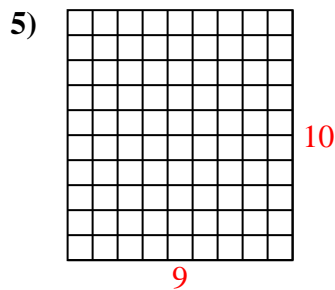
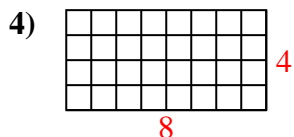
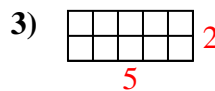
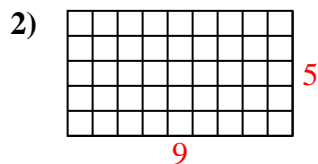
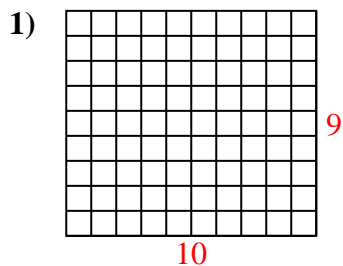
13. _____

14. _____

15. _____



Determine the area. Each **SVGREPLACE** = 1 square unit (u^2).



Answers

1. 90 u^2

2. 45 u^2

3. 10 u^2

4. 32 u^2

5. 90 u^2

6. 6 u^2

7. 36 u^2

8. 30 u^2

9. 70 u^2

10. 16 u^2

11. 12 u^2

12. 64 u^2

13. 4 u^2

14. 60 u^2

15. 15 u^2