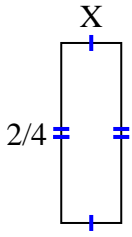


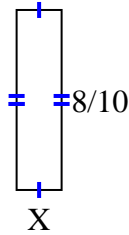


Find the value of X for each figure. Each figure is in centimeters (cm). Not to scale.

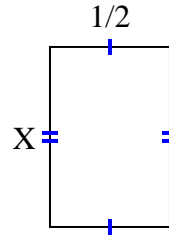
1) area = $\frac{2}{24}$ cm²



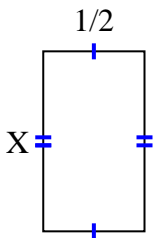
2) area = $\frac{8}{50}$ cm²



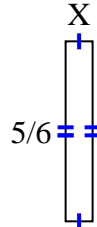
3) area = $\frac{6}{16}$ cm²



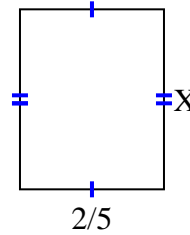
4) area = $\frac{8}{18}$ cm²



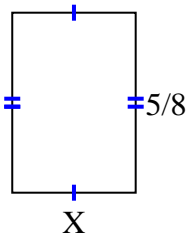
5) area = $\frac{5}{48}$ cm²



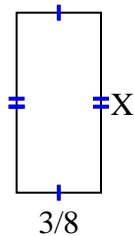
6) area = $\frac{2}{10}$ cm²



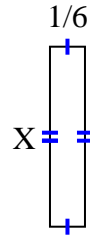
7) area = $\frac{15}{56}$ cm²



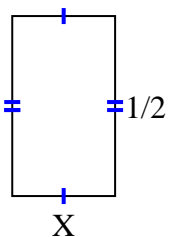
8) area = $\frac{24}{80}$ cm²



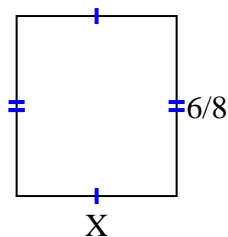
9) area = $\frac{6}{42}$ cm²



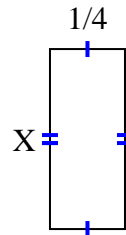
10) area = $\frac{2}{14}$ cm²



11) area = $\frac{24}{48}$ cm²



12) area = $\frac{3}{20}$ cm²



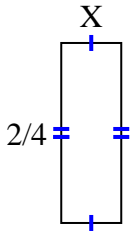
Answers

1. _____
2. _____
3. _____
4. _____
5. _____
6. _____
7. _____
8. _____
9. _____
10. _____
11. _____
12. _____

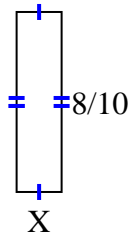


Find the value of X for each figure. Each figure is in centimeters (cm). Not to scale.

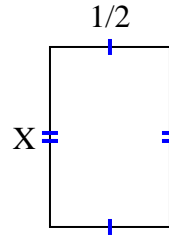
1) area = $\frac{2}{24}$ cm²



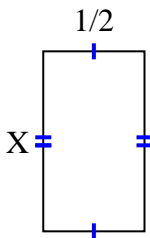
2) area = $\frac{8}{50}$ cm²



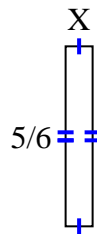
3) area = $\frac{6}{16}$ cm²



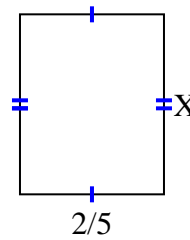
4) area = $\frac{8}{18}$ cm²



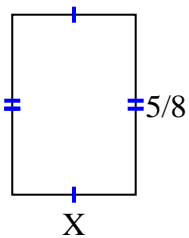
5) area = $\frac{5}{48}$ cm²



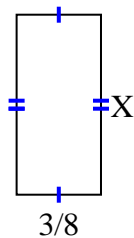
6) area = $\frac{2}{10}$ cm²



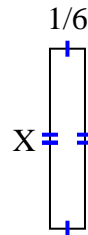
7) area = $\frac{15}{56}$ cm²



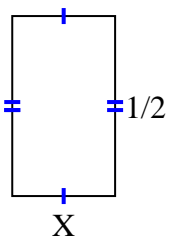
8) area = $\frac{24}{80}$ cm²



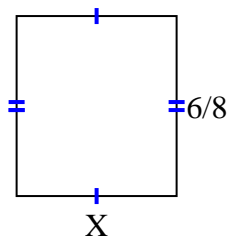
9) area = $\frac{6}{42}$ cm²



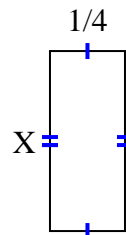
10) area = $\frac{2}{14}$ cm²



11) area = $\frac{24}{48}$ cm²



12) area = $\frac{3}{20}$ cm²



Answers

1. $\frac{1}{6}$
2. $\frac{1}{5}$
3. $\frac{6}{8}$
4. $\frac{8}{9}$
5. $\frac{1}{8}$
6. $\frac{1}{2}$
7. $\frac{3}{7}$
8. $\frac{8}{10}$
9. $\frac{6}{7}$
10. $\frac{2}{7}$
11. $\frac{4}{6}$
12. $\frac{3}{5}$