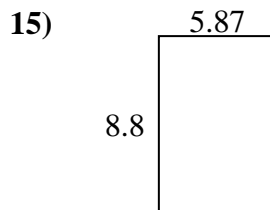
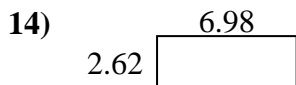
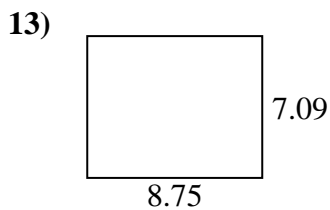
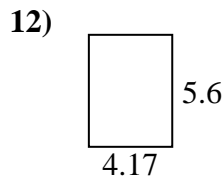

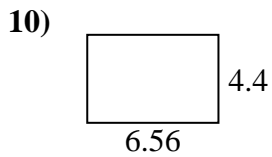
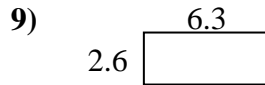
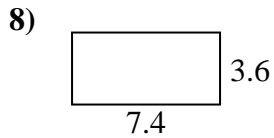
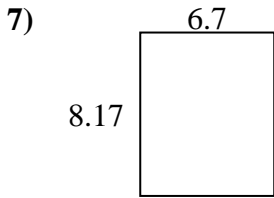
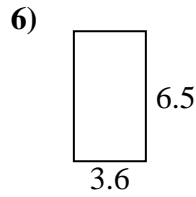

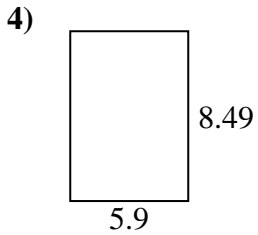
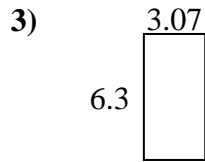
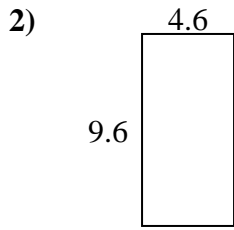
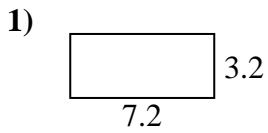




Find the perimeter and area of each figure. Answer to the nearest 10th.

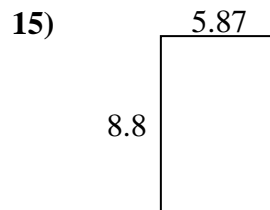
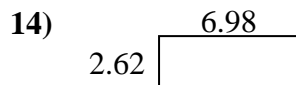
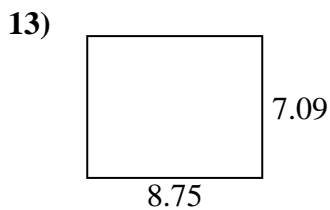
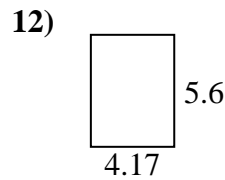

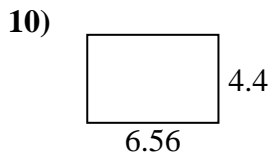
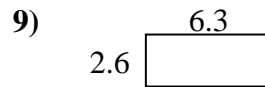
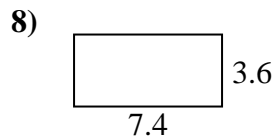
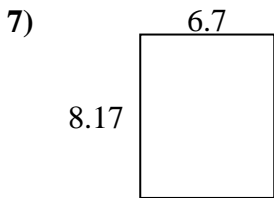
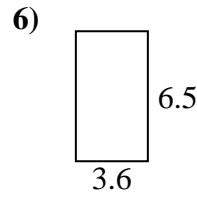

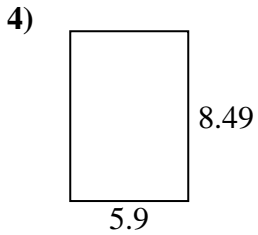
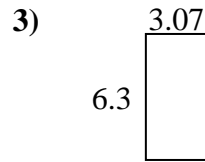
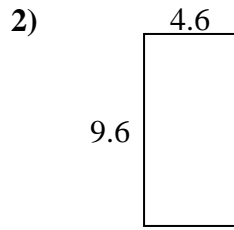
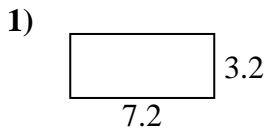


Answers

1. _____
2. _____
3. _____
4. _____
5. _____
6. _____
7. _____
8. _____
9. _____
10. _____
11. _____
12. _____
13. _____
14. _____
15. _____



Find the perimeter and area of each figure. Answer to the nearest 10th.



Answers

1.	<u>23.0</u>	<u>20.8</u>
2.	<u>44.2</u>	<u>28.4</u>
3.	<u>19.3</u>	<u>18.7</u>
4.	<u>50.1</u>	<u>28.8</u>
5.	<u>17.4</u>	<u>20.2</u>
6.	<u>23.4</u>	<u>20.2</u>
7.	<u>54.7</u>	<u>29.7</u>
8.	<u>26.6</u>	<u>22.0</u>
9.	<u>16.4</u>	<u>17.8</u>
10.	<u>28.9</u>	<u>21.9</u>
11.	<u>24.5</u>	<u>22.4</u>
12.	<u>23.4</u>	<u>19.5</u>
13.	<u>62.0</u>	<u>31.7</u>
14.	<u>18.3</u>	<u>19.2</u>
15.	<u>51.7</u>	<u>29.3</u>