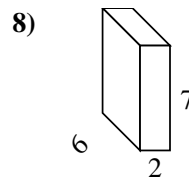
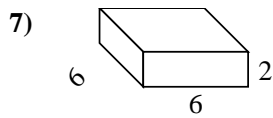
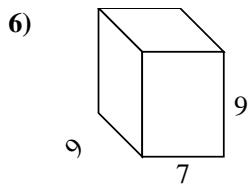
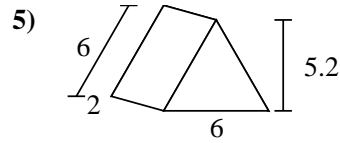
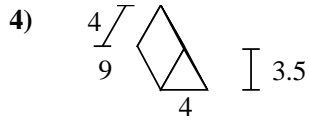
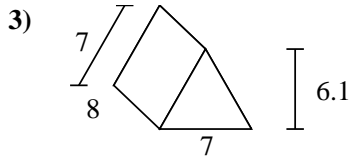
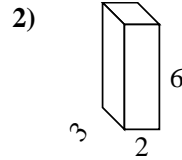
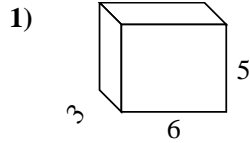
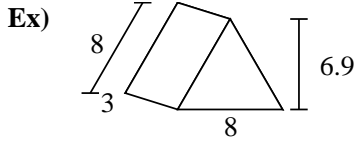




Find the surface area of each figure. Units are in cm (not to scale).



Answers

Ex. 127.2 cm²

1. _____

2. _____

3. _____

4. _____

5. _____

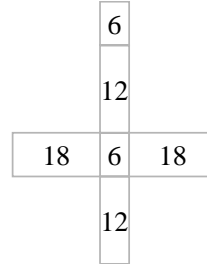
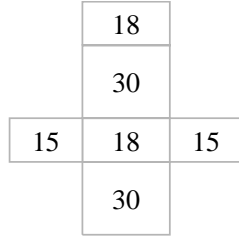
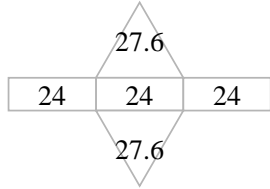
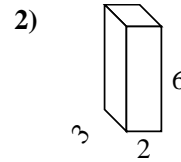
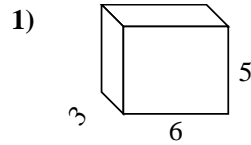
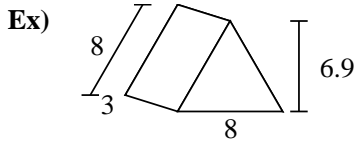
6. _____

7. _____

8. _____



Find the surface area of each figure. Units are in cm (not to scale).



Answers

Ex. 127.2 cm²

1. 126 cm²

2. 72 cm²

3. 210.7 cm²

4. 122 cm²

5. 67.2 cm²

6. 414 cm²

7. 120 cm²

8. 136 cm²

