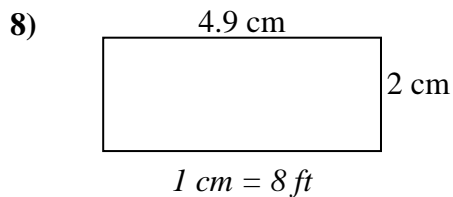
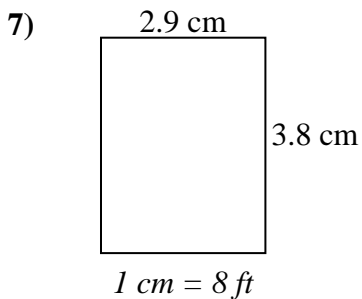
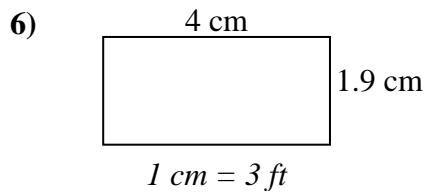
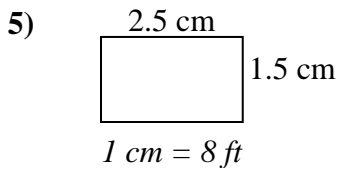
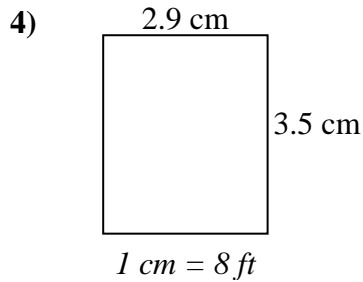
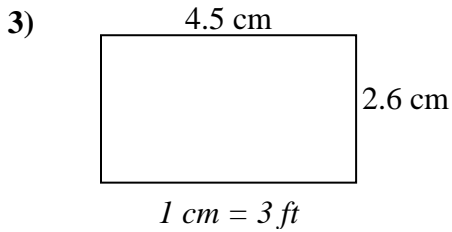
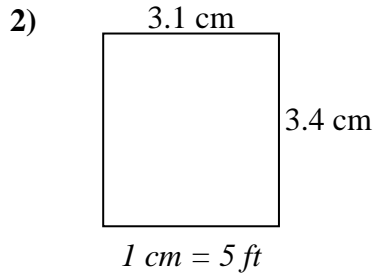
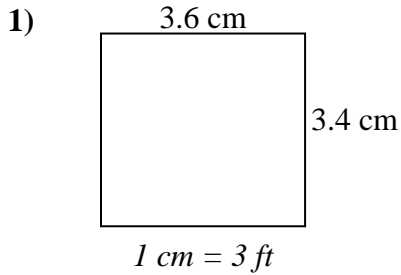




Determine the actual width, height and area of each scale rectangle.

Round the area to the nearest whole number.



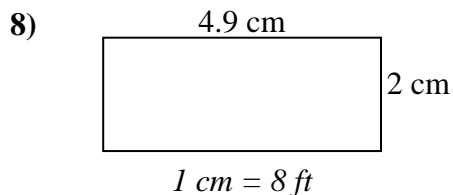
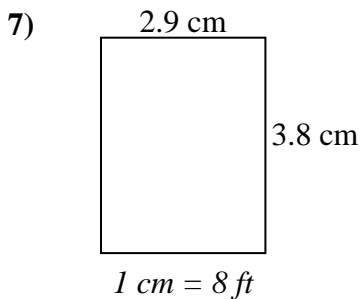
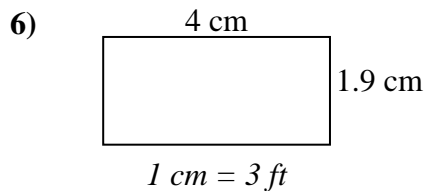
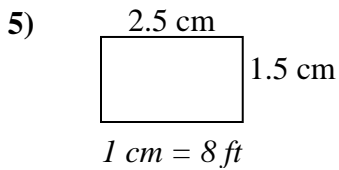
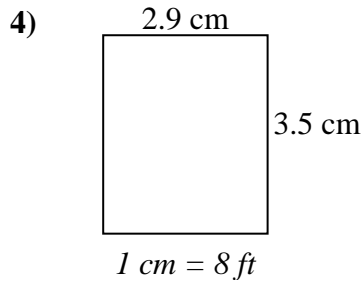
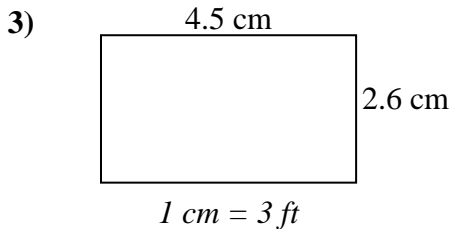
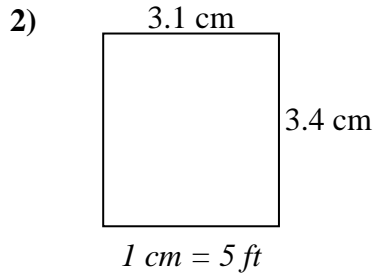
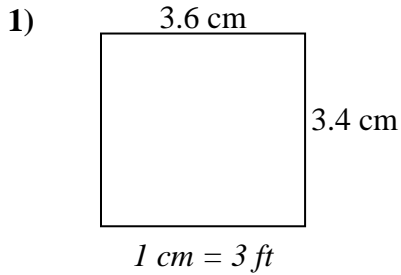
Answers

1. \_\_\_\_\_
2. \_\_\_\_\_
3. \_\_\_\_\_
4. \_\_\_\_\_
5. \_\_\_\_\_
6. \_\_\_\_\_
7. \_\_\_\_\_
8. \_\_\_\_\_



Determine the actual width, height and area of each scale rectangle.

Round the area to the nearest whole number.



Answers

- 1. 10.8 10.2 110
- 2. 15.5 17 264
- 3. 13.5 7.8 105
- 4. 23.2 28 650
- 5. 20 12 240
- 6. 12 5.7 68
- 7. 23.2 30.4 705
- 8. 39.2 16 627