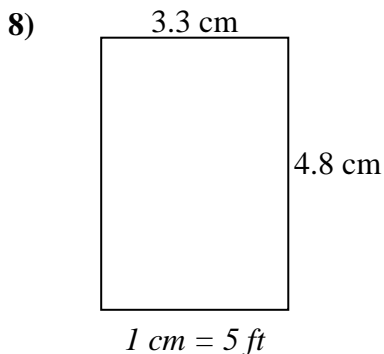
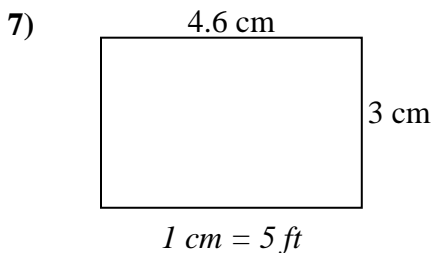
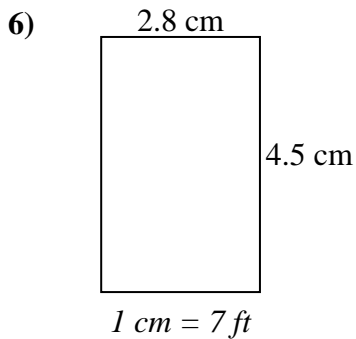
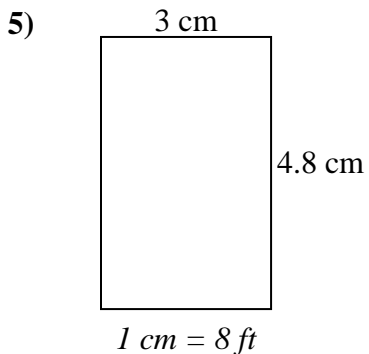
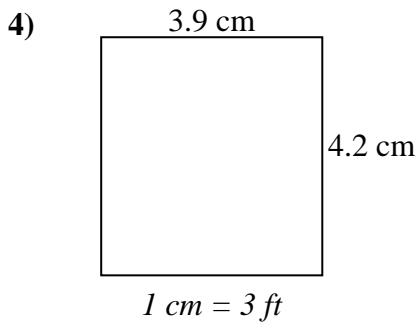
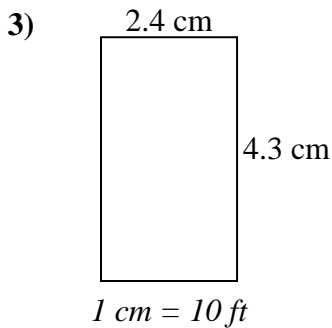
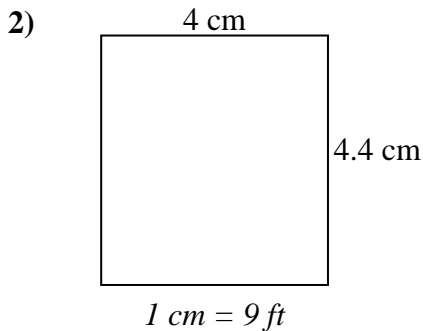
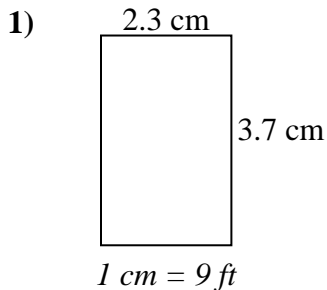




Determine the actual width, height and area of each scale rectangle.

Round the area to the nearest whole number.



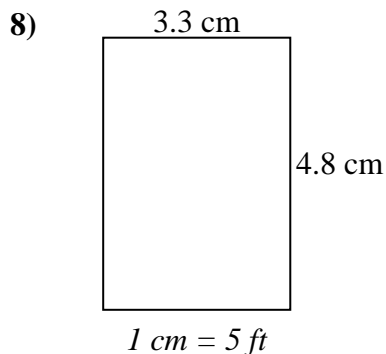
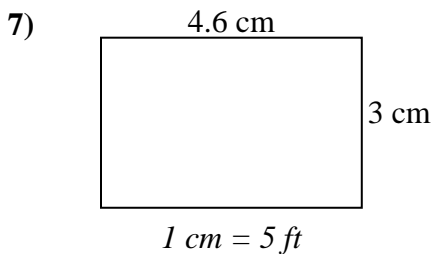
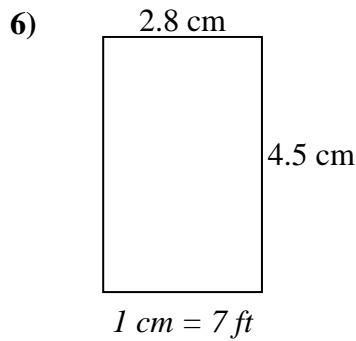
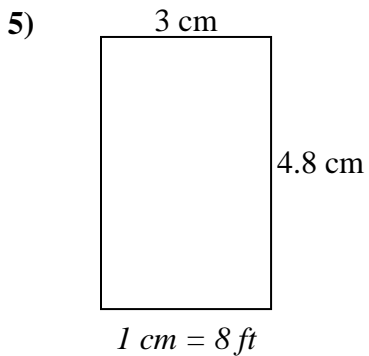
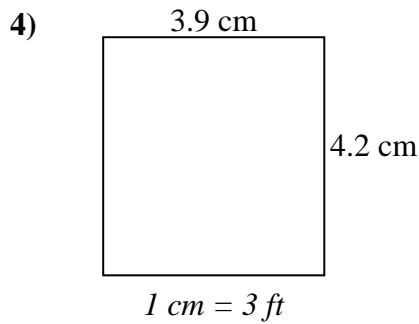
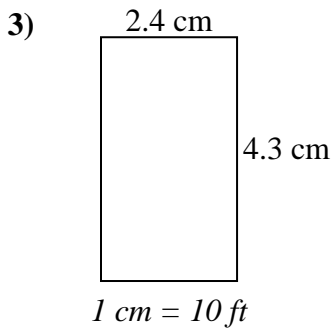
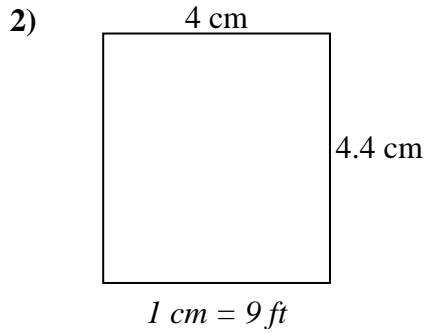
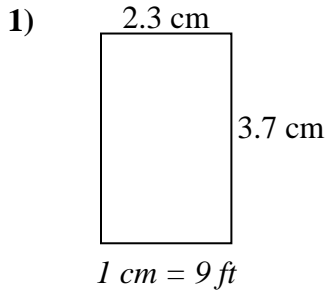
Answers

1. _____
2. _____
3. _____
4. _____
5. _____
6. _____
7. _____
8. _____



Determine the actual width, height and area of each scale rectangle.

Round the area to the nearest whole number.



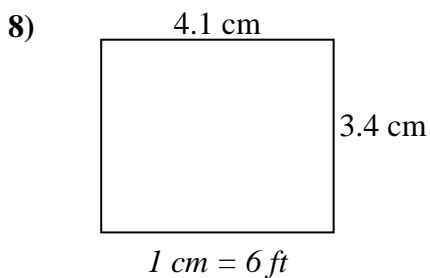
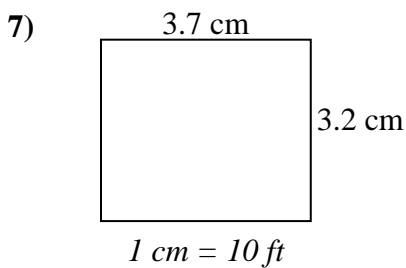
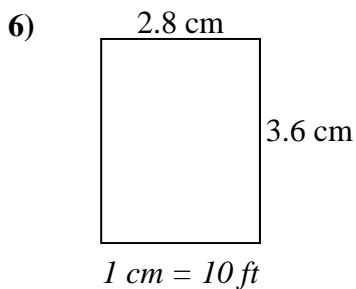
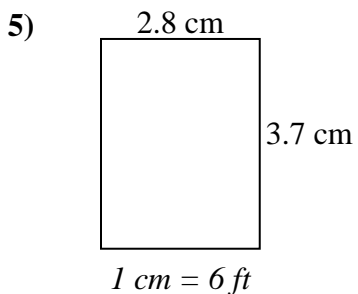
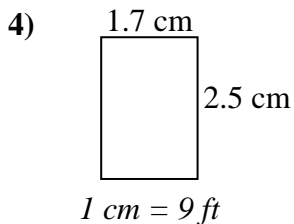
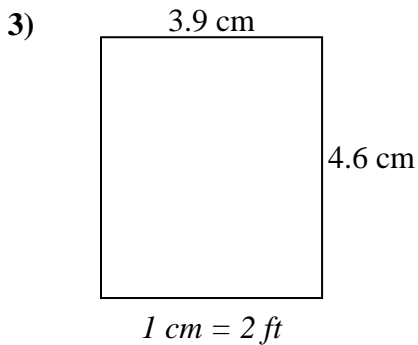
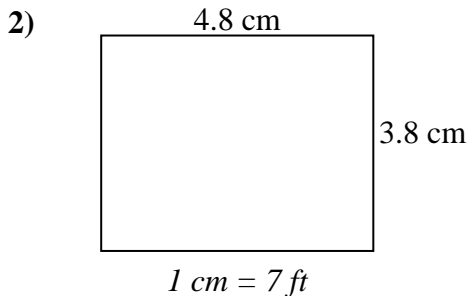
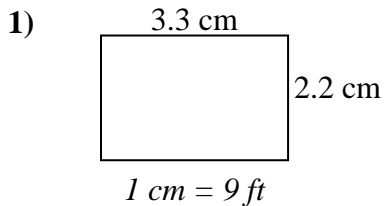
Answers

1. 20.7 33.3 689
2. 36 39.6 1,426
3. 24 43 1,032
4. 11.7 12.6 147
5. 24 38.4 922
6. 19.6 31.5 617
7. 23 15 345
8. 16.5 24 396



Determine the actual width, height and area of each scale rectangle.

Round the area to the nearest whole number.



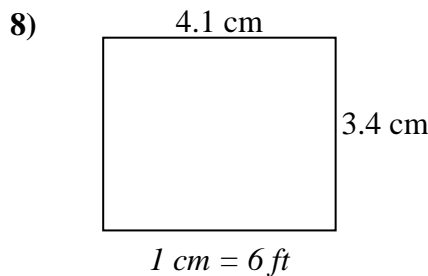
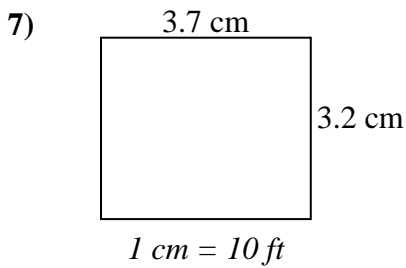
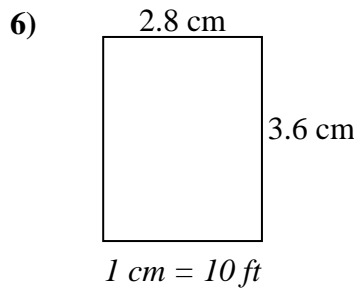
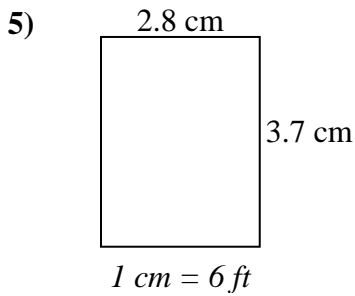
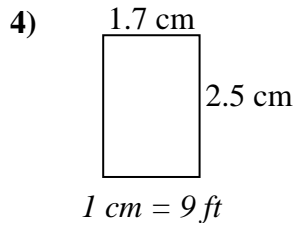
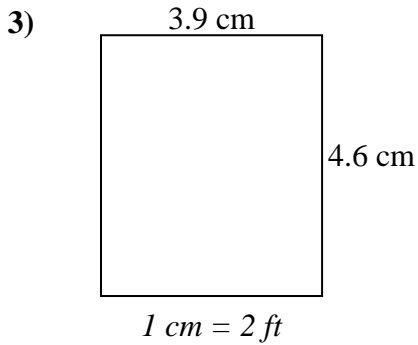
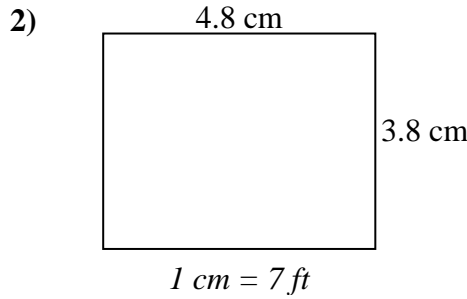
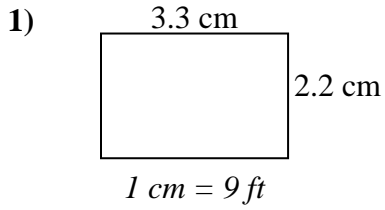
Answers

1. _____
2. _____
3. _____
4. _____
5. _____
6. _____
7. _____
8. _____



Determine the actual width, height and area of each scale rectangle.

Round the area to the nearest whole number.



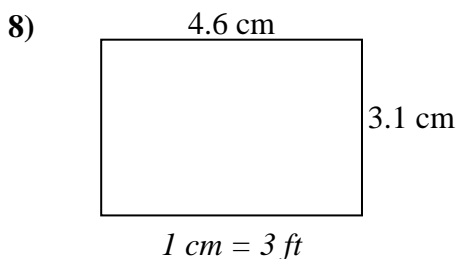
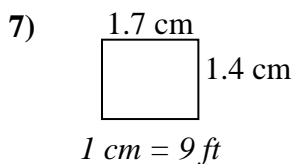
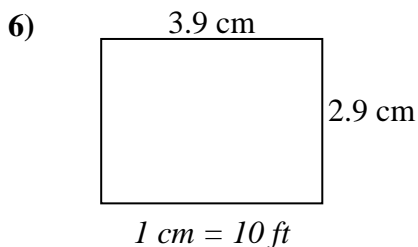
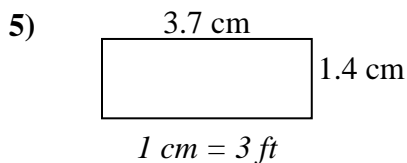
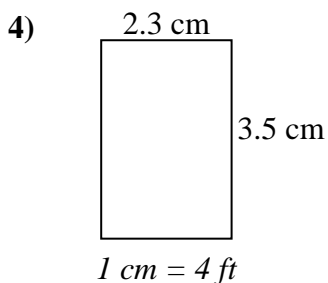
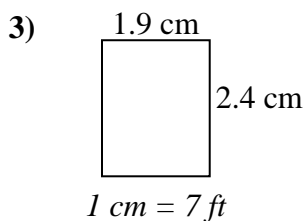
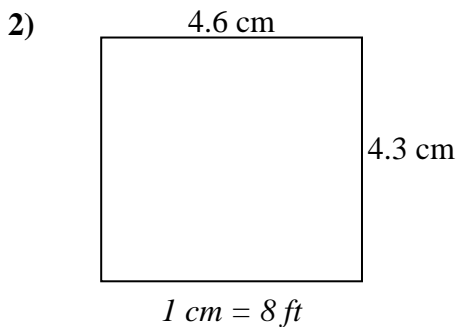
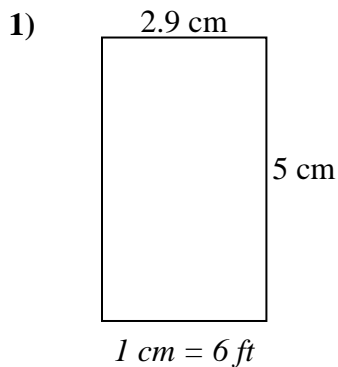
Answers

1. 29.7 19.8 588
2. 33.6 26.6 894
3. 7.8 9.2 72
4. 15.3 22.5 344
5. 16.8 22.2 373
6. 28 36 1,008
7. 37 32 1,184
8. 24.6 20.4 502



Determine the actual width, height and area of each scale rectangle.

Round the area to the nearest whole number.



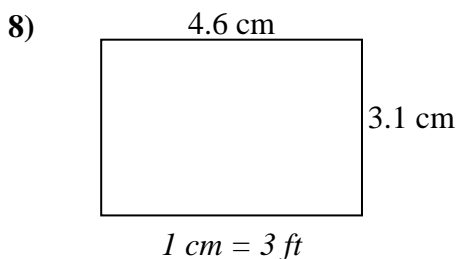
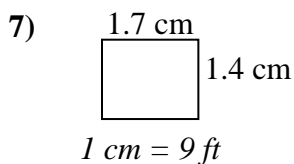
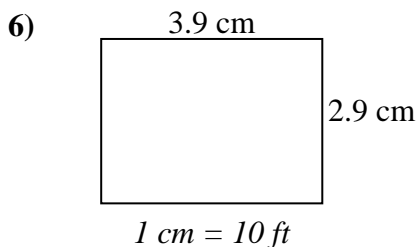
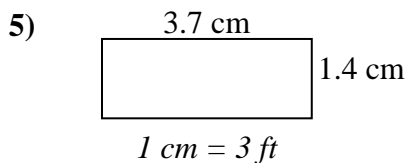
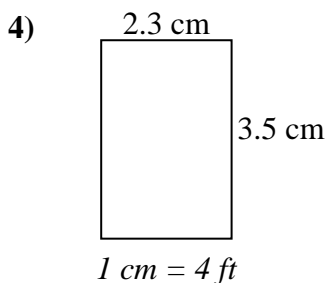
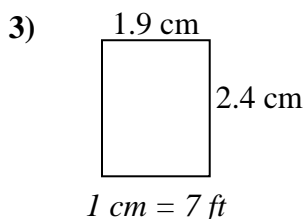
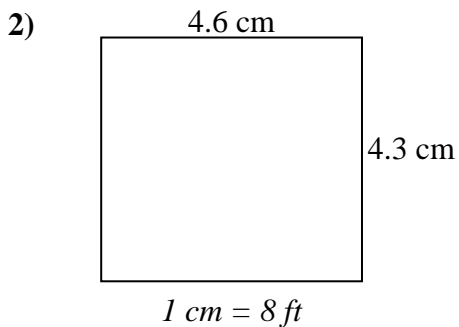
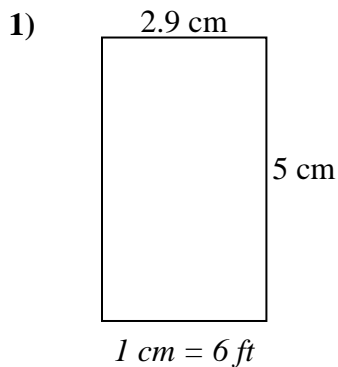
Answers

1. _____
2. _____
3. _____
4. _____
5. _____
6. _____
7. _____
8. _____



Determine the actual width, height and area of each scale rectangle.

Round the area to the nearest whole number.



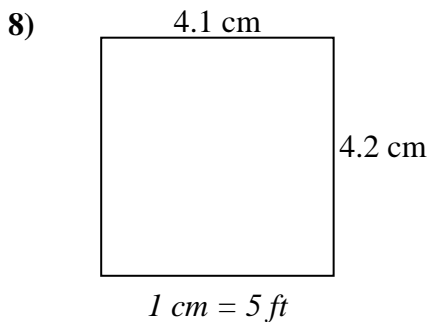
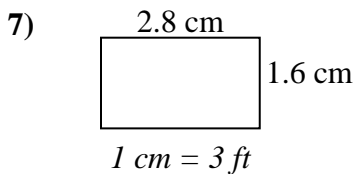
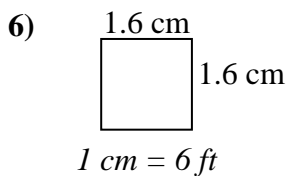
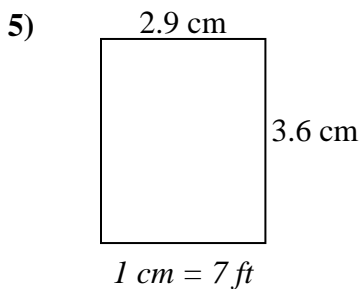
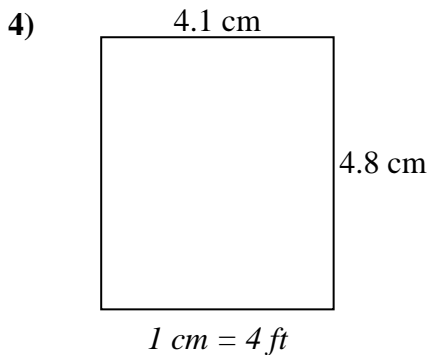
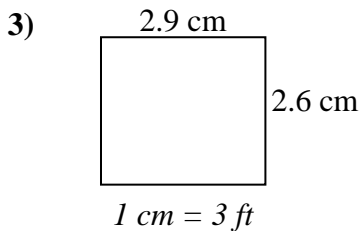
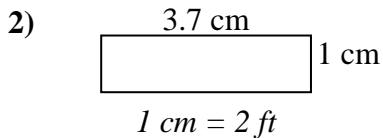
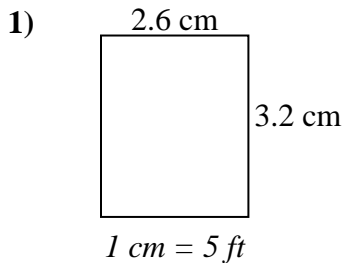
Answers

- 1. 17.4 30 522
- 2. 36.8 34.4 1,266
- 3. 13.3 16.8 223
- 4. 9.2 14 129
- 5. 11.1 4.2 47
- 6. 39 29 1,131
- 7. 15.3 12.6 193
- 8. 13.8 9.3 128



Determine the actual width, height and area of each scale rectangle.

Round the area to the nearest whole number.



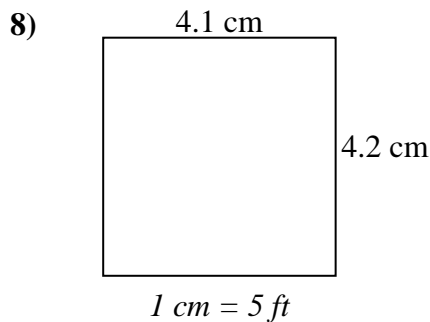
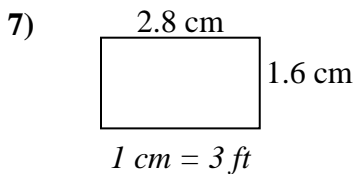
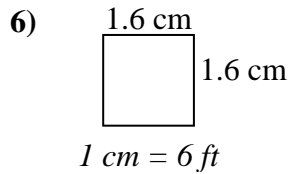
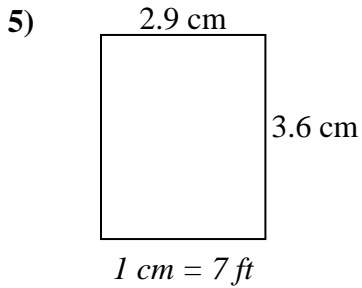
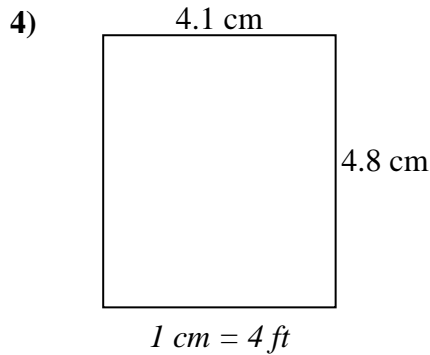
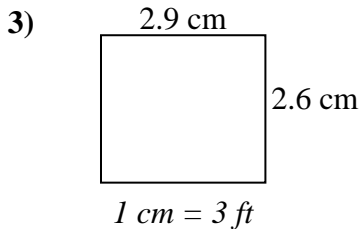
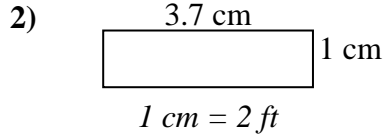
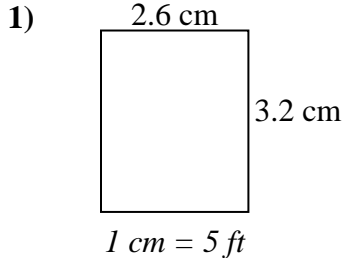
Answers

1. _____
2. _____
3. _____
4. _____
5. _____
6. _____
7. _____
8. _____



Determine the actual width, height and area of each scale rectangle.

Round the area to the nearest whole number.



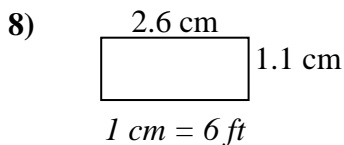
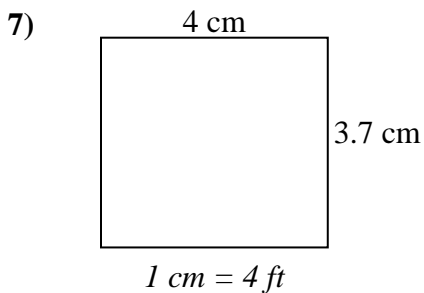
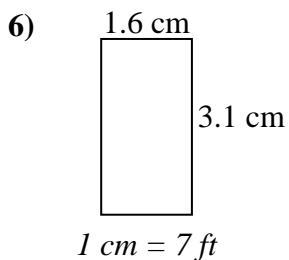
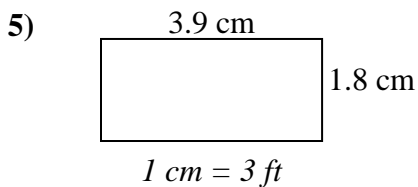
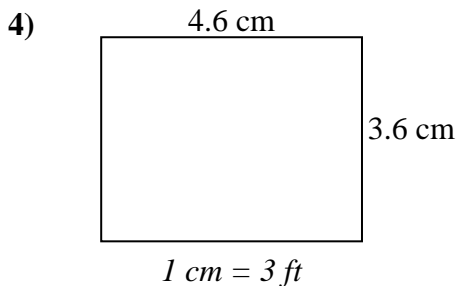
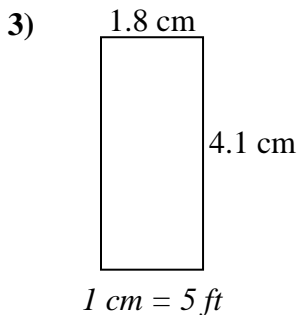
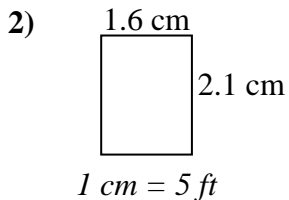
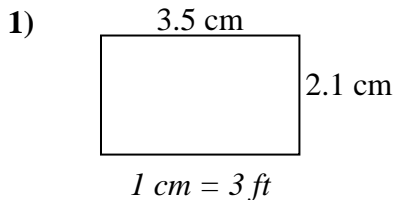
Answers

1. 13 16 208
2. 7.4 2 15
3. 8.7 7.8 68
4. 16.4 19.2 315
5. 20.3 25.2 512
6. 9.6 9.6 92
7. 8.4 4.8 40
8. 20.5 21 431



Determine the actual width, height and area of each scale rectangle.

Round the area to the nearest whole number.



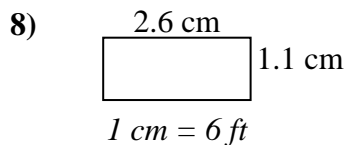
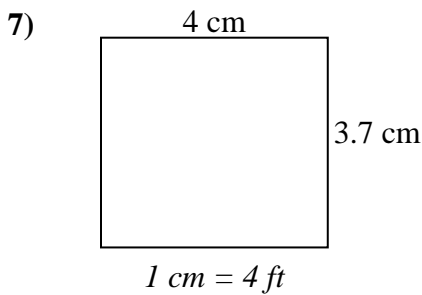
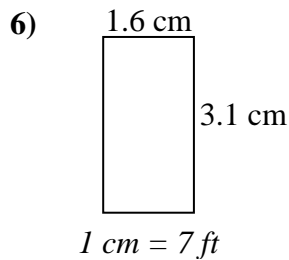
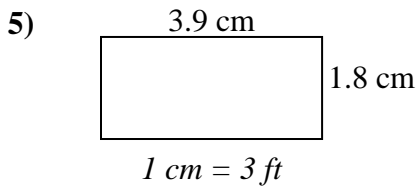
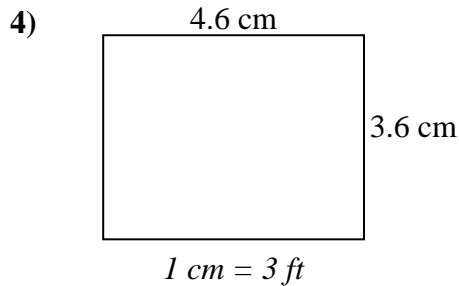
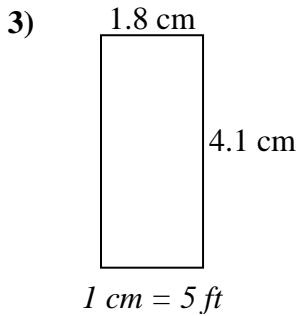
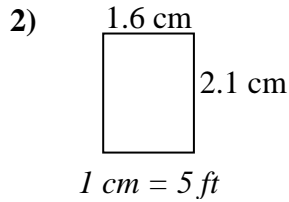
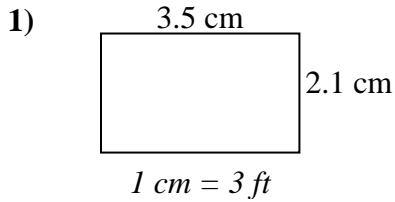
Answers

1. _____
2. _____
3. _____
4. _____
5. _____
6. _____
7. _____
8. _____



Determine the actual width, height and area of each scale rectangle.

Round the area to the nearest whole number.



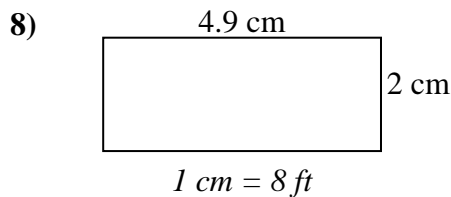
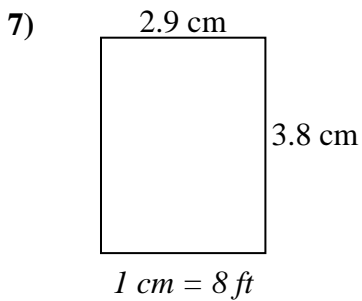
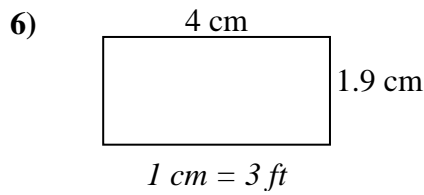
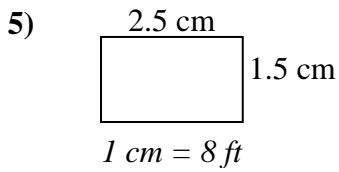
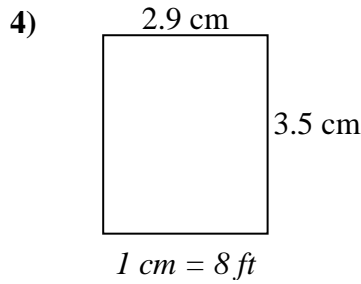
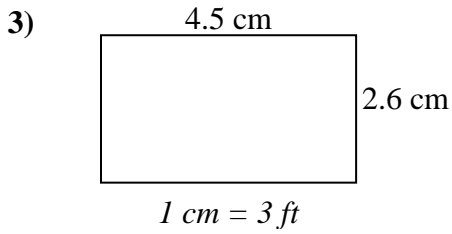
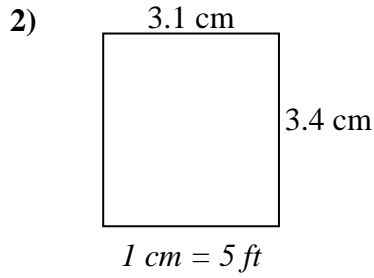
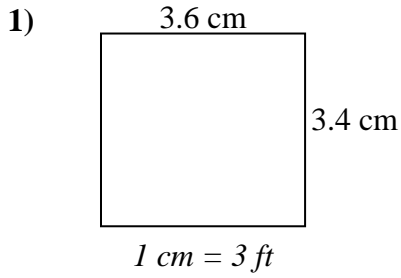
Answers

1. 10.5 6.3 66
2. 8 10.5 84
3. 9 20.5 185
4. 13.8 10.8 149
5. 11.7 5.4 63
6. 11.2 21.7 243
7. 16 14.8 237
8. 15.6 6.6 103



Determine the actual width, height and area of each scale rectangle.

Round the area to the nearest whole number.



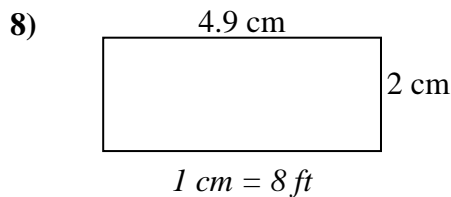
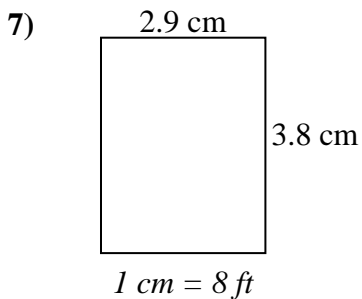
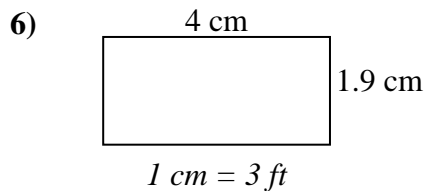
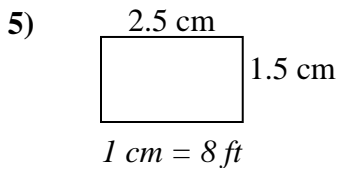
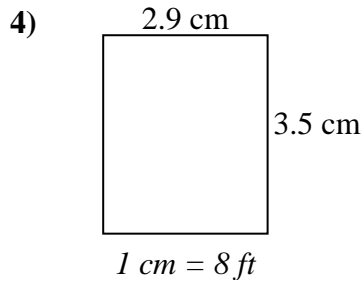
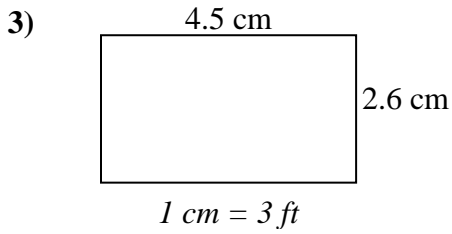
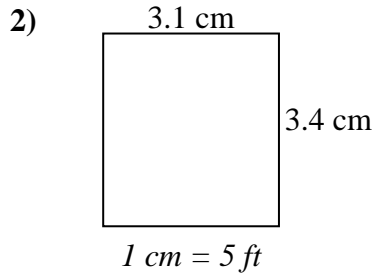
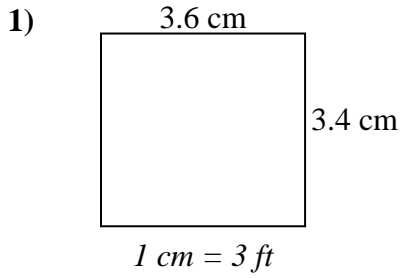
Answers

1. _____
2. _____
3. _____
4. _____
5. _____
6. _____
7. _____
8. _____



Determine the actual width, height and area of each scale rectangle.

Round the area to the nearest whole number.



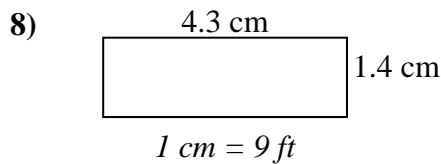
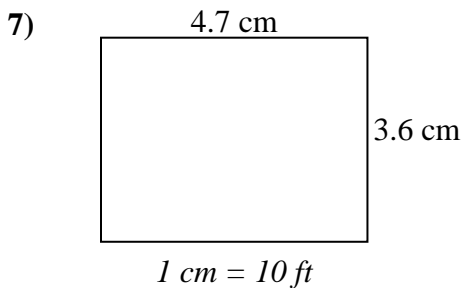
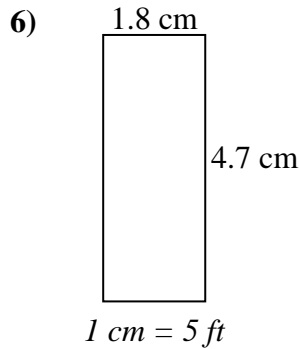
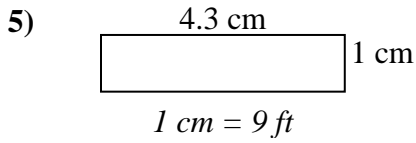
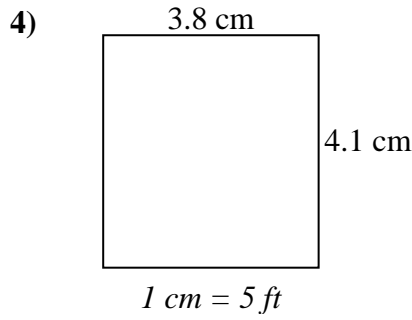
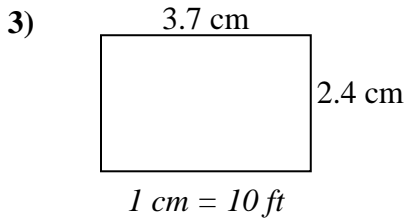
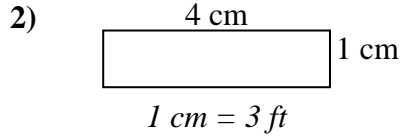
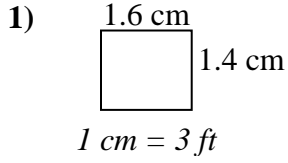
Answers

1. 10.8 10.2 110
2. 15.5 17 264
3. 13.5 7.8 105
4. 23.2 28 650
5. 20 12 240
6. 12 5.7 68
7. 23.2 30.4 705
8. 39.2 16 627



Determine the actual width, height and area of each scale rectangle.

Round the area to the nearest whole number.



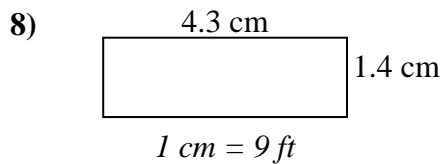
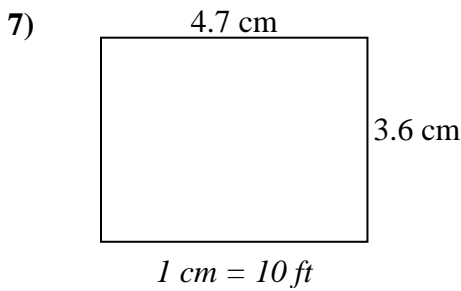
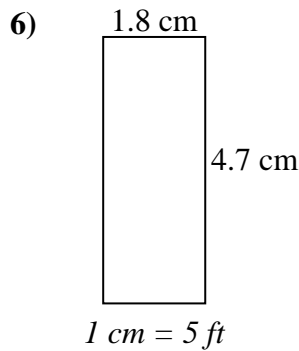
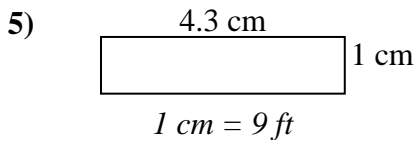
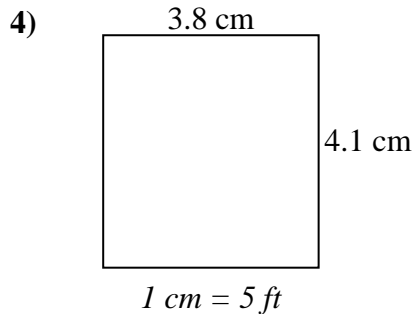
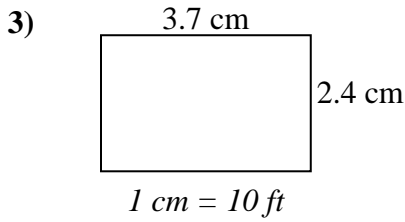
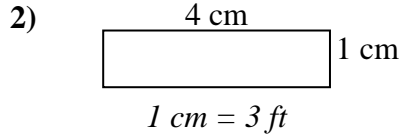
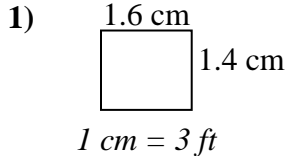
Answers

1. _____
2. _____
3. _____
4. _____
5. _____
6. _____
7. _____
8. _____



Determine the actual width, height and area of each scale rectangle.

Round the area to the nearest whole number.



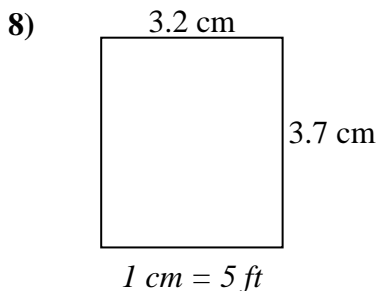
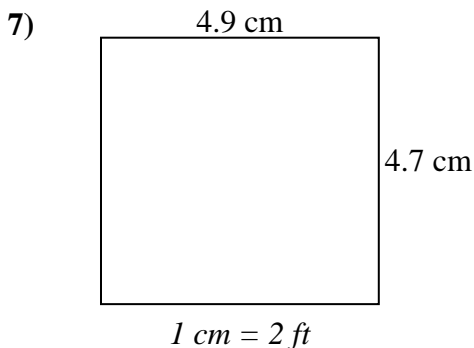
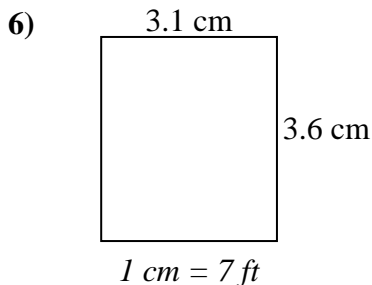
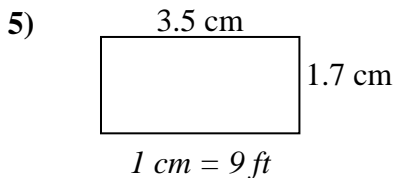
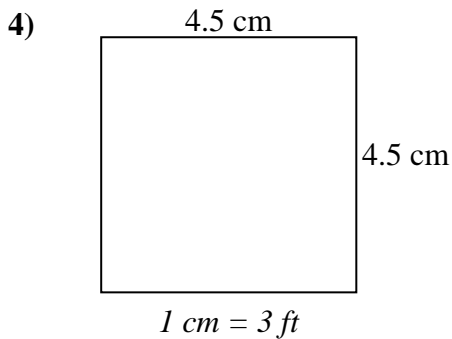
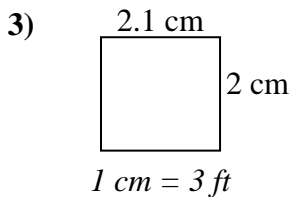
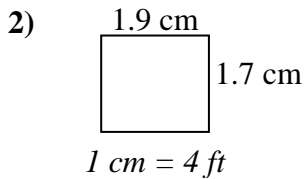
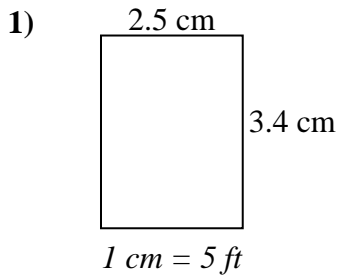
Answers

| | | | |
|----|-------------|-------------|--------------|
| 1. | <u>4.8</u> | <u>4.2</u> | <u>20</u> |
| 2. | <u>12</u> | <u>3</u> | <u>36</u> |
| 3. | <u>37</u> | <u>24</u> | <u>888</u> |
| 4. | <u>19</u> | <u>20.5</u> | <u>390</u> |
| 5. | <u>38.7</u> | <u>9</u> | <u>348</u> |
| 6. | <u>9</u> | <u>23.5</u> | <u>212</u> |
| 7. | <u>47</u> | <u>36</u> | <u>1,692</u> |
| 8. | <u>38.7</u> | <u>12.6</u> | <u>488</u> |



Determine the actual width, height and area of each scale rectangle.

Round the area to the nearest whole number.



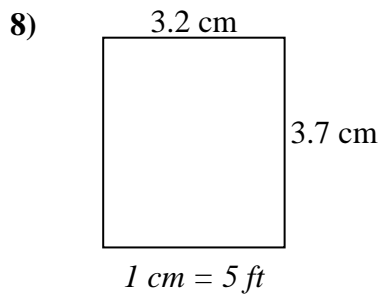
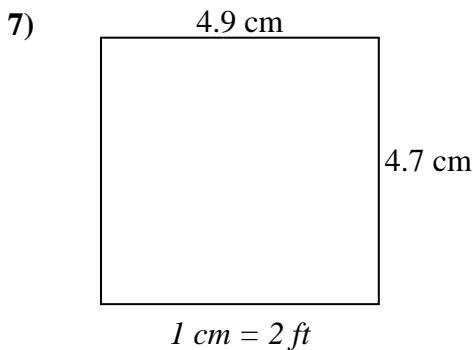
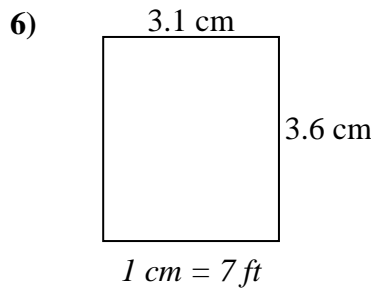
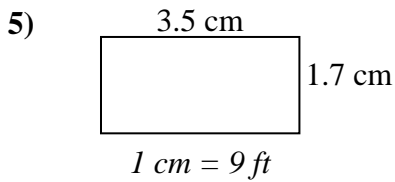
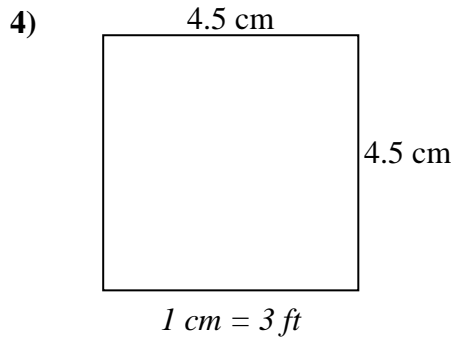
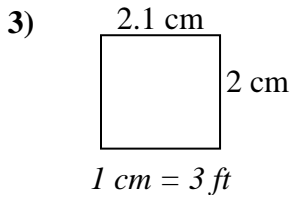
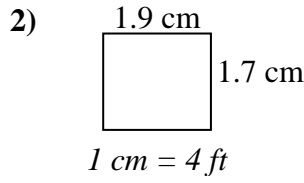
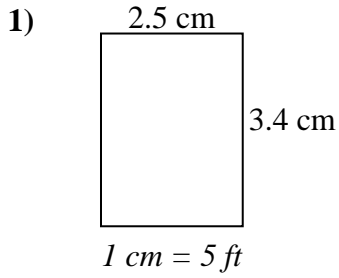
Answers

1. _____
2. _____
3. _____
4. _____
5. _____
6. _____
7. _____
8. _____



Determine the actual width, height and area of each scale rectangle.

Round the area to the nearest whole number.



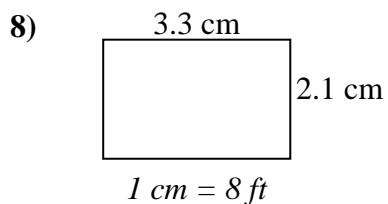
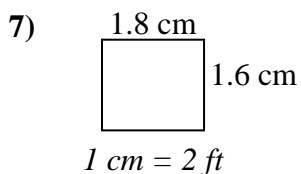
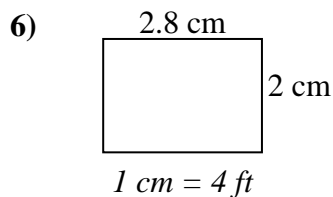
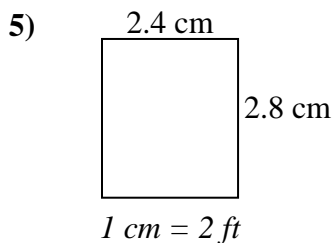
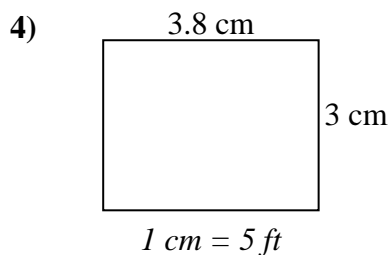
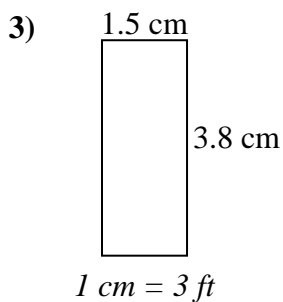
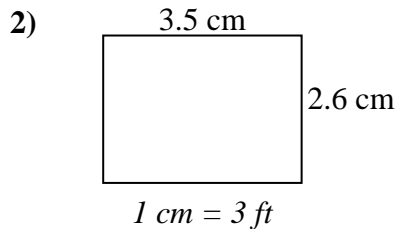
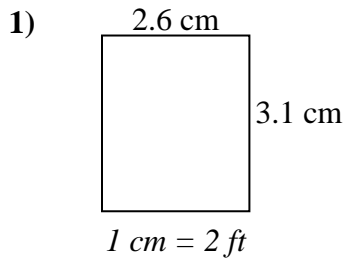
Answers

- | | | | |
|----|-------------|-------------|------------|
| 1. | <u>12.5</u> | <u>17</u> | <u>213</u> |
| 2. | <u>7.6</u> | <u>6.8</u> | <u>52</u> |
| 3. | <u>6.3</u> | <u>6</u> | <u>38</u> |
| 4. | <u>13.5</u> | <u>13.5</u> | <u>182</u> |
| 5. | <u>31.5</u> | <u>15.3</u> | <u>482</u> |
| 6. | <u>21.7</u> | <u>25.2</u> | <u>547</u> |
| 7. | <u>9.8</u> | <u>9.4</u> | <u>92</u> |
| 8. | <u>16</u> | <u>18.5</u> | <u>296</u> |



Determine the actual width, height and area of each scale rectangle.

Round the area to the nearest whole number.



Answers

1. _____

2. _____

3. _____

4. _____

5. _____

6. _____

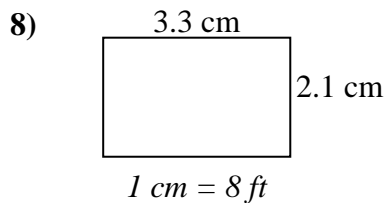
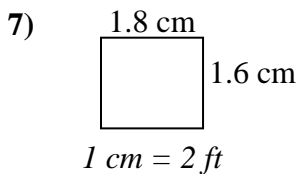
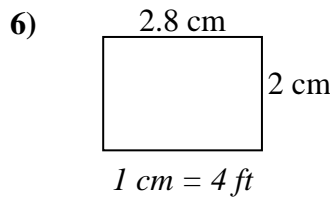
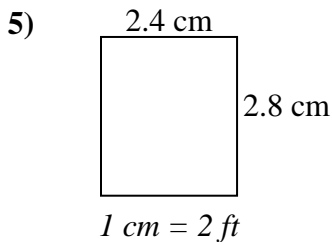
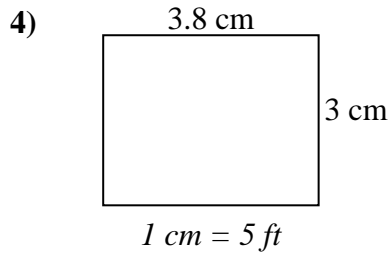
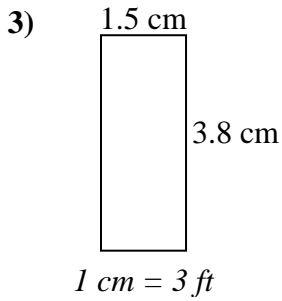
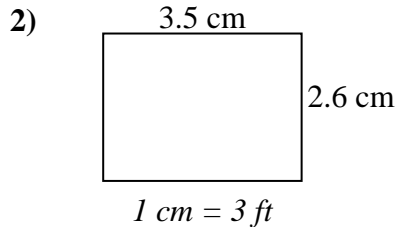
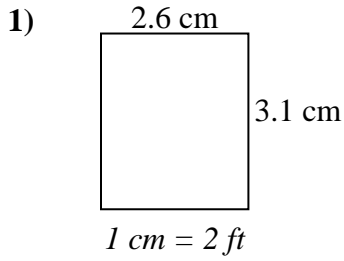
7. _____

8. _____



Determine the actual width, height and area of each scale rectangle.

Round the area to the nearest whole number.



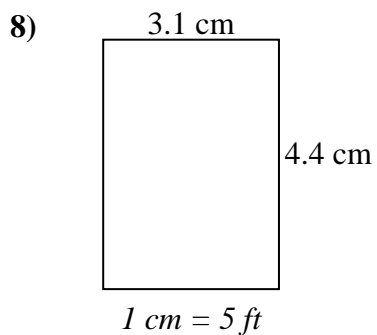
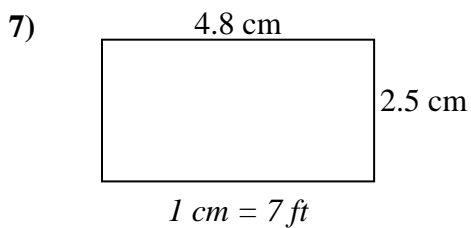
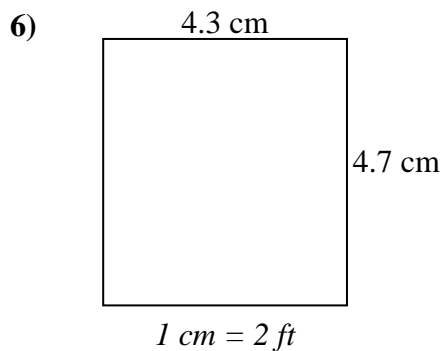
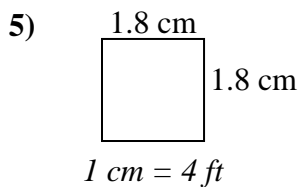
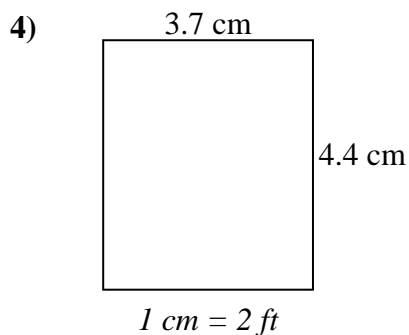
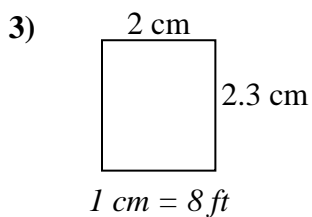
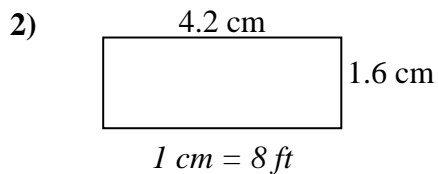
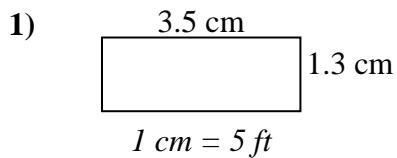
Answers

| | | | |
|----|-------------|-------------|------------|
| 1. | <u>5.2</u> | <u>6.2</u> | <u>32</u> |
| 2. | <u>10.5</u> | <u>7.8</u> | <u>82</u> |
| 3. | <u>4.5</u> | <u>11.4</u> | <u>51</u> |
| 4. | <u>19</u> | <u>15</u> | <u>285</u> |
| 5. | <u>4.8</u> | <u>5.6</u> | <u>27</u> |
| 6. | <u>11.2</u> | <u>8</u> | <u>90</u> |
| 7. | <u>3.6</u> | <u>3.2</u> | <u>12</u> |
| 8. | <u>26.4</u> | <u>16.8</u> | <u>444</u> |



Determine the actual width, height and area of each scale rectangle.

Round the area to the nearest whole number.

**Answers**

1. _____

2. _____

3. _____

4. _____

5. _____

6. _____

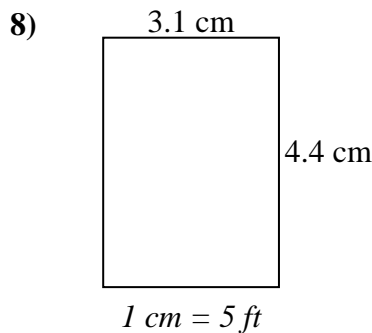
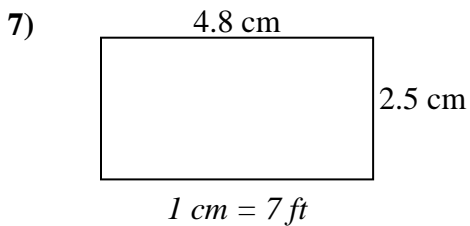
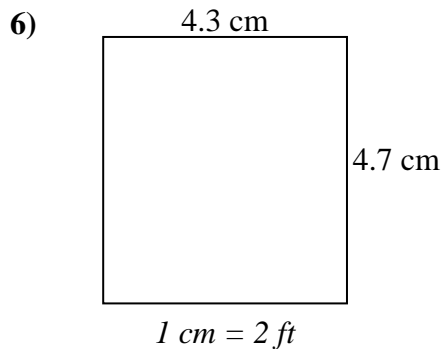
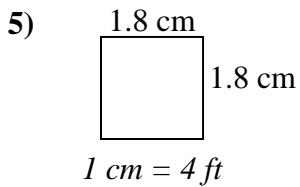
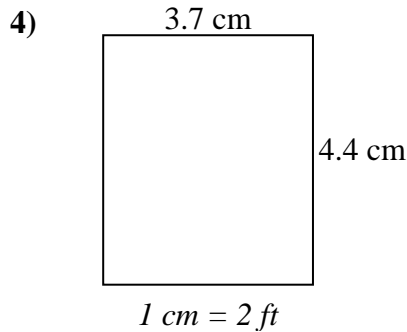
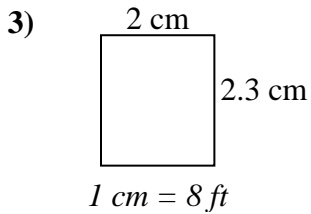
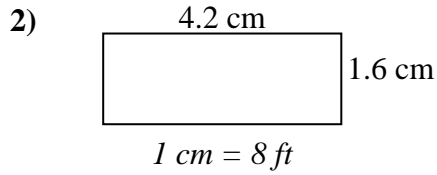
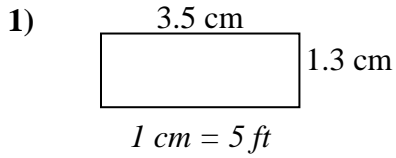
7. _____

8. _____



Determine the actual width, height and area of each scale rectangle.

Round the area to the nearest whole number.



Answers

1. 17.5 6.5 114
2. 33.6 12.8 430
3. 16 18.4 294
4. 7.4 8.8 65
5. 7.2 7.2 52
6. 8.6 9.4 81
7. 33.6 17.5 588
8. 15.5 22 341