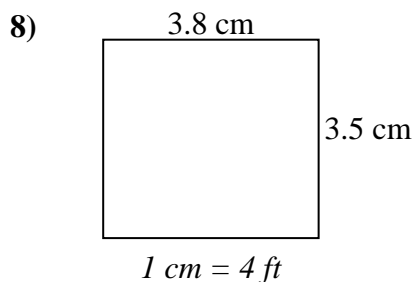
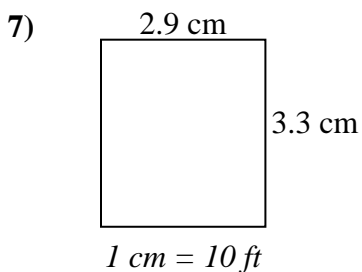
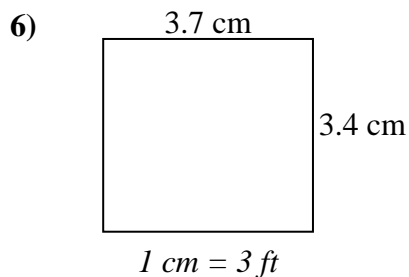
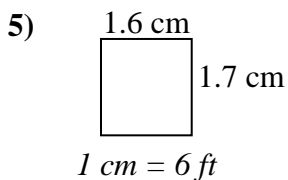
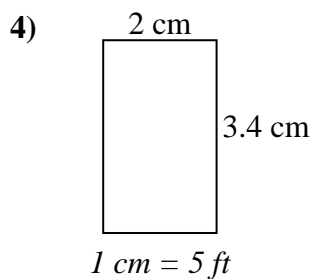
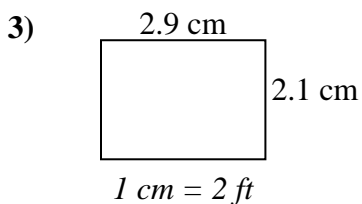
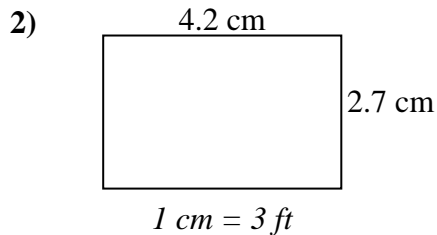
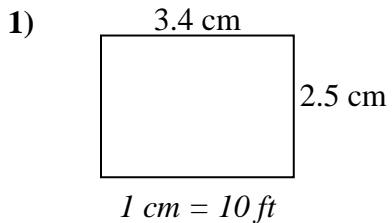




Determine the actual width, height and area of each scale rectangle.

Round the area to the nearest whole number.



Answers

1. _____

2. _____

3. _____

4. _____

5. _____

6. _____

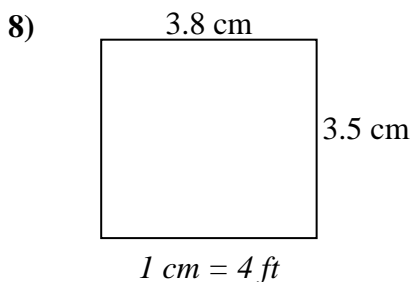
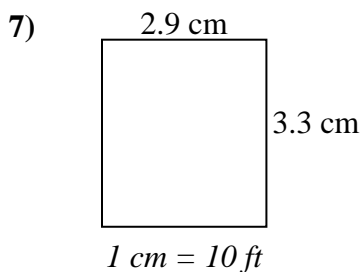
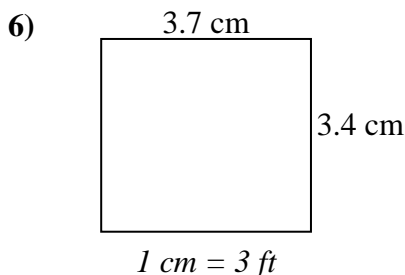
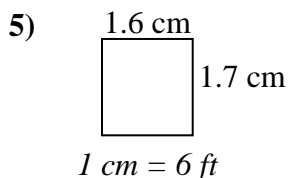
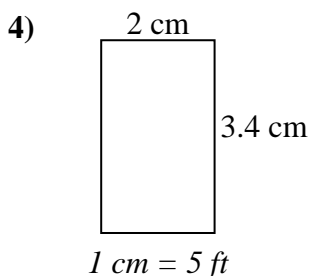
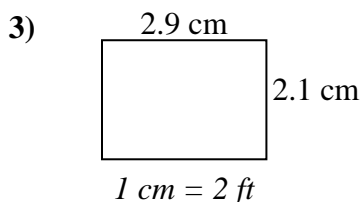
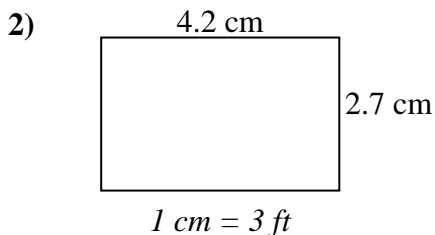
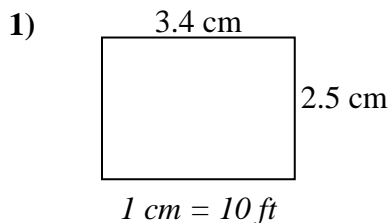
7. _____

8. _____



Determine the actual width, height and area of each scale rectangle.

Round the area to the nearest whole number.



Answers

1.	<u>34</u>	<u>25</u>	<u>850</u>
2.	<u>12.6</u>	<u>8.1</u>	<u>102</u>
3.	<u>5.8</u>	<u>4.2</u>	<u>24</u>
4.	<u>10</u>	<u>17</u>	<u>170</u>
5.	<u>9.6</u>	<u>10.2</u>	<u>98</u>
6.	<u>11.1</u>	<u>10.2</u>	<u>113</u>
7.	<u>29</u>	<u>33</u>	<u>957</u>
8.	<u>15.2</u>	<u>14</u>	<u>213</u>