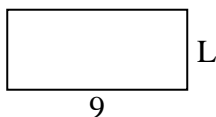


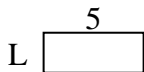


Determine the value of 'L'.

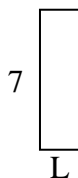
1) Area = $36u^2$



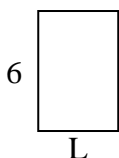
2) Area = $10u^2$



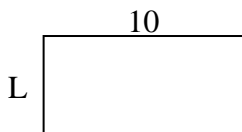
3) Area = $14u^2$



4) Area = $24u^2$



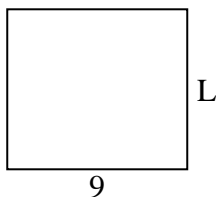
5) Area = $50u^2$



6) Area = $6u^2$




7) Area = $72u^2$



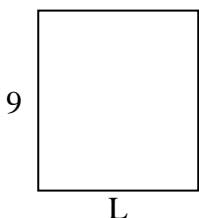
8) Area = $27u^2$



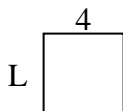
9) Area = $70u^2$



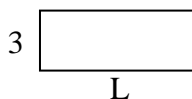
10) Area = $72u^2$



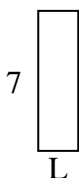
11) Area = $16u^2$



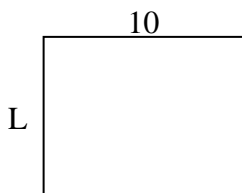
12) Area = $24u^2$




13) Area = $14u^2$



14) Area = $80u^2$



15) Area = $27u^2$



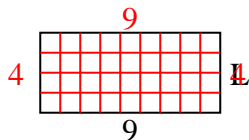
Answers

1. _____
2. _____
3. _____
4. _____
5. _____
6. _____
7. _____
8. _____
9. _____
10. _____
11. _____
12. _____
13. _____
14. _____
15. _____

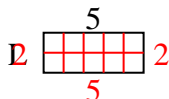


Determine the value of 'L'.

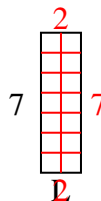
1) Area = $36u^2$



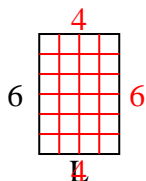
2) Area = $10u^2$



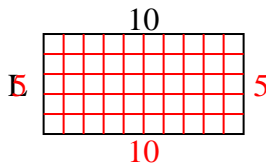
3) Area = $14u^2$



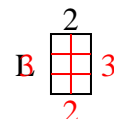
4) Area = $24u^2$



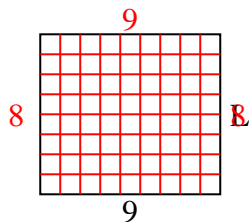
5) Area = $50u^2$



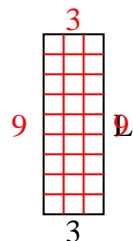
6) Area = $6u^2$



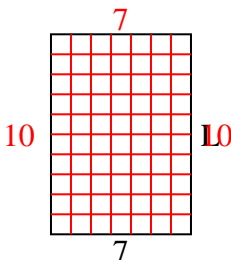
7) Area = $72u^2$



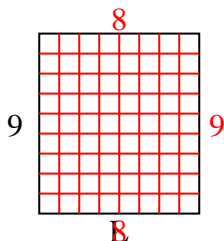
8) Area = $27u^2$



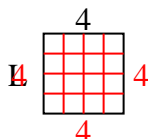
9) Area = $70u^2$



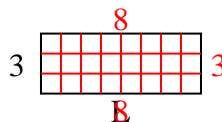
10) Area = $72u^2$



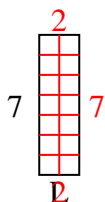
11) Area = $16u^2$



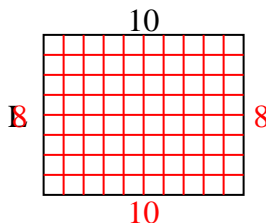
12) Area = $24u^2$



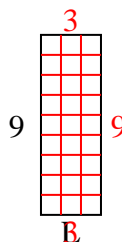
13) Area = $14u^2$



14) Area = $80u^2$



15) Area = $27u^2$



Answers

1. 4

2. 2

3. 2

4. 4

5. 5

6. 3

7. 8

8. 9

9. 10

10. 8

11. 4

12. 8

13. 2

14. 8

15. 3