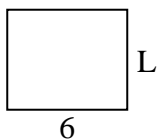


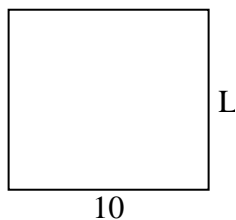


Determine the value of 'L'.

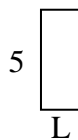
1) Area = $30u^2$



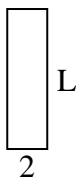
2) Area = $90u^2$



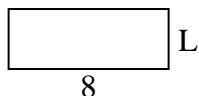
3) Area = $10u^2$



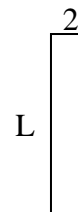
4) Area = $14u^2$



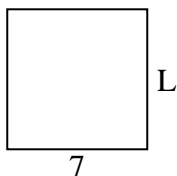
5) Area = $24u^2$



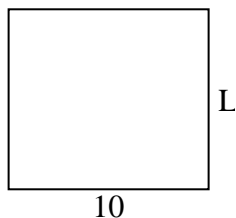
6) Area = $18u^2$



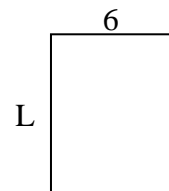
7) Area = $49u^2$



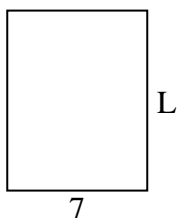
8) Area = $90u^2$



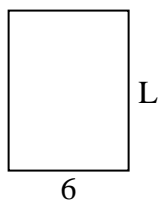
9) Area = $48u^2$



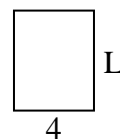
10) Area = $63u^2$



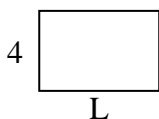
11) Area = $48u^2$



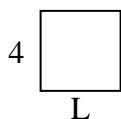
12) Area = $20u^2$



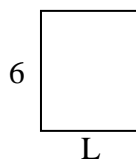
13) Area = $24u^2$



14) Area = $16u^2$



15) Area = $30u^2$



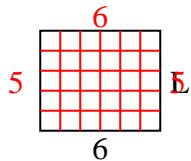
Answers

1. _____
2. _____
3. _____
4. _____
5. _____
6. _____
7. _____
8. _____
9. _____
10. _____
11. _____
12. _____
13. _____
14. _____
15. _____

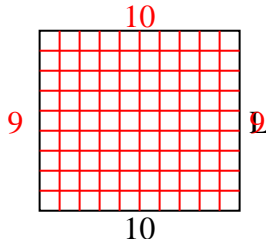


Determine the value of 'L'.

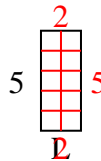
1) Area = $30u^2$



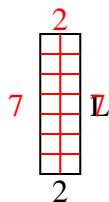
2) Area = $90u^2$



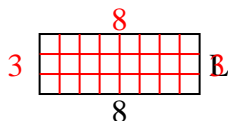
3) Area = $10u^2$



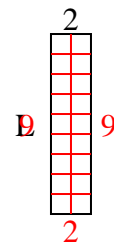
4) Area = $14u^2$



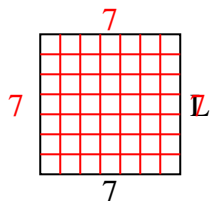
5) Area = $24u^2$



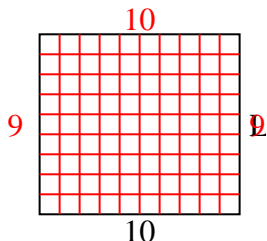
6) Area = $18u^2$



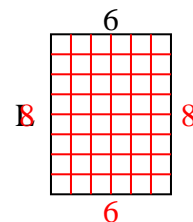
7) Area = $49u^2$



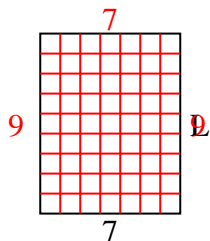
8) Area = $90u^2$



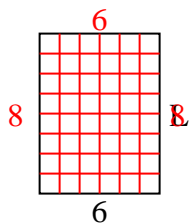
9) Area = $48u^2$



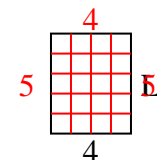
10) Area = $63u^2$



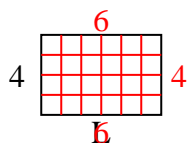
11) Area = $48u^2$



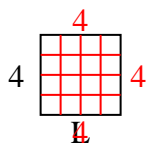
12) Area = $20u^2$



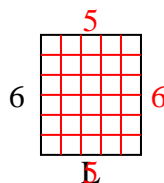
13) Area = $24u^2$



14) Area = $16u^2$



15) Area = $30u^2$



Answers

1. 5

2. 9

3. 2

4. 7

5. 3

6. 9

7. 7

8. 9

9. 8

10. 9

11. 8

12. 5

13. 6

14. 4

15. 5