

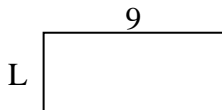


Determine the value of 'L'.

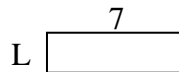
1) Area =  $8u^2$



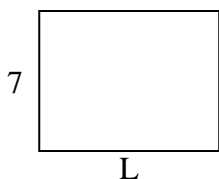
2) Area =  $36u^2$



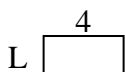
3) Area =  $14u^2$



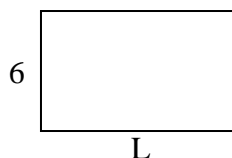
4) Area =  $63u^2$



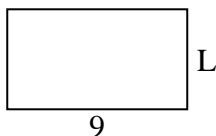
5) Area =  $8u^2$




6) Area =  $60u^2$



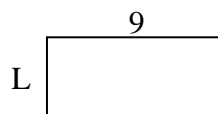
7) Area =  $45u^2$



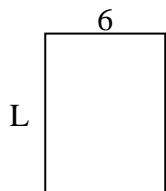
8) Area =  $20u^2$



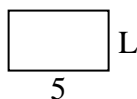
9) Area =  $36u^2$



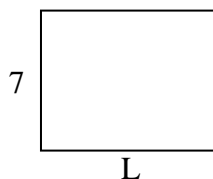
10) Area =  $48u^2$



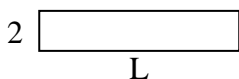
11) Area =  $15u^2$



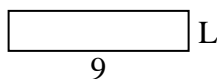
12) Area =  $63u^2$



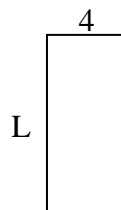
13) Area =  $20u^2$



14) Area =  $18u^2$



15) Area =  $36u^2$



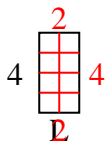
Answers

1. \_\_\_\_\_
2. \_\_\_\_\_
3. \_\_\_\_\_
4. \_\_\_\_\_
5. \_\_\_\_\_
6. \_\_\_\_\_
7. \_\_\_\_\_
8. \_\_\_\_\_
9. \_\_\_\_\_
10. \_\_\_\_\_
11. \_\_\_\_\_
12. \_\_\_\_\_
13. \_\_\_\_\_
14. \_\_\_\_\_
15. \_\_\_\_\_

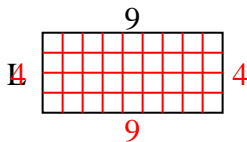


Determine the value of 'L'.

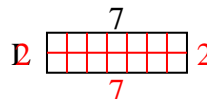
1) Area =  $8u^2$



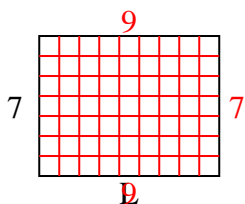
2) Area =  $36u^2$



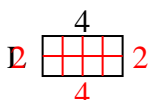
3) Area =  $14u^2$



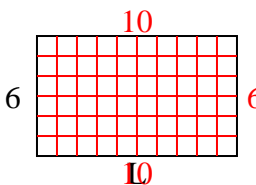
4) Area =  $63u^2$



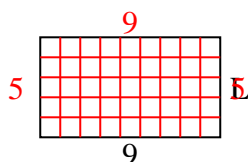
5) Area =  $8u^2$



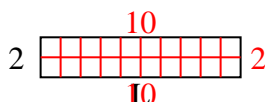
6) Area =  $60u^2$



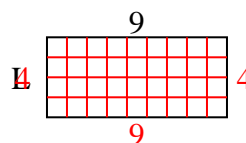
7) Area =  $45u^2$



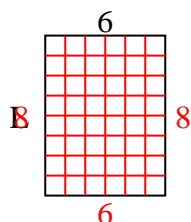
8) Area =  $20u^2$



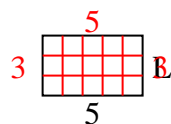
9) Area =  $36u^2$



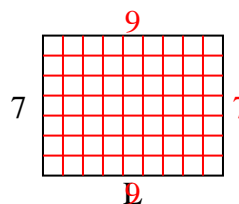
10) Area =  $48u^2$



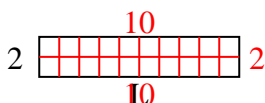
11) Area =  $15u^2$



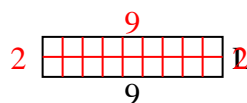
12) Area =  $63u^2$



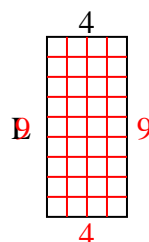
13) Area =  $20u^2$



14) Area =  $18u^2$



15) Area =  $36u^2$



Answers

1. 2

2. 4

3. 2

4. 9

5. 2

6. 10

7. 5

8. 10

9. 4

10. 8

11. 3

12. 9

13. 10

14. 2

15. 9