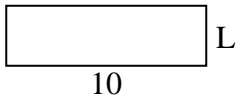




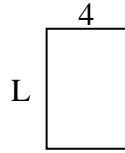
Determine the value of 'L'. Lengths are in cm (not to scale).

**Answers**

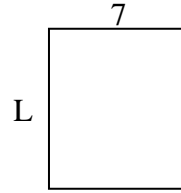
1) perimeter = 26



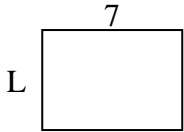
2) perimeter = 20



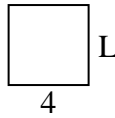
3) perimeter = 30



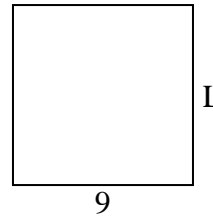
4) perimeter = 24



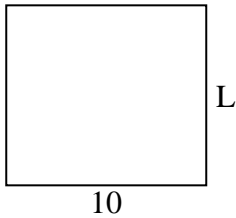
5) perimeter = 16



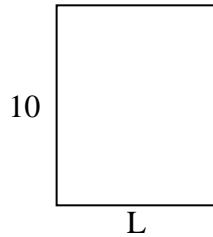
6) perimeter = 36



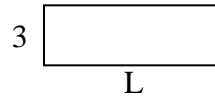
7) perimeter = 38




8) perimeter = 36



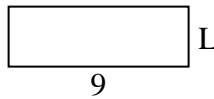
9) perimeter = 24



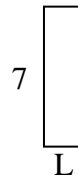
10) perimeter = 24



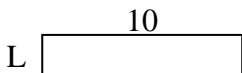
11) perimeter = 24



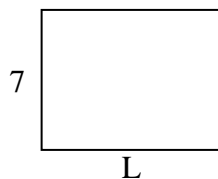
12) perimeter = 18



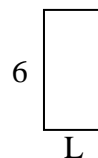
13) perimeter = 24



14) perimeter = 32



15) perimeter = 18




1. \_\_\_\_\_
2. \_\_\_\_\_
3. \_\_\_\_\_
4. \_\_\_\_\_
5. \_\_\_\_\_
6. \_\_\_\_\_
7. \_\_\_\_\_
8. \_\_\_\_\_
9. \_\_\_\_\_
10. \_\_\_\_\_
11. \_\_\_\_\_
12. \_\_\_\_\_
13. \_\_\_\_\_
14. \_\_\_\_\_
15. \_\_\_\_\_

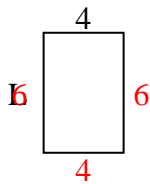


Determine the value of 'L'. Lengths are in cm (not to scale).

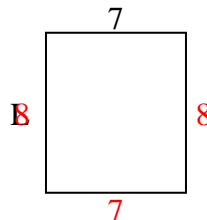
1) perimeter = 26



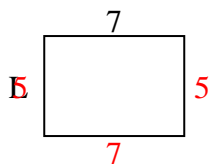
2) perimeter = 20



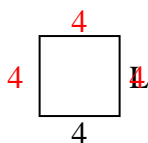
3) perimeter = 30



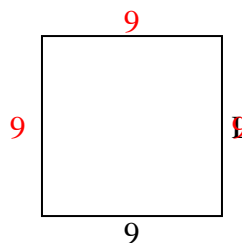
4) perimeter = 24



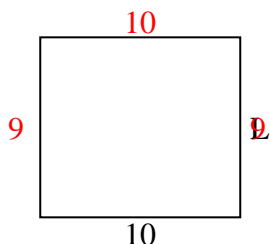
5) perimeter = 16



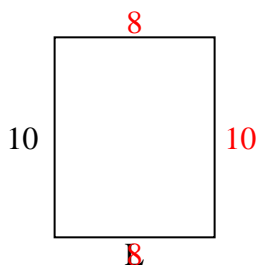
6) perimeter = 36



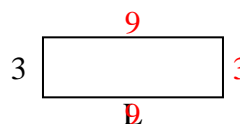
7) perimeter = 38



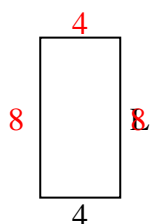
8) perimeter = 36



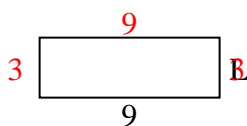
9) perimeter = 24



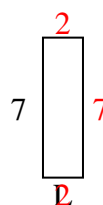
10) perimeter = 24



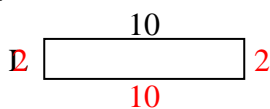
11) perimeter = 24



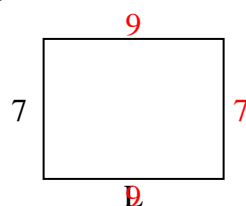
12) perimeter = 18



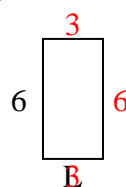
13) perimeter = 24



14) perimeter = 32



15) perimeter = 18



Answers

1. 3 cm

2. 6 cm

3. 8 cm

4. 5 cm

5. 4 cm

6. 9 cm

7. 9 cm

8. 8 cm

9. 9 cm

10. 8 cm

11. 3 cm

12. 2 cm

13. 2 cm

14. 9 cm

15. 3 cm