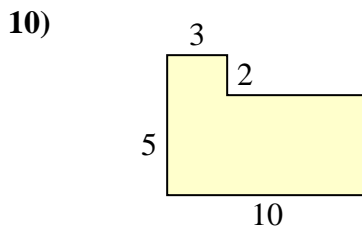
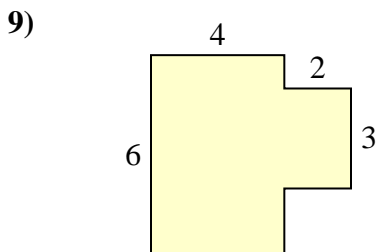
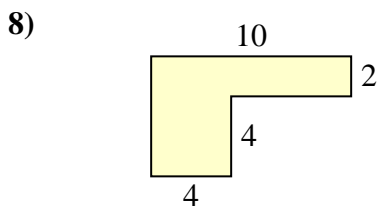
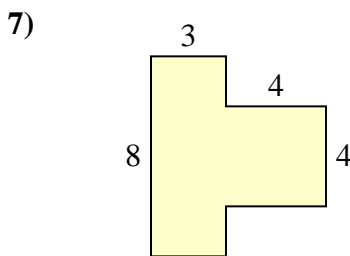
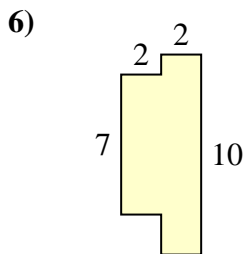
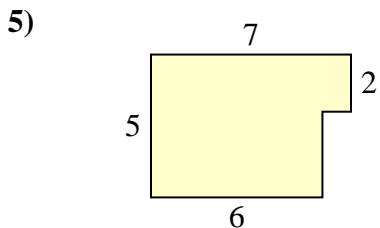
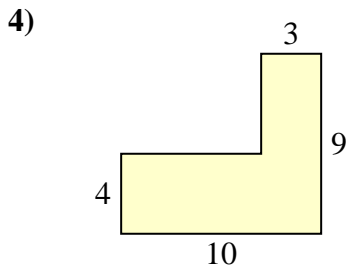
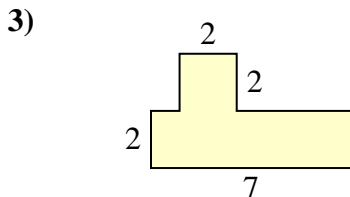
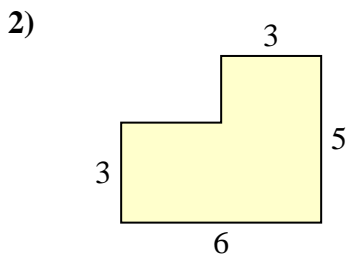
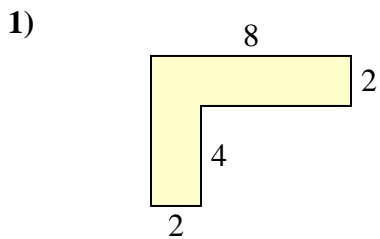




Find the total area of each shape. Measurement is in millimeters (mm). Not to scale.

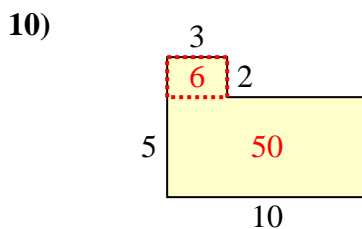
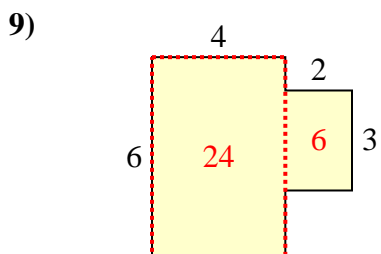
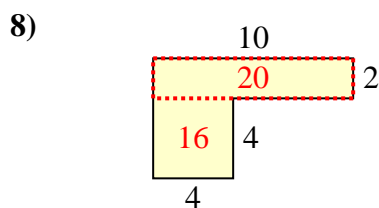
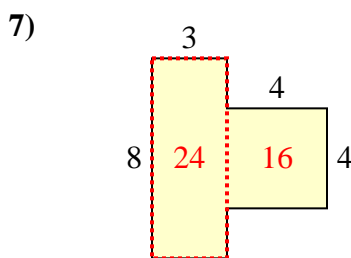
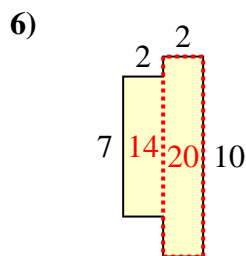
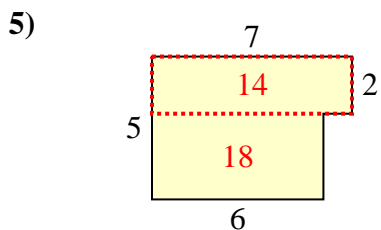
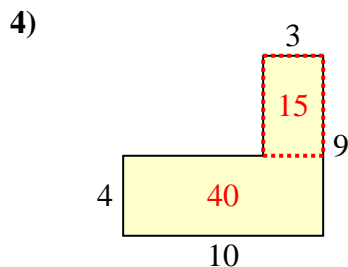
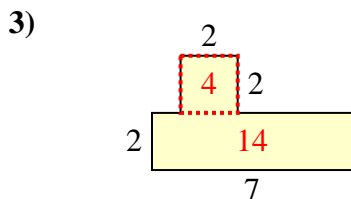
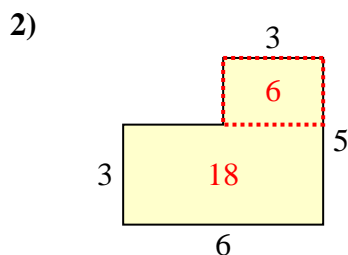
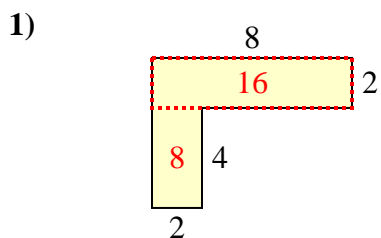
Answers



1. \_\_\_\_\_
2. \_\_\_\_\_
3. \_\_\_\_\_
4. \_\_\_\_\_
5. \_\_\_\_\_
6. \_\_\_\_\_
7. \_\_\_\_\_
8. \_\_\_\_\_
9. \_\_\_\_\_
10. \_\_\_\_\_



Find the total area of each shape. Measurement is in millimeters (mm). Not to scale.



Answers

1. 24 mm<sup>2</sup>
2. 24 mm<sup>2</sup>
3. 18 mm<sup>2</sup>
4. 55 mm<sup>2</sup>
5. 32 mm<sup>2</sup>
6. 34 mm<sup>2</sup>
7. 40 mm<sup>2</sup>
8. 36 mm<sup>2</sup>
9. 30 mm<sup>2</sup>
10. 56 mm<sup>2</sup>