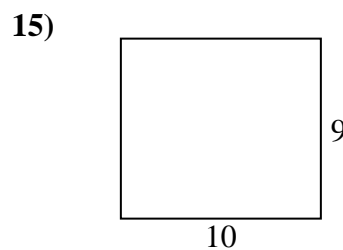
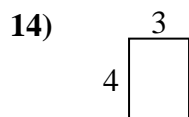
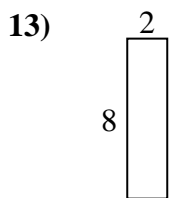
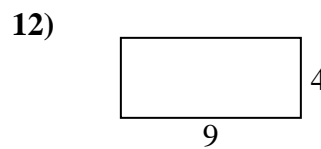
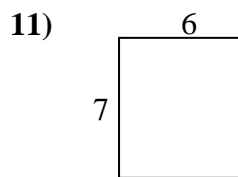
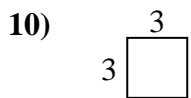
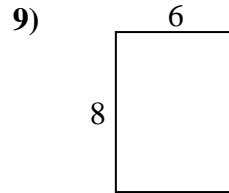
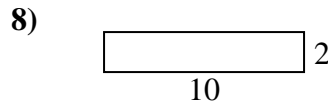
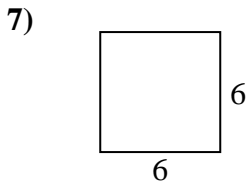
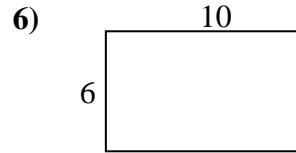
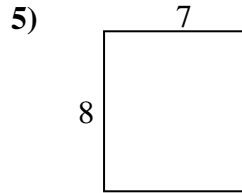
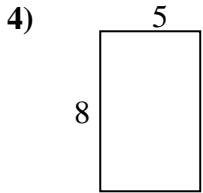
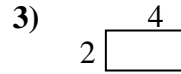
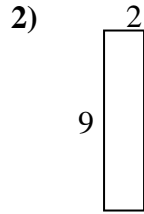
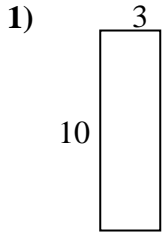




Find the perimeter and area of each figure. Each figure is in centimeters (cm). Not to scale.

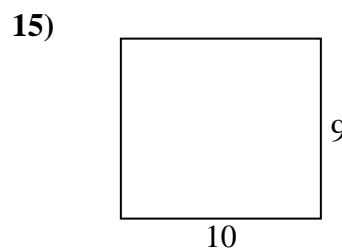
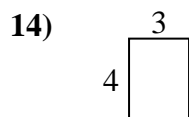
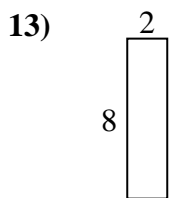
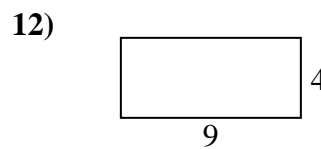
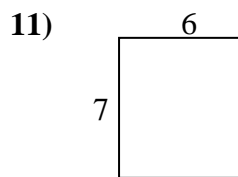
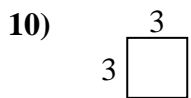
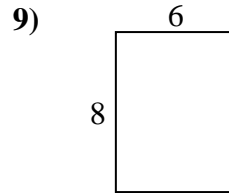
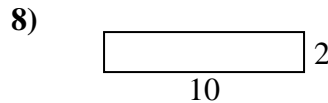
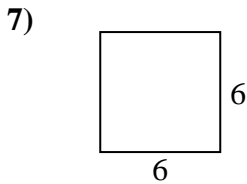
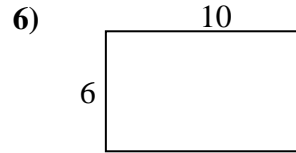
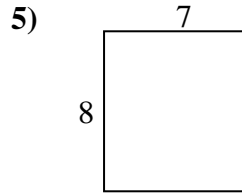
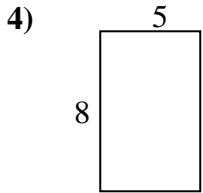
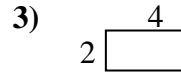
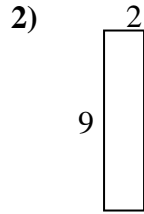
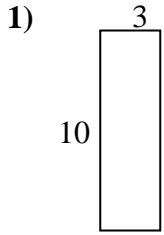


Answers

1. \_\_\_\_\_
2. \_\_\_\_\_
3. \_\_\_\_\_
4. \_\_\_\_\_
5. \_\_\_\_\_
6. \_\_\_\_\_
7. \_\_\_\_\_
8. \_\_\_\_\_
9. \_\_\_\_\_
10. \_\_\_\_\_
11. \_\_\_\_\_
12. \_\_\_\_\_
13. \_\_\_\_\_
14. \_\_\_\_\_
15. \_\_\_\_\_



Find the perimeter and area of each figure. Each figure is in centimeters (cm). Not to scale.

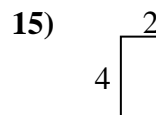
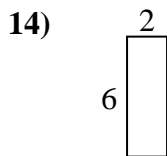
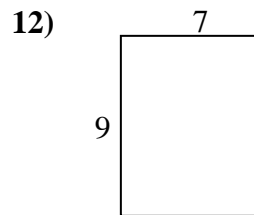
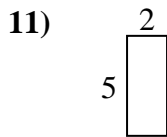
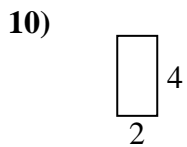
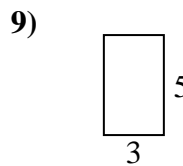

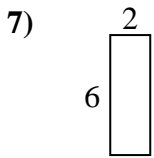
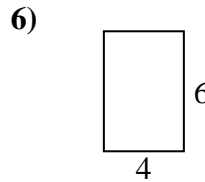
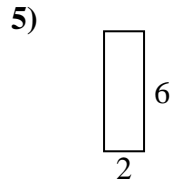
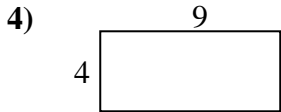
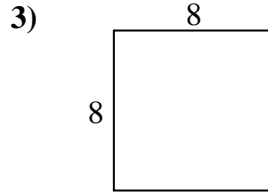
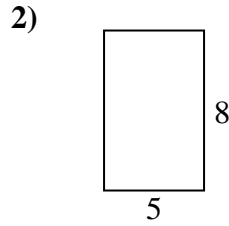
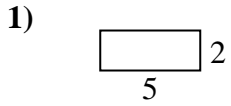


Answers

|     |           |           |
|-----|-----------|-----------|
| 1.  | <u>26</u> | <u>30</u> |
| 2.  | <u>22</u> | <u>18</u> |
| 3.  | <u>12</u> | <u>8</u>  |
| 4.  | <u>26</u> | <u>40</u> |
| 5.  | <u>30</u> | <u>56</u> |
| 6.  | <u>32</u> | <u>60</u> |
| 7.  | <u>24</u> | <u>36</u> |
| 8.  | <u>24</u> | <u>20</u> |
| 9.  | <u>28</u> | <u>48</u> |
| 10. | <u>12</u> | <u>9</u>  |
| 11. | <u>26</u> | <u>42</u> |
| 12. | <u>26</u> | <u>36</u> |
| 13. | <u>20</u> | <u>16</u> |
| 14. | <u>14</u> | <u>12</u> |
| 15. | <u>38</u> | <u>90</u> |



Find the perimeter and area of each figure. Each figure is in centimeters (cm). Not to scale.

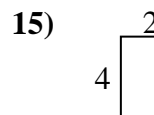
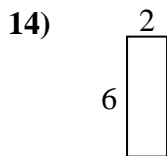
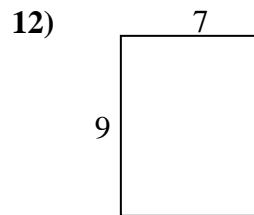
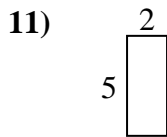
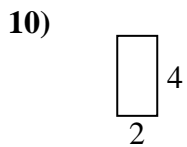
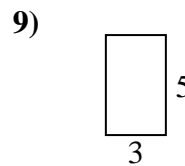

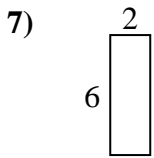
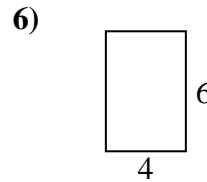
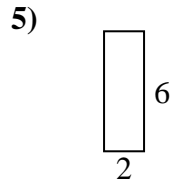
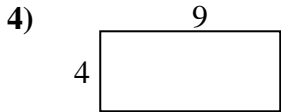
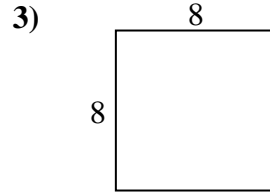
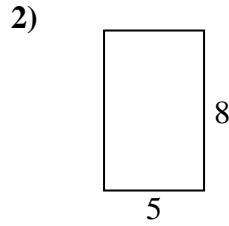
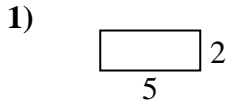


Answers

1. \_\_\_\_\_
2. \_\_\_\_\_
3. \_\_\_\_\_
4. \_\_\_\_\_
5. \_\_\_\_\_
6. \_\_\_\_\_
7. \_\_\_\_\_
8. \_\_\_\_\_
9. \_\_\_\_\_
10. \_\_\_\_\_
11. \_\_\_\_\_
12. \_\_\_\_\_
13. \_\_\_\_\_
14. \_\_\_\_\_
15. \_\_\_\_\_



Find the perimeter and area of each figure. Each figure is in centimeters (cm). Not to scale.

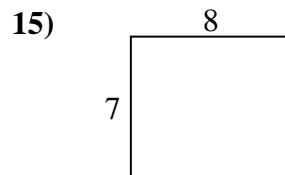
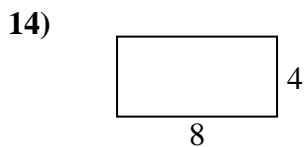
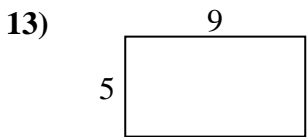
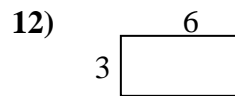
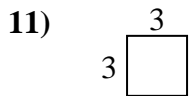
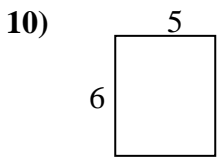
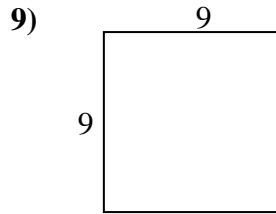
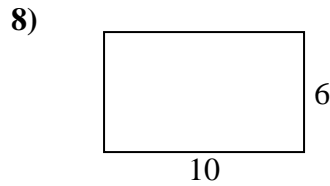
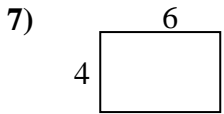
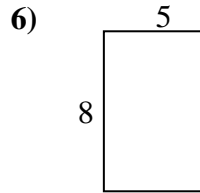
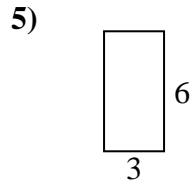
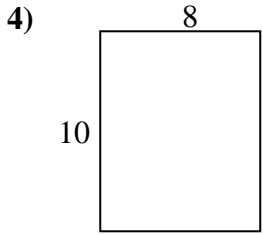
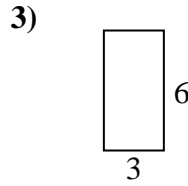
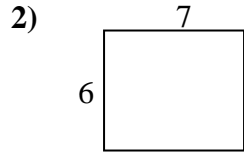
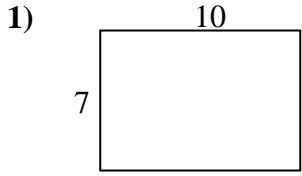


Answers

|     |           |           |
|-----|-----------|-----------|
| 1.  | <u>14</u> | <u>10</u> |
| 2.  | <u>26</u> | <u>40</u> |
| 3.  | <u>32</u> | <u>64</u> |
| 4.  | <u>26</u> | <u>36</u> |
| 5.  | <u>16</u> | <u>12</u> |
| 6.  | <u>20</u> | <u>24</u> |
| 7.  | <u>16</u> | <u>12</u> |
| 8.  | <u>24</u> | <u>20</u> |
| 9.  | <u>16</u> | <u>15</u> |
| 10. | <u>12</u> | <u>8</u>  |
| 11. | <u>14</u> | <u>10</u> |
| 12. | <u>32</u> | <u>63</u> |
| 13. | <u>22</u> | <u>28</u> |
| 14. | <u>16</u> | <u>12</u> |
| 15. | <u>12</u> | <u>8</u>  |



Find the perimeter and area of each figure. Each figure is in centimeters (cm). Not to scale.

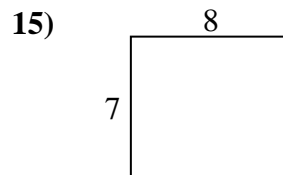
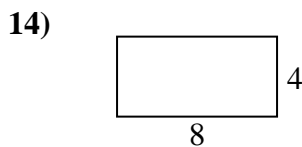
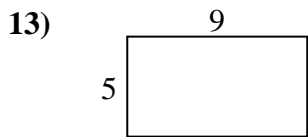
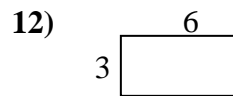
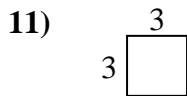
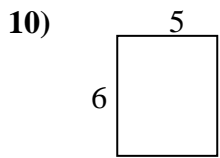
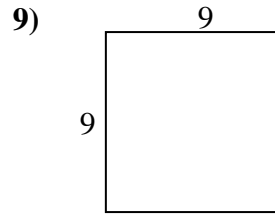
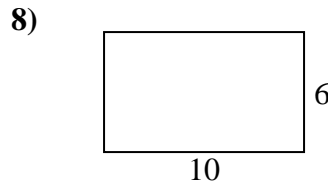
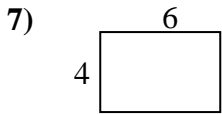
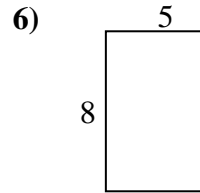
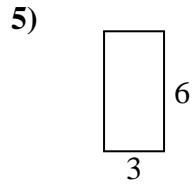
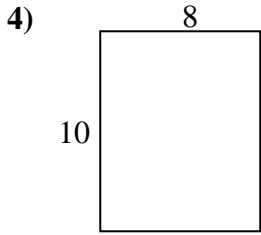
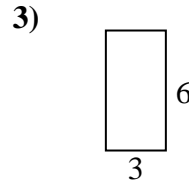
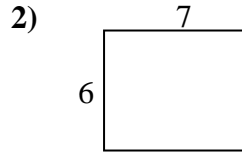
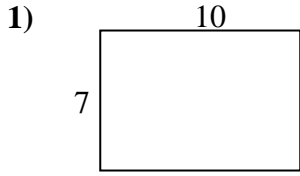


Answers

1. \_\_\_\_\_
2. \_\_\_\_\_
3. \_\_\_\_\_
4. \_\_\_\_\_
5. \_\_\_\_\_
6. \_\_\_\_\_
7. \_\_\_\_\_
8. \_\_\_\_\_
9. \_\_\_\_\_
10. \_\_\_\_\_
11. \_\_\_\_\_
12. \_\_\_\_\_
13. \_\_\_\_\_
14. \_\_\_\_\_
15. \_\_\_\_\_



Find the perimeter and area of each figure. Each figure is in centimeters (cm). Not to scale.

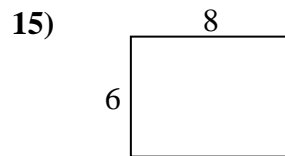
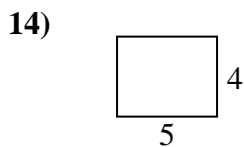
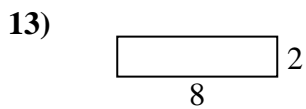
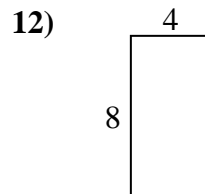
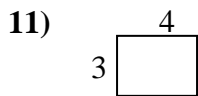
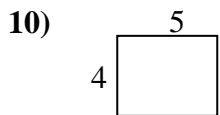
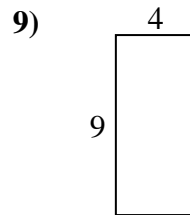
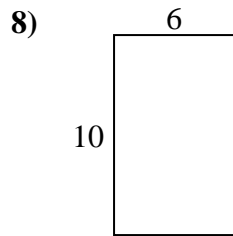
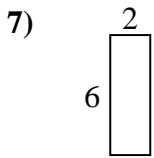
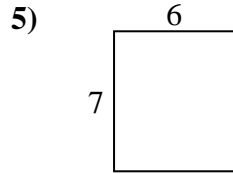
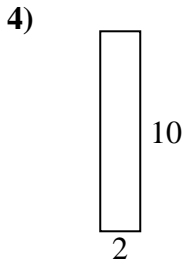
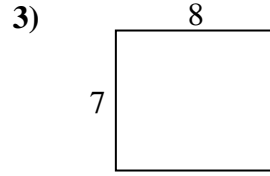
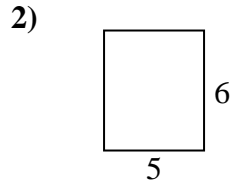
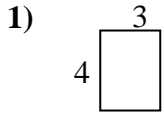


Answers

|     |           |           |
|-----|-----------|-----------|
| 1.  | <u>34</u> | <u>70</u> |
| 2.  | <u>26</u> | <u>42</u> |
| 3.  | <u>18</u> | <u>18</u> |
| 4.  | <u>36</u> | <u>80</u> |
| 5.  | <u>18</u> | <u>18</u> |
| 6.  | <u>26</u> | <u>40</u> |
| 7.  | <u>20</u> | <u>24</u> |
| 8.  | <u>32</u> | <u>60</u> |
| 9.  | <u>36</u> | <u>81</u> |
| 10. | <u>22</u> | <u>30</u> |
| 11. | <u>12</u> | <u>9</u>  |
| 12. | <u>18</u> | <u>18</u> |
| 13. | <u>28</u> | <u>45</u> |
| 14. | <u>24</u> | <u>32</u> |
| 15. | <u>30</u> | <u>56</u> |



Find the perimeter and area of each figure. Each figure is in centimeters (cm). Not to scale.

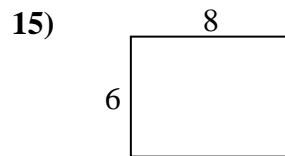
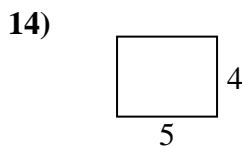
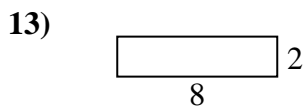
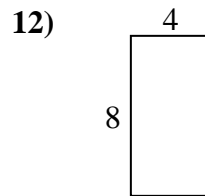
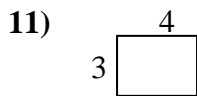
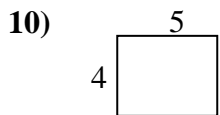
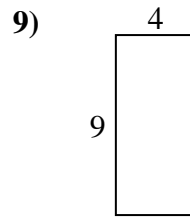
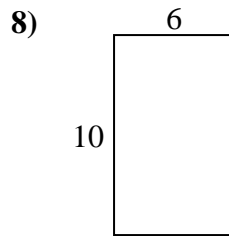
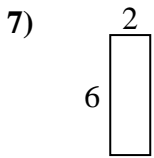
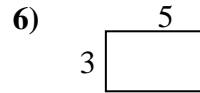
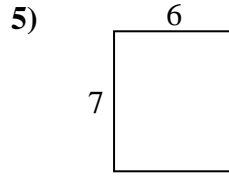
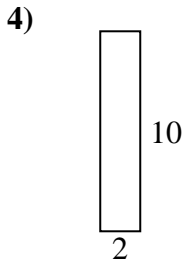
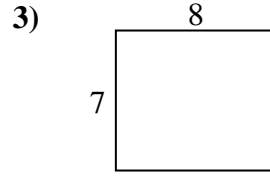
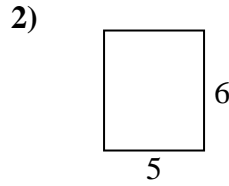
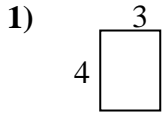


Answers

1. \_\_\_\_\_
2. \_\_\_\_\_
3. \_\_\_\_\_
4. \_\_\_\_\_
5. \_\_\_\_\_
6. \_\_\_\_\_
7. \_\_\_\_\_
8. \_\_\_\_\_
9. \_\_\_\_\_
10. \_\_\_\_\_
11. \_\_\_\_\_
12. \_\_\_\_\_
13. \_\_\_\_\_
14. \_\_\_\_\_
15. \_\_\_\_\_



Find the perimeter and area of each figure. Each figure is in centimeters (cm). Not to scale.



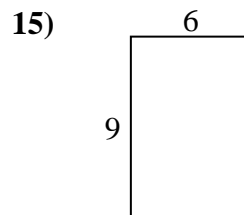
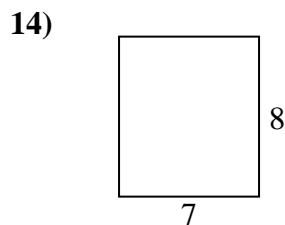
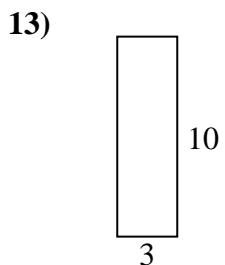
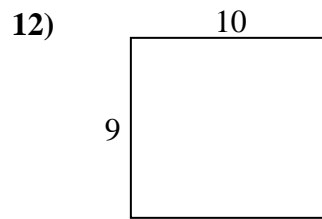
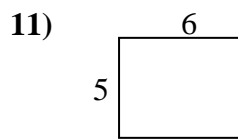
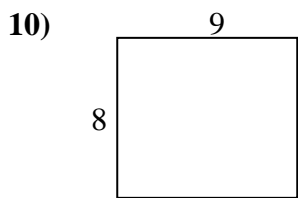
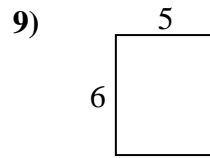
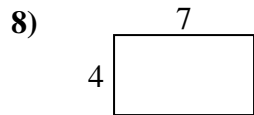
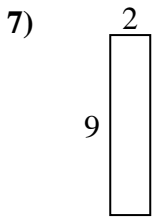
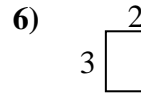
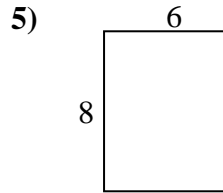
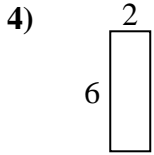
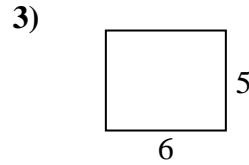
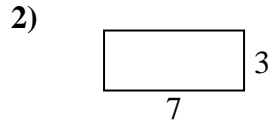
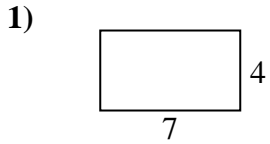
Answers

|     |           |           |
|-----|-----------|-----------|
| 1.  | <u>14</u> | <u>12</u> |
| 2.  | <u>22</u> | <u>30</u> |
| 3.  | <u>30</u> | <u>56</u> |
| 4.  | <u>24</u> | <u>20</u> |
| 5.  | <u>26</u> | <u>42</u> |
| 6.  | <u>16</u> | <u>15</u> |
| 7.  | <u>16</u> | <u>12</u> |
| 8.  | <u>32</u> | <u>60</u> |
| 9.  | <u>26</u> | <u>36</u> |
| 10. | <u>18</u> | <u>20</u> |
| 11. | <u>14</u> | <u>12</u> |
| 12. | <u>24</u> | <u>32</u> |
| 13. | <u>20</u> | <u>16</u> |
| 14. | <u>18</u> | <u>20</u> |
| 15. | <u>28</u> | <u>48</u> |





Find the perimeter and area of each figure. Each figure is in centimeters (cm). Not to scale.

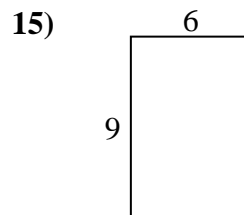
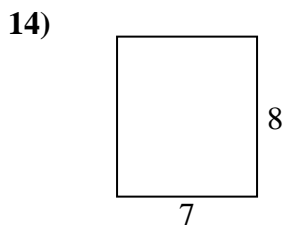
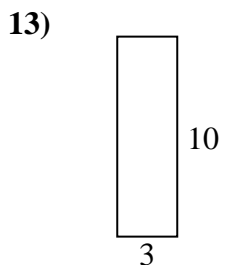
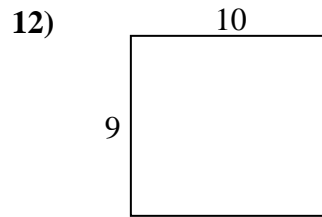
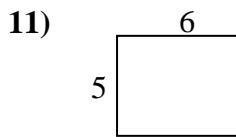
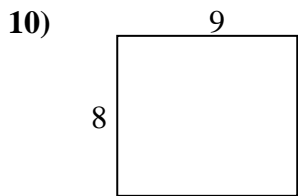
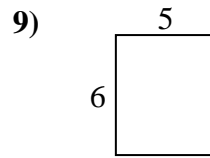
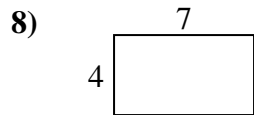
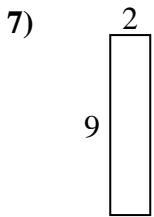
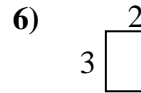
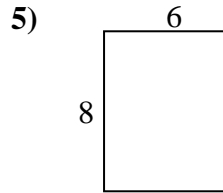
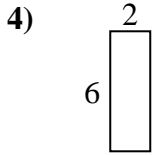
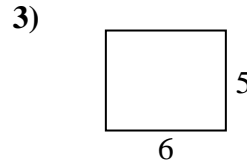
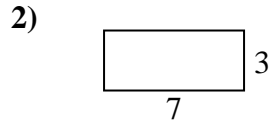
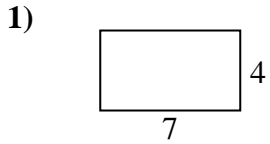


Answers

1. \_\_\_\_\_
2. \_\_\_\_\_
3. \_\_\_\_\_
4. \_\_\_\_\_
5. \_\_\_\_\_
6. \_\_\_\_\_
7. \_\_\_\_\_
8. \_\_\_\_\_
9. \_\_\_\_\_
10. \_\_\_\_\_
11. \_\_\_\_\_
12. \_\_\_\_\_
13. \_\_\_\_\_
14. \_\_\_\_\_
15. \_\_\_\_\_



Find the perimeter and area of each figure. Each figure is in centimeters (cm). Not to scale.

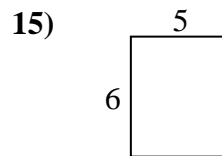
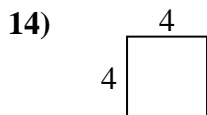
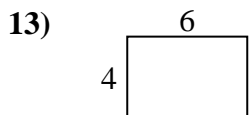
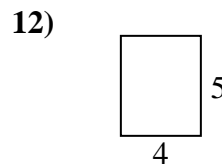
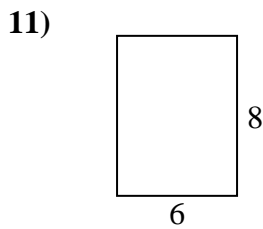
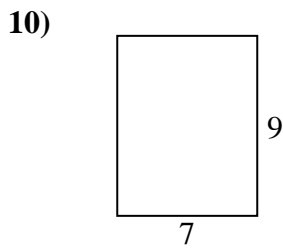
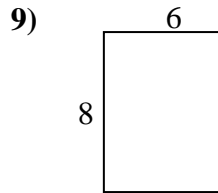
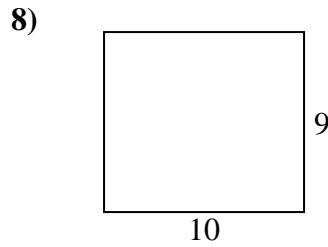
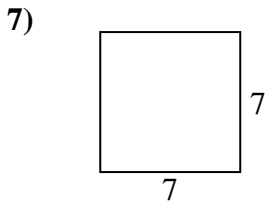
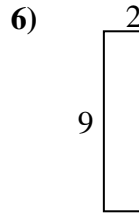
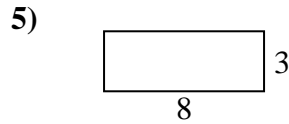
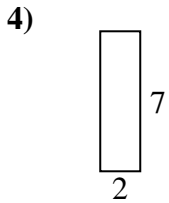
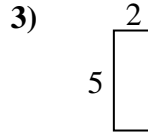
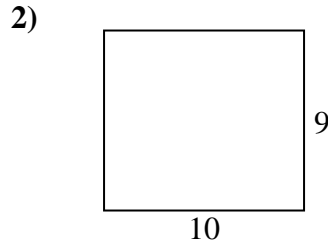
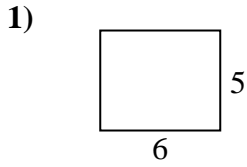


Answers

|     |           |           |
|-----|-----------|-----------|
| 1.  | <u>22</u> | <u>28</u> |
| 2.  | <u>20</u> | <u>21</u> |
| 3.  | <u>22</u> | <u>30</u> |
| 4.  | <u>16</u> | <u>12</u> |
| 5.  | <u>28</u> | <u>48</u> |
| 6.  | <u>10</u> | <u>6</u>  |
| 7.  | <u>22</u> | <u>18</u> |
| 8.  | <u>22</u> | <u>28</u> |
| 9.  | <u>22</u> | <u>30</u> |
| 10. | <u>34</u> | <u>72</u> |
| 11. | <u>22</u> | <u>30</u> |
| 12. | <u>38</u> | <u>90</u> |
| 13. | <u>26</u> | <u>30</u> |
| 14. | <u>30</u> | <u>56</u> |
| 15. | <u>30</u> | <u>54</u> |



Find the perimeter and area of each figure. Each figure is in centimeters (cm). Not to scale.

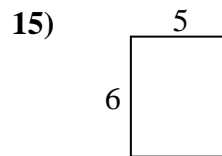
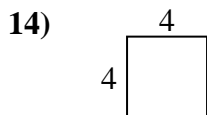
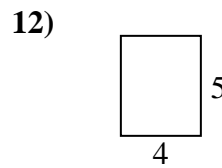
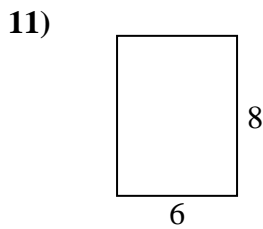
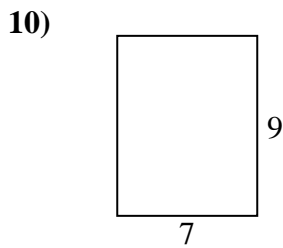
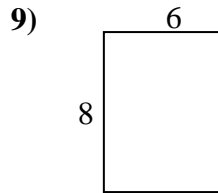
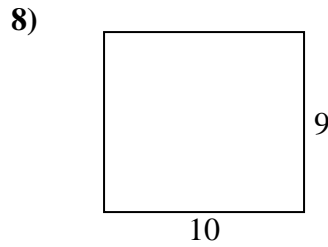
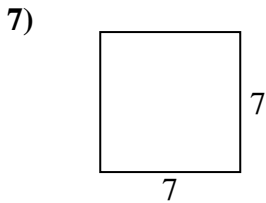
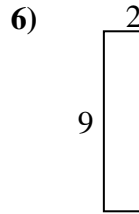
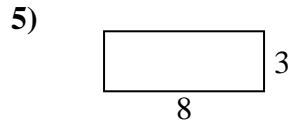
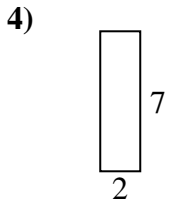
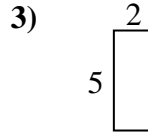
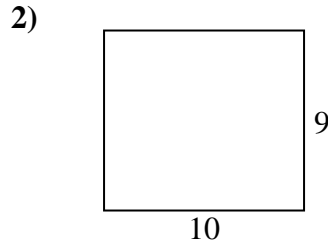
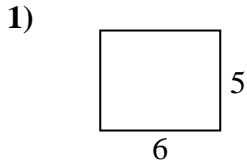


Answers

1. \_\_\_\_\_
2. \_\_\_\_\_
3. \_\_\_\_\_
4. \_\_\_\_\_
5. \_\_\_\_\_
6. \_\_\_\_\_
7. \_\_\_\_\_
8. \_\_\_\_\_
9. \_\_\_\_\_
10. \_\_\_\_\_
11. \_\_\_\_\_
12. \_\_\_\_\_
13. \_\_\_\_\_
14. \_\_\_\_\_
15. \_\_\_\_\_



Find the perimeter and area of each figure. Each figure is in centimeters (cm). Not to scale.

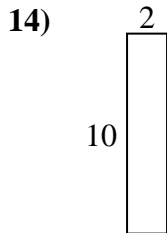
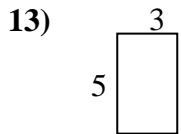
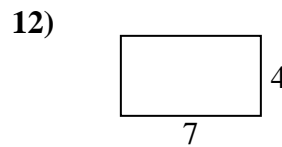
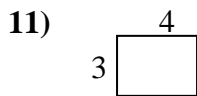
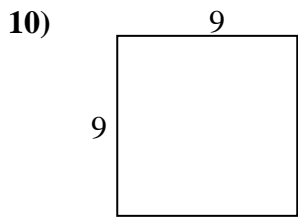
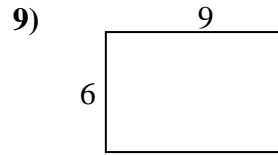
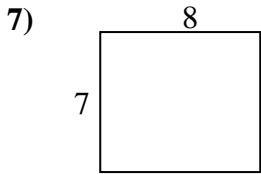
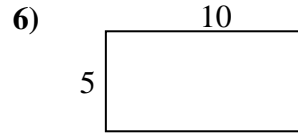
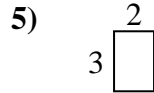
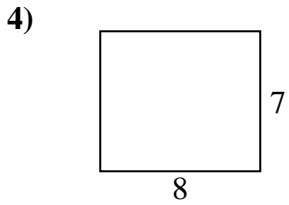
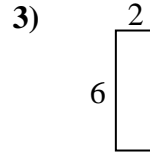
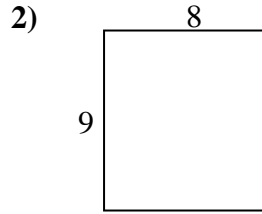
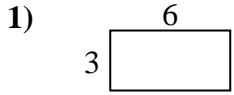


Answers

|     |           |           |
|-----|-----------|-----------|
| 1.  | <u>22</u> | <u>30</u> |
| 2.  | <u>38</u> | <u>90</u> |
| 3.  | <u>14</u> | <u>10</u> |
| 4.  | <u>18</u> | <u>14</u> |
| 5.  | <u>22</u> | <u>24</u> |
| 6.  | <u>22</u> | <u>18</u> |
| 7.  | <u>28</u> | <u>49</u> |
| 8.  | <u>38</u> | <u>90</u> |
| 9.  | <u>28</u> | <u>48</u> |
| 10. | <u>32</u> | <u>63</u> |
| 11. | <u>28</u> | <u>48</u> |
| 12. | <u>18</u> | <u>20</u> |
| 13. | <u>20</u> | <u>24</u> |
| 14. | <u>16</u> | <u>16</u> |
| 15. | <u>22</u> | <u>30</u> |



Find the perimeter and area of each figure. Each figure is in centimeters (cm). Not to scale.

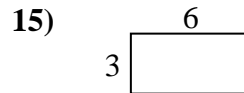
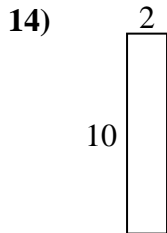
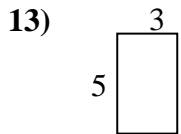
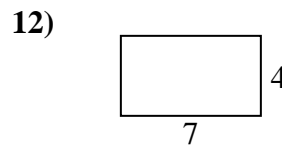
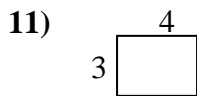
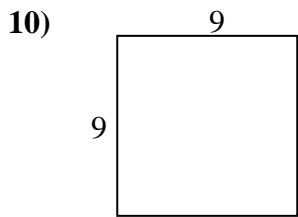
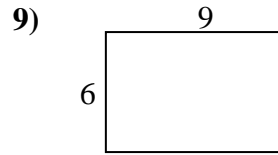
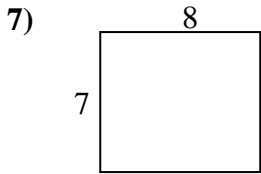
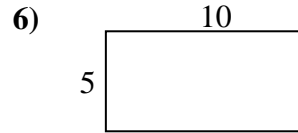
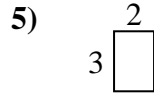
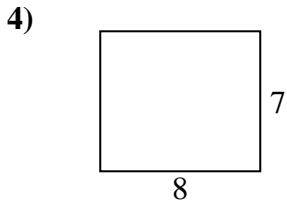
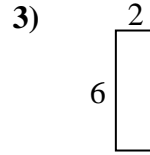
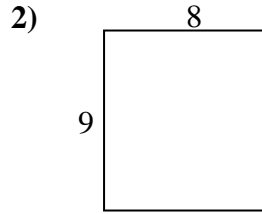
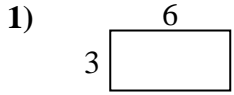


Answers

1. \_\_\_\_\_
2. \_\_\_\_\_
3. \_\_\_\_\_
4. \_\_\_\_\_
5. \_\_\_\_\_
6. \_\_\_\_\_
7. \_\_\_\_\_
8. \_\_\_\_\_
9. \_\_\_\_\_
10. \_\_\_\_\_
11. \_\_\_\_\_
12. \_\_\_\_\_
13. \_\_\_\_\_
14. \_\_\_\_\_
15. \_\_\_\_\_



Find the perimeter and area of each figure. Each figure is in centimeters (cm). Not to scale.

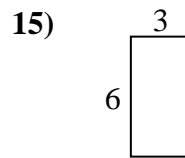
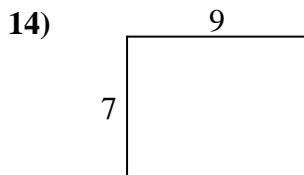

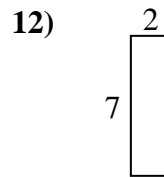
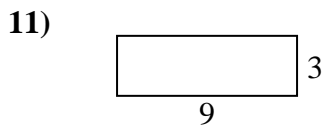
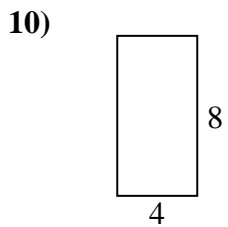
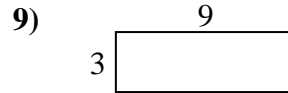
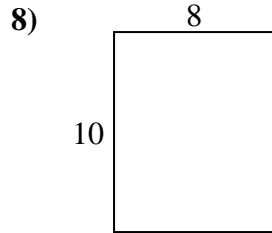
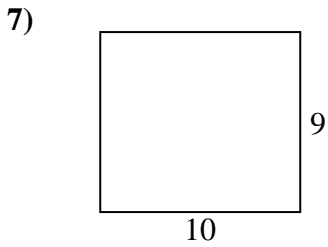
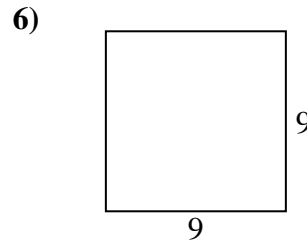
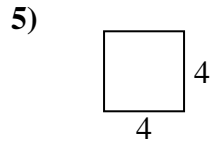
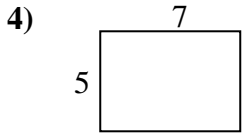
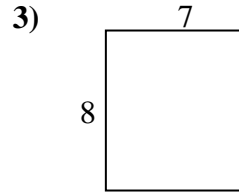
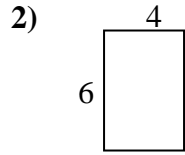
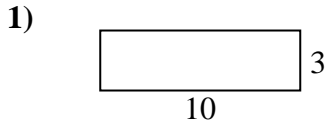


Answers

|     |           |           |
|-----|-----------|-----------|
| 1.  | <u>18</u> | <u>18</u> |
| 2.  | <u>34</u> | <u>72</u> |
| 3.  | <u>16</u> | <u>12</u> |
| 4.  | <u>30</u> | <u>56</u> |
| 5.  | <u>10</u> | <u>6</u>  |
| 6.  | <u>30</u> | <u>50</u> |
| 7.  | <u>30</u> | <u>56</u> |
| 8.  | <u>24</u> | <u>27</u> |
| 9.  | <u>30</u> | <u>54</u> |
| 10. | <u>36</u> | <u>81</u> |
| 11. | <u>14</u> | <u>12</u> |
| 12. | <u>22</u> | <u>28</u> |
| 13. | <u>16</u> | <u>15</u> |
| 14. | <u>24</u> | <u>20</u> |
| 15. | <u>18</u> | <u>18</u> |



Find the perimeter and area of each figure. Each figure is in centimeters (cm). Not to scale.

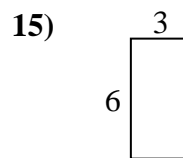
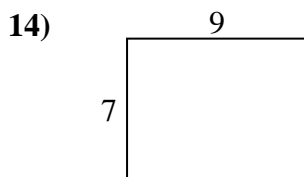
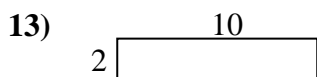
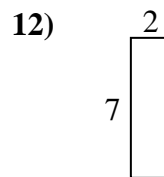
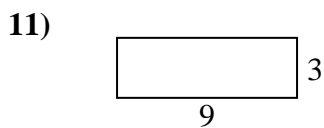
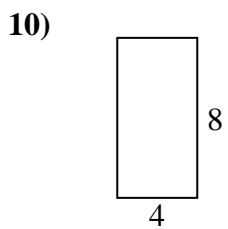
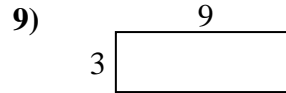
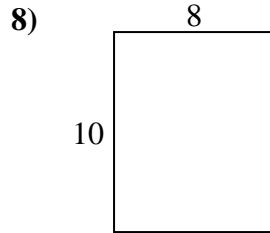
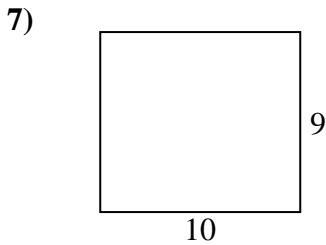
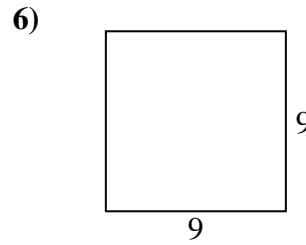
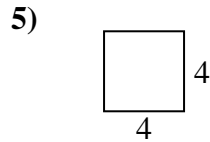
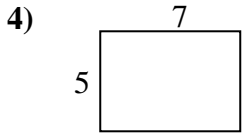
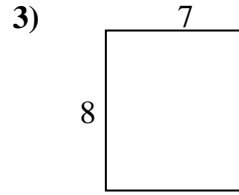
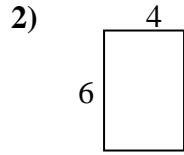
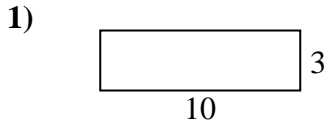


Answers

1. \_\_\_\_\_
2. \_\_\_\_\_
3. \_\_\_\_\_
4. \_\_\_\_\_
5. \_\_\_\_\_
6. \_\_\_\_\_
7. \_\_\_\_\_
8. \_\_\_\_\_
9. \_\_\_\_\_
10. \_\_\_\_\_
11. \_\_\_\_\_
12. \_\_\_\_\_
13. \_\_\_\_\_
14. \_\_\_\_\_
15. \_\_\_\_\_



Find the perimeter and area of each figure. Each figure is in centimeters (cm). Not to scale.



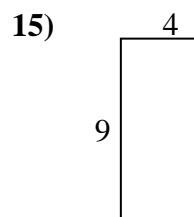
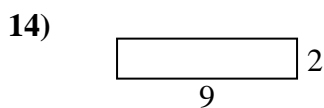
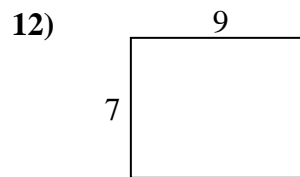
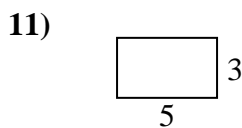
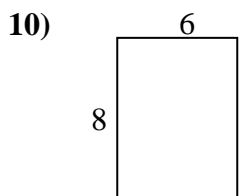
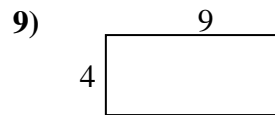

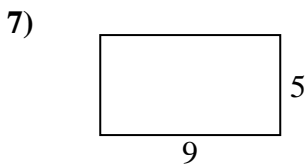
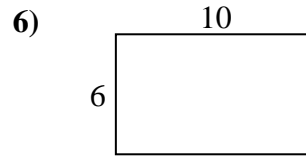
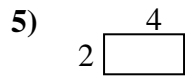
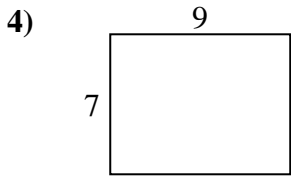
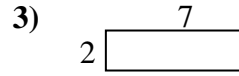
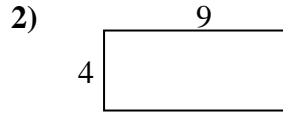
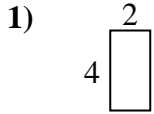
Answers

|     |           |           |
|-----|-----------|-----------|
| 1.  | <u>26</u> | <u>30</u> |
| 2.  | <u>20</u> | <u>24</u> |
| 3.  | <u>30</u> | <u>56</u> |
| 4.  | <u>24</u> | <u>35</u> |
| 5.  | <u>16</u> | <u>16</u> |
| 6.  | <u>36</u> | <u>81</u> |
| 7.  | <u>38</u> | <u>90</u> |
| 8.  | <u>36</u> | <u>80</u> |
| 9.  | <u>24</u> | <u>27</u> |
| 10. | <u>24</u> | <u>32</u> |
| 11. | <u>24</u> | <u>27</u> |
| 12. | <u>18</u> | <u>14</u> |
| 13. | <u>24</u> | <u>20</u> |
| 14. | <u>32</u> | <u>63</u> |
| 15. | <u>18</u> | <u>18</u> |





Find the perimeter and area of each figure. Each figure is in centimeters (cm). Not to scale.

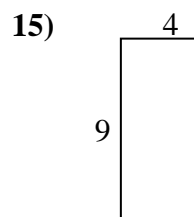
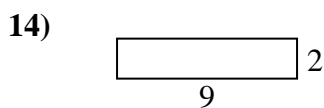
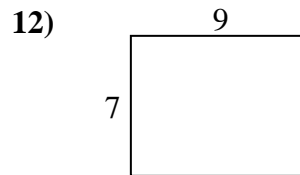
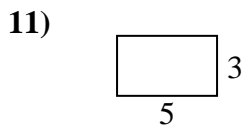
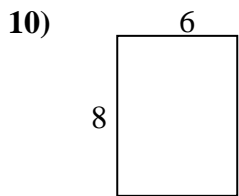
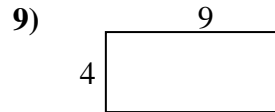

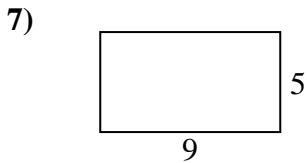
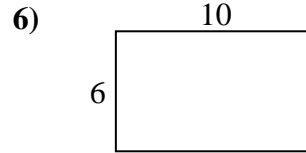
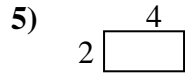
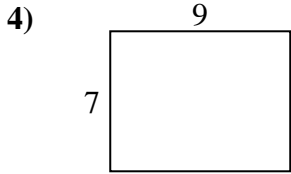
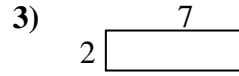
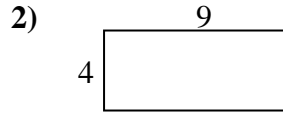
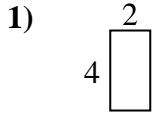


Answers

1. \_\_\_\_\_
2. \_\_\_\_\_
3. \_\_\_\_\_
4. \_\_\_\_\_
5. \_\_\_\_\_
6. \_\_\_\_\_
7. \_\_\_\_\_
8. \_\_\_\_\_
9. \_\_\_\_\_
10. \_\_\_\_\_
11. \_\_\_\_\_
12. \_\_\_\_\_
13. \_\_\_\_\_
14. \_\_\_\_\_
15. \_\_\_\_\_



Find the perimeter and area of each figure. Each figure is in centimeters (cm). Not to scale.

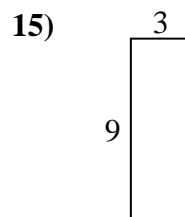
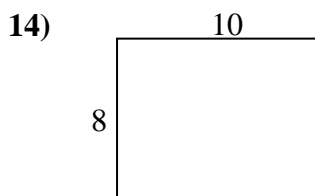
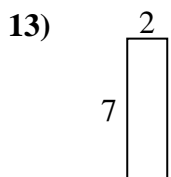
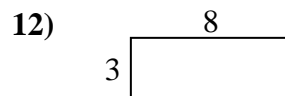
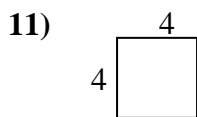
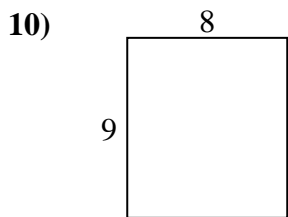
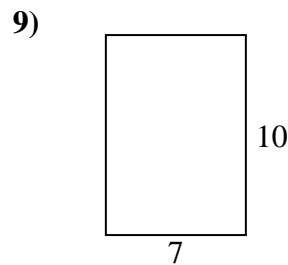
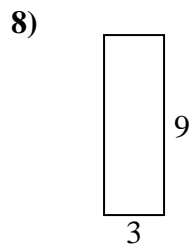
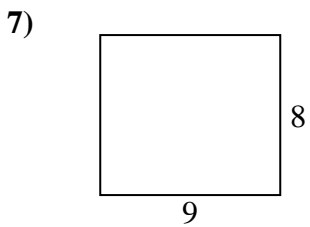
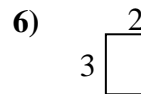
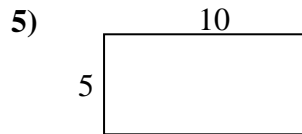
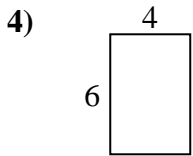
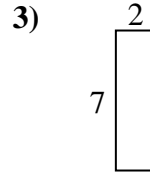
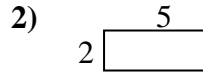
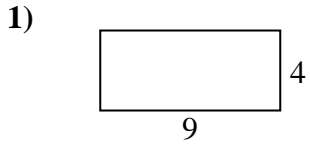


Answers

|     |           |           |
|-----|-----------|-----------|
| 1.  | <u>12</u> | <u>8</u>  |
| 2.  | <u>26</u> | <u>36</u> |
| 3.  | <u>18</u> | <u>14</u> |
| 4.  | <u>32</u> | <u>63</u> |
| 5.  | <u>12</u> | <u>8</u>  |
| 6.  | <u>32</u> | <u>60</u> |
| 7.  | <u>28</u> | <u>45</u> |
| 8.  | <u>24</u> | <u>20</u> |
| 9.  | <u>26</u> | <u>36</u> |
| 10. | <u>28</u> | <u>48</u> |
| 11. | <u>16</u> | <u>15</u> |
| 12. | <u>32</u> | <u>63</u> |
| 13. | <u>24</u> | <u>20</u> |
| 14. | <u>22</u> | <u>18</u> |
| 15. | <u>26</u> | <u>36</u> |



Find the perimeter and area of each figure. Each figure is in centimeters (cm). Not to scale.

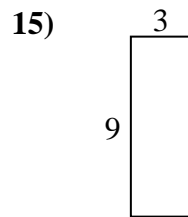
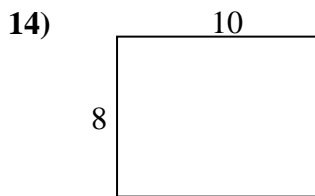
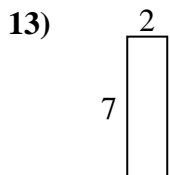
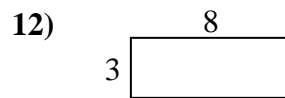
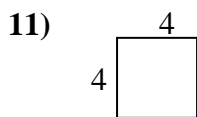
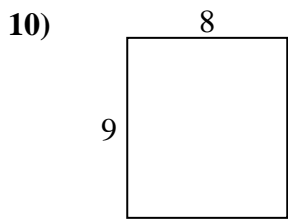
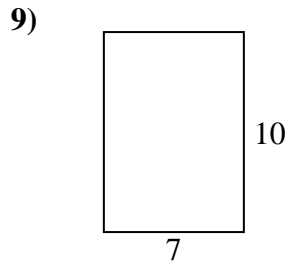
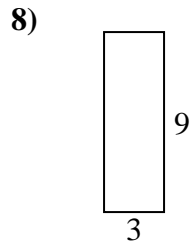
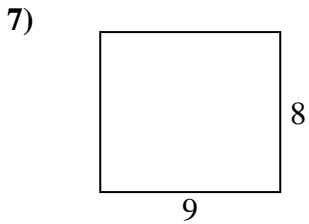
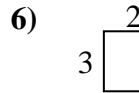
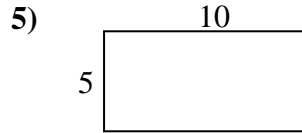
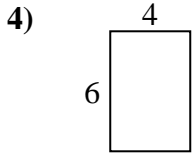
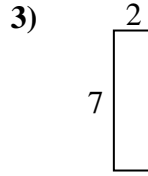
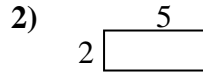
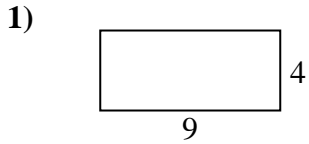


Answers

1. \_\_\_\_\_
2. \_\_\_\_\_
3. \_\_\_\_\_
4. \_\_\_\_\_
5. \_\_\_\_\_
6. \_\_\_\_\_
7. \_\_\_\_\_
8. \_\_\_\_\_
9. \_\_\_\_\_
10. \_\_\_\_\_
11. \_\_\_\_\_
12. \_\_\_\_\_
13. \_\_\_\_\_
14. \_\_\_\_\_
15. \_\_\_\_\_



Find the perimeter and area of each figure. Each figure is in centimeters (cm). Not to scale.



Answers

|     |           |           |
|-----|-----------|-----------|
| 1.  | <u>26</u> | <u>36</u> |
| 2.  | <u>14</u> | <u>10</u> |
| 3.  | <u>18</u> | <u>14</u> |
| 4.  | <u>20</u> | <u>24</u> |
| 5.  | <u>30</u> | <u>50</u> |
| 6.  | <u>10</u> | <u>6</u>  |
| 7.  | <u>34</u> | <u>72</u> |
| 8.  | <u>24</u> | <u>27</u> |
| 9.  | <u>34</u> | <u>70</u> |
| 10. | <u>34</u> | <u>72</u> |
| 11. | <u>16</u> | <u>16</u> |
| 12. | <u>22</u> | <u>24</u> |
| 13. | <u>18</u> | <u>14</u> |
| 14. | <u>36</u> | <u>80</u> |
| 15. | <u>24</u> | <u>27</u> |