

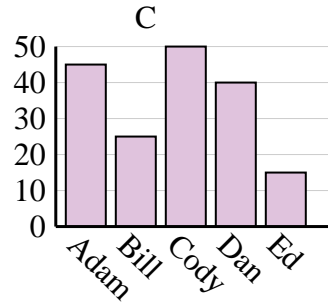
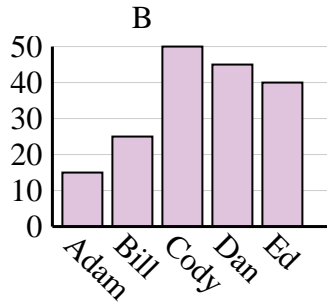
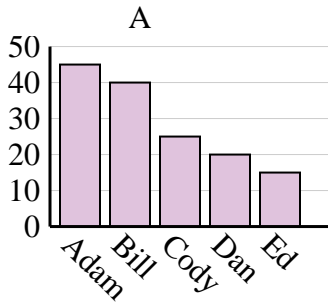


Determine which graph (A, B or C) best represents the information in the table.

Answers

1)

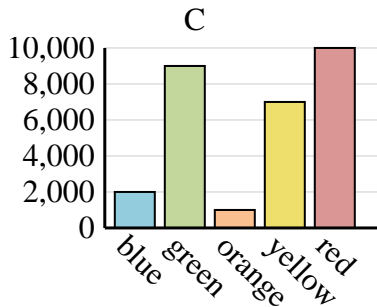
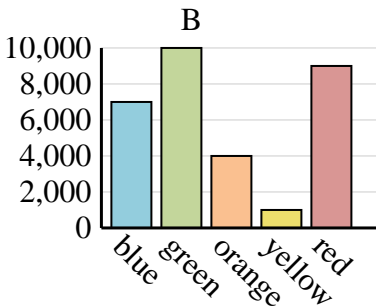
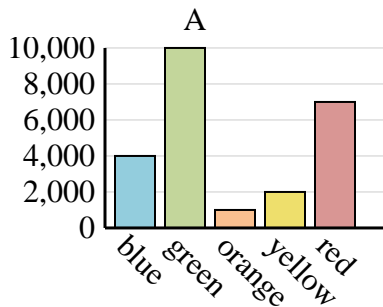
Name	Adam	Bill	Cody	Dan	Ed
Points	45	40	25	20	15



1. \_\_\_\_\_
2. \_\_\_\_\_
3. \_\_\_\_\_
4. \_\_\_\_\_

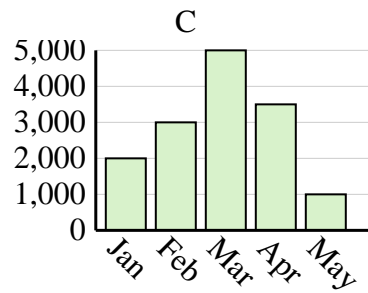
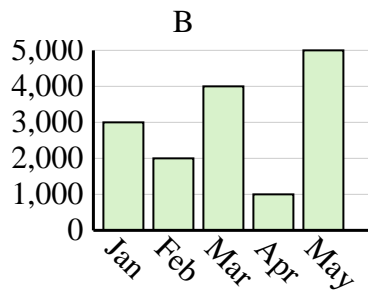
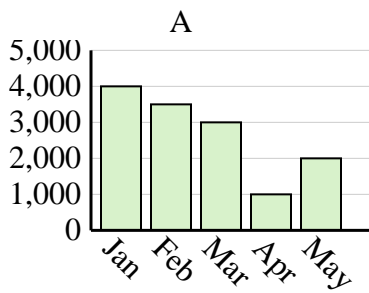
2)

Favorite Color	blue	green	orange	yellow	red
People	4,000	10,000	1,000	2,000	7,000



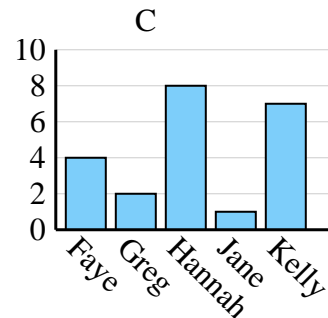
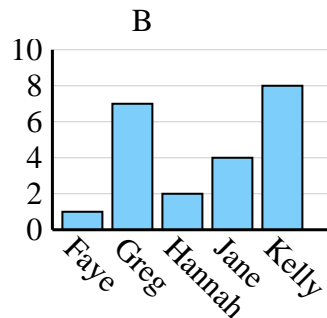
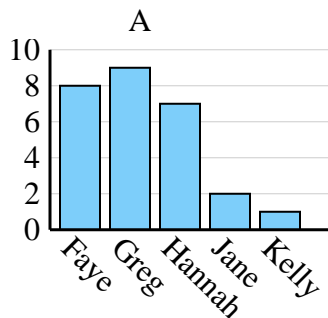
3)

Sales	Jan	Feb	Mar	Apr	May
Month	3,000	2,000	4,000	1,000	5,000



4)

Name	Faye	Greg	Hannah	Jane	Kelly
States Lived In	4	2	8	1	7



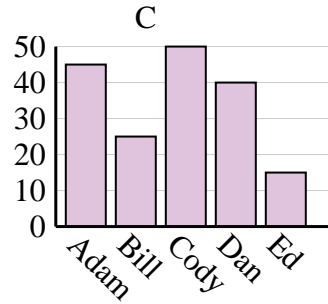
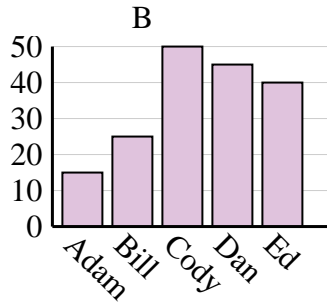
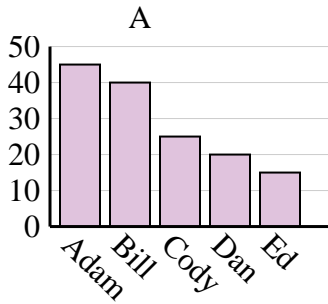


Determine which graph (A, B or C) best represents the information in the table.

Answers

1)

Name	Adam	Bill	Cody	Dan	Ed
Points	45	40	25	20	15



1. **A**

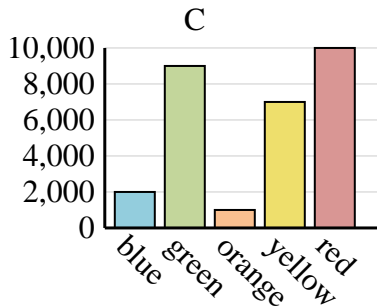
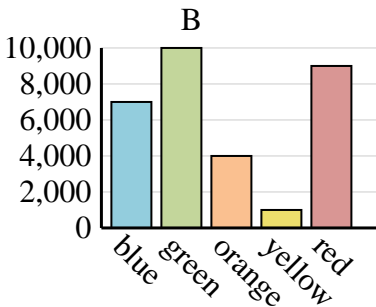
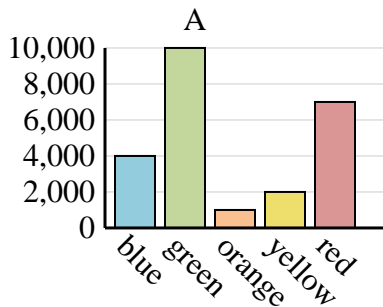
2. **A**

3. **B**

4. **C**

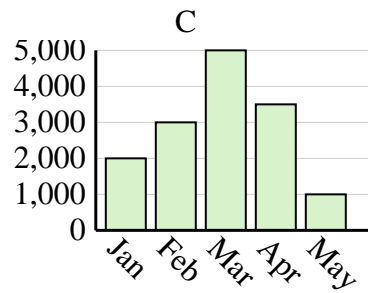
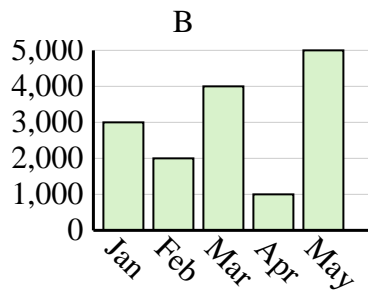
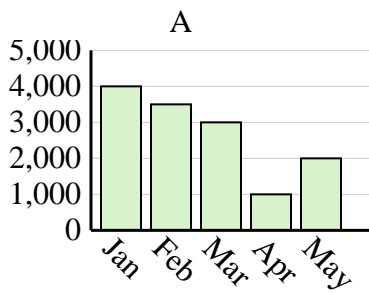
2)

Favorite Color	blue	green	orange	yellow	red
People	4,000	10,000	1,000	2,000	7,000



3)

Sales	Jan	Feb	Mar	Apr	May
Month	3,000	2,000	4,000	1,000	5,000



4)

Name	Faye	Greg	Hannah	Jane	Kelly
States Lived In	4	2	8	1	7

